



Ordne die Beschreibung oben dem visuellen Bild unten zu.

Antworten

- 1)  $\angle BAC$  creating an obtuse angle
- 2)  $\overleftrightarrow{AE}$  intersecting  $\overleftrightarrow{DB}$
- 3)  $\overleftrightarrow{AC}$  perpendicular to  $\overleftrightarrow{AD}$
- 4)  $\overleftrightarrow{BA}$  intersecting  $\overleftrightarrow{AD}$
- 5)  $\overleftrightarrow{AC}$  intersected by  $\overleftrightarrow{BD}$
- 6)  $\overleftrightarrow{AC}$  parallel to  $\overleftrightarrow{EB}$
- 7) Acute  $\angle ABC$  intersecting  $\overleftrightarrow{AD}$
- 8) Acute  $\angle BDE$
- 9)  $\overleftrightarrow{BE}$  intersecting  $\overleftrightarrow{CD}$
- 10)  $\overleftrightarrow{BD}$  intersecting  $\angle ACE$
- 11)  $\overleftrightarrow{AB}$  parallel to  $\overleftrightarrow{CD}$
- 12) Acute  $\angle BED$

1. \_\_\_\_\_
2. \_\_\_\_\_
3. \_\_\_\_\_
4. \_\_\_\_\_
5. \_\_\_\_\_
6. \_\_\_\_\_
7. \_\_\_\_\_
8. \_\_\_\_\_
9. \_\_\_\_\_
10. \_\_\_\_\_
11. \_\_\_\_\_
12. \_\_\_\_\_

**A.**

**B.**

**C.**

**D.**

**E.**

**F.**

**G.**

**H.**

**I.**

**J.**

**K.**

**L.**

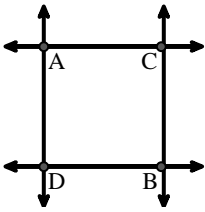


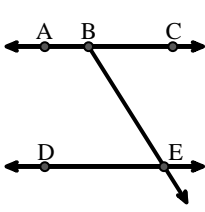
Ordne die Beschreibung oben dem visuellen Bild unten zu.

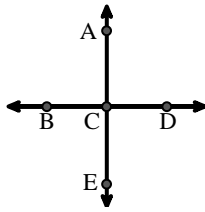
Antworten

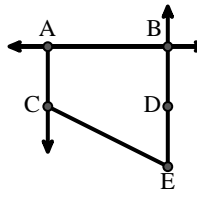
- 1)  $\angle BAC$  creating an obtuse angle
- 2)  $\overleftrightarrow{AE}$  intersecting  $\overleftrightarrow{DB}$
- 3)  $\overleftrightarrow{AC}$  perpendicular to  $\overleftrightarrow{AD}$
- 4)  $\overleftrightarrow{BA}$  intersecting  $\overleftrightarrow{AD}$
- 5)  $\overleftrightarrow{AC}$  intersected by  $\overleftrightarrow{BD}$
- 6)  $\overleftrightarrow{AC}$  parallel to  $\overleftrightarrow{EB}$
- 7) Acute  $\angle ABC$  intersecting  $\overleftrightarrow{AD}$
- 8) Acute  $\angle BDE$
- 9)  $\overleftrightarrow{BE}$  intersecting  $\overleftrightarrow{CD}$
- 10)  $\overleftrightarrow{BD}$  intersecting  $\angle ACE$
- 11)  $\overleftrightarrow{AB}$  parallel to  $\overleftrightarrow{CD}$
- 12) Acute  $\angle BED$

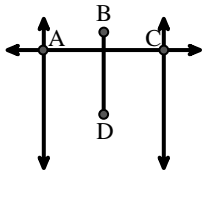
1.   **L**
2.   **C**
3.   **A**
4.   **H**
5.   **E**
6.   **D**
7.   **J**
8.   **F**
9.   **G**
10.   **K**
11.   **I**
12.   **B**

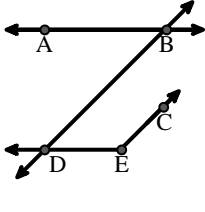
A. 

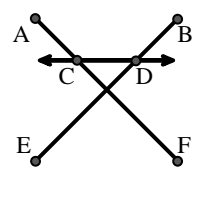
B. 

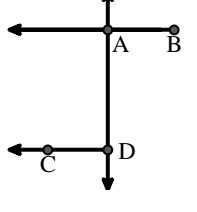
C. 

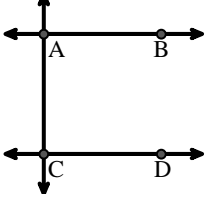
D. 

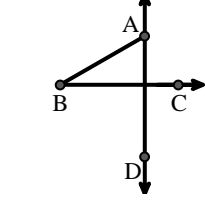
E. 

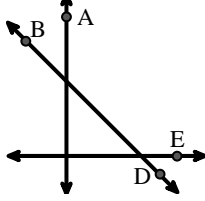
F. 

G. 

H. 

I. 

J. 

K. 

L. 