



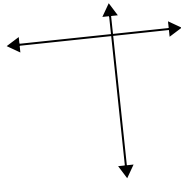
Benutze 'parallel', 'rechtwinklig'(rech) oder 'sich überschneidend'(über) um die Linien zu beschreiben.

Antworten

1)



2)



3)



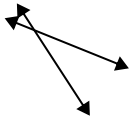
1. _____

2. _____

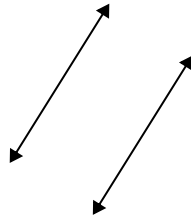
3. _____

4. _____

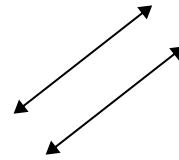
4)



5)



6)



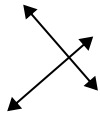
5. _____

6. _____

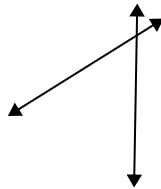
7. _____

8. _____

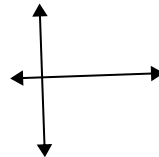
7)



8)



9)



9. _____

10. _____

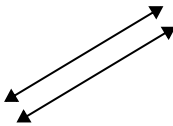
11. _____

12. _____

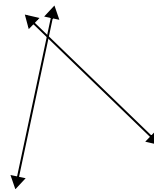
10)



11)



12)

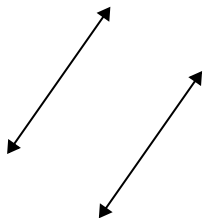


13. _____

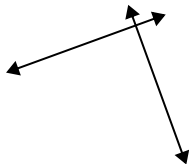
14. _____

15. _____

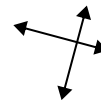
13)



14)



15)



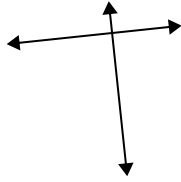


Benutze 'parallel', 'rechtwinklig'(rech) oder 'sich überschneidend'(über) um die Linien zu beschreiben.

1)



2)



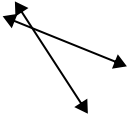
3)



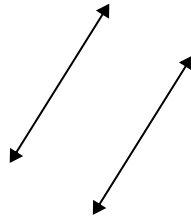
1.

parallel

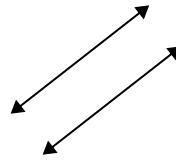
4)



5)



6)



2.

rech & über

3.

über

4.

über

5.

parallel

6.

parallel

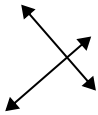
7.

rech & über

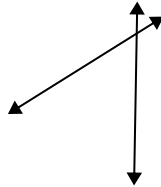
8.

über

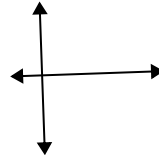
7)



8)



9)



9.

rech & über

10.

über

11.

parallel

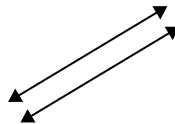
12.

über

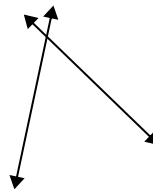
10)



11)



12)



13.

parallel

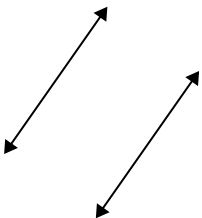
14.

rech & über

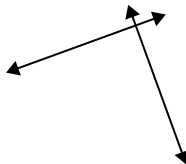
15.

rech & über

13)



14)



15)

