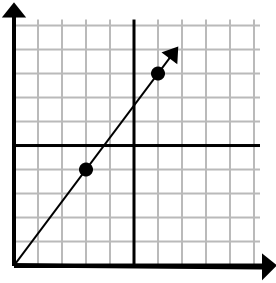




Bestimmen Sie, welche Auswahl einen Punkt auf der Linie darstellt, wenn diese fortgesetzt werden soll.

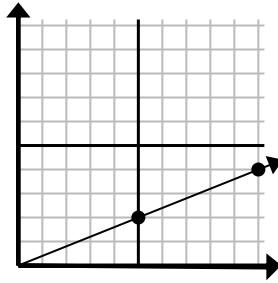
Antworten

1)



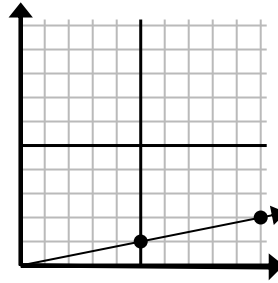
- A. (18 . 24)
 B. (15 . 20)
 C. (9 . 12)
 D. (9 . 5)

2)



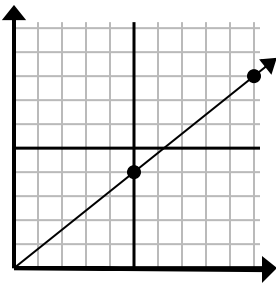
- A. (11 . 7)
 B. (25 . 10)
 C. (30 . 12)
 D. (15 . 6)

3)



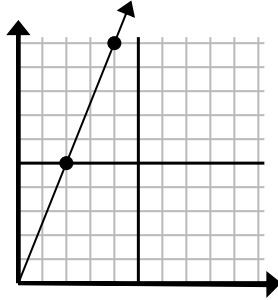
- A. (15 . 3)
 B. (20 . 4)
 C. (30 . 6)
 D. (12 . 6)

4)



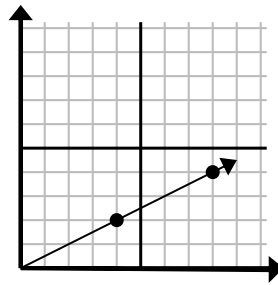
- A. (13 . 5)
 B. (15 . 12)
 C. (30 . 24)
 D. (11 . 6)

5)



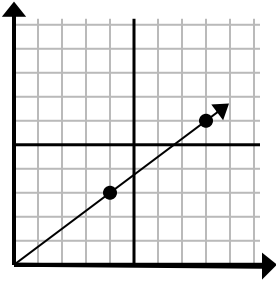
- A. (8 . 20)
 B. (7 . 6)
 C. (6 . 15)
 D. (10 . 25)

6)



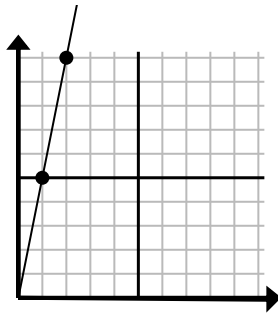
- A. (24 . 12)
 B. (28 . 14)
 C. (12 . 6)
 D. (10 . 4)

7)



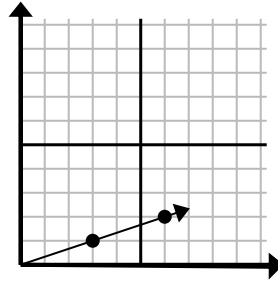
- A. (12 . 9)
 B. (24 . 18)
 C. (12 . 4)
 D. (16 . 12)

8)



- A. (6 . 8)
 B. (3 . 15)
 C. (7 . 7)
 D. (6 . 30)

9)

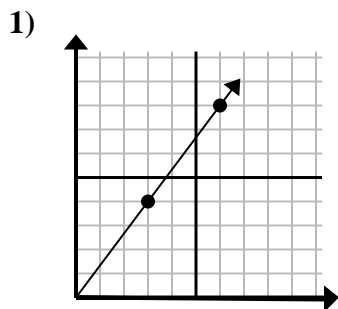


- A. (9 . 3)
 B. (8 . 6)
 C. (7 . 2)
 D. (18 . 6)

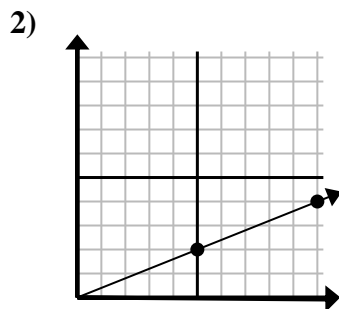
1. _____
 2. _____
 3. _____
 4. _____
 5. _____
 6. _____
 7. _____
 8. _____
 9. _____



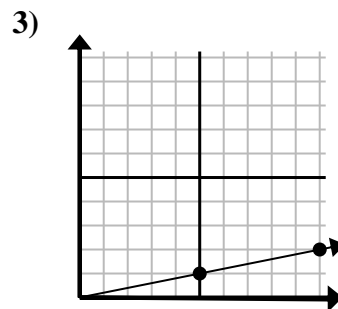
Bestimmen Sie, welche Auswahl einen Punkt auf der Linie darstellt, wenn diese fortgesetzt werden soll.

Antworten

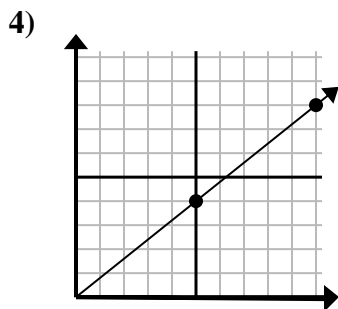
- A. (18 . 24)
 B. (15 . 20)
 C. (9 . 12)
 D. (9 . 5)



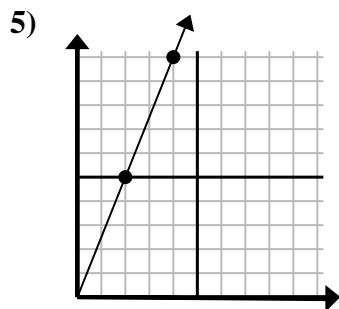
- A. (11 . 7)
 B. (25 . 10)
 C. (30 . 12)
 D. (15 . 6)



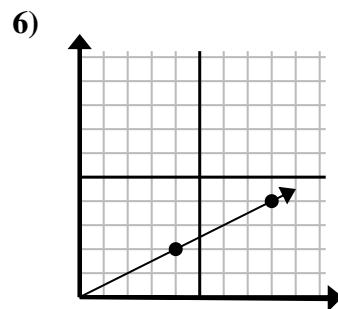
- A. (15 . 3)
 B. (20 . 4)
 C. (30 . 6)
 D. (12 . 6)



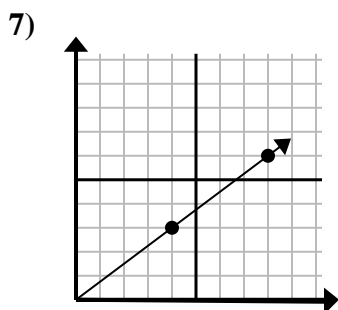
- A. (13 . 5)
 B. (15 . 12)
 C. (30 . 24)
 D. (11 . 6)



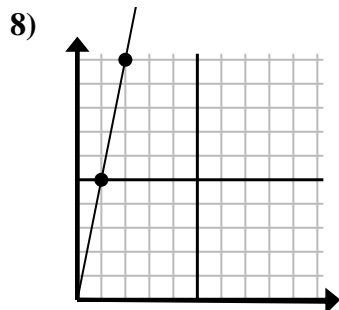
- A. (8 . 20)
 B. (7 . 6)
 C. (6 . 15)
 D. (10 . 25)



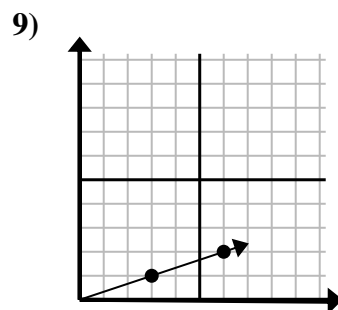
- A. (24 . 12)
 B. (28 . 14)
 C. (12 . 6)
 D. (10 . 4)



- A. (12 . 9)
 B. (24 . 18)
 C. (12 . 4)
 D. (16 . 12)



- A. (6 . 8)
 B. (3 . 15)
 C. (7 . 7)
 D. (6 . 30)



- A. (9 . 3)
 B. (8 . 6)
 C. (7 . 2)
 D. (18 . 6)

1. **C**
 2. **D**
 3. **A**
 4. **B**
 5. **C**
 6. **C**
 7. **A**
 8. **B**
 9. **A**