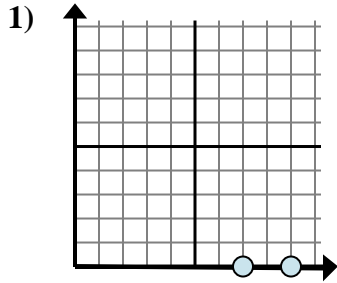


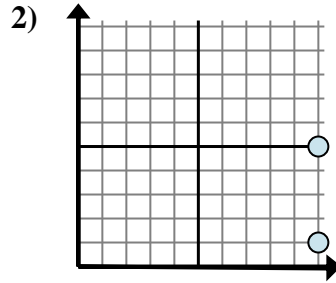


Bestimmen Sie, welcher Ausdruck den Abstand zwischen den beiden Punkten am besten zeigt.

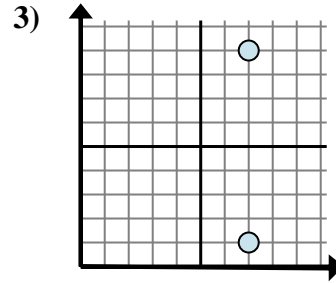
Antworten



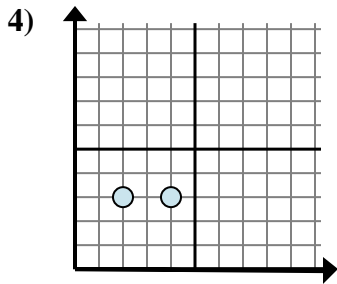
- A. $9 - 0$
- B. $7 - 0$
- C. $0 - 7$
- D. $9 - 7$



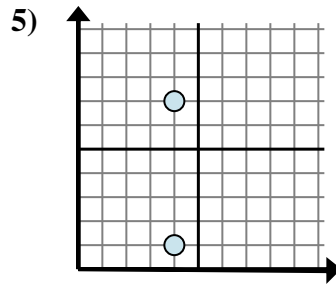
- A. $10 - 1$
- B. $10 - 10$
- C. $5 - 1$
- D. $10 - 10$



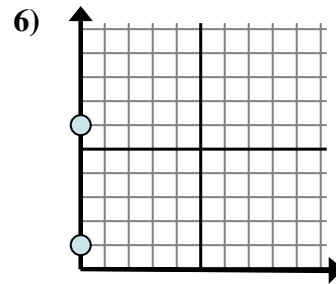
- A. $1 - 9$
- B. $9 - 1$
- C. $7 - 9$
- D. $7 - 7$



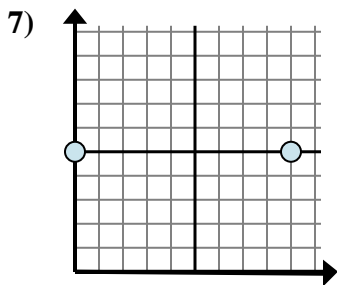
- A. $4 - 2$
- B. $3 - 4$
- C. $3 - 4$
- D. $3 - 3$



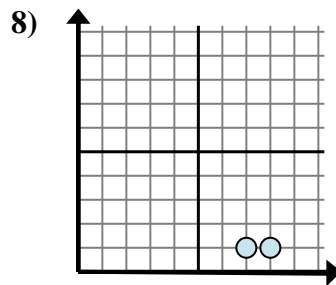
- A. $7 - 4$
- B. $4 - 4$
- C. $4 - 1$
- D. $7 - 1$



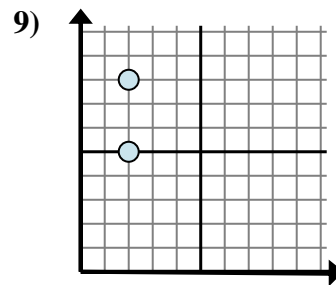
- A. $0 - 0$
- B. $1 - 0$
- C. $6 - 1$
- D. $0 - 6$



- A. $0 - 5$
- B. $9 - 5$
- C. $9 - 0$
- D. $0 - 9$



- A. $8 - 7$
- B. $1 - 1$
- C. $1 - 1$
- D. $8 - 1$



- A. $8 - 5$
- B. $8 - 2$
- C. $5 - 2$
- D. $2 - 8$

1. _____

2. _____

3. _____

4. _____

5. _____

6. _____

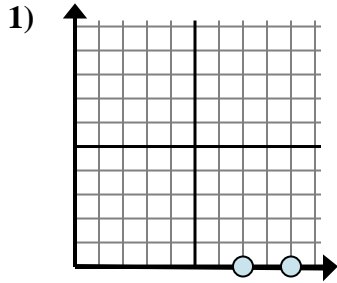
7. _____

8. _____

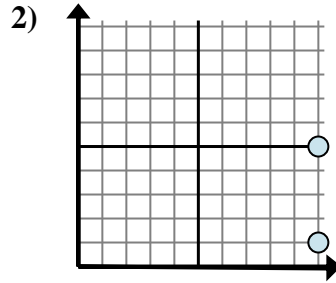
9. _____



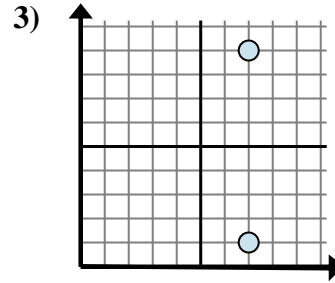
Bestimmen Sie, welcher Ausdruck den Abstand zwischen den beiden Punkten am besten zeigt.



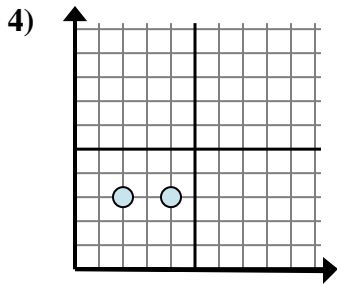
- A. $9 - 0$
 B. $7 - 0$
 C. $0 - 7$
 D. $9 - 7$



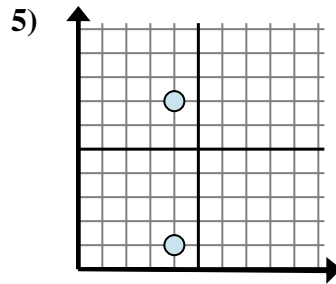
- A. $10 - 1$
 B. $10 - 10$
 C. $5 - 1$
 D. $10 - 10$



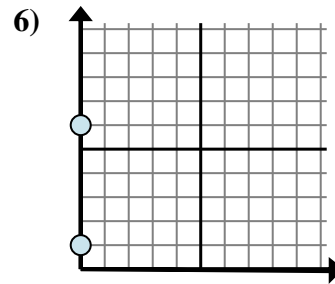
- A. $1 - 9$
 B. $9 - 1$
 C. $7 - 9$
 D. $7 - 7$



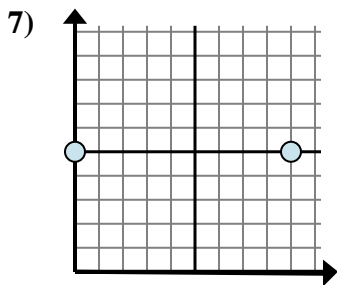
- A. $4 - 2$
 B. $3 - 4$
 C. $3 - 4$
 D. $3 - 3$



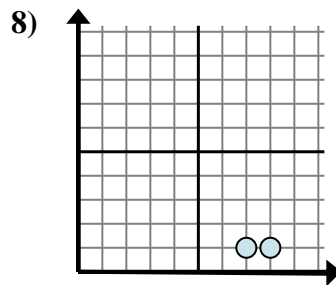
- A. $7 - 4$
 B. $4 - 4$
 C. $4 - 1$
 D. $7 - 1$



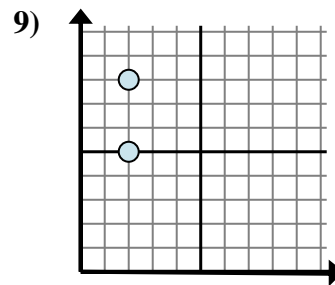
- A. $0 - 0$
 B. $1 - 0$
 C. $6 - 1$
 D. $0 - 6$



- A. $0 - 5$
 B. $9 - 5$
 C. $9 - 0$
 D. $0 - 9$



- A. $8 - 7$
 B. $1 - 1$
 C. $1 - 1$
 D. $8 - 1$



- A. $8 - 5$
 B. $8 - 2$
 C. $5 - 2$
 D. $2 - 8$

Antworten

1. **D**
 2. **C**
 3. **B**
 4. **A**
 5. **D**
 6. **C**
 7. **C**
 8. **A**
 9. **A**