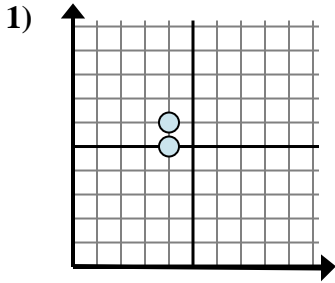


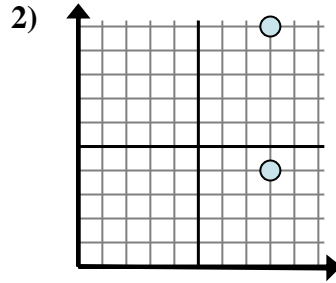


Bestimmen Sie, welcher Ausdruck den Abstand zwischen den beiden Punkten am besten zeigt.

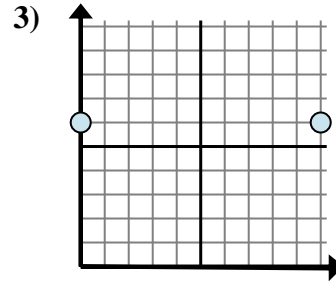
Antworten



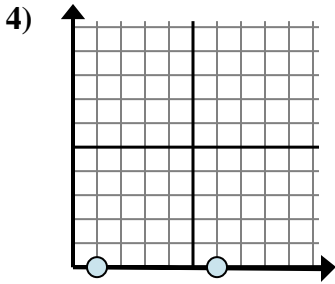
- A. $6 - 5$
- B. $4 - 4$
- C. $5 - 6$
- D. $6 - 4$



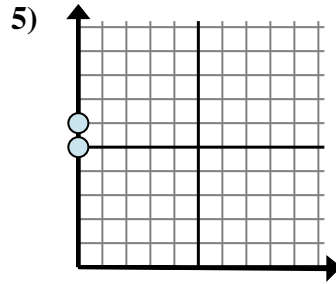
- A. $4 - 10$
- B. $8 - 8$
- C. $8 - 10$
- D. $10 - 4$



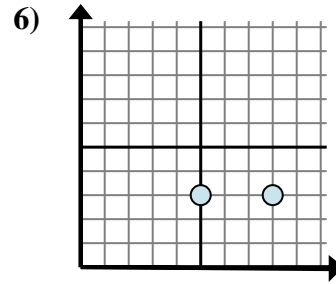
- A. $10 - 0$
- B. $0 - 10$
- C. $6 - 0$
- D. $6 - 0$



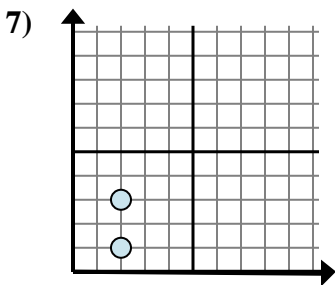
- A. $0 - 0$
- B. $0 - 0$
- C. $0 - 1$
- D. $6 - 1$



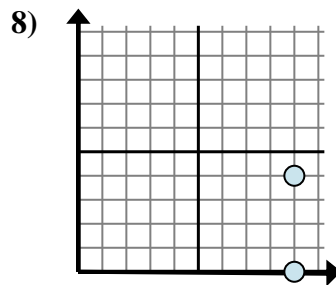
- A. $0 - 6$
- B. $0 - 0$
- C. $6 - 5$
- D. $6 - 0$



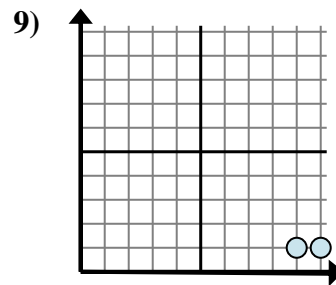
- A. $3 - 8$
- B. $8 - 3$
- C. $3 - 3$
- D. $8 - 5$



- A. $2 - 2$
- B. $3 - 2$
- C. $3 - 1$
- D. $2 - 3$



- A. $0 - 4$
- B. $9 - 4$
- C. $4 - 0$
- D. $9 - 9$

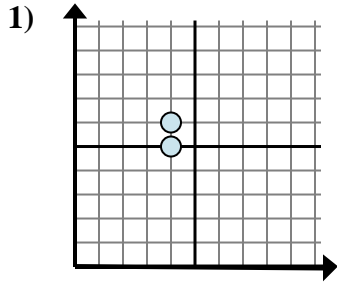


- A. $1 - 9$
- B. $10 - 9$
- C. $1 - 9$
- D. $9 - 1$

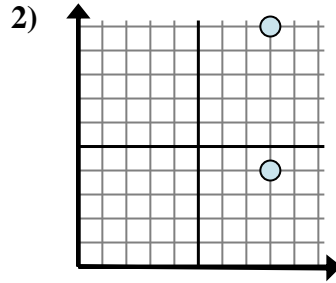
- 1. _____
- 2. _____
- 3. _____
- 4. _____
- 5. _____
- 6. _____
- 7. _____
- 8. _____
- 9. _____



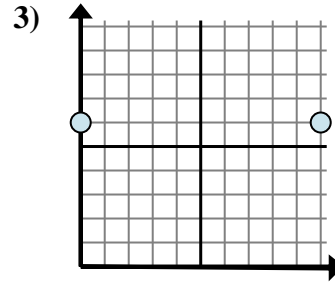
Bestimmen Sie, welcher Ausdruck den Abstand zwischen den beiden Punkten am besten zeigt.



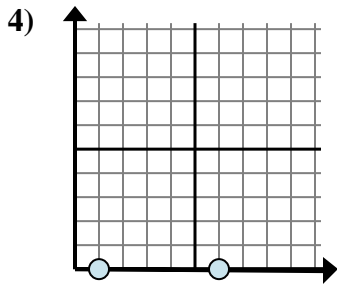
- A. $6 - 5$
 B. $4 - 4$
 C. $5 - 6$
 D. $6 - 4$



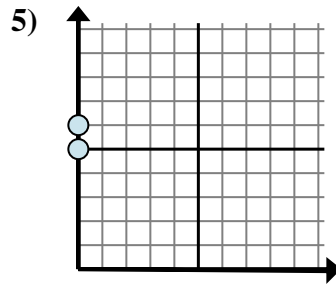
- A. $4 - 10$
 B. $8 - 8$
 C. $8 - 10$
 D. $10 - 4$



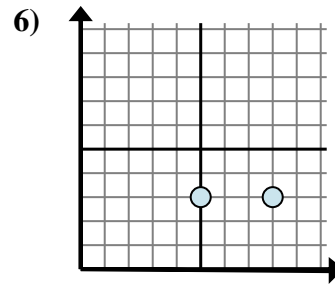
- A. $10 - 0$
 B. $0 - 10$
 C. $6 - 0$
 D. $6 - 0$



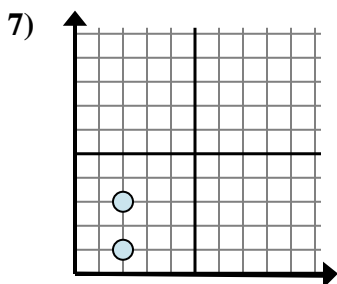
- A. $0 - 0$
 B. $0 - 0$
 C. $0 - 1$
 D. $6 - 1$



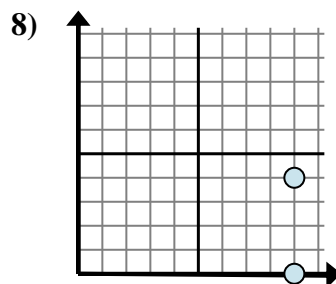
- A. $0 - 6$
 B. $0 - 0$
 C. $6 - 5$
 D. $6 - 0$



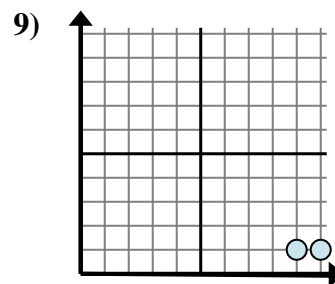
- A. $3 - 8$
 B. $8 - 3$
 C. $3 - 3$
 D. $8 - 5$



- A. $2 - 2$
 B. $3 - 2$
 C. $3 - 1$
 D. $2 - 3$



- A. $0 - 4$
 B. $9 - 4$
 C. $4 - 0$
 D. $9 - 9$



- A. $1 - 9$
 B. $10 - 9$
 C. $1 - 9$
 D. $9 - 1$

Antworten

1. **A**
 2. **D**
 3. **A**
 4. **D**
 5. **C**
 6. **D**
 7. **C**
 8. **C**
 9. **B**