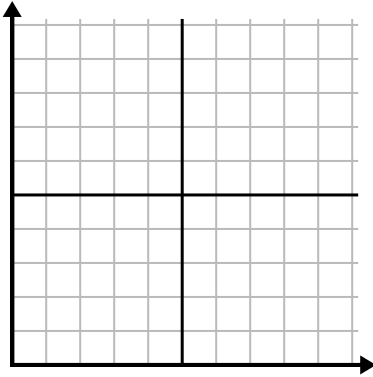




Füllen Sie das Raster mithilfe des Diagramms aus.

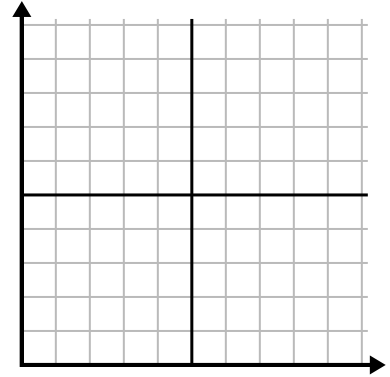
1)

Tag	1	2	3	4	5	6
Kalorien verbrannt	80	60	140	100	40	180



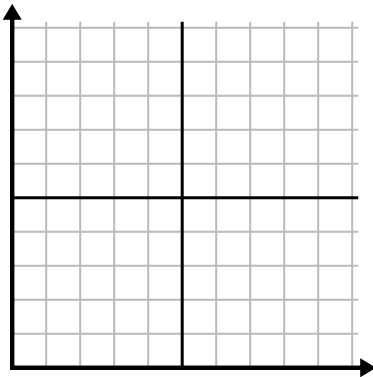
2)

Monat	1	2	3	4	5
Stromrechnungspreis	225	250	175	150	75



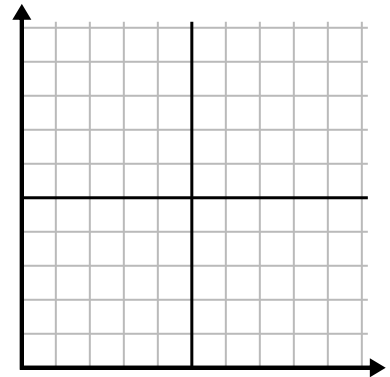
3)

Stunde	1	2	3	4	5
Verkaufte Menge	1	9	2	6	5



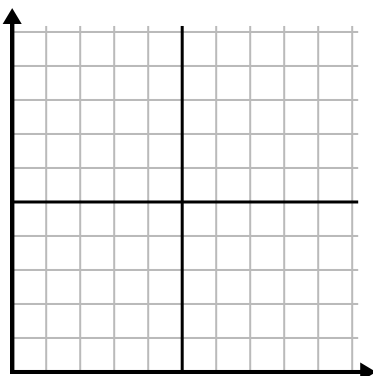
4)

Tag	1	2	3	4	5	6	7
Gesendete Texte	5	10	50	30	20	15	25



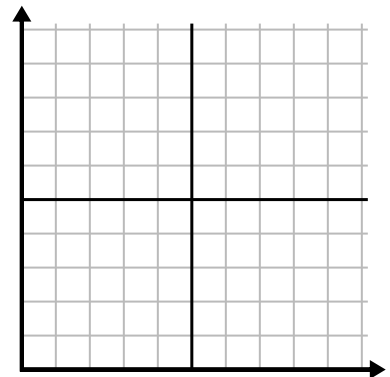
5)

Woche	1	2	3	4	5	6	7
Verwendetes Wasser (Gallonen)	90	10	80	100	50	20	70



6)

Tag	1	2	3	4	5	6	7
Geld ausgegeben	8	7	6	5	4	3	10

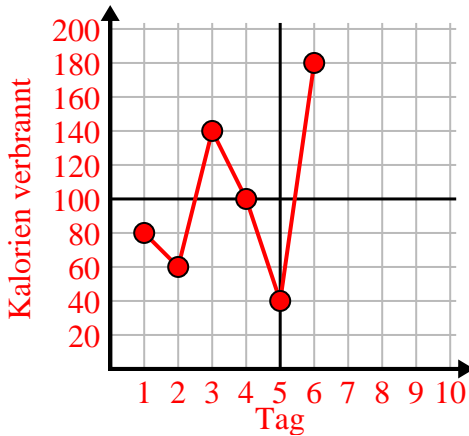




Füllen Sie das Raster mithilfe des Diagramms aus.

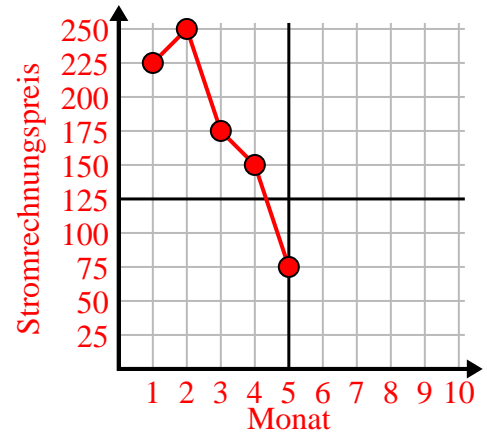
1)

Tag	1	2	3	4	5	6
Kalorien verbrannt	80	60	140	100	40	180



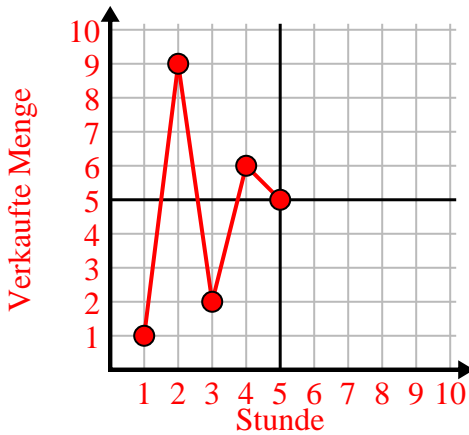
2)

Monat	1	2	3	4	5
Stromrechnungspreis	225	250	175	150	75



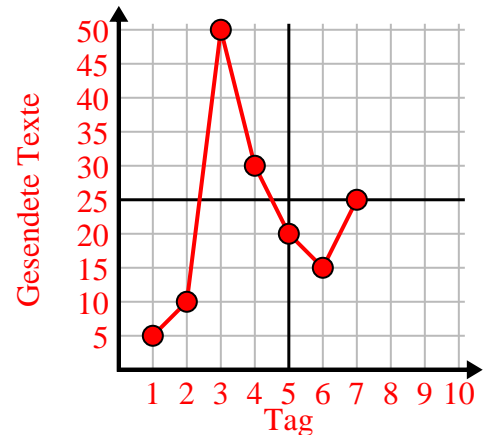
3)

Stunde	1	2	3	4	5
Verkaufte Menge	1	9	2	6	5



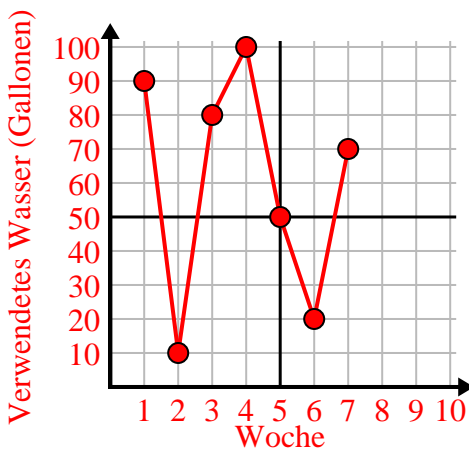
4)

Tag	1	2	3	4	5	6	7
Gesendete Texte	5	10	50	30	20	15	25



5)

Woche	1	2	3	4	5	6	7
Verwendetes Wasser (Gallonen)	90	10	80	100	50	20	70



6)

Tag	1	2	3	4	5	6	7
Geld ausgegeben	8	7	6	5	4	3	10

