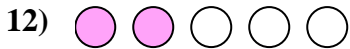
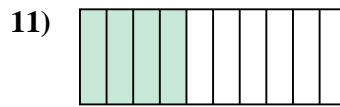
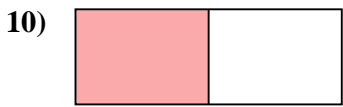
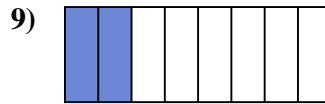
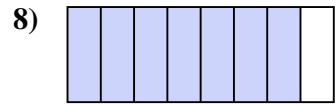
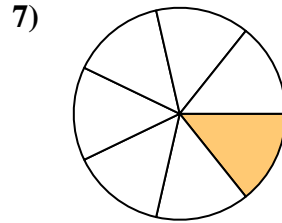
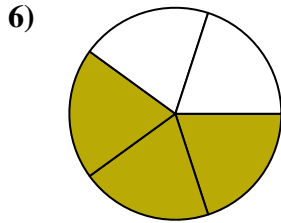
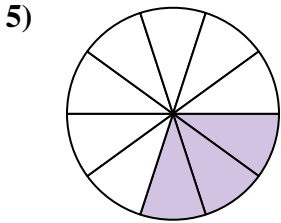

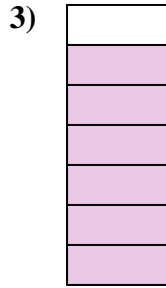






Stelle fest, ob die schraffierte Fläche 'mehr', 'weniger' oder 'gleich' zur Hälfte ist.

Antworten



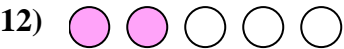
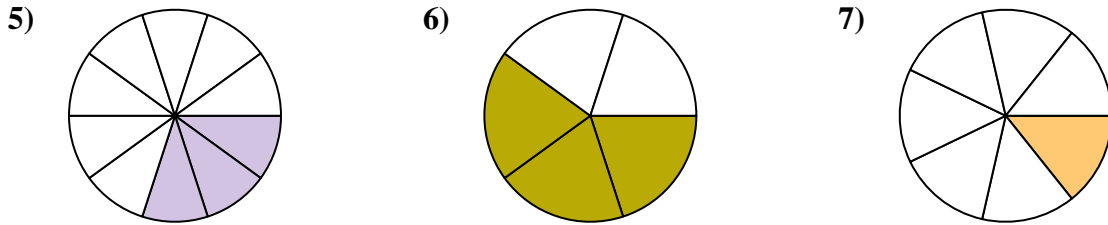
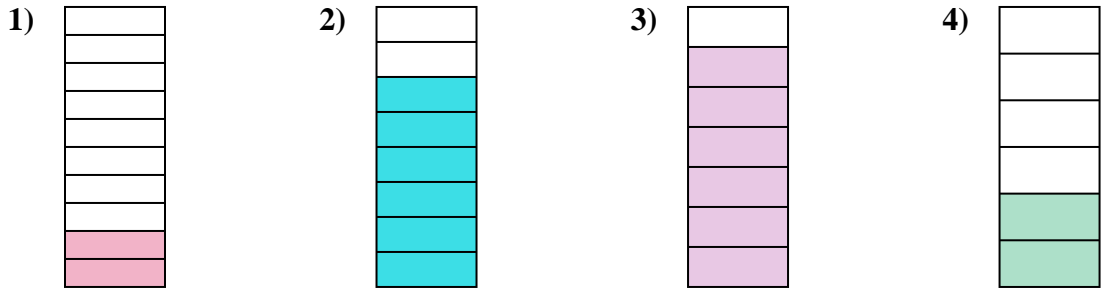
1. _____
2. _____
3. _____
4. _____
5. _____
6. _____
7. _____
8. _____
9. _____
10. _____
11. _____
12. _____
13. _____
14. _____
15. _____
16. _____
17. _____
18. _____
19. _____
20. _____

1-10	95	90	85	80	75	70	65	60	55	50
11-20	45	40	35	30	25	20	15	10	5	0



Stelle fest, ob die schraffierte Fläche 'mehr', 'weniger' oder 'gleich' zur Hälfte ist.

Antworten


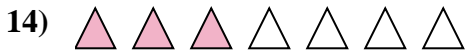
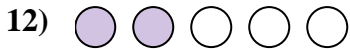
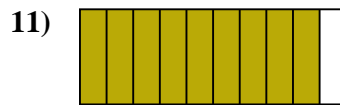
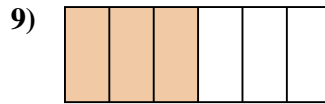
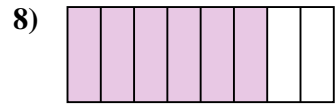
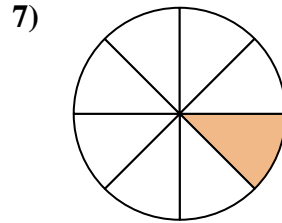
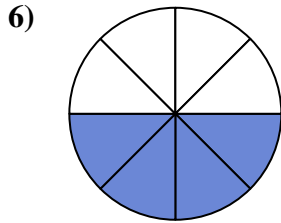
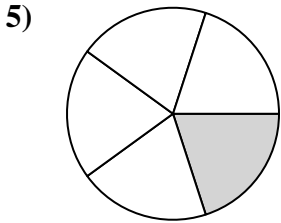
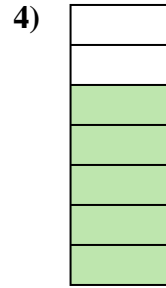
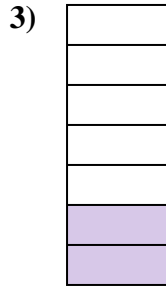




1. weniger
2. mehr
3. mehr
4. weniger
5. weniger
6. mehr
7. weniger
8. mehr
9. weniger
10. gleich
11. weniger
12. weniger
13. mehr
14. mehr
15. weniger
16. weniger
17. gleich
18. weniger
19. weniger
20. mehr



Stelle fest, ob die schraffierte Fläche 'mehr', 'weniger' oder 'gleich' zur Hälfte ist.

Antworten



1. _____

2. _____

3. _____

4. _____

5. _____

6. _____

7. _____

8. _____

9. _____

10. _____

11. _____

12. _____

13. _____

14. _____

15. _____

16. _____

17. _____


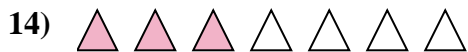

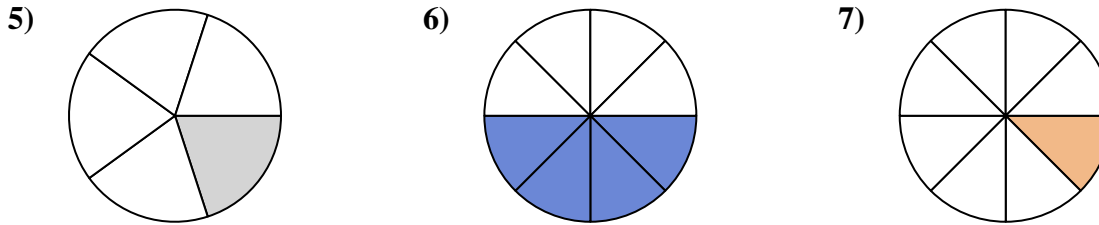
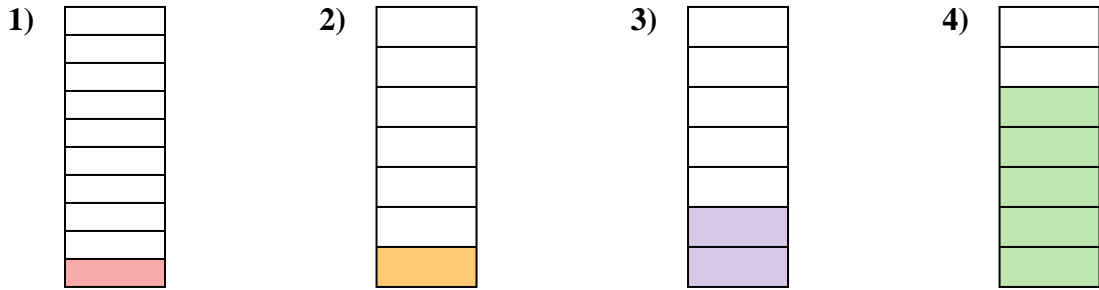
18. _____

19. _____

20. _____



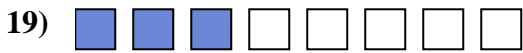
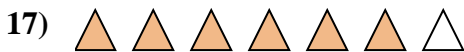

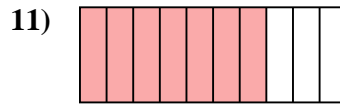

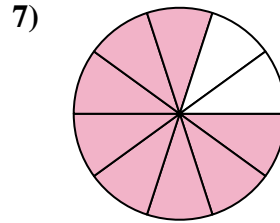
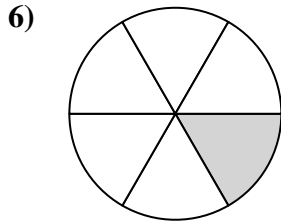
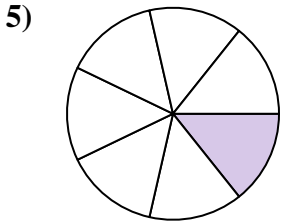

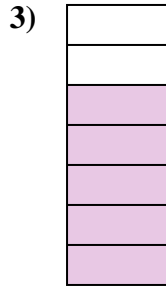
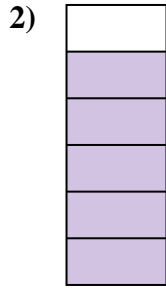

Stelle fest, ob die schraffierte Fläche 'mehr', 'weniger' oder 'gleich' zur Hälfte ist.

Antworten1. weniger2. weniger3. weniger4. mehr5. weniger6. gleich7. weniger8. mehr9. gleich10. mehr11. mehr12. weniger13. mehr14. weniger15. mehr16. weniger17. weniger18. mehr19. gleich20. weniger



Stelle fest, ob die schraffierte Fläche 'mehr', 'weniger' oder 'gleich' zur Hälfte ist.

Antworten



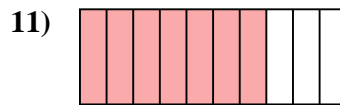

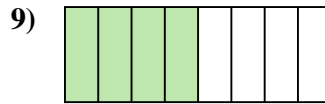
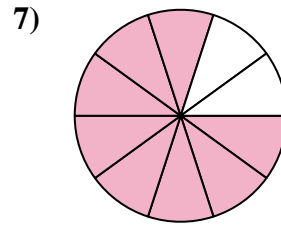
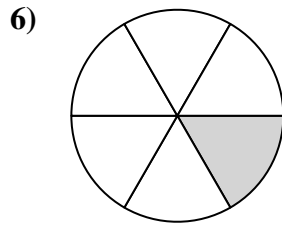
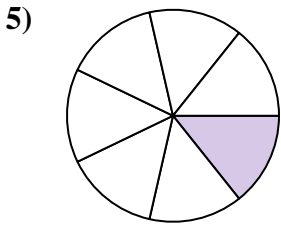
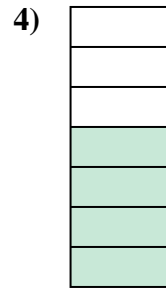
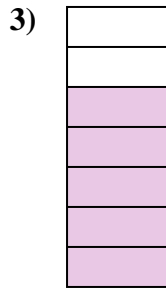
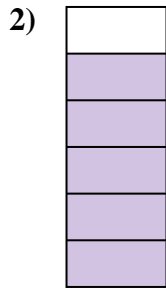
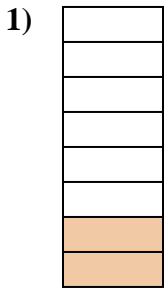


1. _____
2. _____
3. _____
4. _____
5. _____
6. _____
7. _____
8. _____
9. _____
10. _____
11. _____
12. _____
13. _____
14. _____
15. _____
16. _____
17. _____
18. _____
19. _____
20. _____



Stelle fest, ob die schraffierte Fläche 'mehr', 'weniger' oder 'gleich' zur Hälfte ist.

Antworten



1. weniger

2. mehr

3. mehr

4. mehr

5. weniger

6. weniger

7. mehr

8. weniger

9. gleich

10. gleich

11. mehr

12. mehr

13. weniger

14. gleich

15. gleich

16. weniger

17. mehr

18. mehr


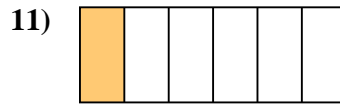
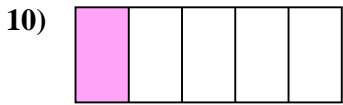
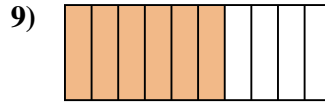
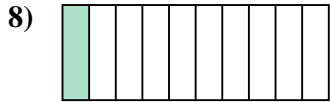
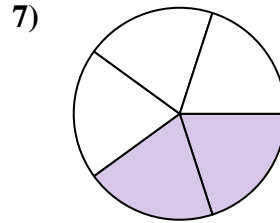
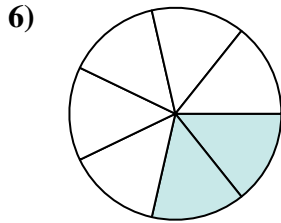
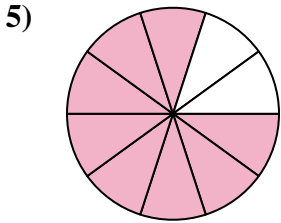

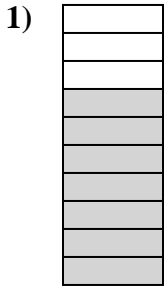
19. weniger

20. mehr



Stelle fest, ob die schraffierte Fläche 'mehr', 'weniger' oder 'gleich' zur Hälfte ist.

Antworten



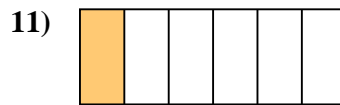
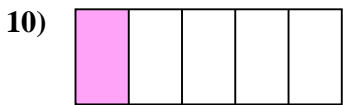
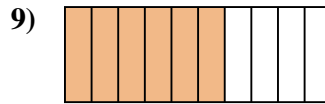
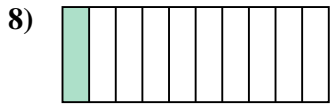
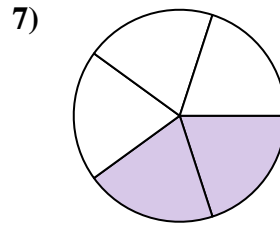
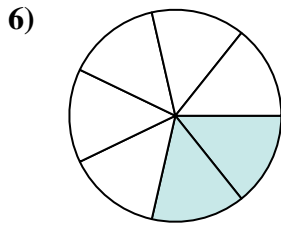
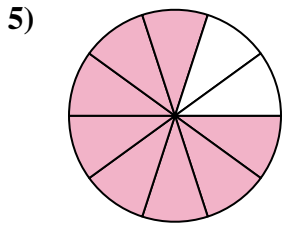


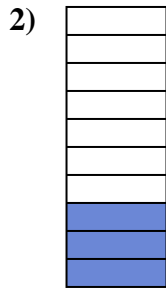

1. _____
2. _____
3. _____
4. _____
5. _____
6. _____
7. _____
8. _____
9. _____
10. _____
11. _____
12. _____
13. _____
14. _____
15. _____
16. _____
17. _____
18. _____
19. _____
20. _____

1-10	95	90	85	80	75	70	65	60	55	50
11-20	45	40	35	30	25	20	15	10	5	0



Stelle fest, ob die schraffierte Fläche 'mehr', 'weniger' oder 'gleich' zur Hälfte ist.

Antworten



1. mehr

2. weniger

3. weniger

4. mehr

5. mehr

6. weniger

7. weniger

8. weniger

9. mehr

10. weniger

11. weniger

12. mehr

13. gleich

14. mehr

15. weniger

16. weniger

17. gleich

18. weniger

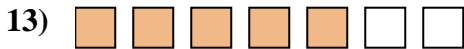
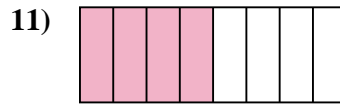
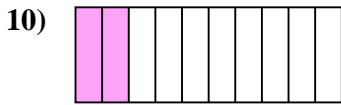
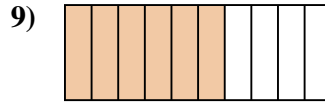
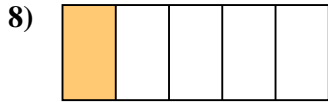
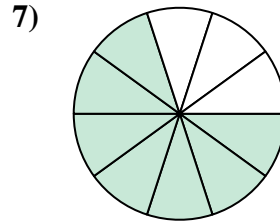
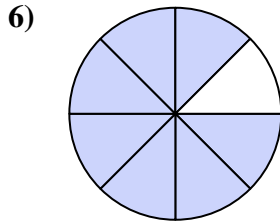
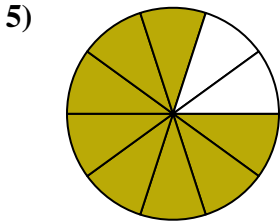


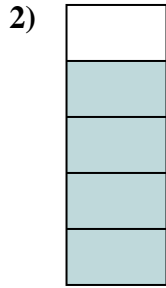
19. weniger

20. gleich



Stelle fest, ob die schraffierte Fläche 'mehr', 'weniger' oder 'gleich' zur Hälfte ist.

Antworten



1. _____

2. _____

3. _____

4. _____

5. _____

6. _____

7. _____

8. _____

9. _____

10. _____

11. _____

12. _____

13. _____

14. _____

15. _____

16. _____

17. _____

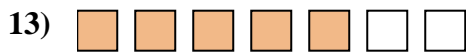

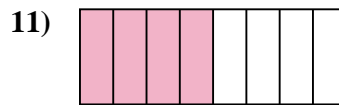
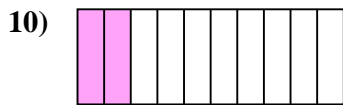
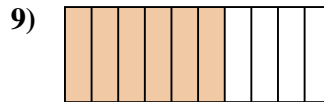

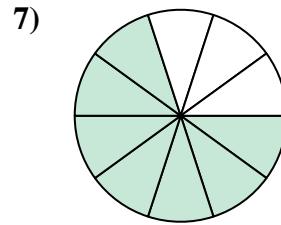
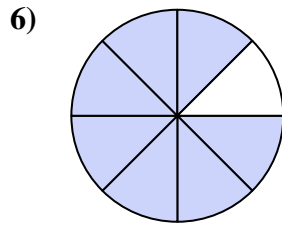
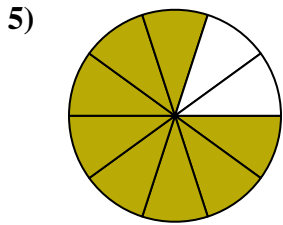


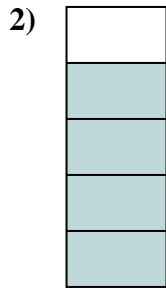

18. _____

19. _____

20. _____



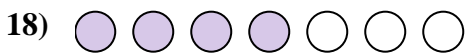




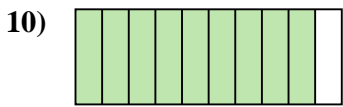
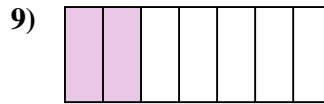
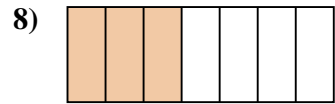
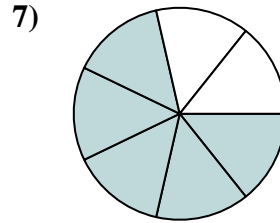
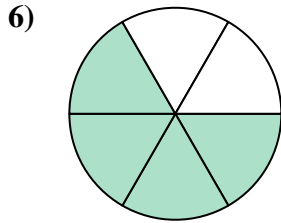
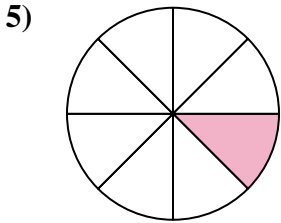



Stelle fest, ob die schraffierte Fläche 'mehr', 'weniger' oder 'gleich' zur Hälfte ist.

Antworten1. weniger2. mehr3. weniger4. weniger5. mehr6. mehr7. mehr8. weniger9. mehr10. weniger11. gleich12. mehr13. mehr14. gleich15. gleich16. weniger17. weniger18. mehr19. weniger20. weniger



Stelle fest, ob die schraffierte Fläche 'mehr', 'weniger' oder 'gleich' zur Hälfte ist.

Antworten






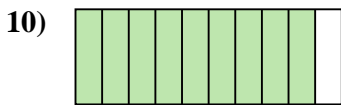
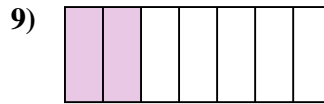
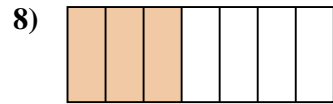
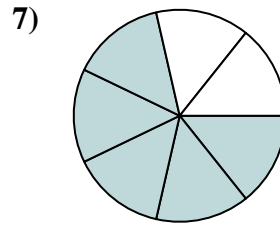
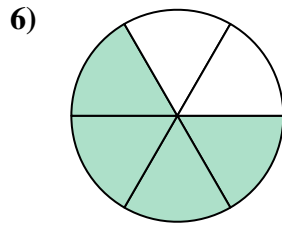
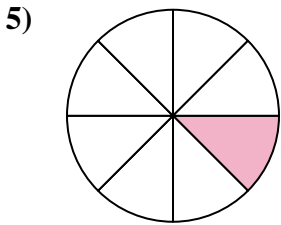


1. _____
2. _____
3. _____
4. _____
5. _____
6. _____
7. _____
8. _____
9. _____
10. _____
11. _____
12. _____
13. _____
14. _____
15. _____
16. _____
17. _____
18. _____
19. _____
20. _____

1-10	95	90	85	80	75	70	65	60	55	50
11-20	45	40	35	30	25	20	15	10	5	0



Stelle fest, ob die schraffierte Fläche 'mehr', 'weniger' oder 'gleich' zur Hälfte ist.

Antworten



1. mehr

2. gleich

3. weniger

4. weniger

5. weniger

6. mehr

7. mehr

8. weniger

9. weniger

10. mehr

11. gleich

12. mehr

13. weniger

14. weniger

15. weniger

16. mehr

17. weniger

18. mehr


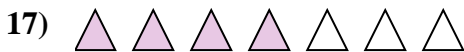
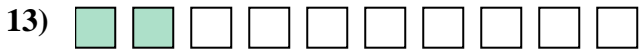

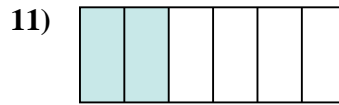
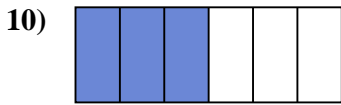
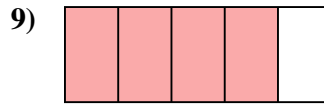
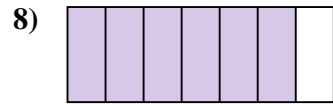
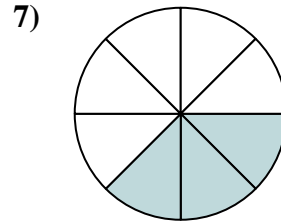
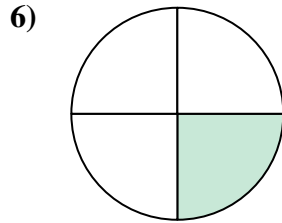
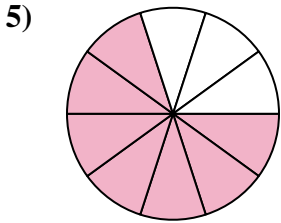


19. mehr

20. gleich



Stelle fest, ob die schraffierte Fläche 'mehr', 'weniger' oder 'gleich' zur Hälfte ist.

Antworten



1. _____

2. _____

3. _____

4. _____

5. _____

6. _____

7. _____

8. _____

9. _____

10. _____

11. _____

12. _____

13. _____

14. _____

15. _____

16. _____

17. _____

18. _____




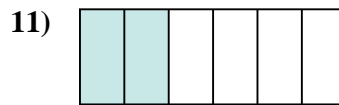
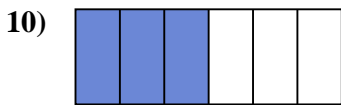
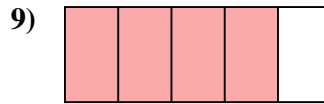
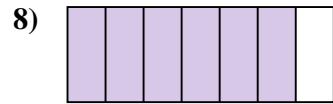
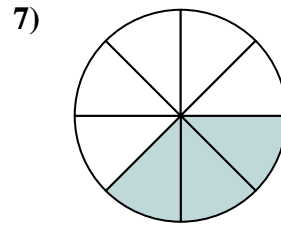
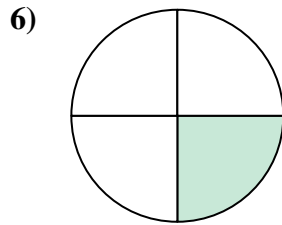
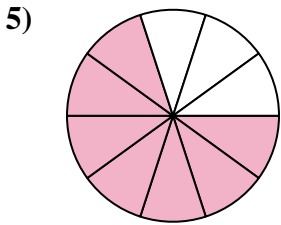

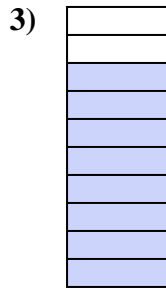

19. _____

20. _____



Stelle fest, ob die schraffierte Fläche 'mehr', 'weniger' oder 'gleich' zur Hälfte ist.

Antworten



1. gleich

2. weniger

3. mehr

4. mehr

5. mehr

6. weniger

7. weniger

8. mehr

9. mehr

10. gleich

11. weniger

12. gleich

13. weniger

14. mehr

15. weniger

16. mehr

17. mehr

18. weniger

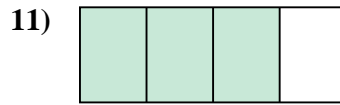
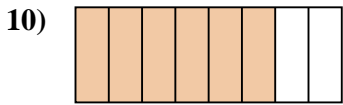
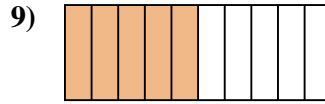
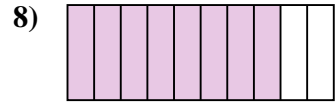
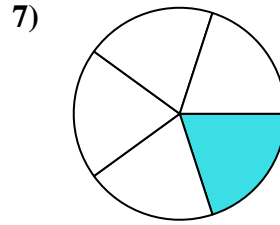
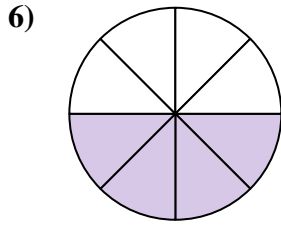
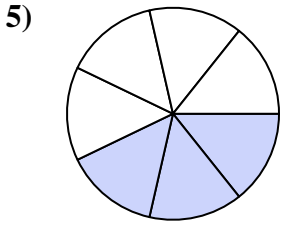

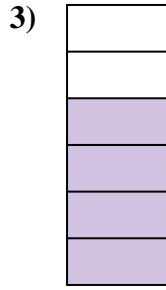
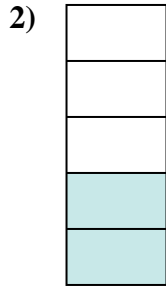

19. gleich

20. weniger



Stelle fest, ob die schraffierte Fläche 'mehr', 'weniger' oder 'gleich' zur Hälfte ist.

Antworten



1. _____

2. _____

3. _____

4. _____

5. _____

6. _____

7. _____

8. _____

9. _____

10. _____

11. _____

12. _____

13. _____

14. _____

15. _____

16. _____

17. _____

18. _____


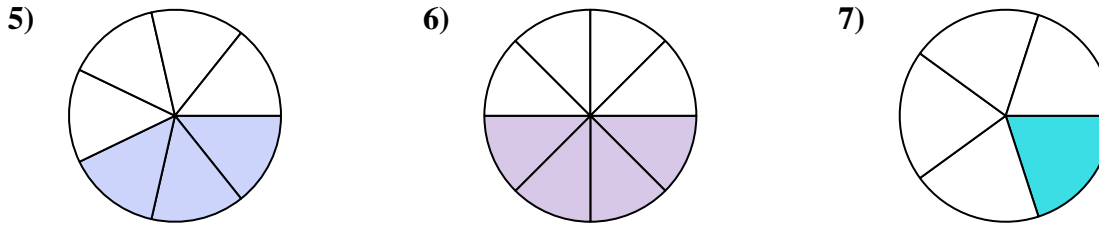
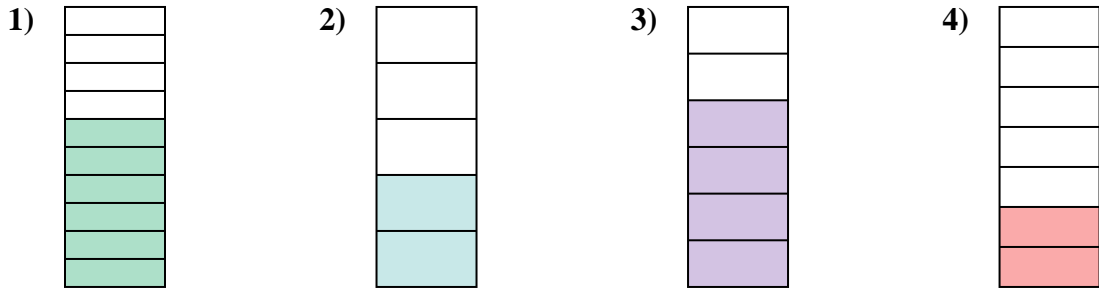
19. _____

20. _____



Stelle fest, ob die schraffierte Fläche 'mehr', 'weniger' oder 'gleich' zur Hälfte ist.

Antworten

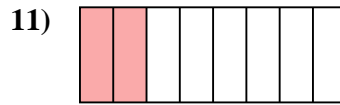
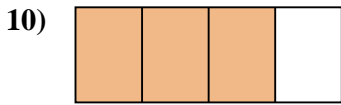
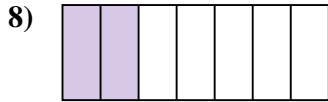
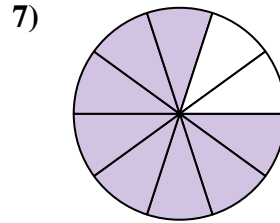
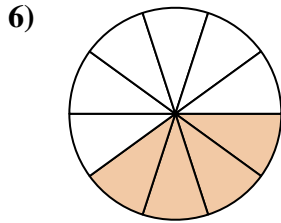
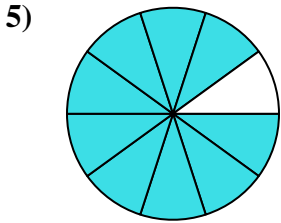

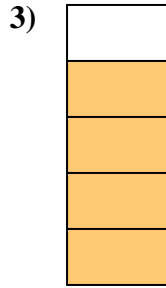
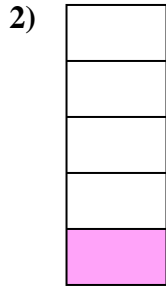



1. mehr
2. weniger
3. mehr
4. weniger
5. weniger
6. gleich
7. weniger
8. mehr
9. gleich
10. mehr
11. mehr
12. weniger
13. mehr
14. mehr
15. weniger
16. mehr
17. weniger
18. weniger
19. weniger
20. mehr



Stelle fest, ob die schraffierte Fläche 'mehr', 'weniger' oder 'gleich' zur Hälfte ist.

Antworten



1. _____

2. _____

3. _____

4. _____

5. _____

6. _____

7. _____

8. _____

9. _____

10. _____

11. _____

12. _____

13. _____

14. _____

15. _____

16. _____

17. _____

18. _____


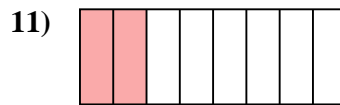
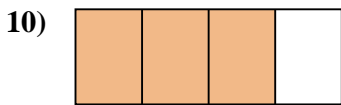
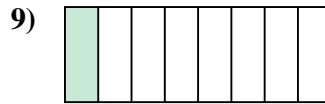
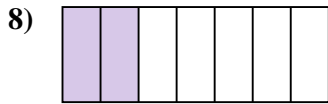
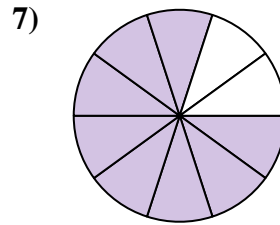
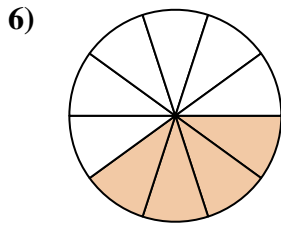
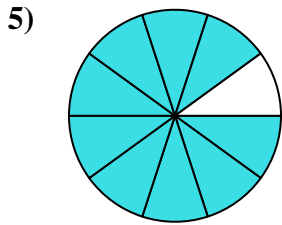

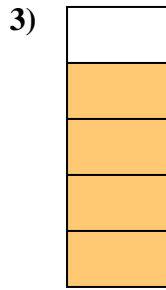
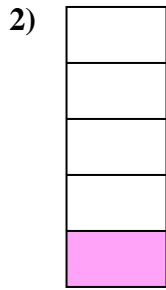

19. _____

20. _____



Stelle fest, ob die schraffierte Fläche 'mehr', 'weniger' oder 'gleich' zur Hälfte ist.

Antworten



1. mehr

2. weniger

3. mehr

4. mehr

5. mehr

6. weniger

7. mehr

8. weniger

9. weniger

10. mehr

11. weniger

12. mehr

13. weniger

14. weniger

15. weniger

16. gleich

17. mehr

18. gleich

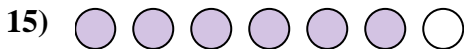

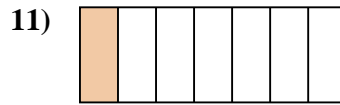
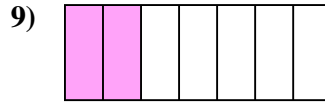
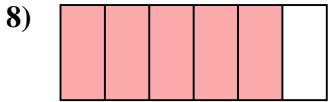
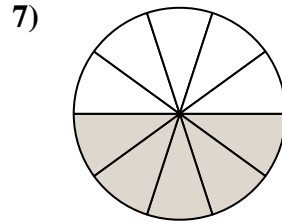
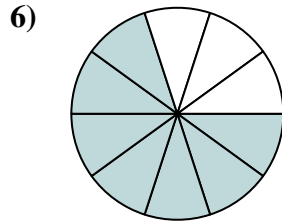
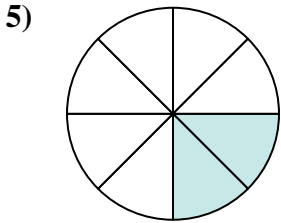




19. gleich

20. mehr



Stelle fest, ob die schraffierte Fläche 'mehr', 'weniger' oder 'gleich' zur Hälfte ist.

Antworten

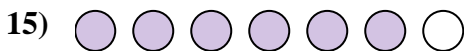
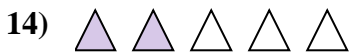

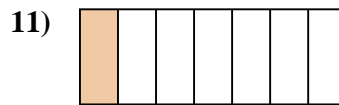
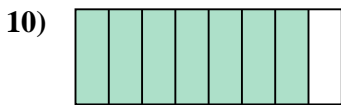
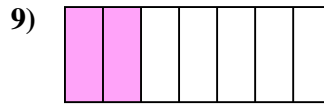
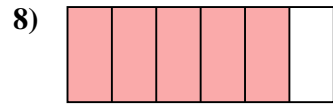
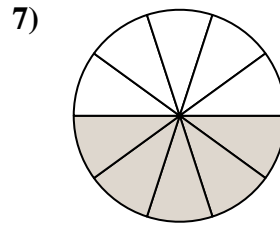
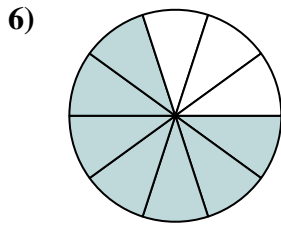
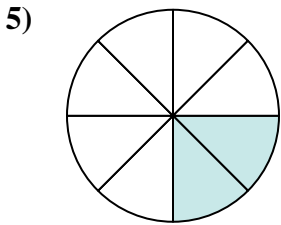






1. _____
2. _____
3. _____
4. _____
5. _____
6. _____
7. _____
8. _____
9. _____
10. _____
11. _____
12. _____
13. _____
14. _____
15. _____
16. _____
17. _____
18. _____
19. _____
20. _____



Stelle fest, ob die schraffierte Fläche 'mehr', 'weniger' oder 'gleich' zur Hälfte ist.

Antworten



1. weniger

2. weniger

3. mehr

4. mehr

5. weniger

6. mehr

7. gleich

8. mehr

9. weniger

10. mehr

11. weniger

12. mehr

13. weniger

14. weniger

15. mehr

16. gleich

17. weniger

18. weniger

19. weniger

20. weniger