
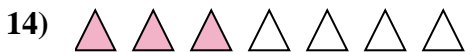
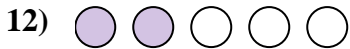
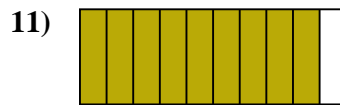
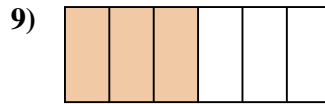
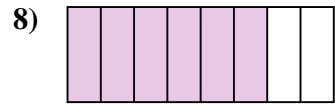
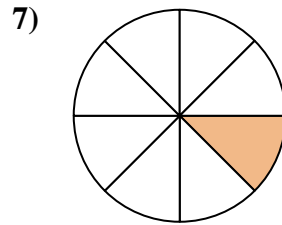
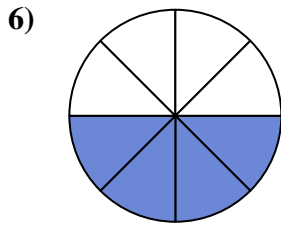
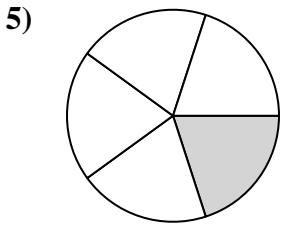
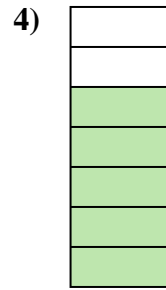
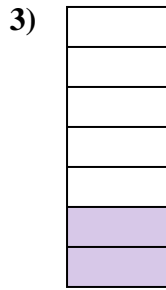






Stelle fest, ob die schraffierte Fläche 'mehr', 'weniger' oder 'gleich' zur Hälfte ist.


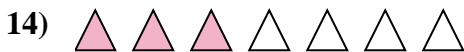
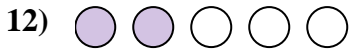
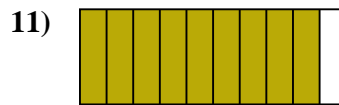
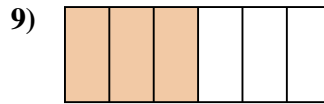
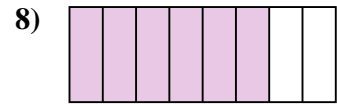
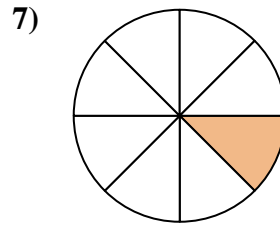
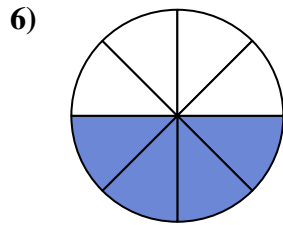
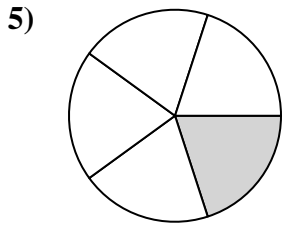
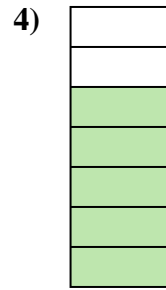
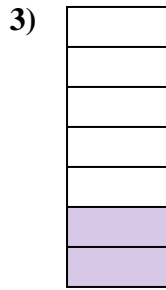


Antworten



1. _____
2. _____
3. _____
4. _____
5. _____
6. _____
7. _____
8. _____
9. _____
10. _____
11. _____
12. _____
13. _____
14. _____
15. _____
16. _____
17. _____
18. _____
19. _____
20. _____



Stelle fest, ob die schraffierte Fläche 'mehr', 'weniger' oder 'gleich' zur Hälfte ist.

Antworten1. weniger2. weniger3. weniger4. mehr5. weniger6. gleich7. weniger8. mehr9. gleich10. mehr11. mehr12. weniger13. mehr14. weniger15. mehr16. weniger17. weniger18. mehr19. gleich20. weniger