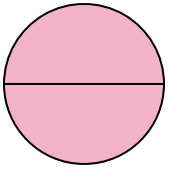




Stelle fest, welcher Buchstabe die schattierte Fläche darstellt.


Antworten

1)



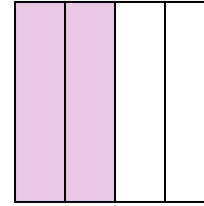
- A. two-halves
- B. one-quarter
- C. two-quarters

2)



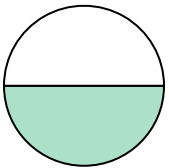
- A. one-half
- B. three-fourths
- C. two-halves

3)



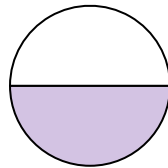
- A. two-fourths
- B. one-fourth
- C. three-fourths

4)



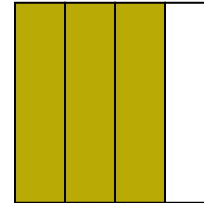
- A. two-fourths
- B. three-fourths
- C. one-half

5)



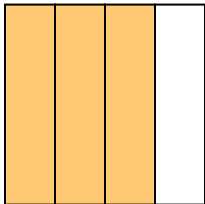
- A. three-fourths
- B. one-half
- C. two-quarters

6)



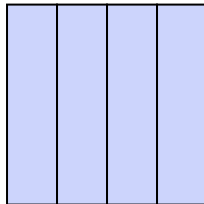
- A. one-fourth
- B. two-fourths
- C. three-fourths

7)



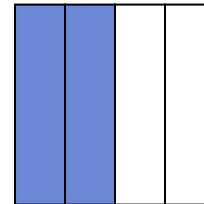
- A. two-fourths
- B. four-quarters
- C. three-quarters

8)



- A. two-quarters
- B. one-half
- C. four-quarters

9)



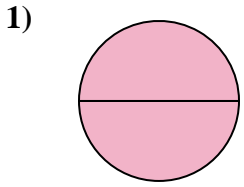
- A. two-halves
- B. two-fourths
- C. one-fourth

- 1. _____
- 2. _____
- 3. _____
- 4. _____
- 5. _____
- 6. _____
- 7. _____
- 8. _____
- 9. _____

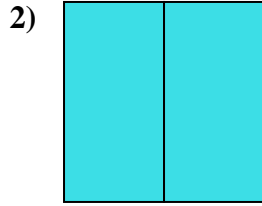


Stelle fest, welcher Buchstabe die schattierte Fläche darstellt.

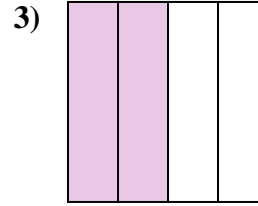
Antworten



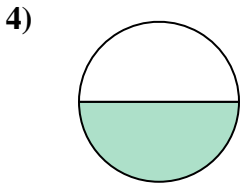
- A. two-halves
- B. one-quarter
- C. two-quarters



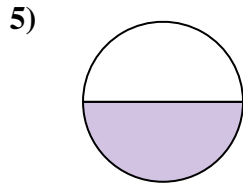
- A. one-half
- B. three-fourths
- C. two-halves



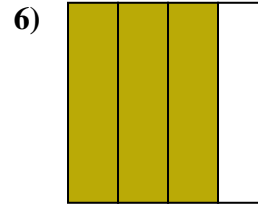
- A. two-fourths
- B. one-fourth
- C. three-fourths



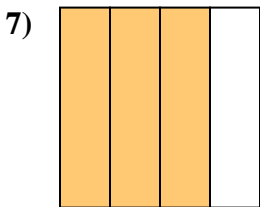
- A. two-fourths
- B. three-fourths
- C. one-half



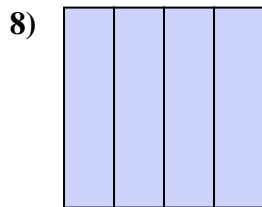
- A. three-fourths
- B. one-half
- C. two-quarters



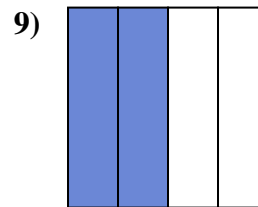
- A. one-fourth
- B. two-fourths
- C. three-fourths



- A. two-fourths
- B. four-quarters
- C. three-quarters



- A. two-quarters
- B. one-half
- C. four-quarters



- A. two-halves
- B. two-fourths
- C. one-fourth

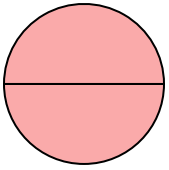
- 1. **A**
- 2. **C**
- 3. **A**
- 4. **C**
- 5. **B**
- 6. **C**
- 7. **C**
- 8. **C**
- 9. **B**



Stelle fest, welcher Buchstabe die schattierte Fläche darstellt.


Antworten

1)



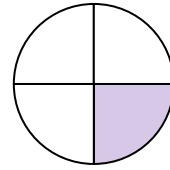
- A. one-half
- B. two-quarters
- C. two-halves

2)



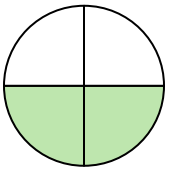
- A. two-quarters
- B. three-fourths
- C. one-half

3)




- A. two-quarters
- B. one-quarter
- C. one-half

4)



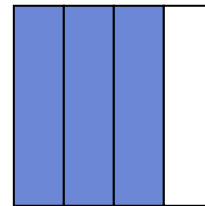
- A. three-fourths
- B. two-fourths
- C. one-half

5)



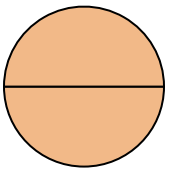
- A. one-half
- B. three-quarters
- C. one-fourth

6)



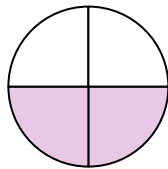
- A. one-half
- B. three-fourths
- C. four-quarters

7)



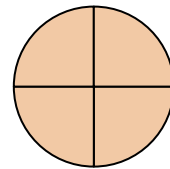
- A. two-quarters
- B. two-halves
- C. one-half

8)



- A. two-fourths
- B. one-half
- C. three-fourths

9)



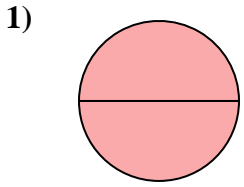
- A. three-quarters
- B. two-halves
- C. three-fourths

- 1. _____
- 2. _____
- 3. _____
- 4. _____
- 5. _____
- 6. _____
- 7. _____
- 8. _____
- 9. _____

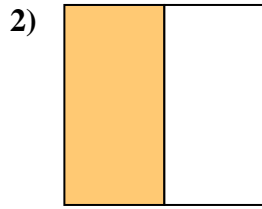


Stelle fest, welcher Buchstabe die schattierte Fläche darstellt.

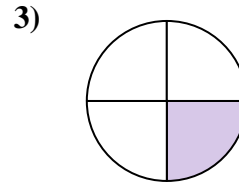
Antworten



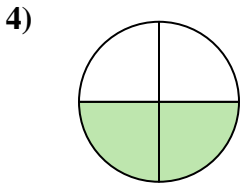
- A. one-half
- B. two-quarters
- C. two-halves



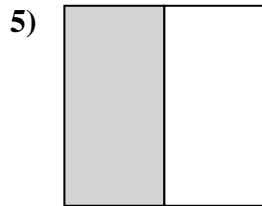
- A. two-quarters
- B. three-fourths
- C. one-half



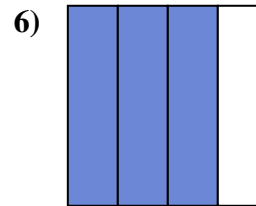
- A. two-quarters
- B. one-quarter
- C. one-half



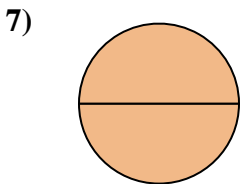
- A. three-fourths
- B. two-fourths
- C. one-half



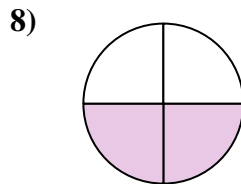
- A. one-half
- B. three-quarters
- C. one-fourth



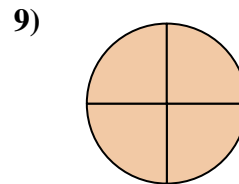
- A. one-half
- B. three-fourths
- C. four-quarters



- A. two-quarters
- B. two-halves
- C. one-half



- A. two-fourths
- B. one-half
- C. three-fourths



- A. three-quarters
- B. two-halves
- C. three-fourths

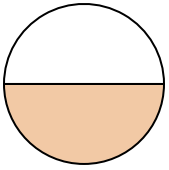
- 1. **C**
- 2. **C**
- 3. **B**
- 4. **B**
- 5. **A**
- 6. **B**
- 7. **B**
- 8. **A**
- 9. **C**



Stelle fest, welcher Buchstabe die schattierte Fläche darstellt.

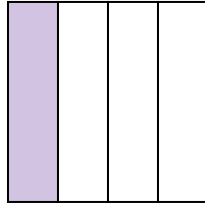
Antworten

1)



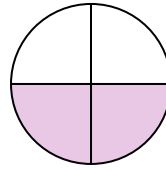
- A. three-fourths
- B. one-half
- C. two-fourths

2)



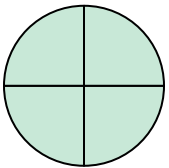
- A. one-quarter
- B. three-quarters
- C. two-halves

3)



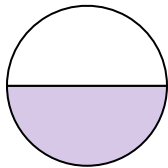
- A. one-fourth
- B. one-half
- C. two-quarters

4)




- A. two-halves
- B. three-fourths
- C. three-fourths

5)




- A. one-half
- B. two-quarters
- C. three-fourths

6)



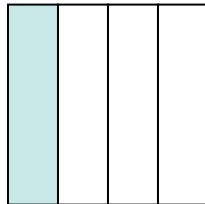
- A. two-halves
- B. one-fourth
- C. two-quarters

7)



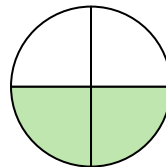
- A. one-half
- B. two-halves
- C. one-fourth

8)



- A. one-quarter
- B. three-quarters
- C. two-halves

9)



- A. two-fourths
- B. one-quarter
- C. one-half

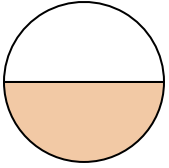
- 1. _____
- 2. _____
- 3. _____
- 4. _____
- 5. _____
- 6. _____
- 7. _____
- 8. _____
- 9. _____



Stelle fest, welcher Buchstabe die schattierte Fläche darstellt.

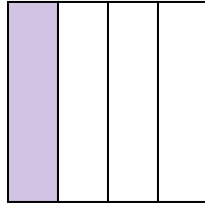
Antworten

1)



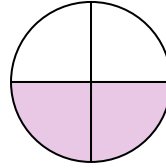
- A. three-fourths
 B. one-half
 C. two-fourths

2)



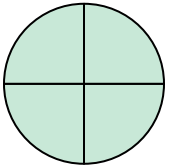
- A. one-quarter
 B. three-quarters
 C. two-halves

3)



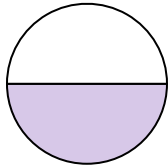
- A. one-fourth
 B. one-half
 C. two-quarters

4)




- A. two-halves
 B. three-fourths
 C. three-fourths

5)




- A. one-half
 B. two-quarters
 C. three-fourths

6)



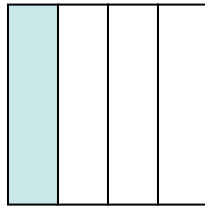
- A. two-halves
 B. one-fourth
 C. two-quarters

7)



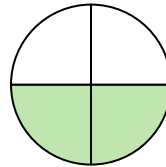
- A. one-half
 B. two-halves
 C. one-fourth

8)



- A. one-quarter
 B. three-quarters
 C. two-halves

9)



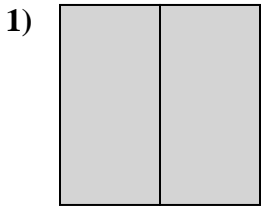
- A. two-fourths
 B. one-quarter
 C. one-half

1. **B**2. **A**3. **C**4. **B**5. **A**6. **A**7. **B**8. **A**9. **A**

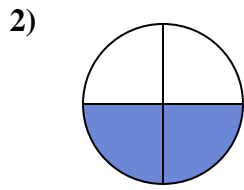


Stelle fest, welcher Buchstabe die schattierte Fläche darstellt.

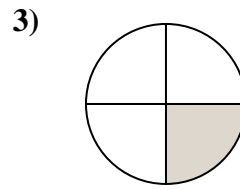
Antworten



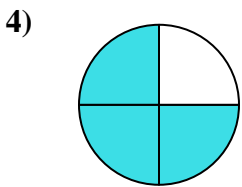
- A. two-quarters
- B. two-halves
- C. three-fourths



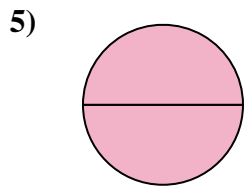
- A. three-fourths
- B. three-fourths
- C. two-fourths



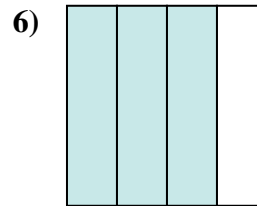
- A. two-quarters
- B. one-fourth
- C. two-halves



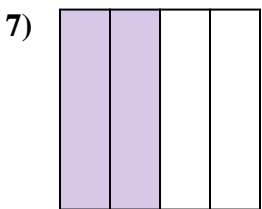
- A. two-fourths
- B. three-fourths
- C. two-halves



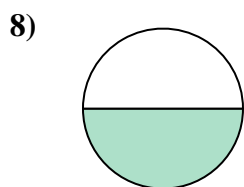
- A. one-fourth
- B. three-fourths
- C. two-halves



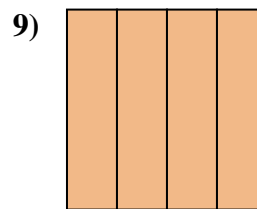
- A. one-fourth
- B. three-fourths
- C. two-halves



- A. one-quarter
- B. three-fourths
- C. two-quarters



- A. two-halves
- B. one-half
- C. two-fourths



- A. four-quarters
- B. three-quarters
- C. one-half

1. _____

2. _____

3. _____

4. _____

5. _____

6. _____

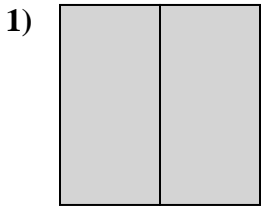
7. _____

8. _____

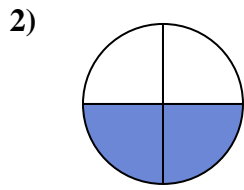
9. _____



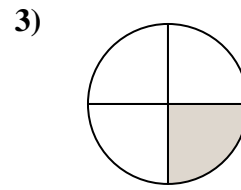
Stelle fest, welcher Buchstabe die schattierte Fläche darstellt.

Antworten

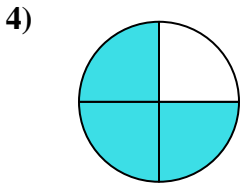
- A. two-quarters
B. two-halves
C. three-fourths



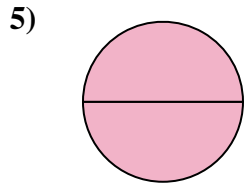
- A. three-fourths
B. three-fourths
C. two-fourths



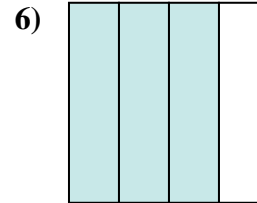
- A. two-quarters
B. one-fourth
C. two-halves



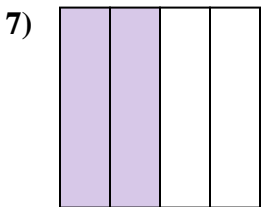
- A. two-fourths
B. three-fourths
C. two-halves



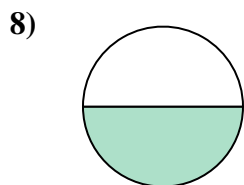
- A. one-fourth
B. three-fourths
C. two-halves



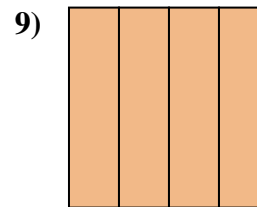
- A. one-fourth
B. three-fourths
C. two-halves



- A. one-quarter
B. three-fourths
C. two-quarters



- A. two-halves
B. one-half
C. two-fourths



- A. four-quarters
B. three-quarters
C. one-half

1. **B**2. **C**3. **B**4. **B**5. **C**6. **B**7. **C**8. **B**9. **A**



Stelle fest, welcher Buchstabe die schattierte Fläche darstellt.


Antworten

1)



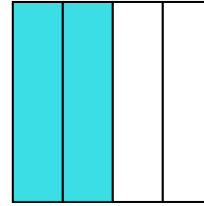
- A. one-half
- B. two-halves
- C. four-quarters

2)



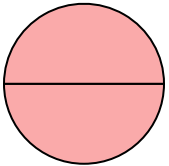
- A. two-halves
- B. one-half
- C. one-fourth

3)



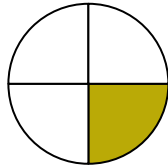
- A. three-quarters
- B. one-quarter
- C. two-quarters

4)



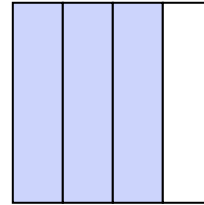
- A. two-halves
- B. three-fourths
- C. one-quarter

5)



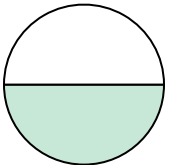
- A. three-fourths
- B. one-fourth
- C. two-quarters

6)



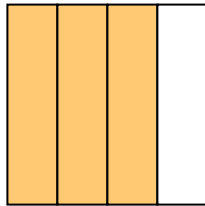
- A. three-fourths
- B. three-fourths
- C. one-half

7)



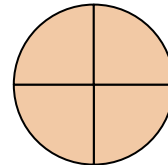
- A. two-quarters
- B. two-halves
- C. one-half

8)



- A. three-fourths
- B. one-quarter
- C. two-halves

9)



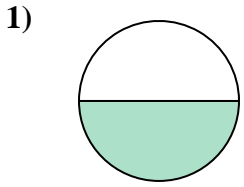
- A. two-halves
- B. three-fourths
- C. three-fourths

- 1. _____
- 2. _____
- 3. _____
- 4. _____
- 5. _____
- 6. _____
- 7. _____
- 8. _____
- 9. _____

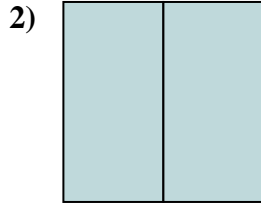


Stelle fest, welcher Buchstabe die schattierte Fläche darstellt.

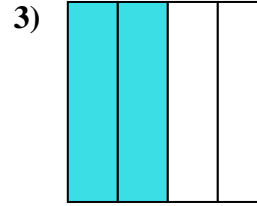
Antworten



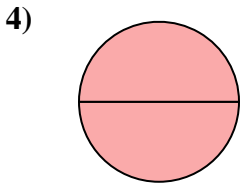
- A. one-half
- B. two-halves
- C. four-quarters



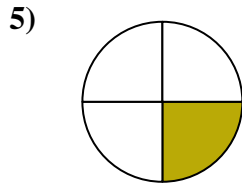
- A. two-halves
- B. one-half
- C. one-fourth



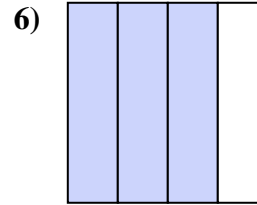
- A. three-quarters
- B. one-quarter
- C. two-quarters



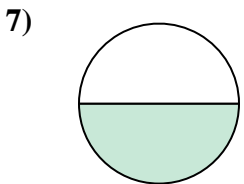
- A. two-halves
- B. three-fourths
- C. one-quarter



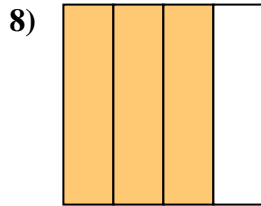
- A. three-fourths
- B. one-fourth
- C. two-quarters



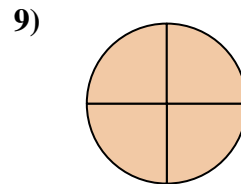
- A. three-fourths
- B. three-fourths
- C. one-half



- A. two-quarters
- B. two-halves
- C. one-half



- A. three-fourths
- B. one-quarter
- C. two-halves



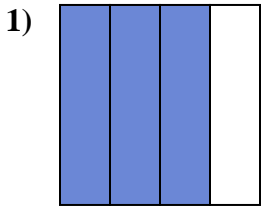
- A. two-halves
- B. three-fourths
- C. three-fourths

- 1. **A**
- 2. **A**
- 3. **C**
- 4. **A**
- 5. **B**
- 6. **A**
- 7. **C**
- 8. **A**
- 9. **C**

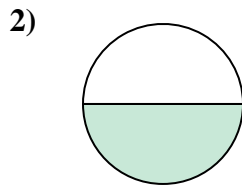


Stelle fest, welcher Buchstabe die schattierte Fläche darstellt.

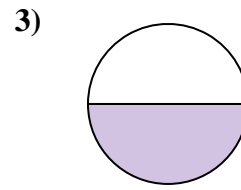
Antworten



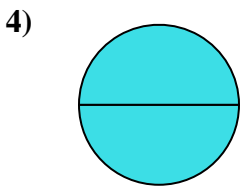
- A. three-fourths
- B. three-quarters
- C. one-quarter



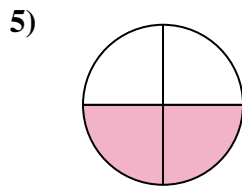
- A. one-half
- B. two-fourths
- C. one-fourth



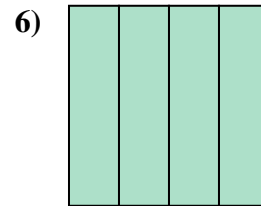
- A. three-fourths
- B. one-half
- C. two-halves



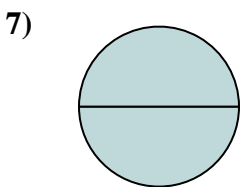
- A. one-quarter
- B. four-quarters
- C. two-halves



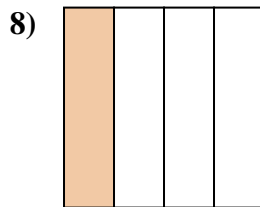
- A. two-quarters
- B. one-half
- C. four-quarters



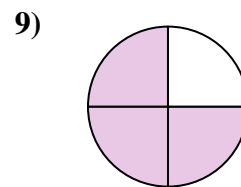
- A. four-quarters
- B. one-quarter
- C. one-half



- A. two-halves
- B. one-half
- C. three-quarters



- A. two-halves
- B. one-fourth
- C. two-quarters

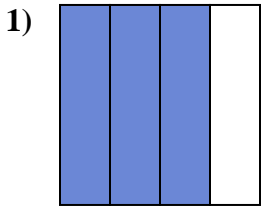


- A. three-fourths
- B. three-quarters
- C. two-halves

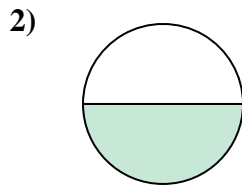
- 1. _____
- 2. _____
- 3. _____
- 4. _____
- 5. _____
- 6. _____
- 7. _____
- 8. _____
- 9. _____



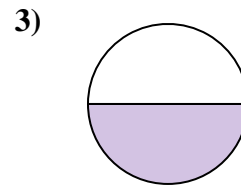
Stelle fest, welcher Buchstabe die schattierte Fläche darstellt.

Antworten

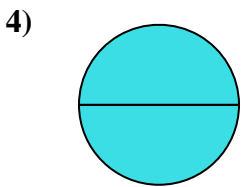
- A. three-fourths
B. three-quarters
C. one-quarter



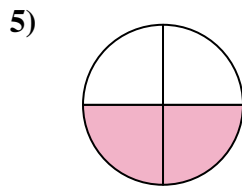
- A. one-half
B. two-fourths
C. one-fourth



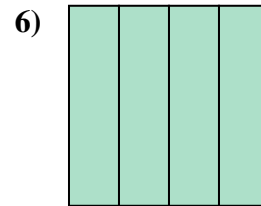
- A. three-fourths
B. one-half
C. two-halves



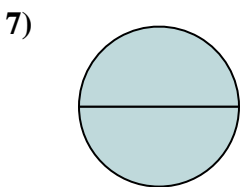
- A. one-quarter
B. four-quarters
C. two-halves



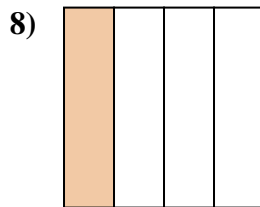
- A. two-quarters
B. one-half
C. four-quarters



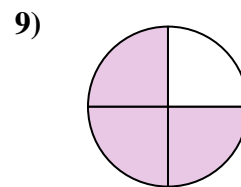
- A. four-quarters
B. one-quarter
C. one-half



- A. two-halves
B. one-half
C. three-quarters



- A. two-halves
B. one-fourth
C. two-quarters



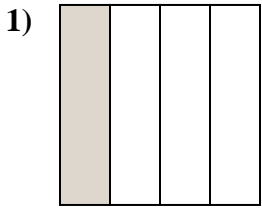
- A. three-fourths
B. three-quarters
C. two-halves

1. **B**2. **A**3. **B**4. **C**5. **A**6. **A**7. **A**8. **B**9. **B**

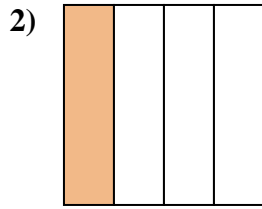


Stelle fest, welcher Buchstabe die schattierte Fläche darstellt.

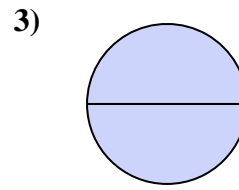
Antworten



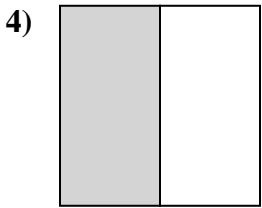
- A. one-fourth
- B. three-fourths
- C. one-half



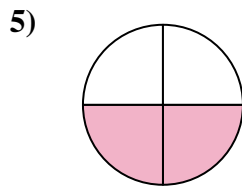
- A. one-half
- B. one-fourth
- C. two-halves



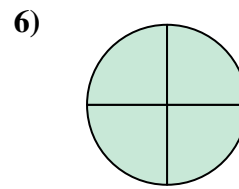
- A. one-half
- B. one-fourth
- C. two-halves



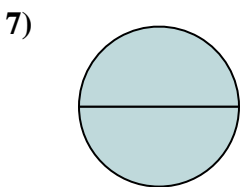
- A. two-halves
- B. three-fourths
- C. one-half



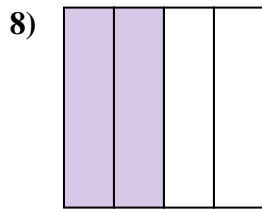
- A. two-quarters
- B. three-fourths
- C. two-halves



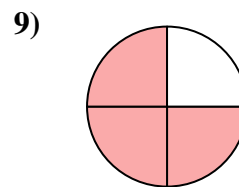
- A. two-quarters
- B. three-fourths
- C. one-half



- A. one-quarter
- B. two-halves
- C. three-fourths



- A. four-quarters
- B. two-quarters
- C. two-halves

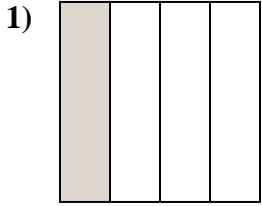


- A. two-halves
- B. three-fourths
- C. two-fourths

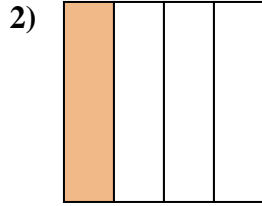
- 1. _____
- 2. _____
- 3. _____
- 4. _____
- 5. _____
- 6. _____
- 7. _____
- 8. _____
- 9. _____



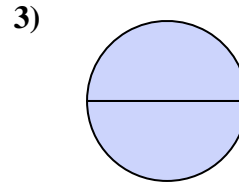
Stelle fest, welcher Buchstabe die schattierte Fläche darstellt.

Antworten

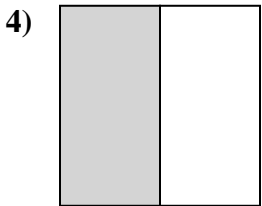
- A. one-fourth
B. three-fourths
C. one-half



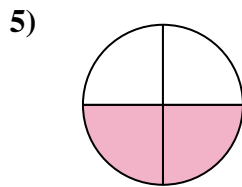
- A. one-half
B. one-fourth
C. two-halves



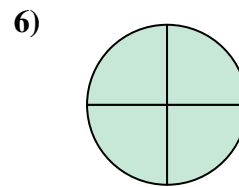
- A. one-half
B. one-fourth
C. two-halves



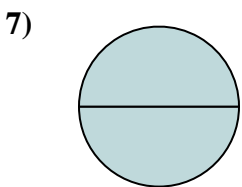
- A. two-halves
B. three-fourths
C. one-half



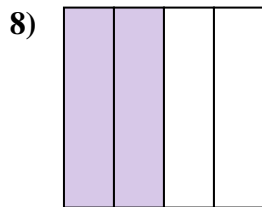
- A. two-quarters
B. three-fourths
C. two-halves



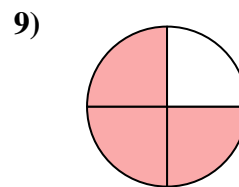
- A. two-quarters
B. three-fourths
C. one-half



- A. one-quarter
B. two-halves
C. three-fourths



- A. four-quarters
B. two-quarters
C. two-halves



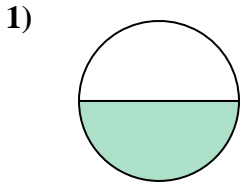
- A. two-halves
B. three-fourths
C. two-fourths

1. **A**2. **B**3. **C**4. **C**5. **A**6. **B**7. **B**8. **B**9. **B**

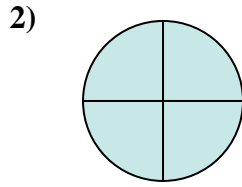


Stelle fest, welcher Buchstabe die schattierte Fläche darstellt.

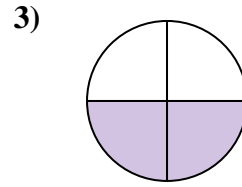
Antworten



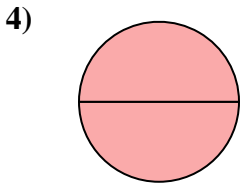
- A. two-fourths
- B. one-half
- C. one-fourth



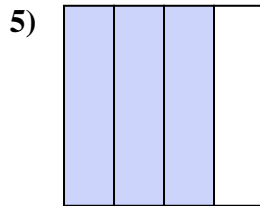
- A. two-halves
- B. three-fourths
- C. one-half



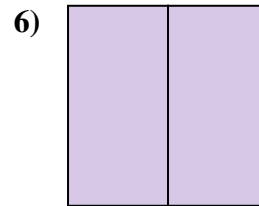
- A. two-fourths
- B. three-fourths
- C. one-quarter



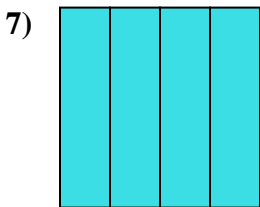
- A. four-quarters
- B. two-quarters
- C. two-halves



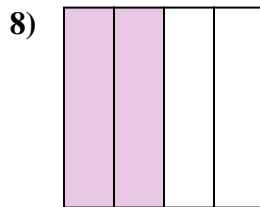
- A. three-fourths
- B. two-fourths
- C. three-fourths



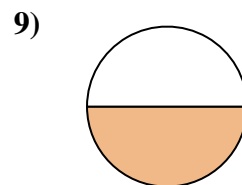
- A. one-fourth
- B. two-halves
- C. one-half



- A. two-fourths
- B. four-quarters
- C. three-quarters



- A. one-half
- B. two-fourths
- C. three-quarters



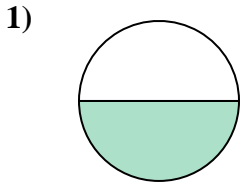
- A. two-halves
- B. two-fourths
- C. one-half

- 1. _____
- 2. _____
- 3. _____
- 4. _____
- 5. _____
- 6. _____
- 7. _____
- 8. _____
- 9. _____

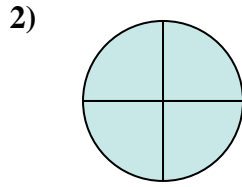


Stelle fest, welcher Buchstabe die schattierte Fläche darstellt.

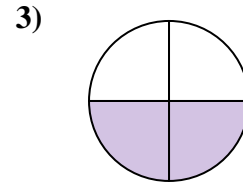
Antworten



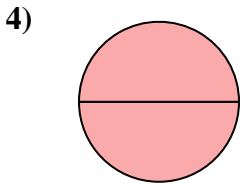
- A. two-fourths
- B. one-half
- C. one-fourth



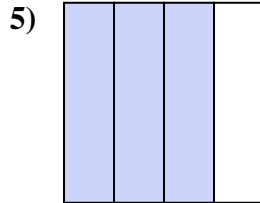
- A. two-halves
- B. three-fourths
- C. one-half



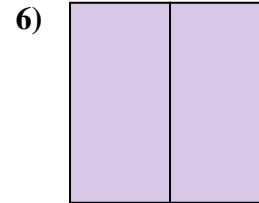
- A. two-fourths
- B. three-fourths
- C. one-quarter



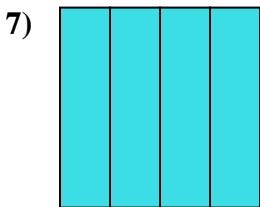
- A. four-quarters
- B. two-quarters
- C. two-halves



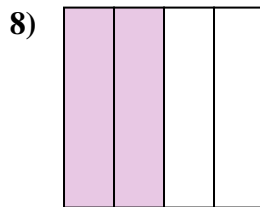
- A. three-fourths
- B. two-fourths
- C. three-fourths



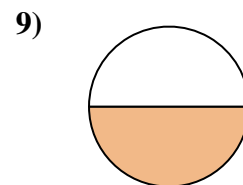
- A. one-fourth
- B. two-halves
- C. one-half



- A. two-fourths
- B. four-quarters
- C. three-quarters



- A. one-half
- B. two-fourths
- C. three-quarters



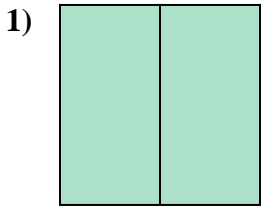
- A. two-halves
- B. two-fourths
- C. one-half

- 1. **B**
- 2. **B**
- 3. **A**
- 4. **C**
- 5. **A**
- 6. **B**
- 7. **B**
- 8. **B**
- 9. **C**

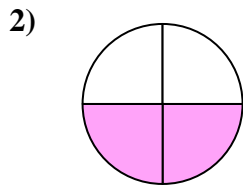


Stelle fest, welcher Buchstabe die schattierte Fläche darstellt.

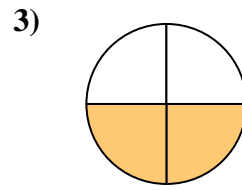
Antworten



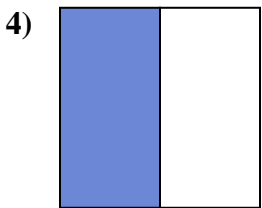
- A. two-halves
- B. one-fourth
- C. one-half



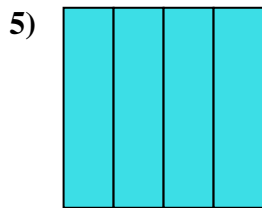
- A. two-fourths
- B. two-halves
- C. one-half



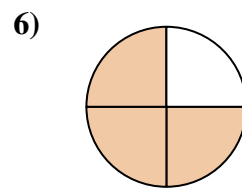
- A. two-quarters
- B. two-halves
- C. one-quarter



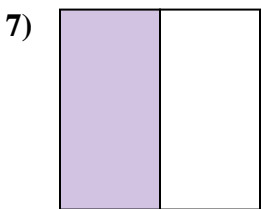
- A. three-quarters
- B. one-half
- C. three-fourths



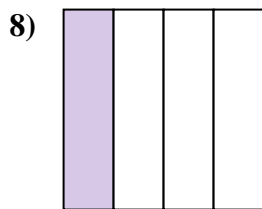
- A. two-quarters
- B. four-quarters
- C. two-halves



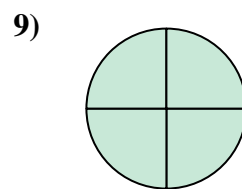
- A. three-quarters
- B. four-quarters
- C. one-quarter



- A. three-quarters
- B. three-fourths
- C. one-half



- A. two-fourths
- B. three-quarters
- C. one-fourth




- A. three-fourths
- B. two-halves
- C. three-fourths

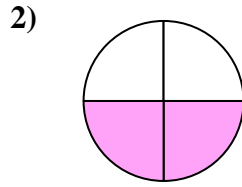
- 1. _____
- 2. _____
- 3. _____
- 4. _____
- 5. _____
- 6. _____
- 7. _____
- 8. _____
- 9. _____



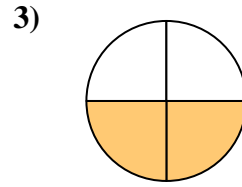
Stelle fest, welcher Buchstabe die schattierte Fläche darstellt.

Antworten

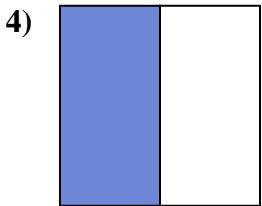
- A. two-halves
B. one-fourth
C. one-half



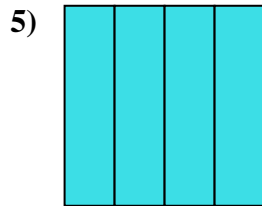
- A. two-fourths
B. two-halves
C. one-half



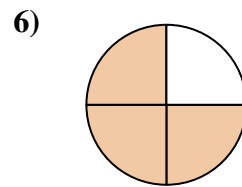
- A. two-quarters
B. two-halves
C. one-quarter



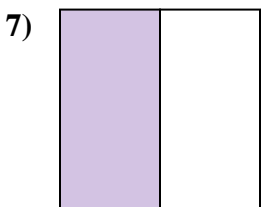
- A. three-quarters
B. one-half
C. three-fourths



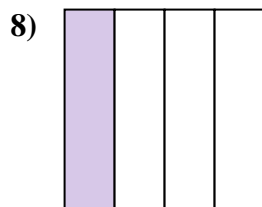
- A. two-quarters
B. four-quarters
C. two-halves



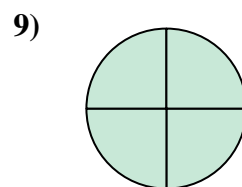
- A. three-quarters
B. four-quarters
C. one-quarter



- A. three-quarters
B. three-fourths
C. one-half



- A. two-fourths
B. three-quarters
C. one-fourth



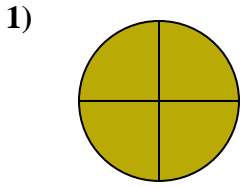
- A. three-fourths
B. two-halves
C. three-fourths

1. **A**2. **A**3. **A**4. **B**5. **B**6. **A**7. **C**8. **C**9. **C**

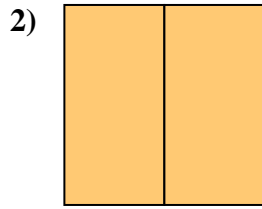


Stelle fest, welcher Buchstabe die schattierte Fläche darstellt.

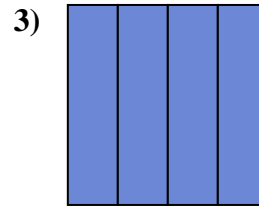
Antworten



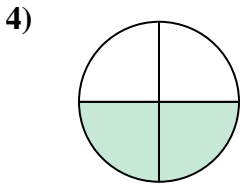
- A. two-halves
- B. three-fourths
- C. one-half



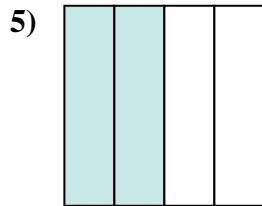
- A. one-quarter
- B. two-fourths
- C. two-halves



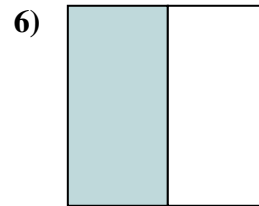
- A. two-halves
- B. two-quarters
- C. three-fourths



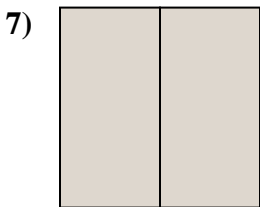
- A. two-fourths
- B. one-fourth
- C. one-half



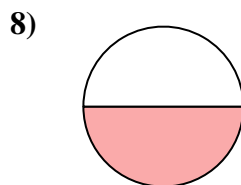
- A. four-quarters
- B. three-quarters
- C. two-fourths



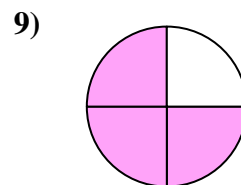
- A. one-half
- B. two-halves
- C. three-fourths



- A. one-half
- B. one-quarter
- C. two-halves



- A. one-half
- B. one-quarter
- C. two-fourths



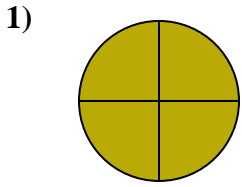
- A. three-quarters
- B. one-quarter
- C. four-quarters

- 1. _____
- 2. _____
- 3. _____
- 4. _____
- 5. _____
- 6. _____
- 7. _____
- 8. _____
- 9. _____

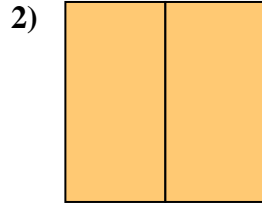


Stelle fest, welcher Buchstabe die schattierte Fläche darstellt.

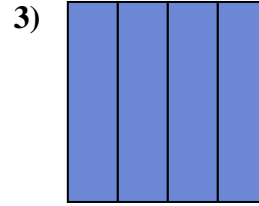
Antworten



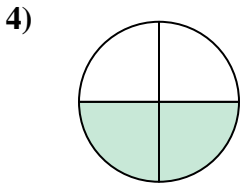
- A. two-halves
- B. three-fourths
- C. one-half



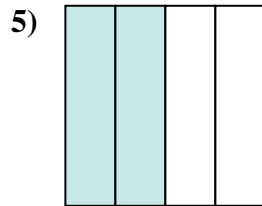
- A. one-quarter
- B. two-fourths
- C. two-halves



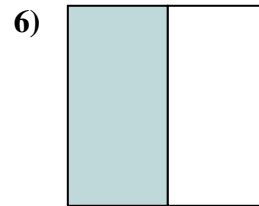
- A. two-halves
- B. two-quarters
- C. three-fourths



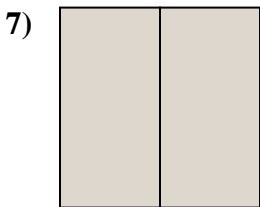
- A. two-fourths
- B. one-fourth
- C. one-half



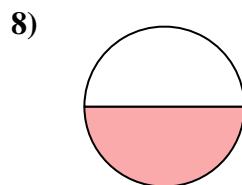
- A. four-quarters
- B. three-quarters
- C. two-fourths



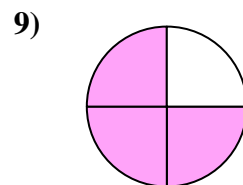
- A. one-half
- B. two-halves
- C. three-fourths



- A. one-half
- B. one-quarter
- C. two-halves



- A. one-half
- B. one-quarter
- C. two-fourths



- A. three-quarters
- B. one-quarter
- C. four-quarters

- 1. **B**
- 2. **C**
- 3. **C**
- 4. **A**
- 5. **C**
- 6. **A**
- 7. **C**
- 8. **A**
- 9. **A**