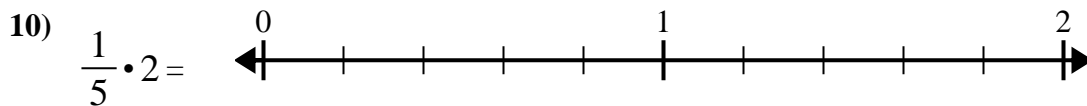
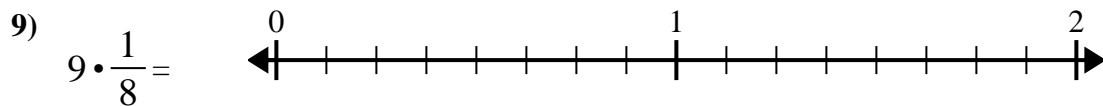
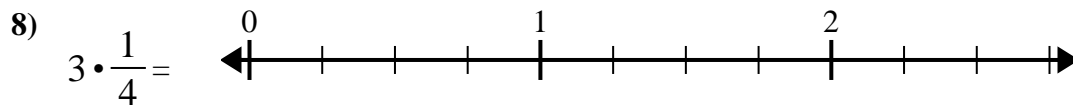
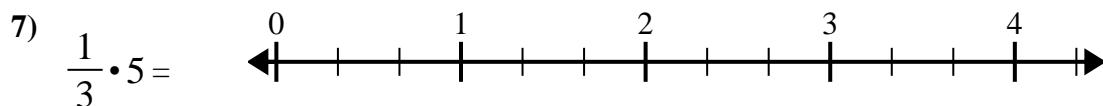
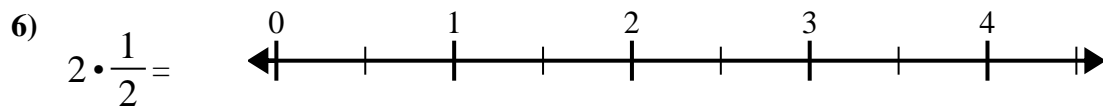
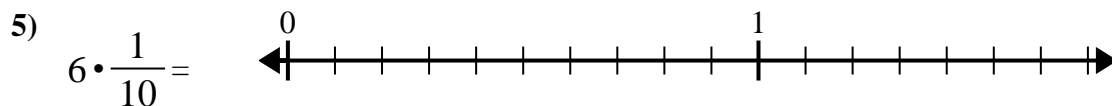
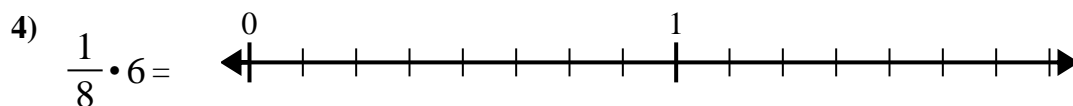
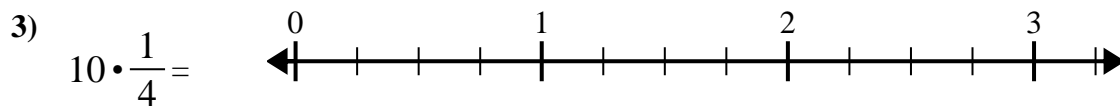
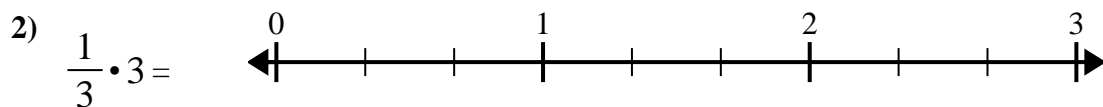
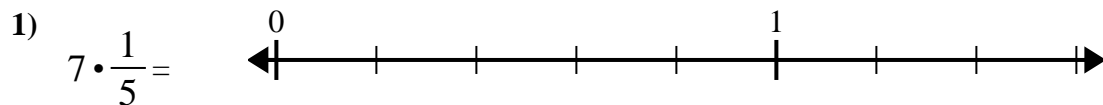




Verwenden Sie den Zahlenstrahl, um zu lösen.

**Antworten**

1. _____

2. _____

3. _____

4. _____

5. _____

6. _____

7. _____

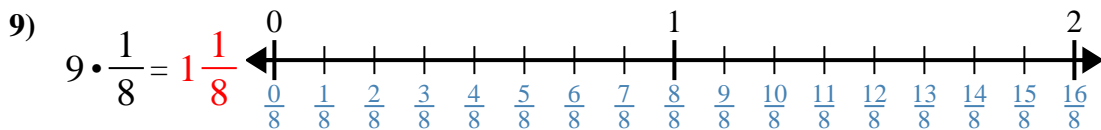
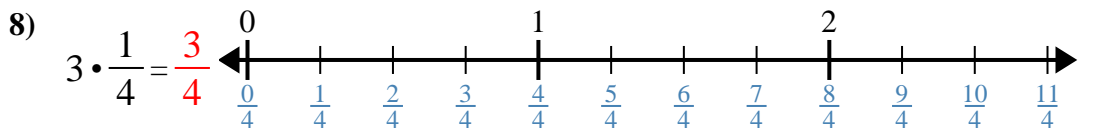
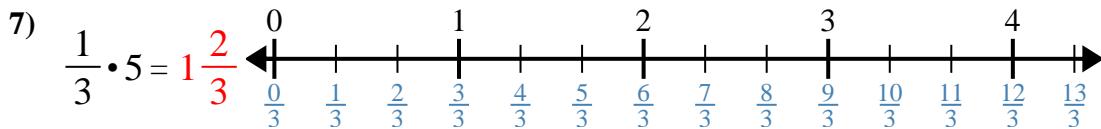
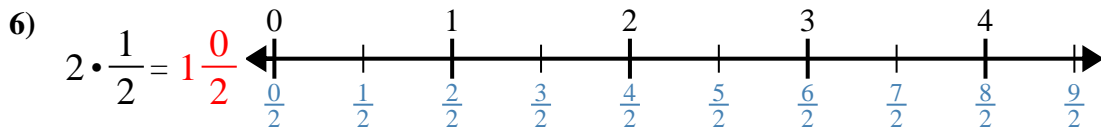
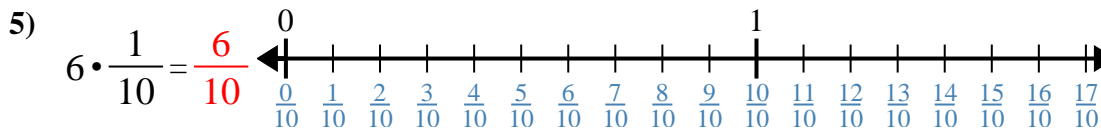
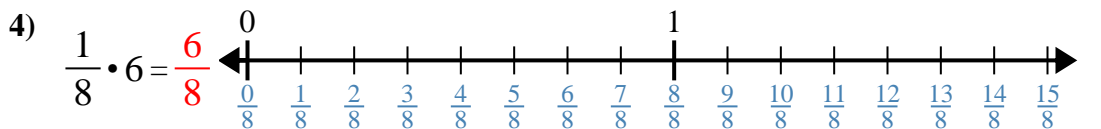
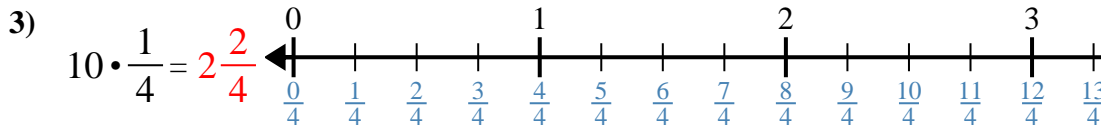
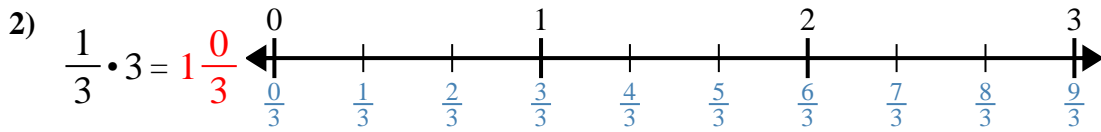
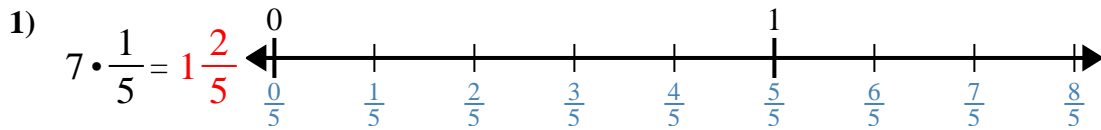
8. _____

9. _____

10. _____



Verwenden Sie den Zahlenstrahl, um zu lösen.

Antworten

1. $1 \frac{2}{5}$
2. $1 \frac{0}{3}$
3. $2 \frac{2}{4}$
4. $\frac{6}{8}$
5. $\frac{6}{10}$
6. $1 \frac{0}{2}$
7. $1 \frac{2}{3}$
8. $\frac{3}{4}$
9. $1 \frac{1}{8}$
10. $\frac{2}{5}$



Verwenden Sie den Zahlenstrahl, um zu lösen.

Antworten

$1\frac{0}{3}$

$1\frac{0}{2}$

$\frac{6}{10}$

$\frac{2}{5}$

$1\frac{2}{5}$

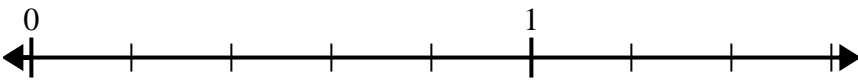
$\frac{6}{8}$

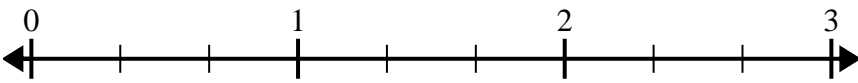
$\frac{3}{4}$

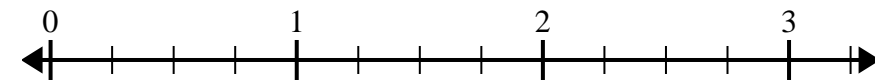
$1\frac{1}{8}$

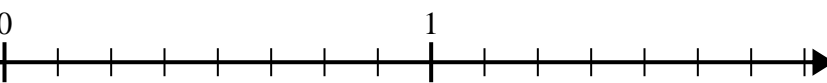
$1\frac{2}{3}$

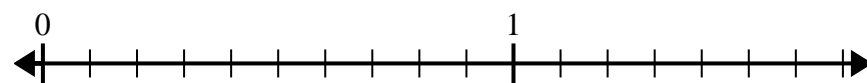
$2\frac{2}{4}$

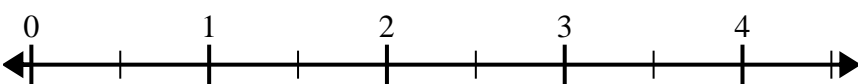
1) $7 \cdot \frac{1}{5} =$ 

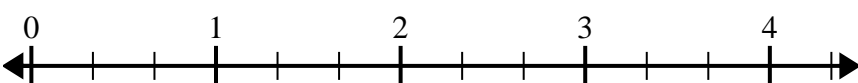
2) $\frac{1}{3} \cdot 3 =$ 

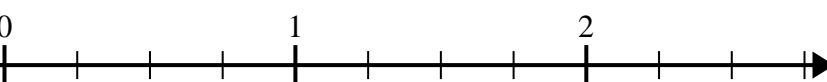
3) $10 \cdot \frac{1}{4} =$ 

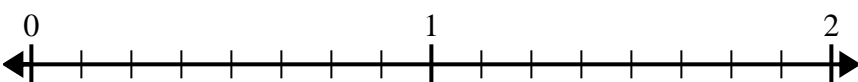
4) $\frac{1}{8} \cdot 6 =$ 

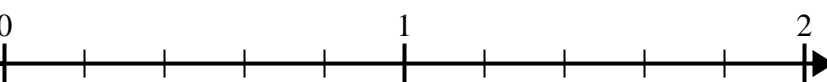
5) $6 \cdot \frac{1}{10} =$ 

6) $2 \cdot \frac{1}{2} =$ 

7) $\frac{1}{3} \cdot 5 =$ 

8) $3 \cdot \frac{1}{4} =$ 

9) $9 \cdot \frac{1}{8} =$ 

10) $\frac{1}{5} \cdot 2 =$ 

1. _____

2. _____

3. _____

4. _____

5. _____

6. _____

7. _____

8. _____

9. _____

10. _____