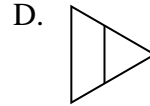
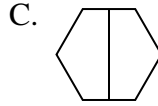
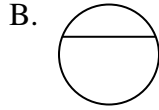
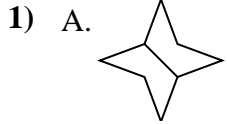




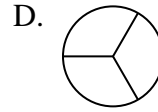
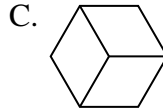
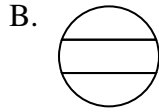
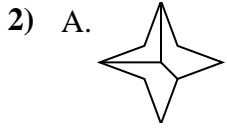
Stelle fest, welche Auswahlen die gleichen sind, damit die gezeigten geteilten Formen den gleichen Anteil haben. Wenn es keine gibt, schreibe 'keine'.

Antworten



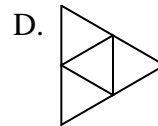
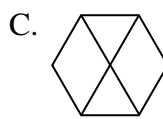
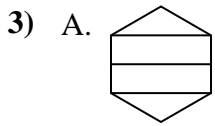
1. _____

2. _____



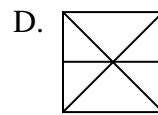
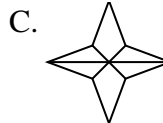
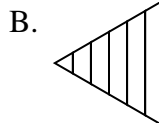
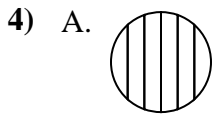
3. _____

4. _____



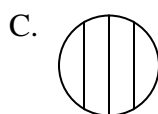
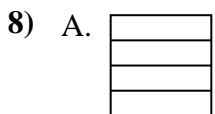
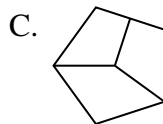
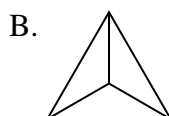
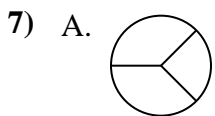
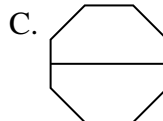
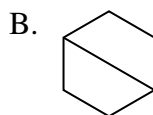
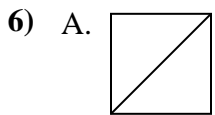
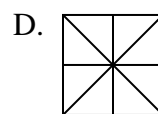
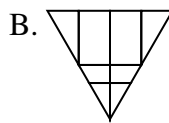
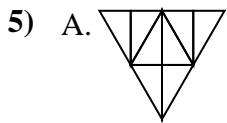
5. _____

6. _____



7. _____

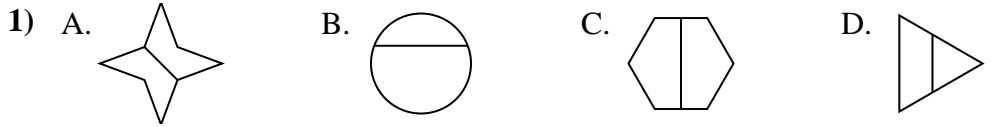
8. _____



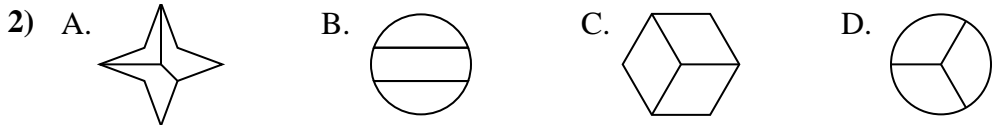


Stelle fest, welche Auswahlen die gleichen sind, damit die gezeigten geteilten Formen den gleichen Anteil haben. Wenn es keine gibt, schreibe 'keine'.

Antworten



1. A,C

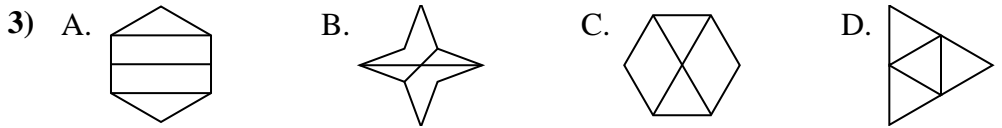


2. C,D

3. D

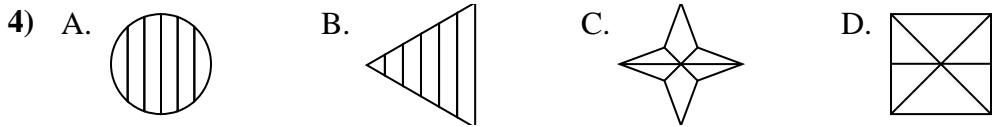
4. keine

5. A,D



6. A,B,C

7. B



8. A,D

