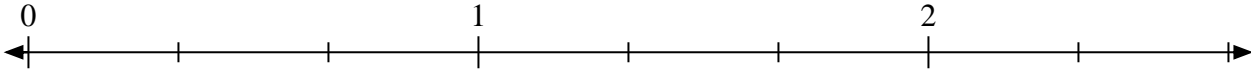
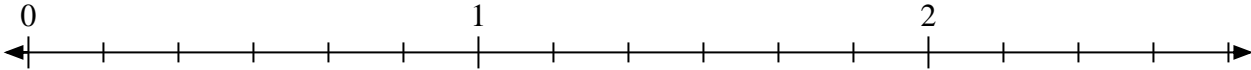


**Löse jede Aufgabe.**

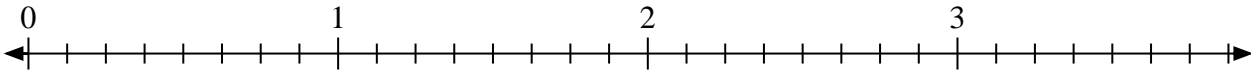
- 1) Mark the location of
- $\frac{4}{3}$




- 2) Mark the location of
- $\frac{15}{6}$



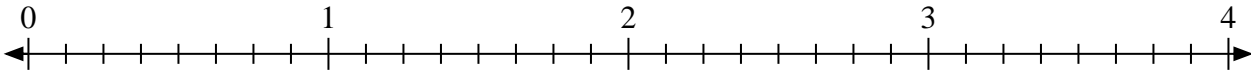
- 3) Mark the location of
- $\frac{11}{8}$



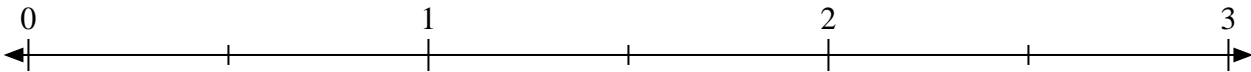
- 4) Mark the location of
- $\frac{10}{4}$




- 5) Mark the location of
- $\frac{21}{8}$



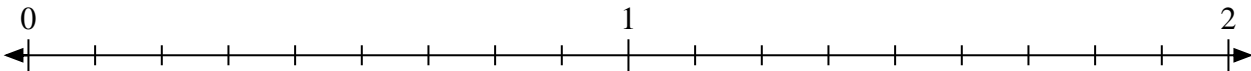
- 6) Mark the location of
- $\frac{4}{2}$



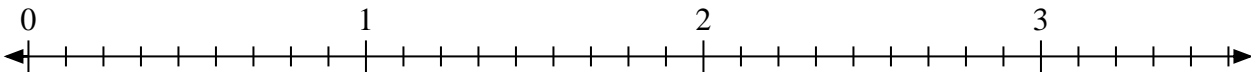
- 7) Mark the location of
- $\frac{3}{2}$



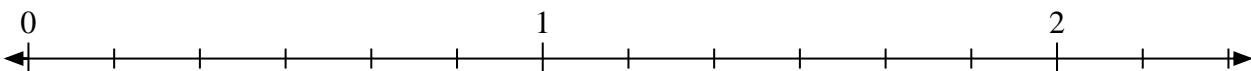
- 8) Mark the location of
- $\frac{14}{9}$



- 9) Mark the location of
- $\frac{20}{9}$

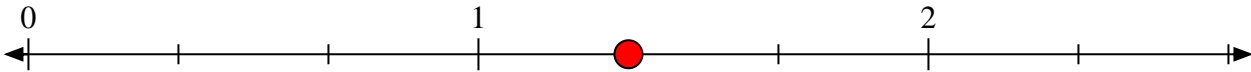


- 10) Mark the location of
- $\frac{9}{6}$

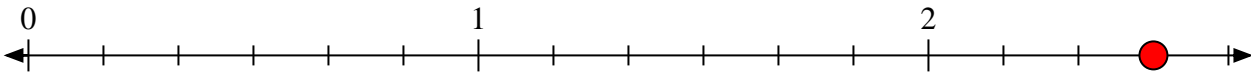


**Löse jede Aufgabe.**

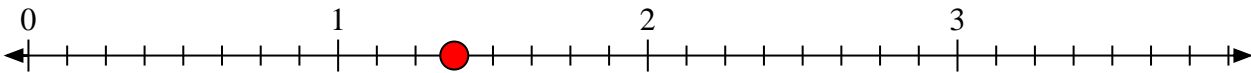
- 1) Mark the location of $\frac{4}{3}$




- 2) Mark the location of $\frac{15}{6}$



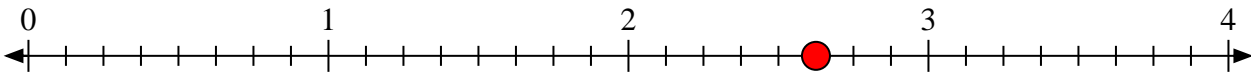
- 3) Mark the location of $\frac{11}{8}$



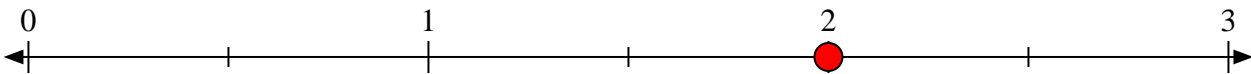
- 4) Mark the location of $\frac{10}{4}$




- 5) Mark the location of $\frac{21}{8}$



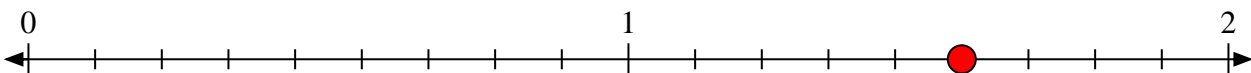
- 6) Mark the location of $\frac{4}{2}$



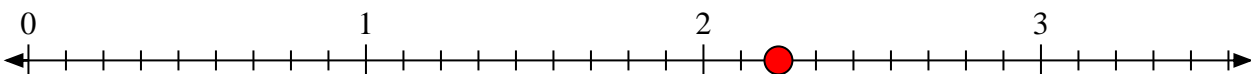
- 7) Mark the location of $\frac{3}{2}$



- 8) Mark the location of $\frac{14}{9}$



- 9) Mark the location of $\frac{20}{9}$



- 10) Mark the location of $\frac{9}{6}$

