



**Löse jede Aufgabe.****Antworten**

1) 3:30

A.




B.




2) 3:45

A.




B.




3) 4:30

A.




B.




4) 8:45

A.




B.



5) 1:15

A.



B.




6) 9:15

A.



B.




7) 7:15

A.




B.




8) 4:00

A.



B.



9) 5:15

A.



B.




10) 1:45

A.



B.



11) 2:15

A.



B.




12) 11:00

A.



B.



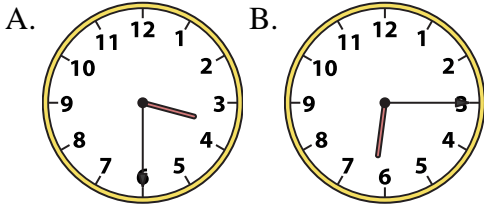
1. _____
2. _____
3. _____
4. _____
5. _____
6. _____
7. _____
8. _____
9. _____
10. _____
11. _____
12. _____



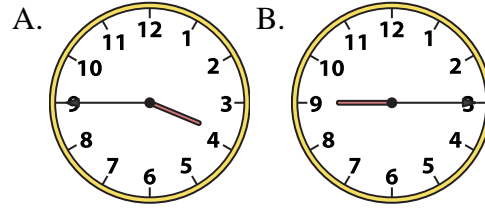
Löse jede Aufgabe.

Antworten

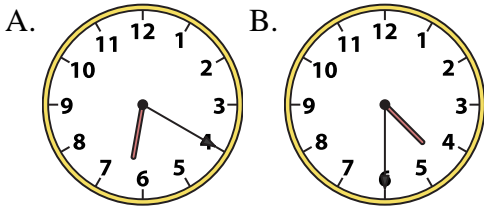
1) 3:30



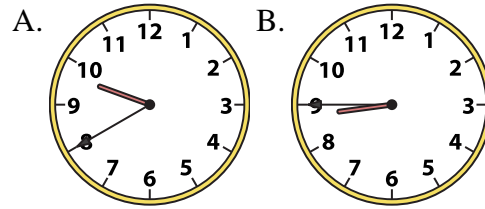
2) 3:45



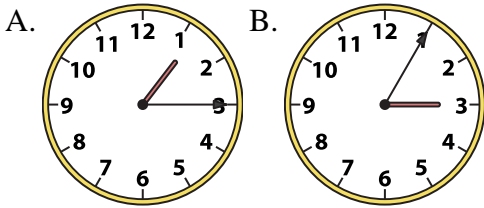
3) 4:30



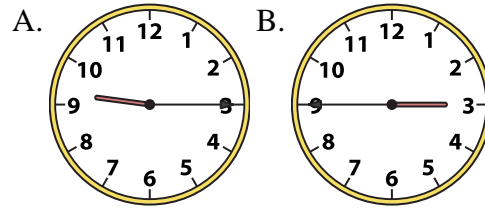
4) 8:45



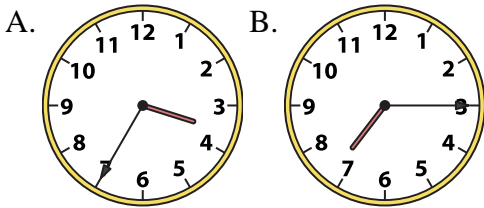
5) 1:15



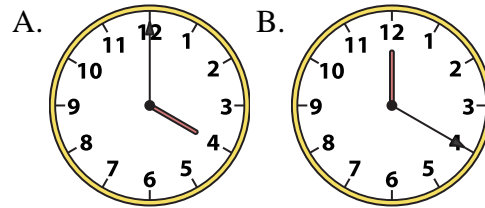
6) 9:15



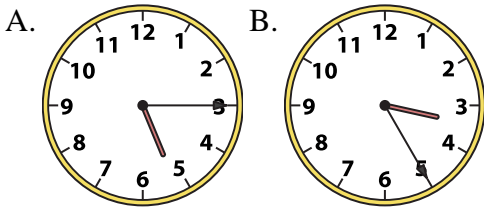
7) 7:15



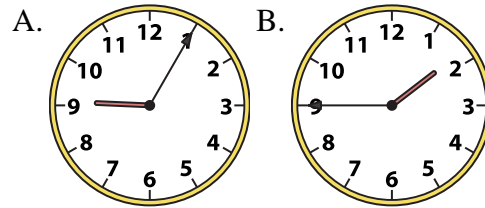
8) 4:00



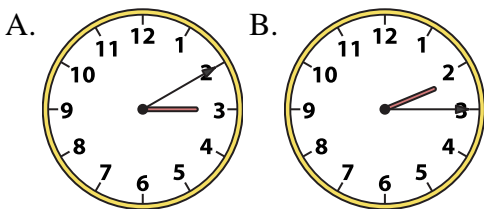
9) 5:15



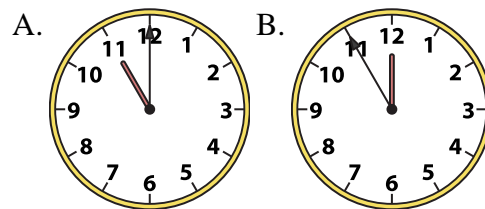
10) 1:45



11) 2:15



12) 11:00

1. **A** 2. **A** 3. **B** 4. **B** 5. **A** 6. **A** 7. **B** 8. **A** 9. **A** 10. **B** 11. **B** 12. **A**