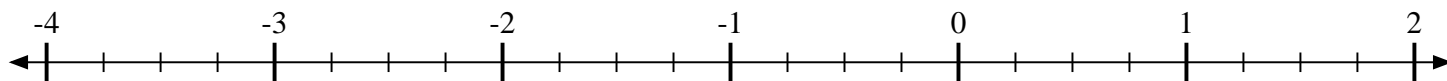
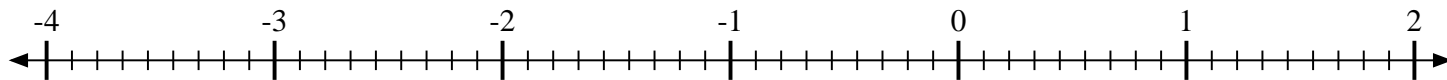


**Markiere jede beschriebene Lage, positiv oder negativ.**

- 1) Markiere die Lage von
- $-1\frac{2}{4}$



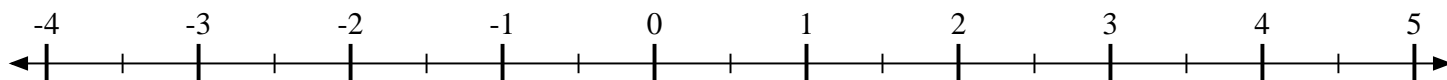
- 2) Markiere die Lage von
- $\frac{2}{9}$



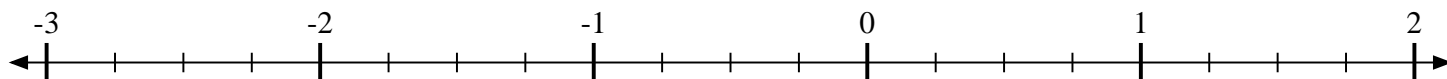
- 3) Markiere die Lage von
- $\frac{1}{2}$



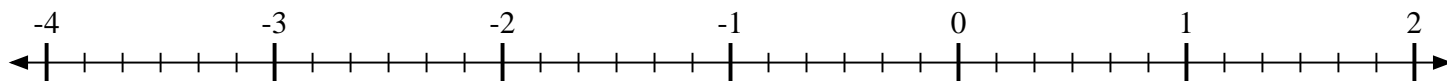
- 4) Markiere die Lage von
- $3\frac{1}{2}$



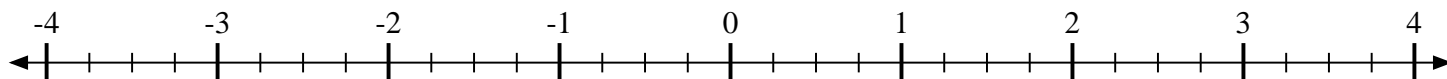
- 5) Markiere die Lage von
- $-1\frac{2}{4}$



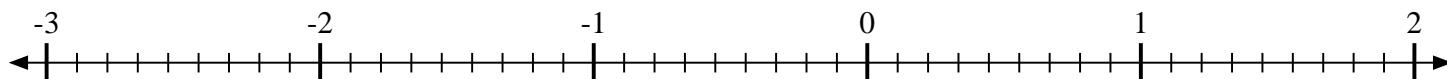
- 6) Markiere die Lage von
- $-3\frac{2}{6}$



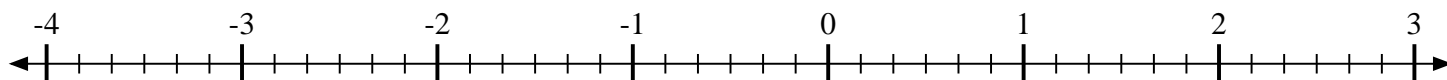
- 7) Markiere die Lage von
- $-2\frac{2}{4}$



- 8) Markiere die Lage von
- $\frac{8}{9}$



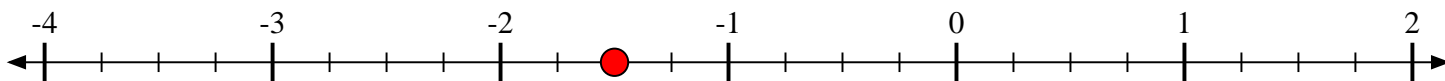
- 9) Markiere die Lage von
- $-2\frac{3}{6}$



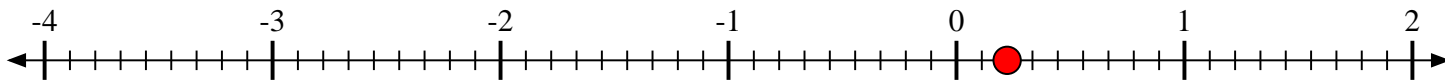


Markiere jede beschriebene Lage, positiv oder negativ.

- 1) Markiere die Lage von
- $-1\frac{2}{4}$



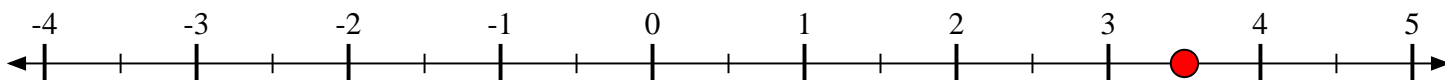
- 2) Markiere die Lage von
- $\frac{2}{9}$



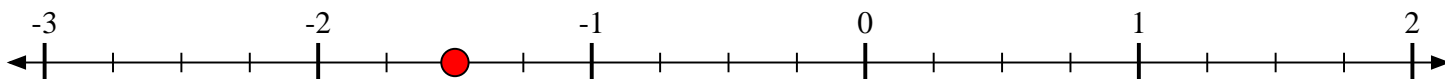
- 3) Markiere die Lage von
- $\frac{1}{2}$



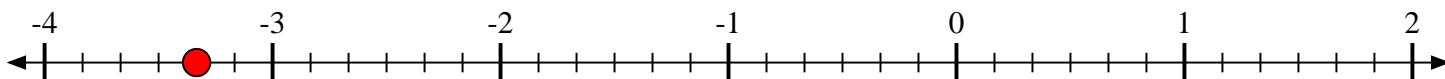
- 4) Markiere die Lage von
- $3\frac{1}{2}$



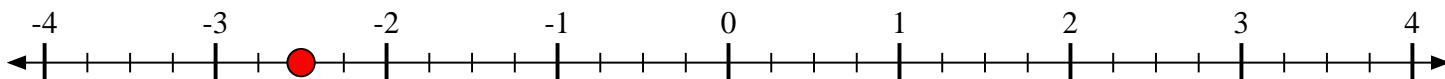
- 5) Markiere die Lage von
- $-1\frac{2}{4}$



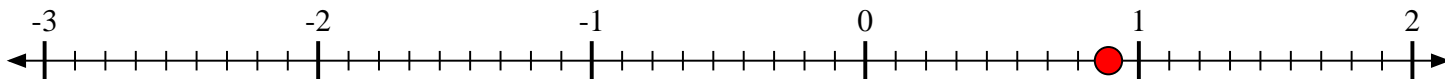
- 6) Markiere die Lage von
- $-3\frac{2}{6}$



- 7) Markiere die Lage von
- $-2\frac{2}{4}$



- 8) Markiere die Lage von
- $\frac{8}{9}$



- 9) Markiere die Lage von
- $-2\frac{3}{6}$

