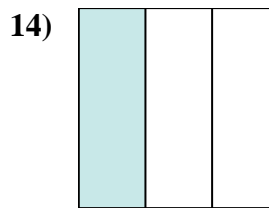
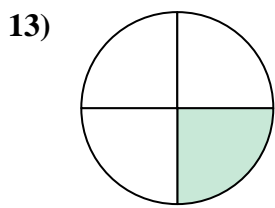
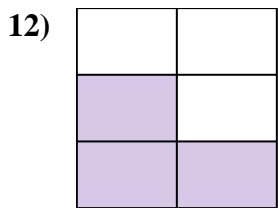
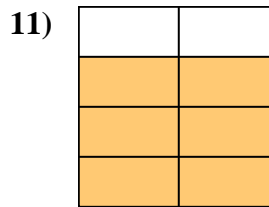
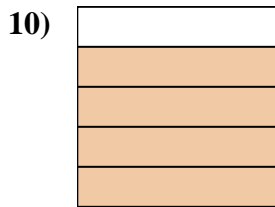
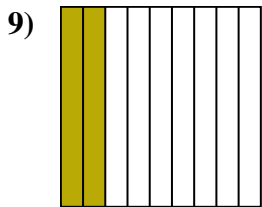
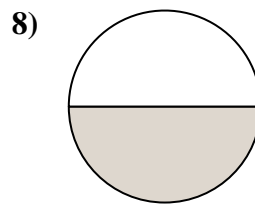
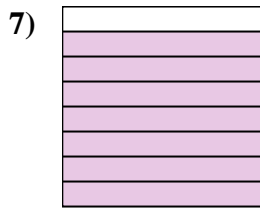
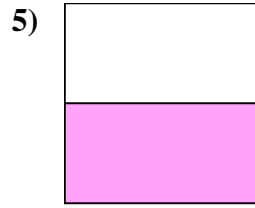
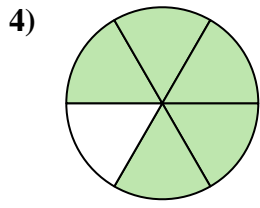
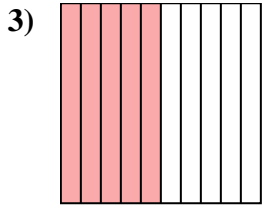
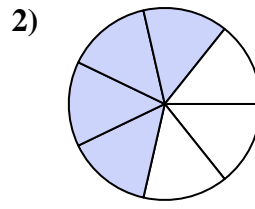
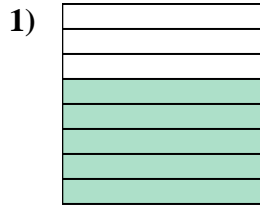
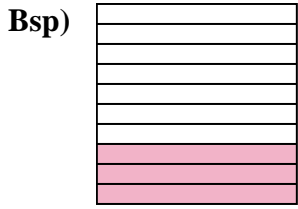




Schreiben Sie den schattierten Betrag in Wortform.



Antworten

Bsp. drei Zehntel

1. _____

2. _____

3. _____

4. _____

5. _____

6. _____

7. _____

8. _____

9. _____

10. _____

11. _____

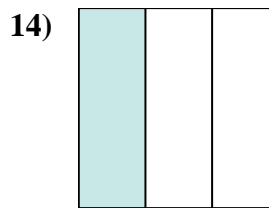
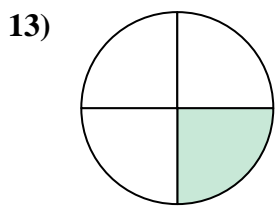
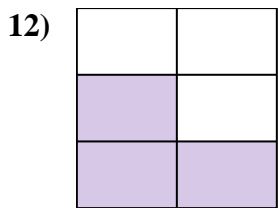
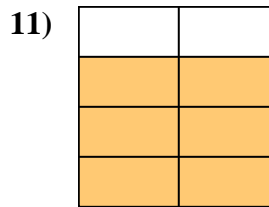
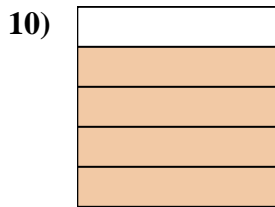
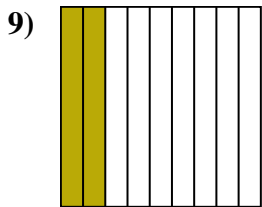
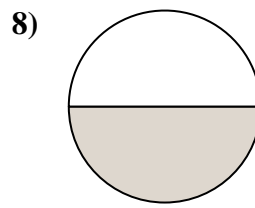
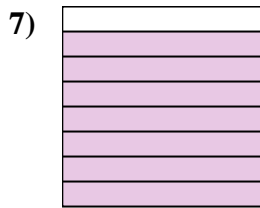
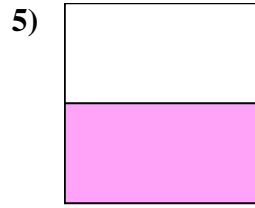
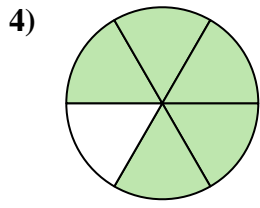
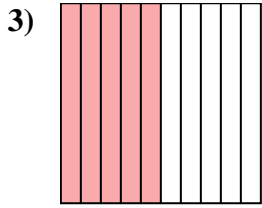
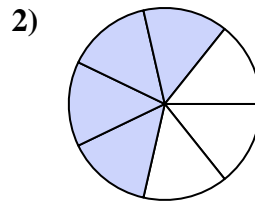
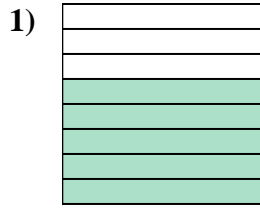
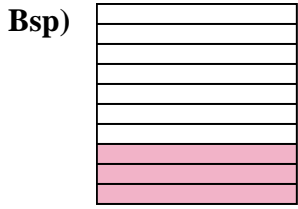
12. _____

13. _____

14. _____



Schreiben Sie den schattierten Betrag in Wortform.



Antworten

Bsp. drei Zehntel

1. fünf Achtel

2. vier Siebtel

3. fünf Zehntel

4. fünf-sechstel

5. eine Hälfte

6. ein Sechstel

7. sieben Achtel

8. eine Hälfte

9. zwei Neuntel

10. vier Fünftel

11. Sechs-Siebtel

12. drei Fünftel

13. ein Viertel

14. ein Drittel