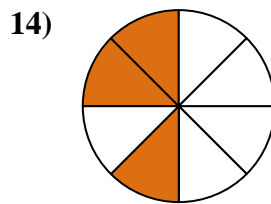
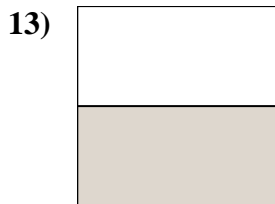
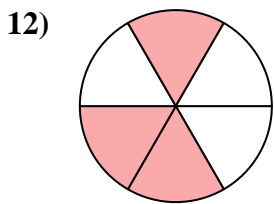
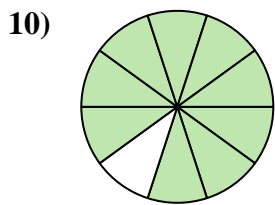
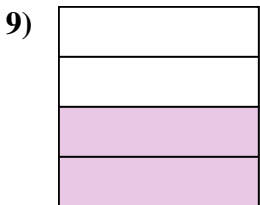
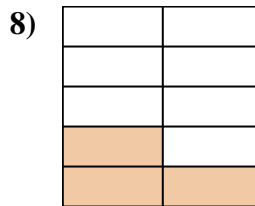
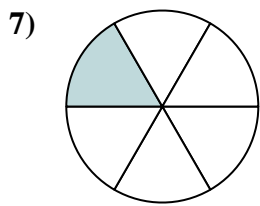
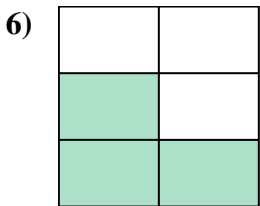
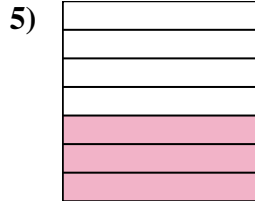
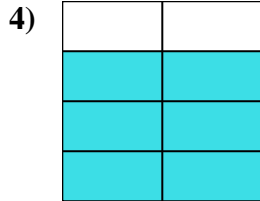
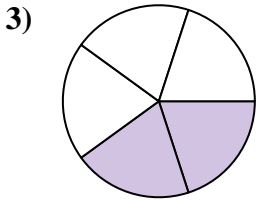
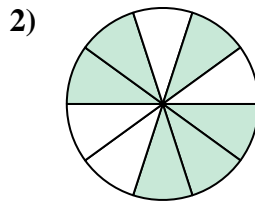
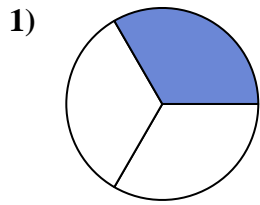
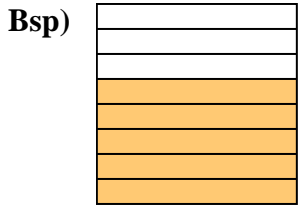




Schreiben Sie den schattierten Betrag in Wortform.



Antworten

Bsp. fünf Achtel

1. _____

2. _____

3. _____

4. _____

5. _____

6. _____

7. _____

8. _____

9. _____

10. _____

11. _____

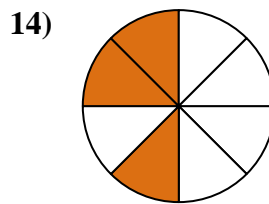
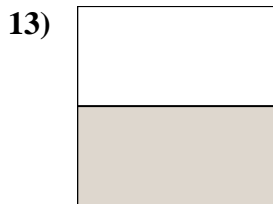
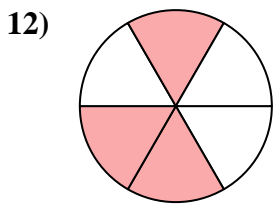
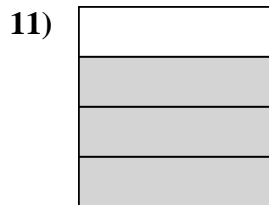
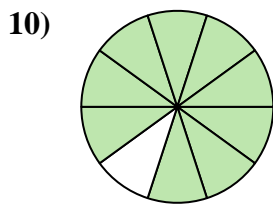
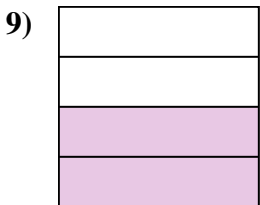
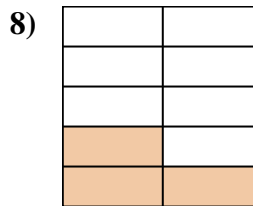
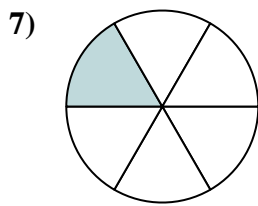
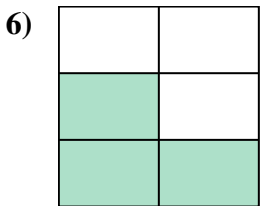
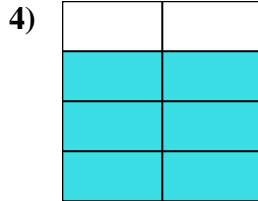
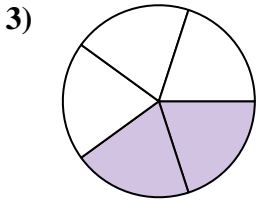
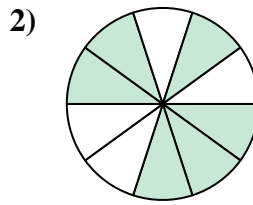
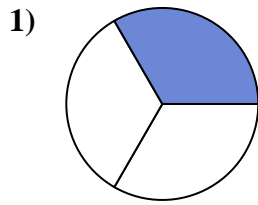
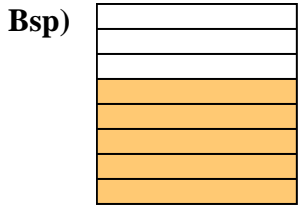
12. _____

13. _____

14. _____



Schreiben Sie den schattierten Betrag in Wortform.

**Antworten**Bsp. fünf Achtel1. ein Drittel2. sechs Zehntel3. zwei Fünftel4. Sechs-Siebtel5. drei Siebtel6. drei Fünftel7. ein Sechstel8. drei Neuntel9. zwei Viertel10. neun Zehntel11. Dreiviertel12. drei-sechstel13. eine Hälfte14. drei Achtel