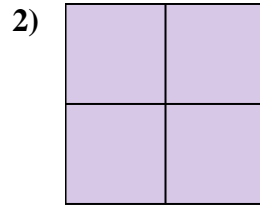
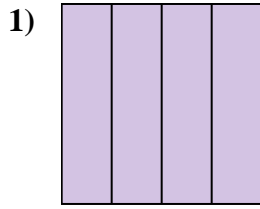
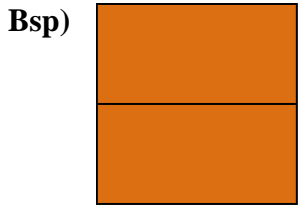




Schreiben Sie den schattierten Betrag als Bruch.

Antworten



Bsp. $\frac{2}{2}$

1. _____

2. _____

3. _____

4. _____

5. _____

6. _____

7. _____

8. _____

9. _____

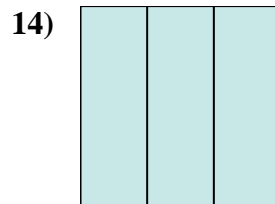
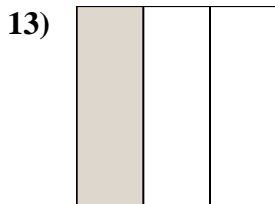
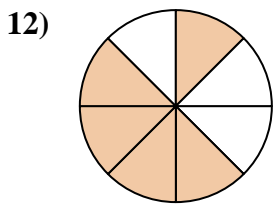
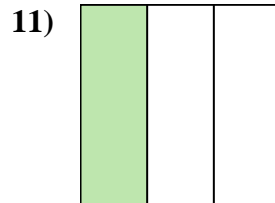
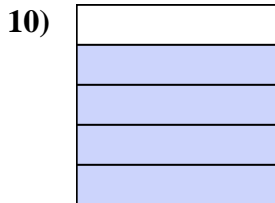
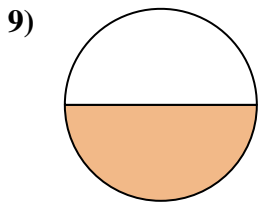
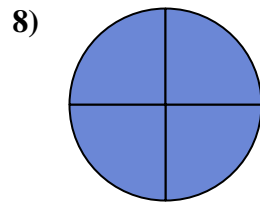
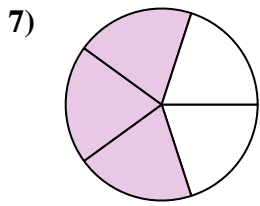
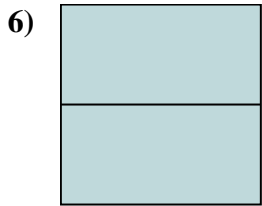
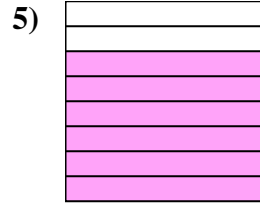
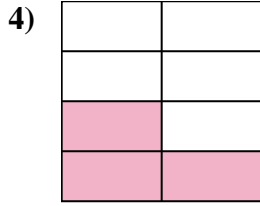
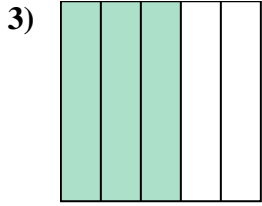
10. _____

11. _____

12. _____

13. _____

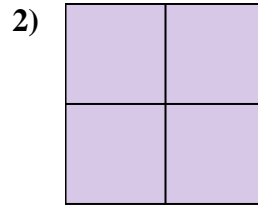
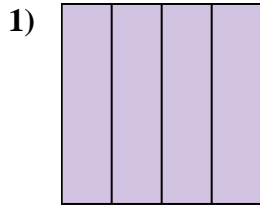
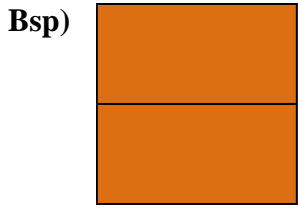
14. _____





Schreiben Sie den schattierten Betrag als Bruch.

Antworten



Bsp. 2/2

1. 4/4

2. 4/4

3. 3/5

4. 3/8

5. 6/8

6. 2/2

7. 3/5

8. 4/4

9. 1/2

10. 4/5

11. 1/3

12. 5/8

13. 1/3

14. 3/3

