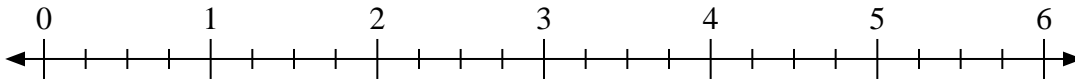




Benutze den Zahlenstrahl um die Aufgabe zu lösen.

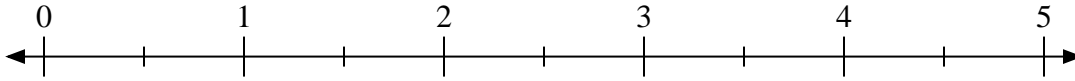
Antworten

1) $6:\frac{3}{4}$



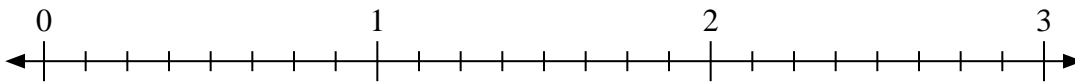
1. _____

2) $5:\frac{1}{2}$



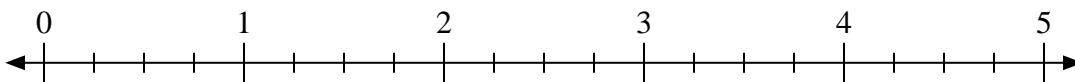
2. _____

3) $3:\frac{6}{8}$



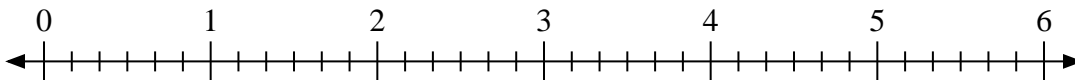
3. _____

4) $3:\frac{3}{4}$



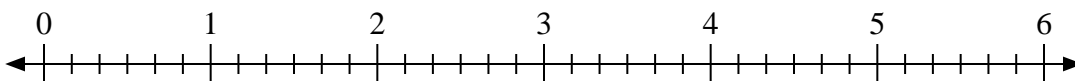
4. _____

5) $6:\frac{3}{6}$



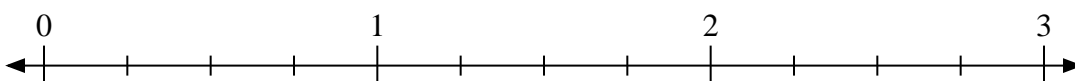
5. _____

6) $5:\frac{1}{6}$




6. _____

7) $3:\frac{1}{4}$



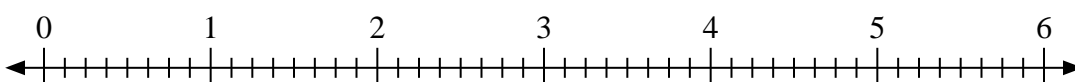
7. _____

8) $3:\frac{2}{3}$



8. _____

9) $3:\frac{3}{8}$

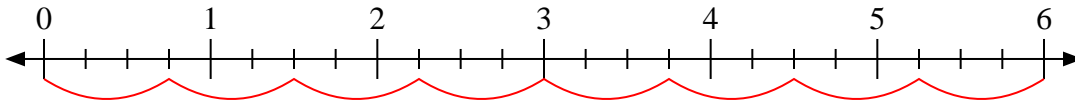


9. _____

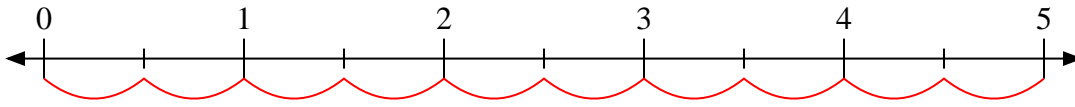


Benutze den Zahlenstrahl um die Aufgabe zu lösen.

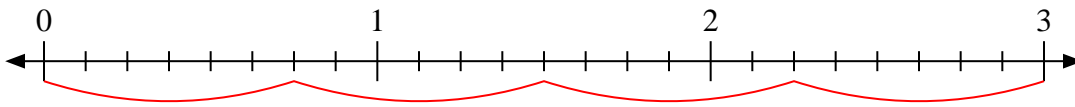
1) $6 : \frac{3}{4}$



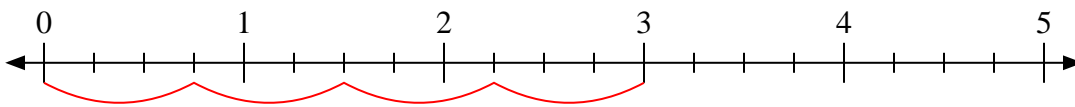
2) $5 : \frac{1}{2}$



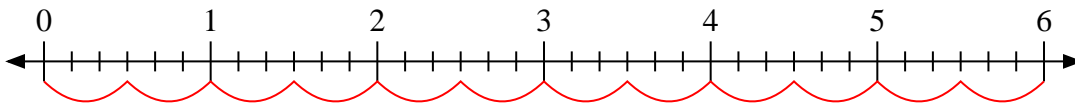
3) $3 : \frac{6}{8}$



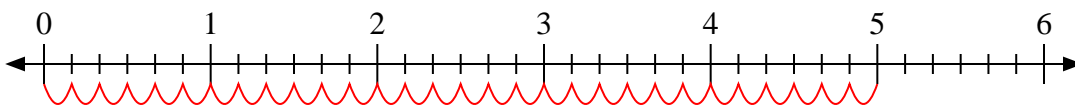
4) $3 : \frac{3}{4}$



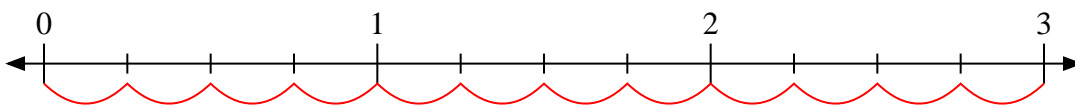
5) $6 : \frac{3}{6}$



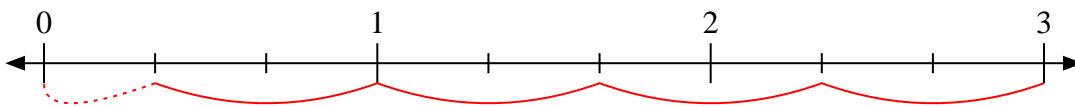
6) $5 : \frac{1}{6}$



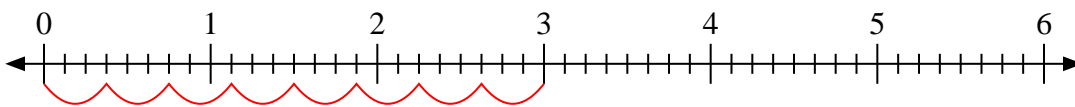
7) $3 : \frac{1}{4}$



8) $3 : \frac{2}{3}$



9) $3 : \frac{3}{8}$

**Antworten**1. 82. 103. 44. 45. 126. 307. 128. 4 1/29. 8