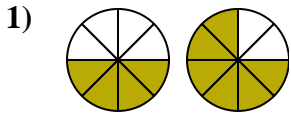
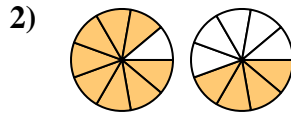




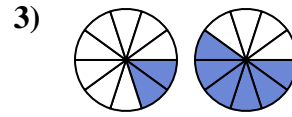
Stelle fest, welcher Buchstabe die richtige Bruchgleichung darstellt.

**Antworten**

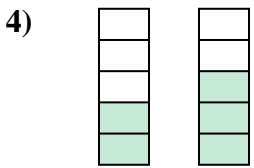
- A.  $\frac{4}{4} < \frac{2}{6}$   
 B.  $\frac{4}{4} > \frac{6}{2}$   
 C.  $\frac{4}{8} < \frac{6}{8}$   
 D.  $\frac{4}{8} > \frac{6}{8}$



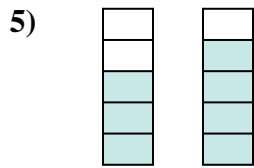
- A.  $\frac{1}{8} > \frac{5}{4}$   
 B.  $\frac{8}{9} > \frac{4}{9}$   
 C.  $\frac{8}{9} < \frac{4}{9}$   
 D.  $\frac{9}{8} > \frac{9}{4}$



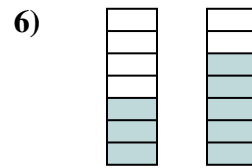
- A.  $\frac{2}{8} > \frac{6}{4}$   
 B.  $\frac{8}{2} > \frac{4}{6}$   
 C.  $\frac{2}{10} < \frac{6}{10}$   
 D.  $\frac{10}{2} > \frac{10}{6}$



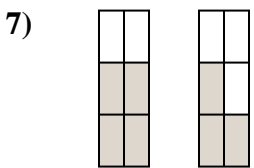
- A.  $\frac{2}{3} > \frac{3}{2}$   
 B.  $\frac{3}{2} > \frac{2}{3}$   
 C.  $\frac{2}{5} < \frac{3}{5}$   
 D.  $\frac{3}{2} < \frac{2}{3}$



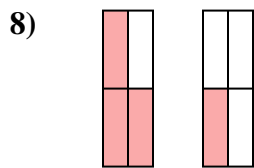
- A.  $\frac{3}{2} < \frac{4}{1}$   
 B.  $\frac{3}{5} < \frac{4}{5}$   
 C.  $\frac{3}{2} > \frac{4}{1}$   
 D.  $\frac{2}{3} > \frac{1}{4}$



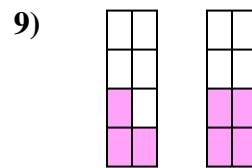
- A.  $\frac{3}{7} < \frac{5}{7}$   
 B.  $\frac{3}{4} > \frac{5}{2}$   
 C.  $\frac{7}{3} > \frac{7}{5}$   
 D.  $\frac{3}{7} > \frac{5}{7}$



- A.  $\frac{4}{6} < \frac{3}{6}$   
 B.  $\frac{4}{2} > \frac{3}{3}$   
 C.  $\frac{4}{6} > \frac{3}{6}$   
 D.  $\frac{4}{2} < \frac{3}{3}$



- A.  $\frac{1}{3} < \frac{3}{1}$   
 B.  $\frac{4}{3} > \frac{4}{1}$   
 C.  $\frac{3}{4} > \frac{1}{4}$   
 D.  $\frac{3}{1} > \frac{1}{3}$

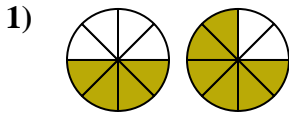


- A.  $\frac{3}{8} < \frac{4}{8}$   
 B.  $\frac{3}{5} > \frac{4}{4}$   
 C.  $\frac{3}{8} > \frac{4}{8}$   
 D.  $\frac{5}{3} < \frac{4}{4}$

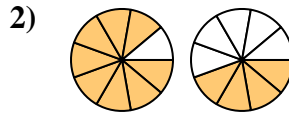
1. \_\_\_\_\_  
 2. \_\_\_\_\_  
 3. \_\_\_\_\_  
 4. \_\_\_\_\_  
 5. \_\_\_\_\_  
 6. \_\_\_\_\_  
 7. \_\_\_\_\_  
 8. \_\_\_\_\_  
 9. \_\_\_\_\_



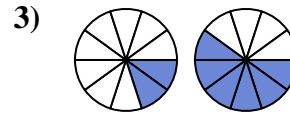
Stelle fest, welcher Buchstabe die richtige Bruchgleichung darstellt.

**Antworten**

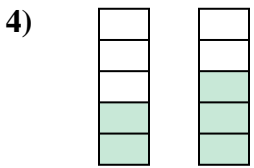
- A.  $\frac{4}{4} < \frac{2}{6}$   
 B.  $\frac{4}{4} > \frac{6}{2}$   
 C.  $\frac{4}{8} < \frac{6}{8}$   
 D.  $\frac{4}{8} > \frac{6}{8}$



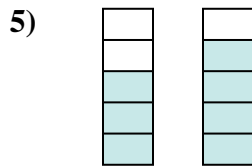
- A.  $\frac{1}{8} > \frac{5}{4}$   
 B.  $\frac{8}{9} > \frac{4}{9}$   
 C.  $\frac{8}{9} < \frac{4}{9}$   
 D.  $\frac{9}{8} > \frac{9}{4}$



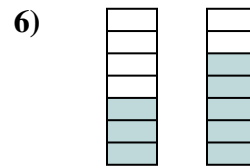
- A.  $\frac{2}{8} > \frac{6}{4}$   
 B.  $\frac{8}{2} > \frac{4}{6}$   
 C.  $\frac{2}{10} < \frac{6}{10}$   
 D.  $\frac{10}{2} > \frac{10}{6}$



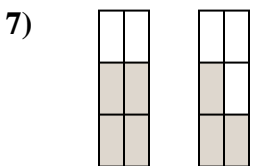
- A.  $\frac{2}{3} > \frac{3}{2}$   
 B.  $\frac{3}{2} > \frac{2}{3}$   
 C.  $\frac{2}{5} < \frac{3}{5}$   
 D.  $\frac{3}{2} < \frac{2}{3}$



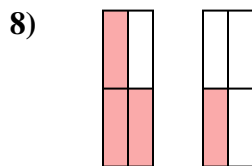
- A.  $\frac{3}{2} < \frac{4}{1}$   
 B.  $\frac{3}{5} < \frac{4}{5}$   
 C.  $\frac{3}{2} > \frac{4}{1}$   
 D.  $\frac{2}{3} > \frac{1}{4}$



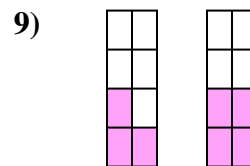
- A.  $\frac{3}{7} < \frac{5}{7}$   
 B.  $\frac{3}{4} > \frac{5}{2}$   
 C.  $\frac{7}{3} > \frac{7}{5}$   
 D.  $\frac{3}{7} > \frac{5}{7}$



- A.  $\frac{4}{6} < \frac{3}{6}$   
 B.  $\frac{4}{2} > \frac{3}{3}$   
 C.  $\frac{4}{6} > \frac{3}{6}$   
 D.  $\frac{4}{2} < \frac{3}{3}$



- A.  $\frac{1}{3} < \frac{3}{1}$   
 B.  $\frac{4}{3} > \frac{4}{1}$   
 C.  $\frac{3}{4} > \frac{1}{4}$   
 D.  $\frac{3}{1} > \frac{1}{3}$



- A.  $\frac{3}{8} < \frac{4}{8}$   
 B.  $\frac{3}{5} > \frac{4}{4}$   
 C.  $\frac{3}{8} > \frac{4}{8}$   
 D.  $\frac{5}{3} < \frac{4}{4}$

1.     **C**      
 2.     **B**      
 3.     **C**      
 4.     **C**      
 5.     **B**      
 6.     **A**      
 7.     **C**      
 8.     **C**      
 9.     **A**