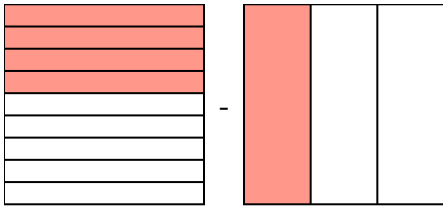


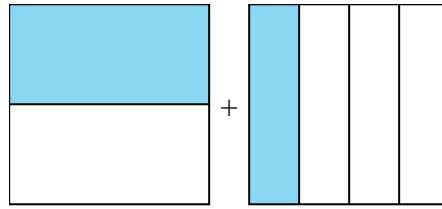


**Löse jede Aufgabe.**

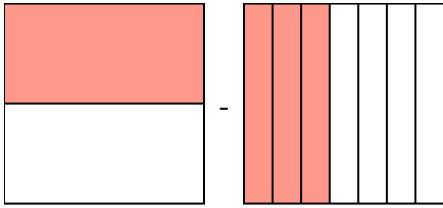
1)  $\frac{4}{9} - \frac{1}{3} =$



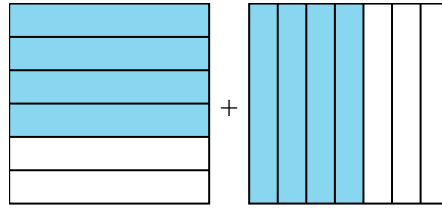
2)  $\frac{1}{2} + \frac{1}{4} =$



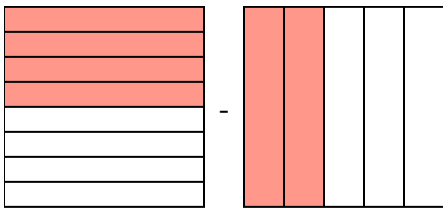
3)  $\frac{1}{2} - \frac{3}{7} =$



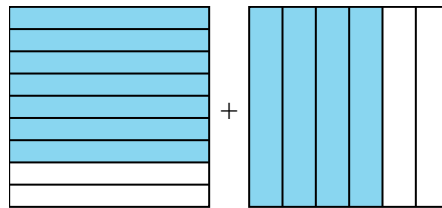
4)  $\frac{4}{6} + \frac{4}{7} =$



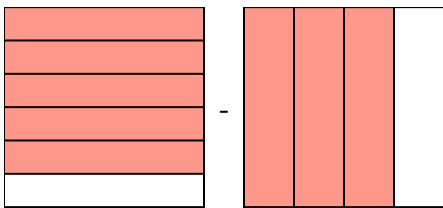
5)  $\frac{4}{8} - \frac{2}{5} =$



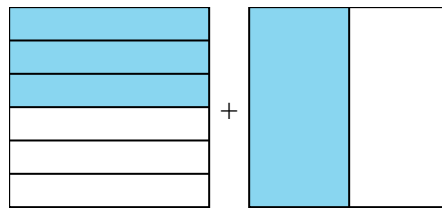
6)  $\frac{7}{9} + \frac{4}{6} =$



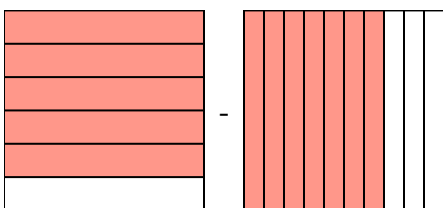
7)  $\frac{5}{6} - \frac{3}{4} =$



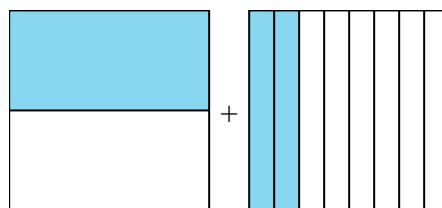
8)  $\frac{3}{6} + \frac{1}{2} =$



9)  $\frac{5}{6} - \frac{7}{10} =$



10)  $\frac{1}{2} + \frac{2}{8} =$



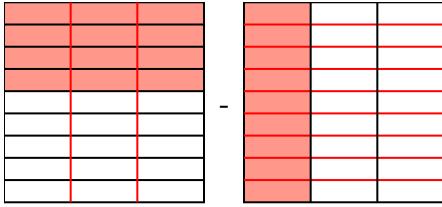
**Antworten**

1. \_\_\_\_\_
2. \_\_\_\_\_
3. \_\_\_\_\_
4. \_\_\_\_\_
5. \_\_\_\_\_
6. \_\_\_\_\_
7. \_\_\_\_\_
8. \_\_\_\_\_
9. \_\_\_\_\_
10. \_\_\_\_\_

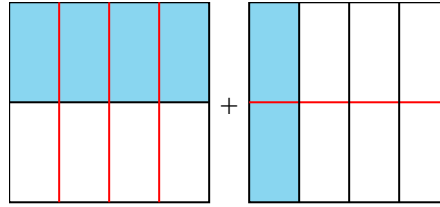


Löse jede Aufgabe.

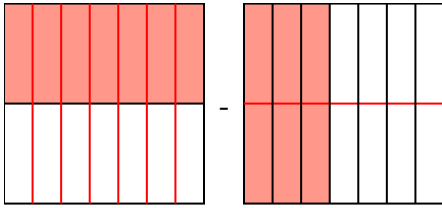
1)  $\frac{4}{9} - \frac{1}{3} = \frac{4}{9} - \frac{3}{9} = \frac{1}{9}$



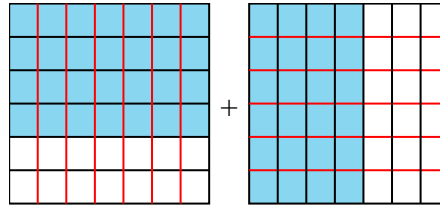
2)  $\frac{1}{2} + \frac{1}{4} = \frac{2}{4} + \frac{1}{4} = \frac{3}{4}$



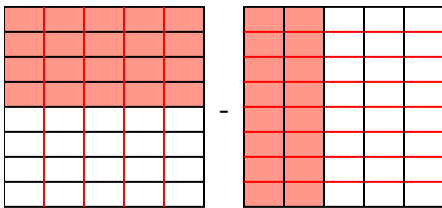
3)  $\frac{1}{2} - \frac{3}{7} = \frac{7}{14} - \frac{6}{14} = \frac{1}{14}$



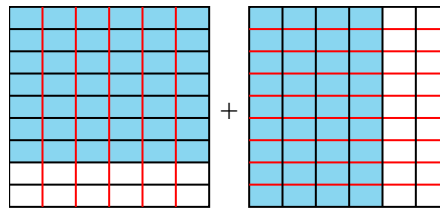
4)  $\frac{4}{6} + \frac{4}{7} = \frac{28}{42} + \frac{24}{42} = 1\frac{10}{42}$



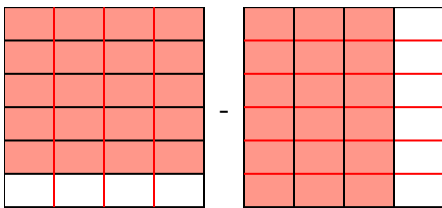
5)  $\frac{4}{8} - \frac{2}{5} = \frac{20}{40} - \frac{16}{40} = \frac{4}{40}$



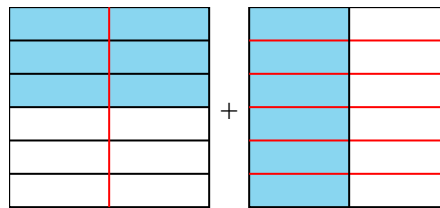
6)  $\frac{7}{9} + \frac{4}{6} = \frac{14}{18} + \frac{12}{18} = 1\frac{8}{18}$



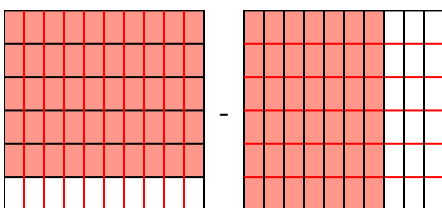
7)  $\frac{5}{6} - \frac{3}{4} = \frac{10}{12} - \frac{9}{12} = \frac{1}{12}$



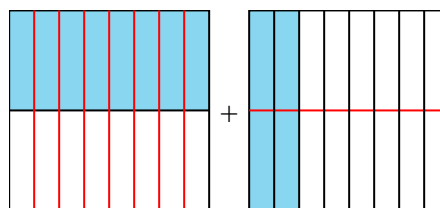
8)  $\frac{3}{6} + \frac{1}{2} = \frac{3}{6} + \frac{3}{6} = 1\frac{0}{6}$



9)  $\frac{5}{6} - \frac{7}{10} = \frac{25}{30} - \frac{21}{30} = \frac{4}{30}$



10)  $\frac{1}{2} + \frac{2}{8} = \frac{4}{8} + \frac{2}{8} = \frac{6}{8}$



**Antworten**

1.  $\frac{1}{9}$
2.  $\frac{3}{4}$
3.  $\frac{1}{14}$
4.  $1\frac{10}{42}$
5.  $\frac{4}{40}$
6.  $1\frac{8}{18}$
7.  $\frac{1}{12}$
8.  $1\frac{0}{6}$
9.  $\frac{4}{30}$
10.  $\frac{6}{8}$