



Suche zu jeder Gleichung den visuellen Gegenpart und finde die numerische Antwort.

Antworten

Bsp) $\frac{1}{8} + \frac{1}{8} + \frac{1}{8} + \frac{1}{8} + \frac{1}{8}$

Bsp. A

1) $\frac{1}{4} + \frac{1}{4} + \frac{1}{4}$



1. _____

2) $\frac{1}{10} + \frac{1}{10} + \frac{1}{10} + \frac{1}{10} + \frac{1}{10} + \frac{1}{10}$



2. _____

3) $\frac{1}{6} + \frac{1}{6}$




3. _____

4) $\frac{1}{8} + \frac{1}{8} + \frac{1}{8} + \frac{1}{8} + \frac{1}{8} + \frac{1}{8} + \frac{1}{8}$



5. _____

5) $\frac{1}{6} + \frac{1}{6} + \frac{1}{6} + \frac{1}{6}$



6. _____

6) $\frac{1}{12} + \frac{1}{12} + \frac{1}{12} + \frac{1}{12} + \frac{1}{12}$



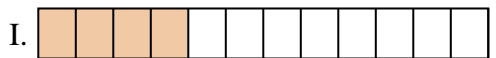
7. _____

7) $\frac{1}{8} + \frac{1}{8} + \frac{1}{8} + \frac{1}{8}$



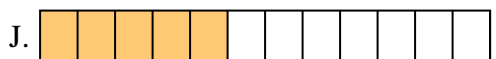
9. _____

8) $\frac{1}{3} + \frac{1}{3}$



10. _____

9) $\frac{1}{6} + \frac{1}{6} + \frac{1}{6} + \frac{1}{6} + \frac{1}{6}$




11. _____

10) $\frac{1}{12} + \frac{1}{12} + \frac{1}{12} + \frac{1}{12}$



12. _____

11) $\frac{1}{10} + \frac{1}{10} + \frac{1}{10} + \frac{1}{10}$




13. _____

12) $\frac{1}{5} + \frac{1}{5} + \frac{1}{5} + \frac{1}{5}$



14. _____

13) $\frac{1}{4} + \frac{1}{4}$

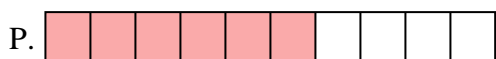


15. _____

14) $\frac{1}{8} + \frac{1}{8} + \frac{1}{8} + \frac{1}{8} + \frac{1}{8} + \frac{1}{8}$



15) $\frac{1}{5} + \frac{1}{5}$






Suche zu jeder Gleichung den visuellen Gegenpart und finde die numerische Antwort.

Antworten


Bsp) $\frac{1}{8} + \frac{1}{8} + \frac{1}{8} + \frac{1}{8} + \frac{1}{8}$

Bsp. **A**

1) $\frac{1}{4} + \frac{1}{4} + \frac{1}{4}$

1. **F**

2) $\frac{1}{10} + \frac{1}{10} + \frac{1}{10} + \frac{1}{10} + \frac{1}{10} + \frac{1}{10}$

2. **P**


3) $\frac{1}{6} + \frac{1}{6}$

3. **N**

4) $\frac{1}{8} + \frac{1}{8} + \frac{1}{8} + \frac{1}{8} + \frac{1}{8} + \frac{1}{8} + \frac{1}{8}$

4. **O**

5) $\frac{1}{6} + \frac{1}{6} + \frac{1}{6} + \frac{1}{6}$

5. **H**


6) $\frac{1}{12} + \frac{1}{12} + \frac{1}{12} + \frac{1}{12} + \frac{1}{12}$

6. **J**

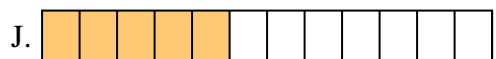
7) $\frac{1}{8} + \frac{1}{8} + \frac{1}{8} + \frac{1}{8}$

7. **C**

8) $\frac{1}{3} + \frac{1}{3}$

8. **K**

9) $\frac{1}{6} + \frac{1}{6} + \frac{1}{6} + \frac{1}{6} + \frac{1}{6}$

9. **L**

10) $\frac{1}{12} + \frac{1}{12} + \frac{1}{12} + \frac{1}{12}$

10. **I**


11) $\frac{1}{10} + \frac{1}{10} + \frac{1}{10} + \frac{1}{10}$

11. **D**

12) $\frac{1}{5} + \frac{1}{5} + \frac{1}{5} + \frac{1}{5}$

12. **B**


13) $\frac{1}{4} + \frac{1}{4}$

13. **M**

14) $\frac{1}{8} + \frac{1}{8} + \frac{1}{8} + \frac{1}{8} + \frac{1}{8} + \frac{1}{8}$

14. **G**

15) $\frac{1}{5} + \frac{1}{5}$

15. **E**