



Stelle fest, welcher Buchstabe die Summe ergibt.

1) $\frac{4}{10} + \frac{1}{10}$

2) $\frac{3}{8} + \frac{7}{8}$

3) $\frac{2}{4} + \frac{2}{4}$

4) $\frac{4}{10} + \frac{7}{10}$

5) $\frac{1}{5} + \frac{1}{5}$

6) $\frac{2}{6} + \frac{2}{6}$

7) $\frac{1}{3} + \frac{2}{3}$

8) $\frac{3}{4} + \frac{2}{4}$

9) $\frac{1}{2} + \frac{1}{2}$

10) $\frac{5}{6} + \frac{4}{6}$

11) $\frac{8}{12} + \frac{11}{12}$

12) $\frac{3}{12} + \frac{8}{12}$

13) $\frac{7}{10} + \frac{2}{10}$

14) $\frac{3}{5} + \frac{3}{5}$

Antworten

1. _____

2. _____

3. _____

4. _____

5. _____

6. _____

7. _____

8. _____

9. _____

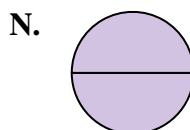
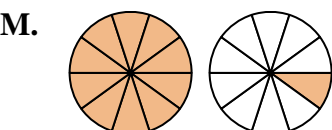
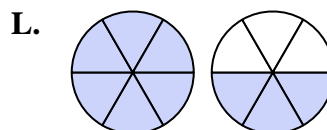
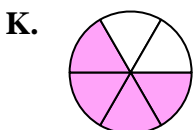
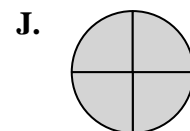
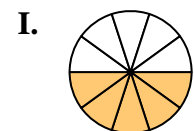
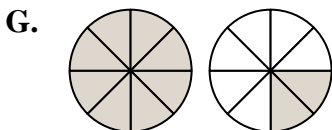
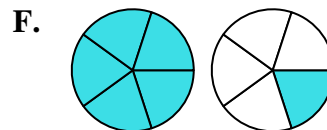
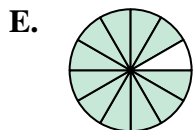
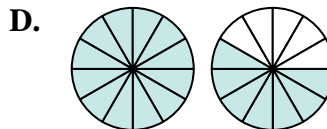
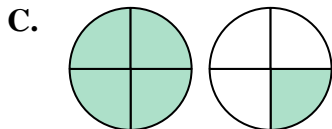
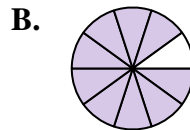
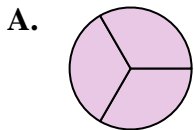
10. _____

11. _____

12. _____

13. _____

14. _____





Stelle fest, welcher Buchstabe die Summe ergibt.

1) $\frac{4}{10} + \frac{1}{10}$

3) $\frac{2}{4} + \frac{2}{4}$

5) $\frac{1}{5} + \frac{1}{5}$

7) $\frac{1}{3} + \frac{2}{3}$

9) $\frac{1}{2} + \frac{1}{2}$

11) $\frac{8}{12} + \frac{11}{12}$

13) $\frac{7}{10} + \frac{2}{10}$

2) $\frac{3}{8} + \frac{7}{8}$

4) $\frac{4}{10} + \frac{7}{10}$

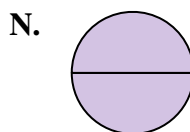
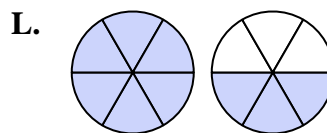
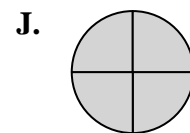
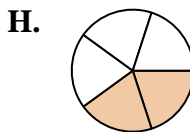
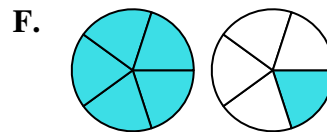
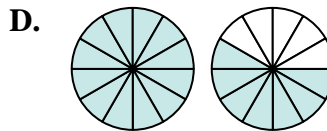
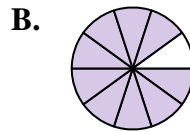
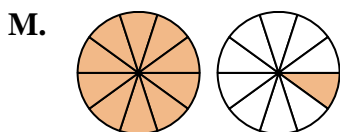
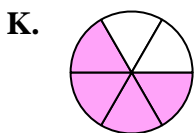
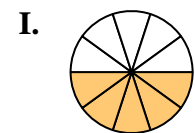
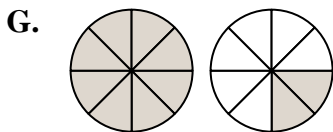
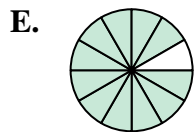
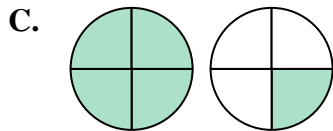
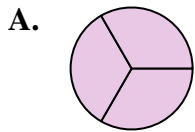
6) $\frac{2}{6} + \frac{2}{6}$

8) $\frac{3}{4} + \frac{2}{4}$

10) $\frac{5}{6} + \frac{4}{6}$

12) $\frac{3}{12} + \frac{8}{12}$

14) $\frac{3}{5} + \frac{3}{5}$

**Antworten**

1. **I** $\frac{5}{10}$

2. **G** $1\frac{2}{8}$

3. **J** $\frac{4}{4}$

4. **M** $1\frac{1}{10}$

5. **H** $\frac{2}{5}$

6. **K** $\frac{4}{6}$

7. **A** $\frac{3}{3}$

8. **C** $1\frac{1}{4}$

9. **N** $\frac{2}{2}$

10. **L** $1\frac{3}{6}$

11. **D** $1\frac{7}{12}$

12. **E** $\frac{11}{12}$

13. **B** $\frac{9}{10}$

14. **F** $1\frac{1}{5}$