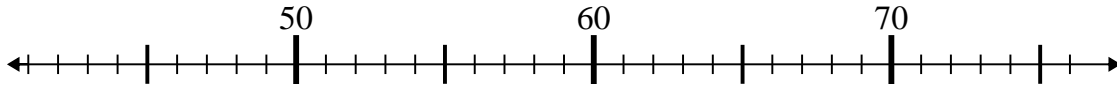




Benutze den Zahlenstrahl um jede Aufgabe zu lösen.

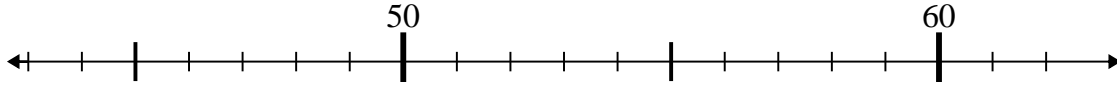
Antworten

1) $52 - 10 =$



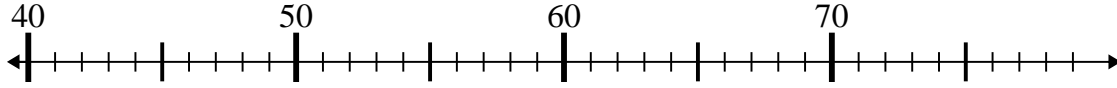
1. _____

2) $60 - 1 =$



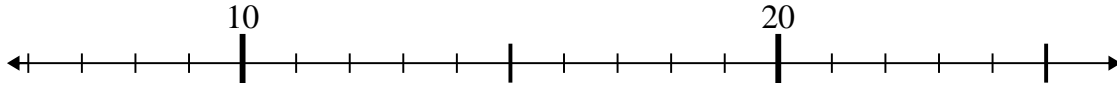
2. _____

3) $58 - 6 =$



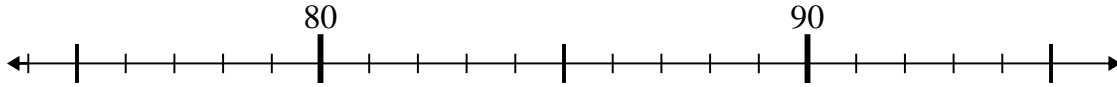
3. _____

4) $13 - 1 =$



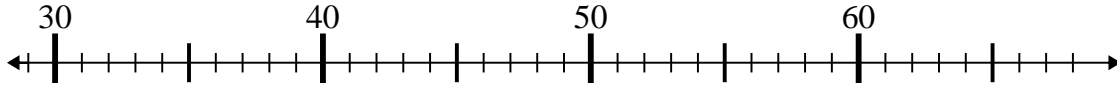
4. _____

5) $86 + 9 =$



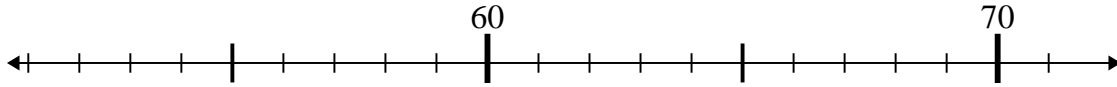
5. _____

6) $31 + 26 =$



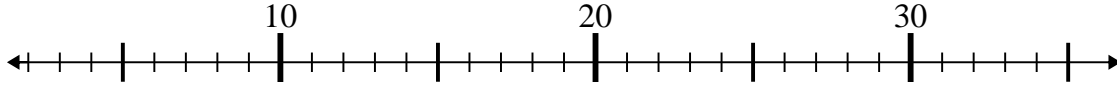
6. _____

7) $55 + 2 =$



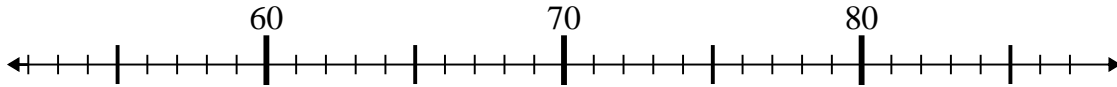
7. _____

8) $35 - 18 =$



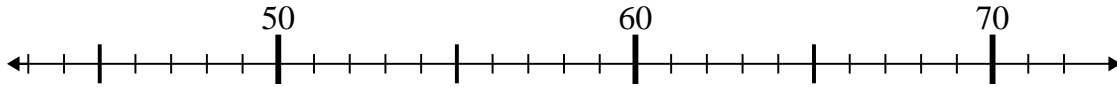
8. _____

9) $76 - 24 =$



9. _____

10) $46 + 15 =$



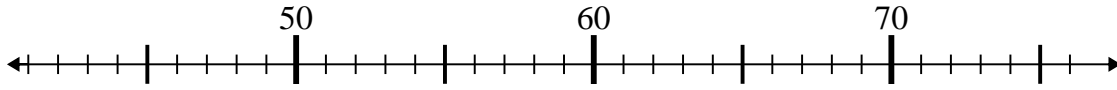
10. _____



Benutze den Zahlenstrahl um jede Aufgabe zu lösen.

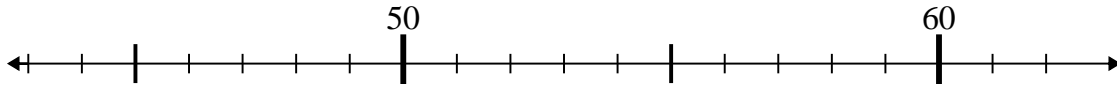
Antworten

1) $52 - 10 =$



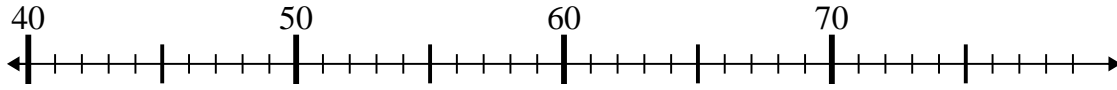
1. 42

2) $60 - 1 =$



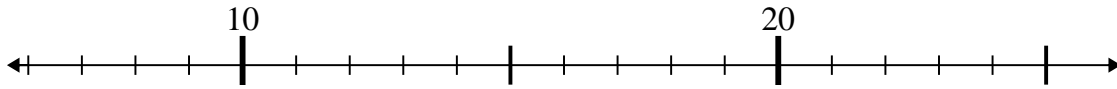
2. 59

3) $58 - 6 =$



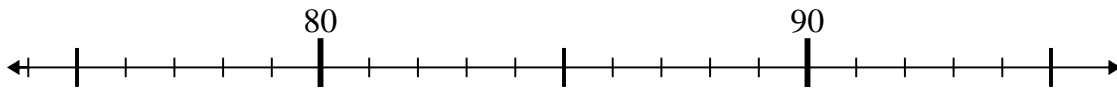
3. 52

4) $13 - 1 =$



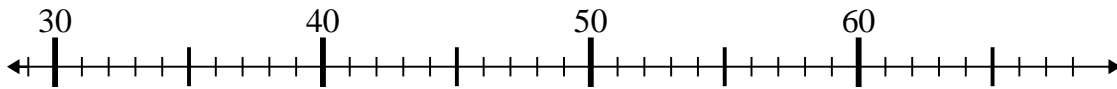
4. 12

5) $86 + 9 =$



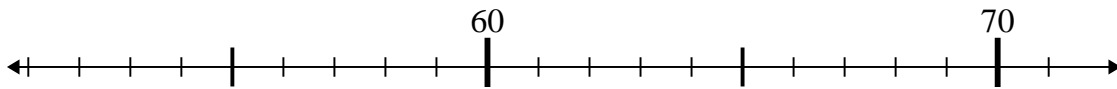
5. 95

6) $31 + 26 =$



6. 57

7) $55 + 2 =$



7. 57

8) $35 - 18 =$



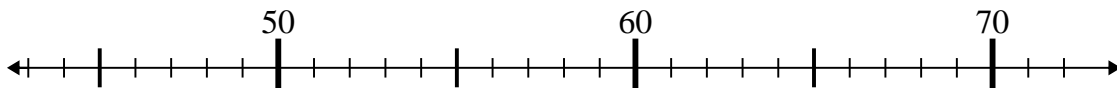
8. 17

9) $76 - 24 =$



9. 52

10) $46 + 15 =$



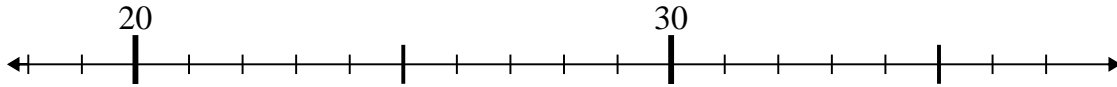
10. 61



Benutze den Zahlenstrahl um jede Aufgabe zu lösen.

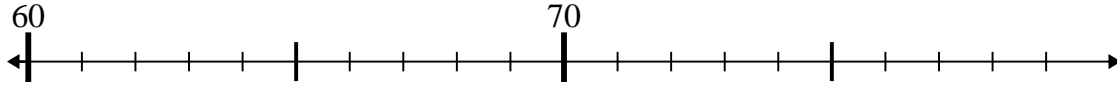
Antworten

1) $23 - 4 =$



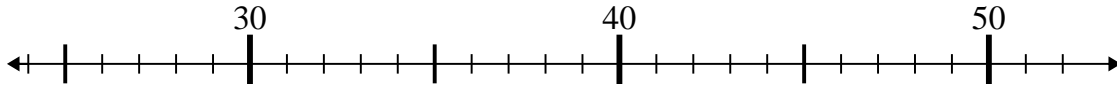
1. _____

2) $73 - 6 =$



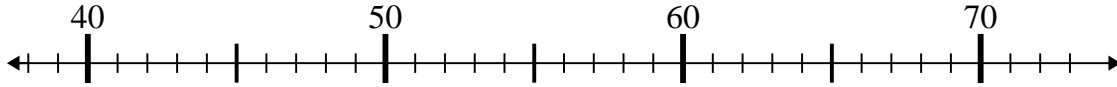
2. _____

3) $44 + 2 =$



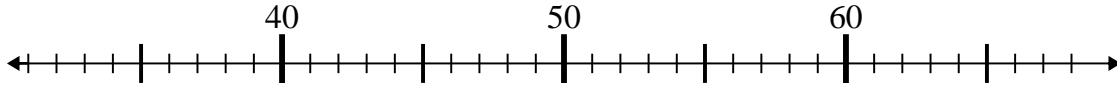
3. _____

4) $42 + 1 =$



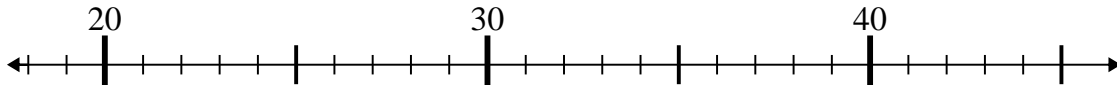
4. _____

5) $40 + 13 =$



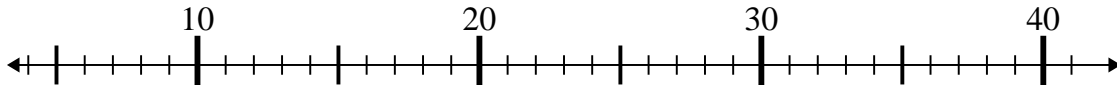
5. _____

6) $26 + 0 =$



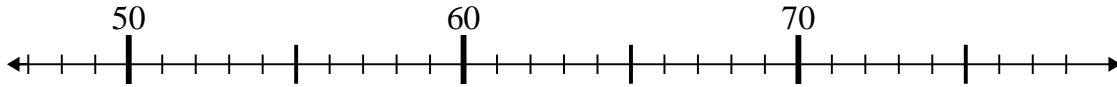
6. _____

7) $36 - 27 =$



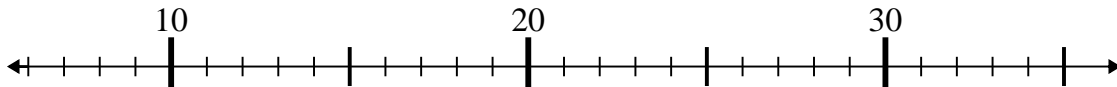
7. _____

8) $54 - 5 =$



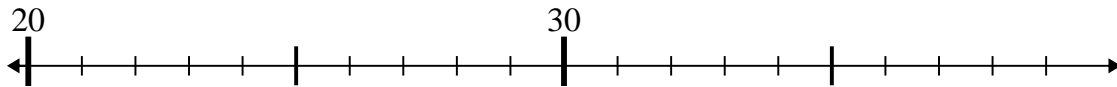
8. _____

9) $10 + 1 =$



9. _____

10) $24 + 1 =$



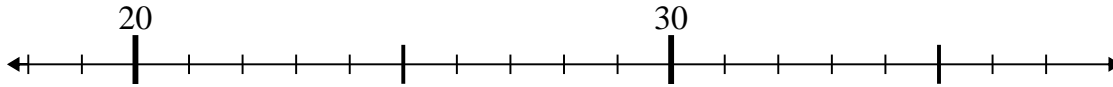
10. _____



Benutze den Zahlenstrahl um jede Aufgabe zu lösen.

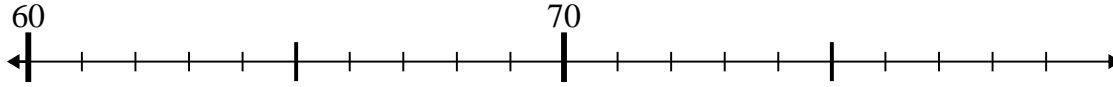
Antworten

1) $23 - 4 =$



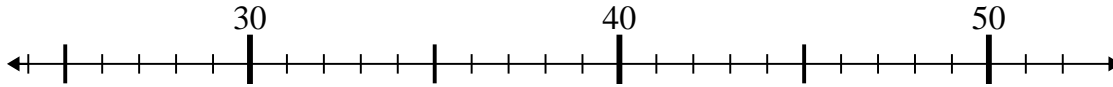
1. 19

2) $73 - 6 =$



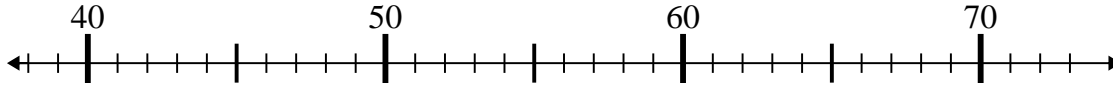
2. 67

3) $44 + 2 =$



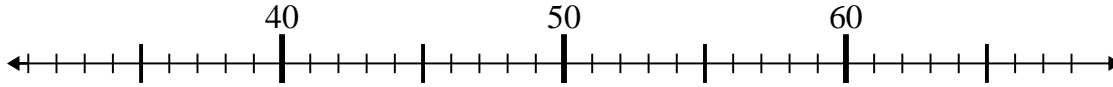
3. 46

4) $42 + 1 =$



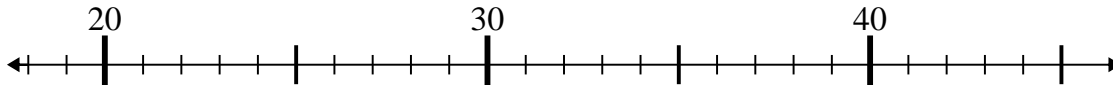
4. 43

5) $40 + 13 =$



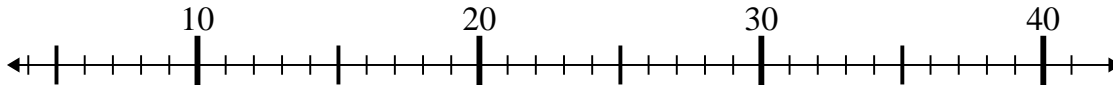
5. 53

6) $26 + 0 =$



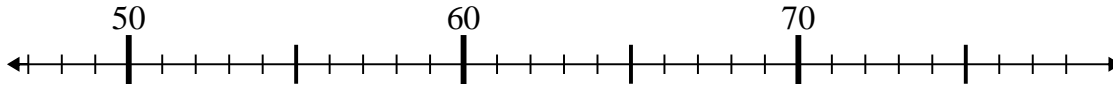
6. 26

7) $36 - 27 =$



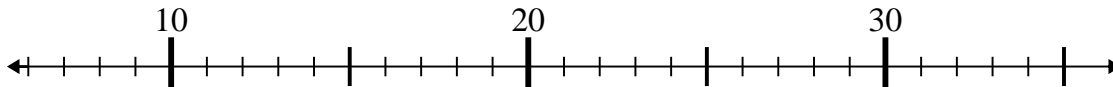
7. 9

8) $54 - 5 =$



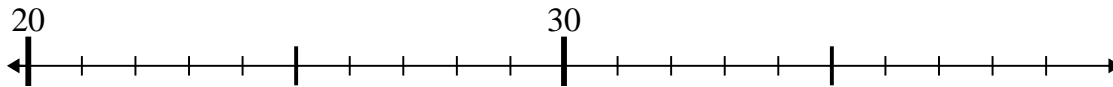
8. 49

9) $10 + 1 =$



9. 11

10) $24 + 1 =$



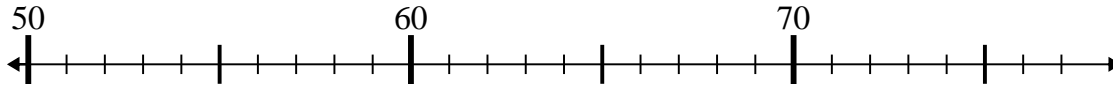
10. 25



Benutze den Zahlenstrahl um jede Aufgabe zu lösen.

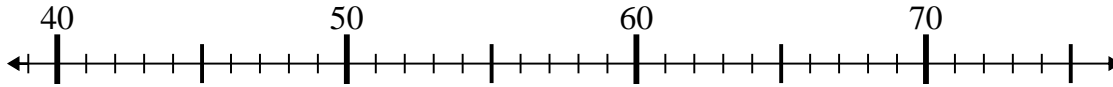
Antworten

1) $70 - 16 =$



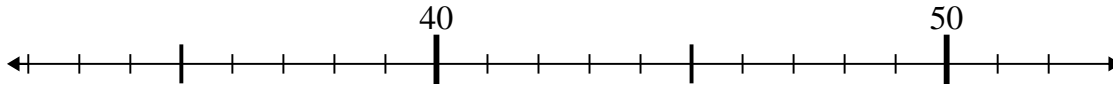
1. _____

2) $39 + 6 =$



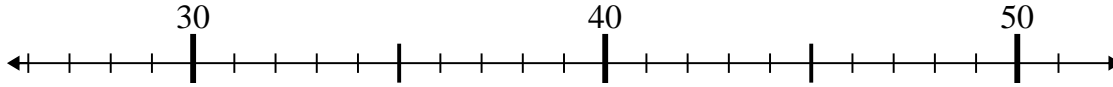
2. _____

3) $46 + 3 =$



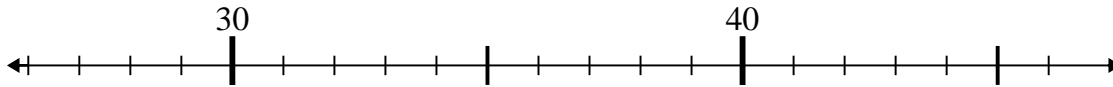
3. _____

4) $31 + 8 =$



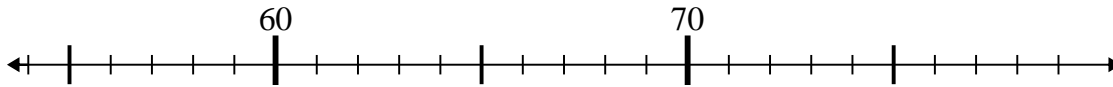
4. _____

5) $36 - 1 =$



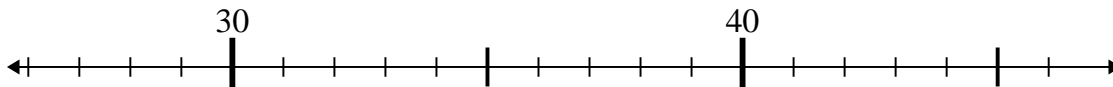
5. _____

6) $70 + 8 =$



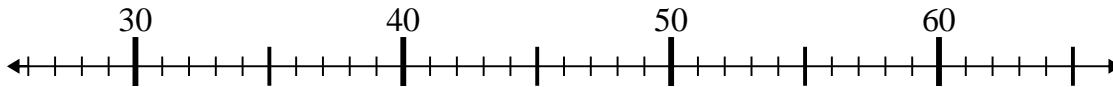
6. _____

7) $46 - 1 =$



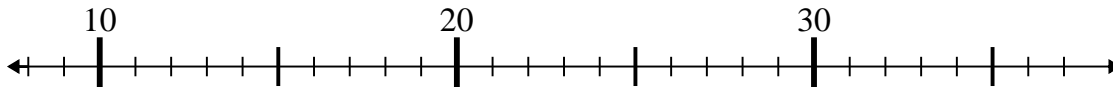
7. _____

8) $27 + 8 =$



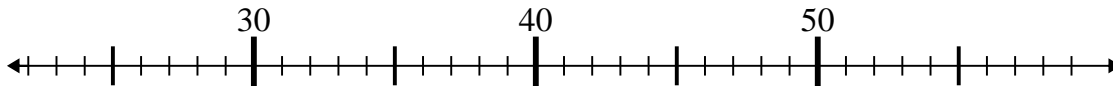
8. _____

9) $18 + 1 =$



9. _____

10) $25 + 3 =$



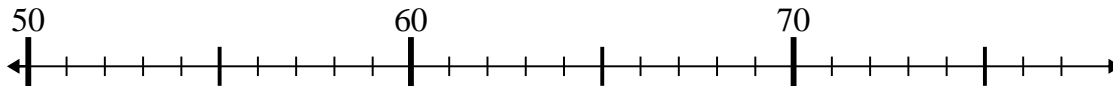
10. _____



Benutze den Zahlenstrahl um jede Aufgabe zu lösen.

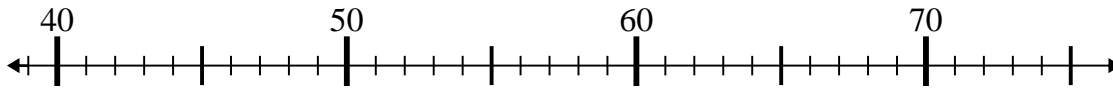
Antworten

1) $70 - 16 =$



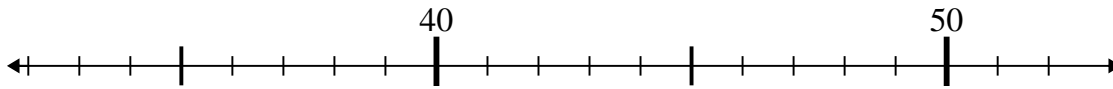
1. 54

2) $39 + 6 =$



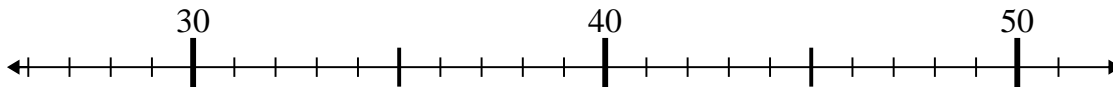
2. 45

3) $46 + 3 =$



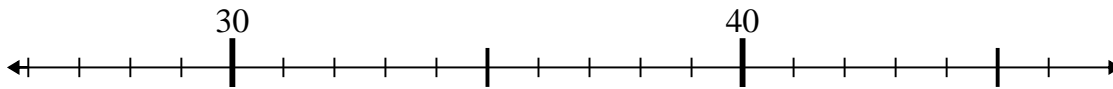
3. 49

4) $31 + 8 =$



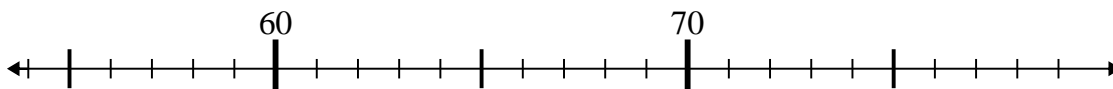
4. 39

5) $36 - 1 =$



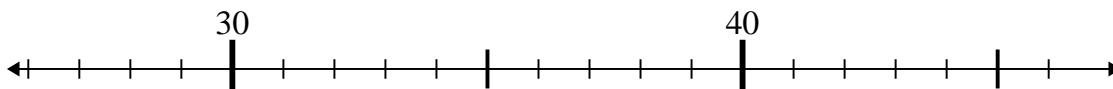
5. 35

6) $70 + 8 =$



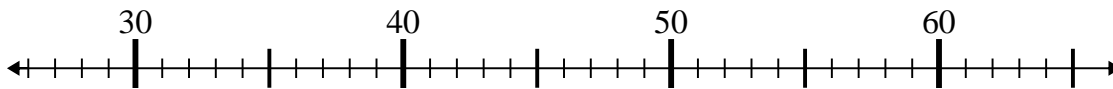
6. 78

7) $46 - 1 =$



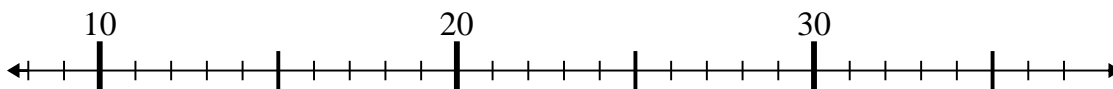
7. 45

8) $27 + 8 =$



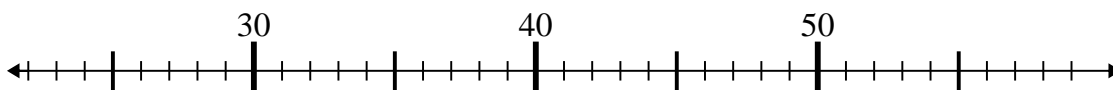
8. 35

9) $18 + 1 =$



9. 19

10) $25 + 3 =$



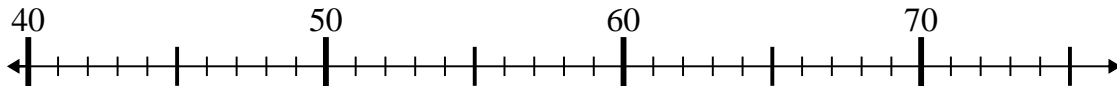
10. 28



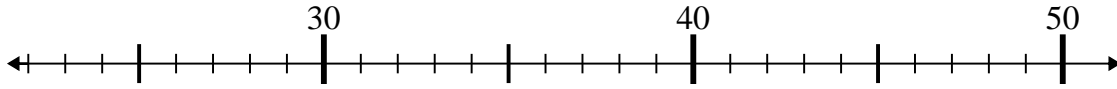
Benutze den Zahlenstrahl um jede Aufgabe zu lösen.

Antworten

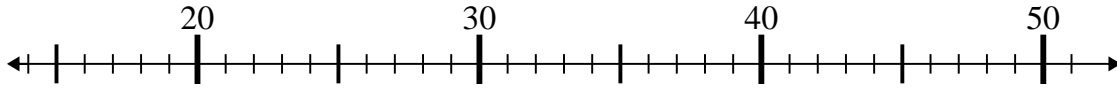
1) $46 - 5 =$



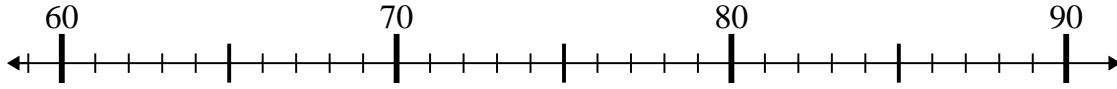
2) $22 + 19 =$



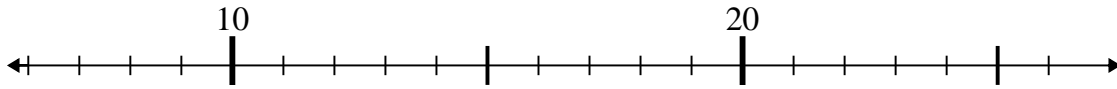
3) $21 + 25 =$



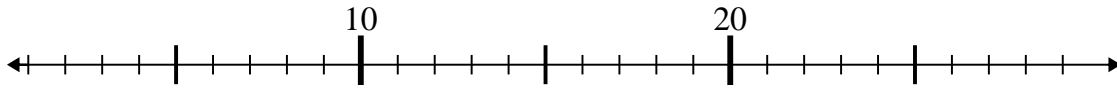
4) $73 + 15 =$



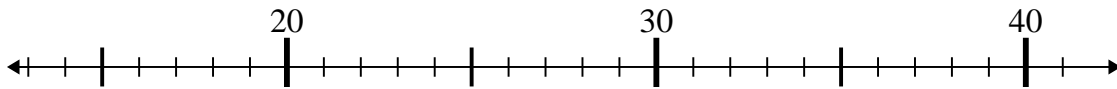
5) $11 + 2 =$



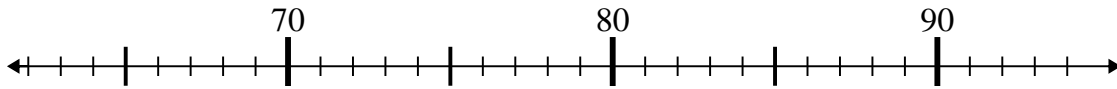
6) $5 + 1 =$



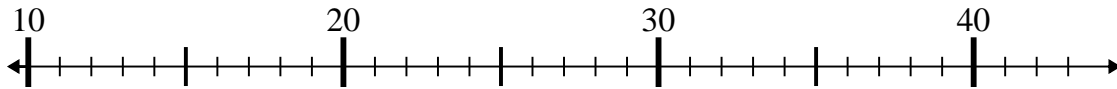
7) $23 + 4 =$



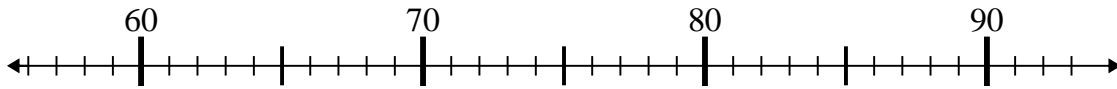
8) $82 - 14 =$



9) $22 - 10 =$



10) $65 + 1 =$



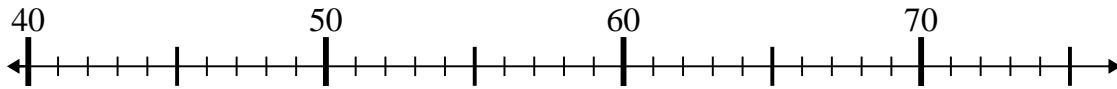
- 1. _____
- 2. _____
- 3. _____
- 4. _____
- 5. _____
- 6. _____
- 7. _____
- 8. _____
- 9. _____
- 10. _____



Benutze den Zahlenstrahl um jede Aufgabe zu lösen.

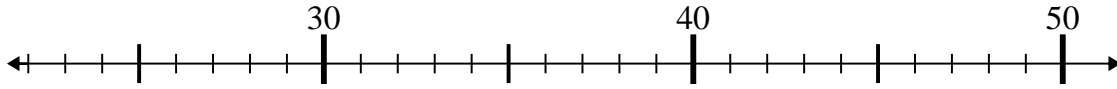
Antworten

1) $46 - 5 =$



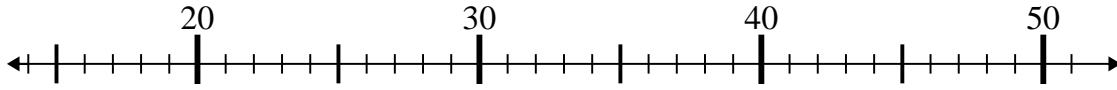
1. 41

2) $22 + 19 =$



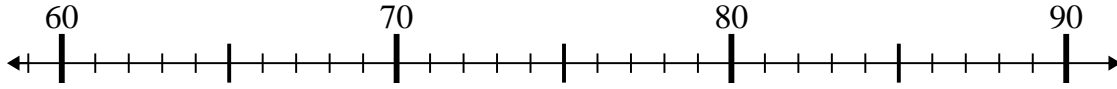
2. 41

3) $21 + 25 =$



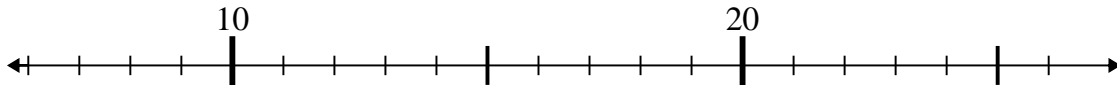
3. 46

4) $73 + 15 =$



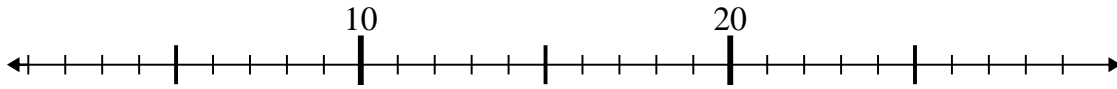
4. 88

5) $11 + 2 =$



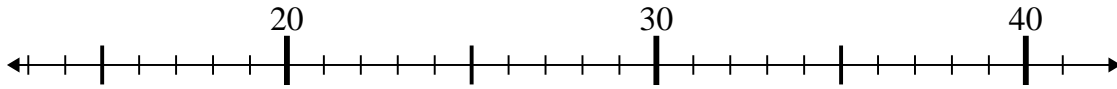
5. 13

6) $5 + 1 =$



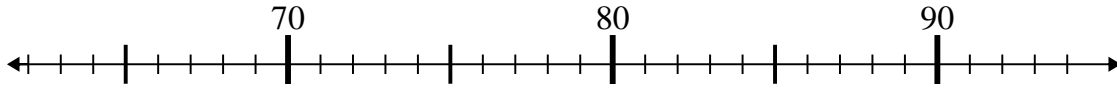
6. 6

7) $23 + 4 =$



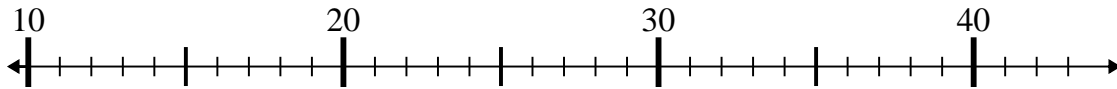
7. 27

8) $82 - 14 =$



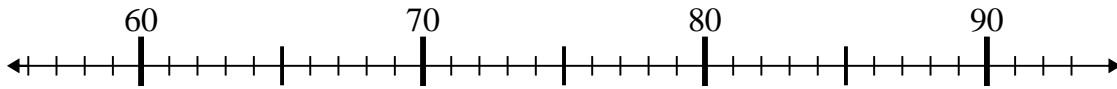
8. 68

9) $22 - 10 =$



9. 12

10) $65 + 1 =$



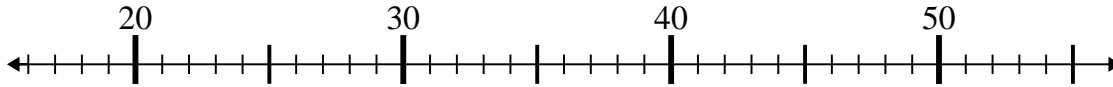
10. 66



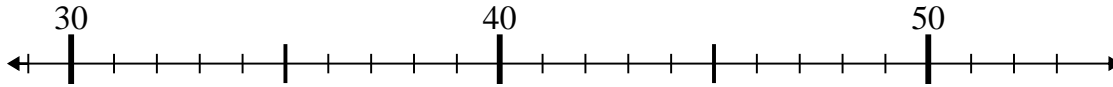
Benutze den Zahlenstrahl um jede Aufgabe zu lösen.

Antworten

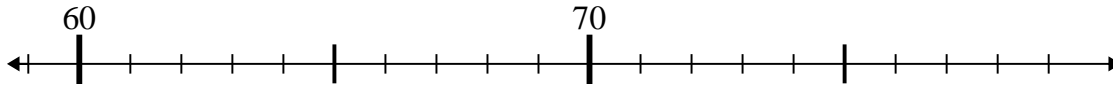
1) $26 - 4 =$



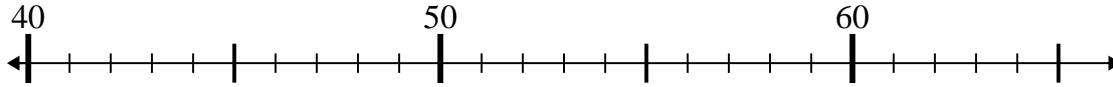
2) $45 - 2 =$



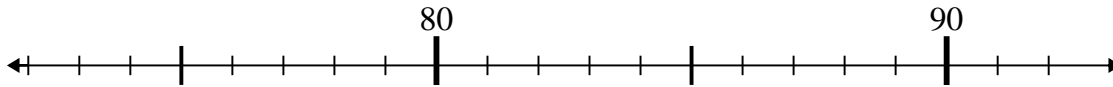
3) $62 + 14 =$



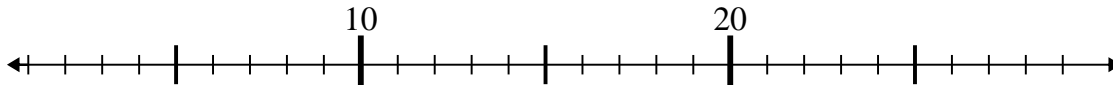
4) $51 - 7 =$



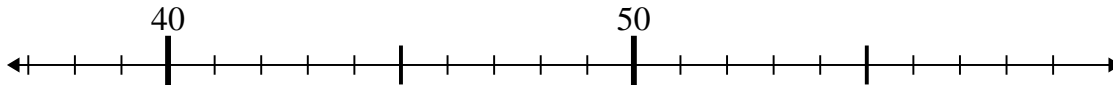
5) $76 + 1 =$



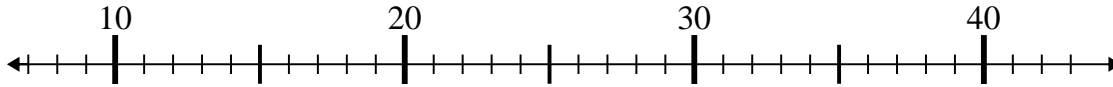
6) $27 - 21 =$



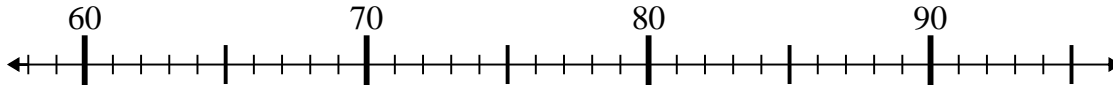
7) $55 - 15 =$



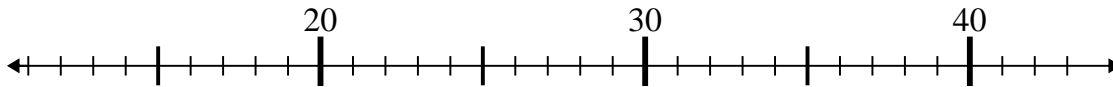
8) $31 - 17 =$



9) $66 + 9 =$



10) $27 + 15 =$



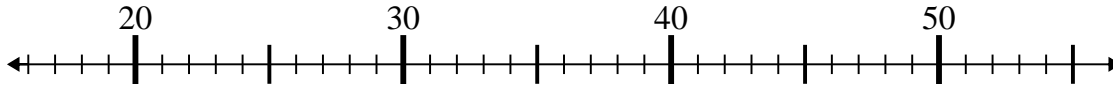
1. _____
2. _____
3. _____
4. _____
5. _____
6. _____
7. _____
8. _____
9. _____
10. _____



Benutze den Zahlenstrahl um jede Aufgabe zu lösen.

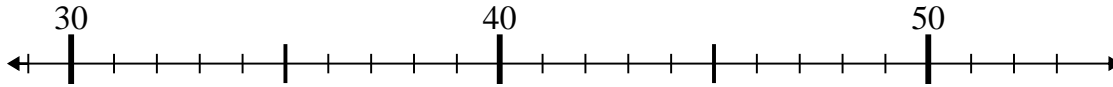
Antworten

1) $26 - 4 =$



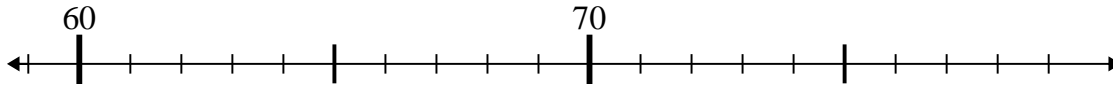
1. 22

2) $45 - 2 =$



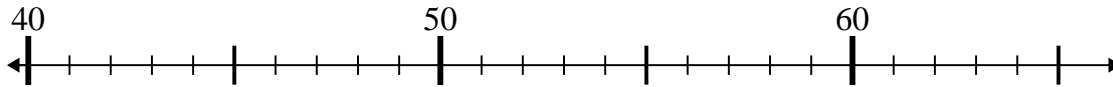
2. 43

3) $62 + 14 =$



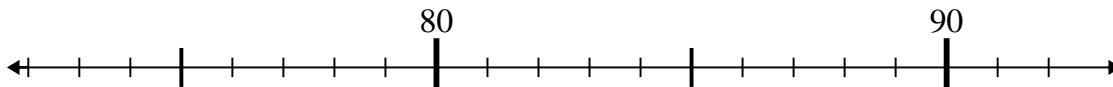
3. 76

4) $51 - 7 =$



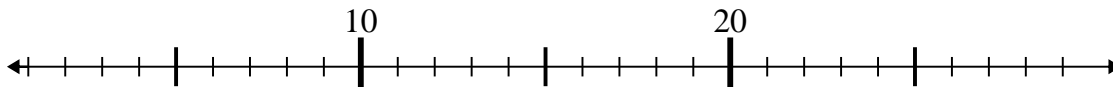
4. 44

5) $76 + 1 =$



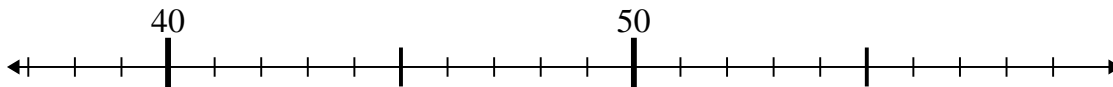
5. 77

6) $27 - 21 =$



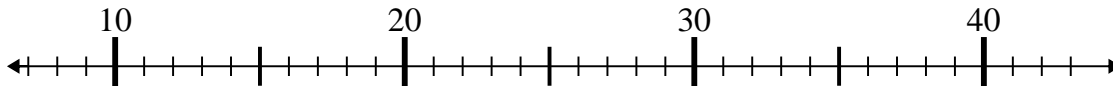
6. 6

7) $55 - 15 =$



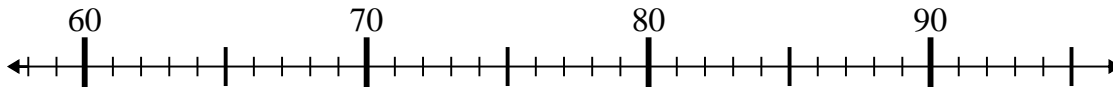
7. 40

8) $31 - 17 =$



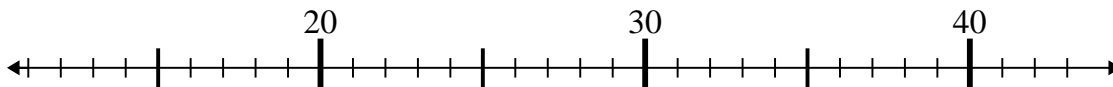
8. 14

9) $66 + 9 =$



9. 75

10) $27 + 15 =$



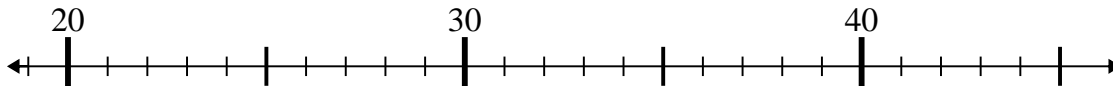
10. 42



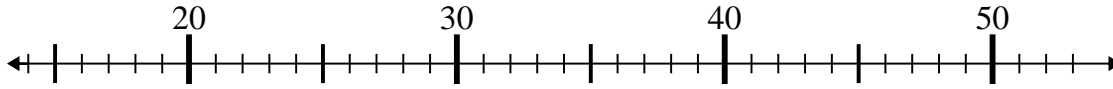
Benutze den Zahlenstrahl um jede Aufgabe zu lösen.

Antworten

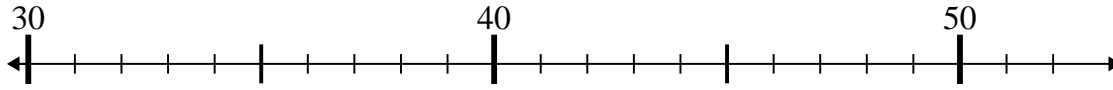
1) $29 + 7 =$



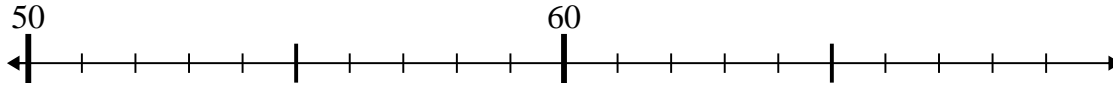
2) $36 - 6 =$



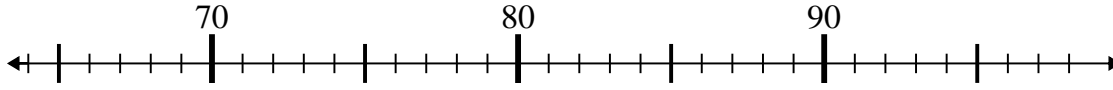
3) $50 - 1 =$



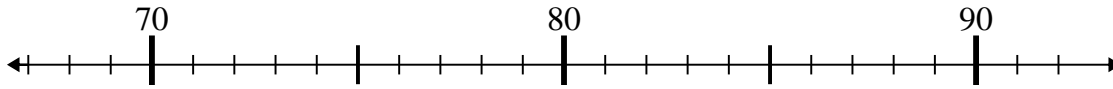
4) $68 - 6 =$



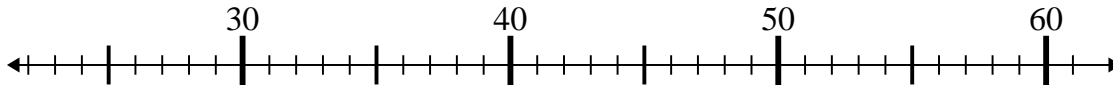
5) $71 + 11 =$



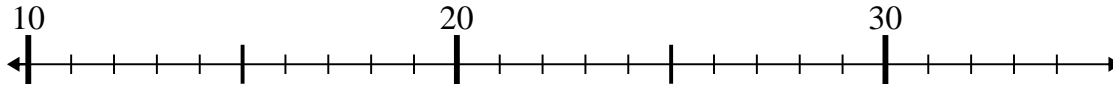
6) $68 + 4 =$



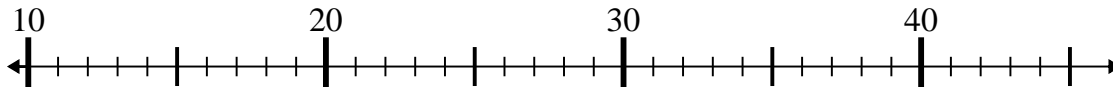
7) $35 - 9 =$



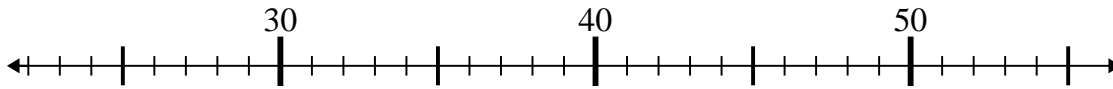
8) $34 + 0 =$



9) $42 - 21 =$



10) $45 - 3 =$



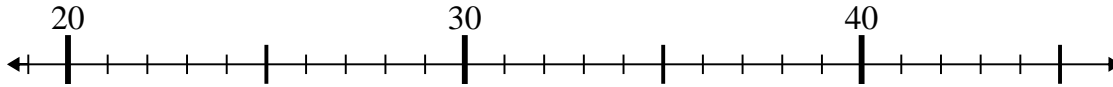
1. _____
2. _____
3. _____
4. _____
5. _____
6. _____
7. _____
8. _____
9. _____
10. _____



Benutze den Zahlenstrahl um jede Aufgabe zu lösen.

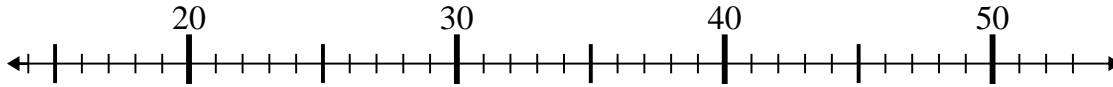
Antworten

1) $29 + 7 =$



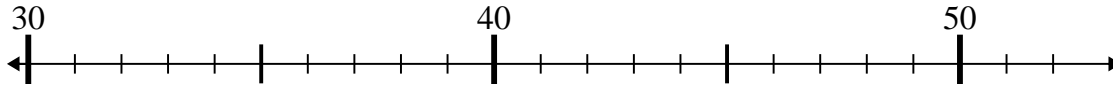
1. 36

2) $36 - 6 =$



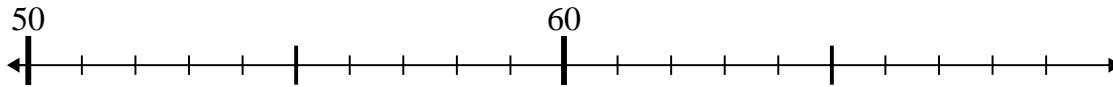
2. 30

3) $50 - 1 =$



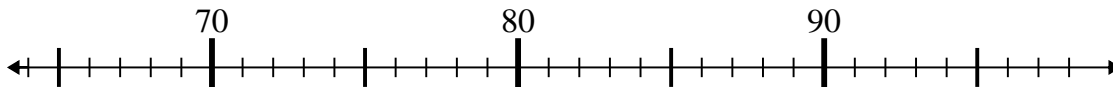
3. 49

4) $68 - 6 =$



4. 62

5) $71 + 11 =$



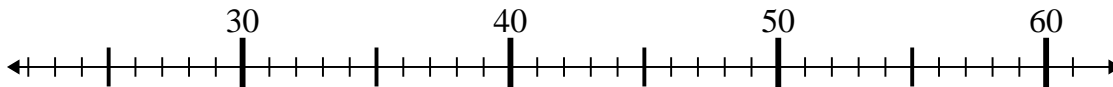
5. 82

6) $68 + 4 =$



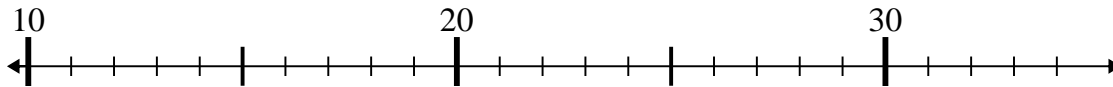
6. 72

7) $35 - 9 =$



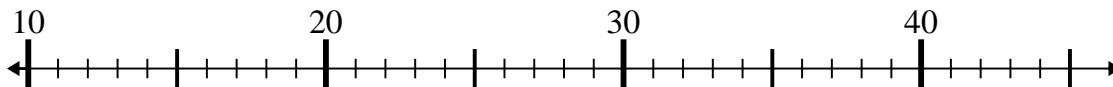
7. 26

8) $34 + 0 =$



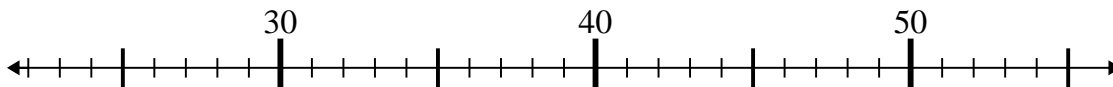
8. 34

9) $42 - 21 =$



9. 21

10) $45 - 3 =$



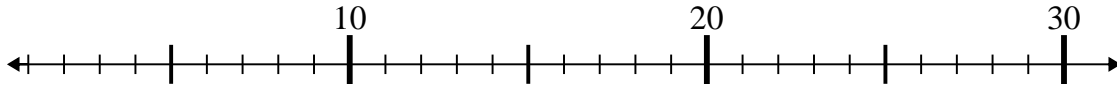
10. 42



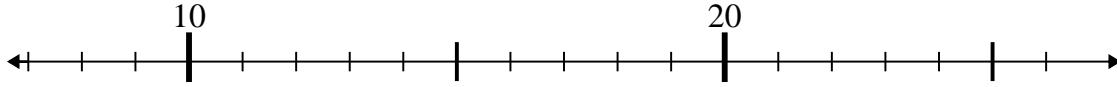
Benutze den Zahlenstrahl um jede Aufgabe zu lösen.

Antworten

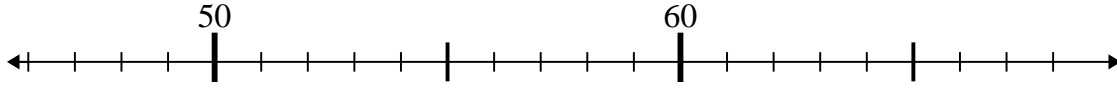
1) $3 + 17 =$



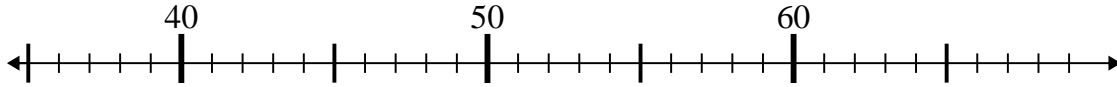
2) $14 + 9 =$



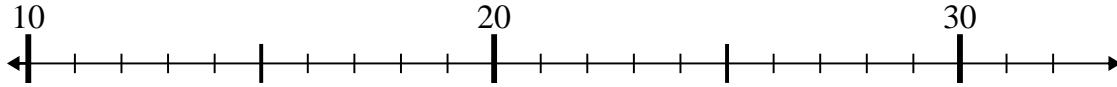
3) $59 - 8 =$



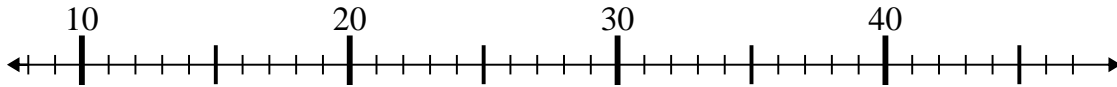
4) $43 - 5 =$



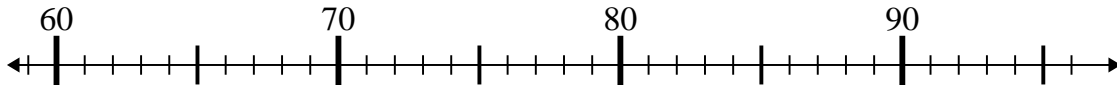
5) $26 - 14 =$



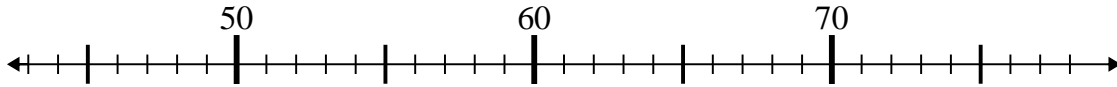
6) $15 + 23 =$



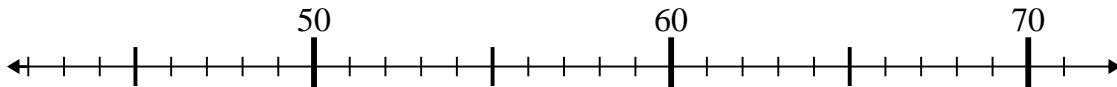
7) $91 + 2 =$



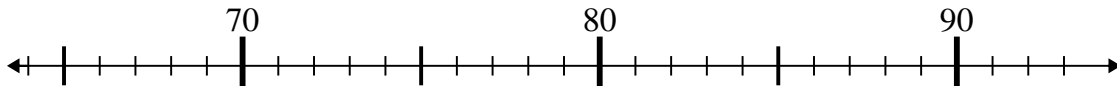
8) $47 + 1 =$



9) $71 - 8 =$



10) $72 + 16 =$



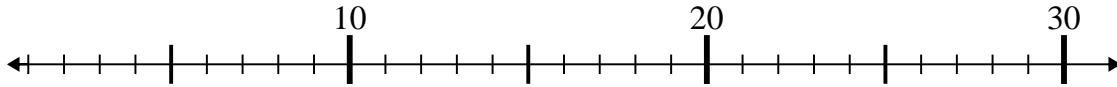
1. _____
2. _____
3. _____
4. _____
5. _____
6. _____
7. _____
8. _____
9. _____
10. _____



Benutze den Zahlenstrahl um jede Aufgabe zu lösen.

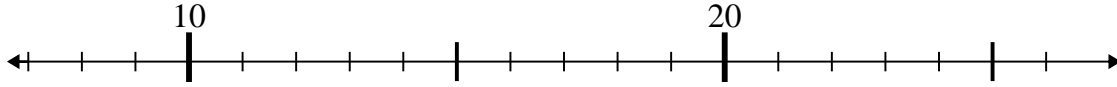
Antworten

1) $3 + 17 =$



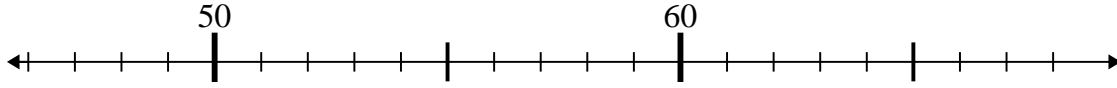
1. 20

2) $14 + 9 =$



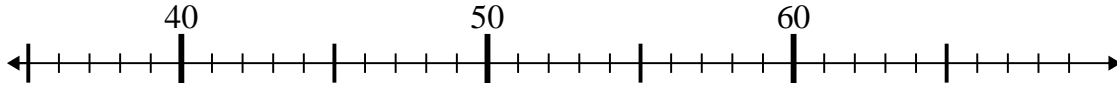
2. 23

3) $59 - 8 =$



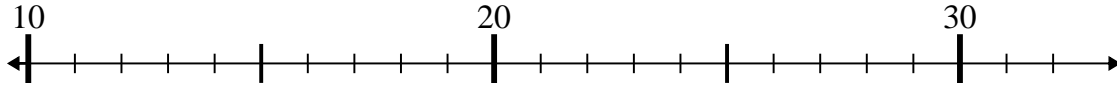
3. 51

4) $43 - 5 =$



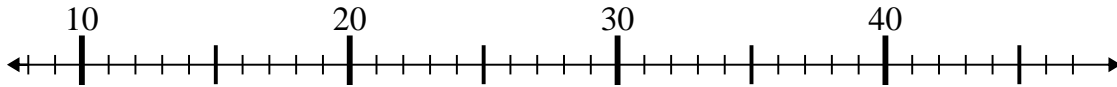
4. 38

5) $26 - 14 =$



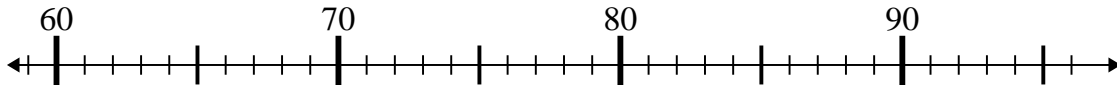
5. 12

6) $15 + 23 =$



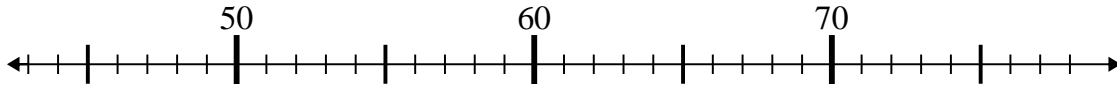
6. 38

7) $91 + 2 =$



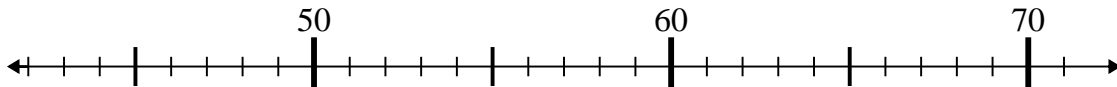
7. 93

8) $47 + 1 =$



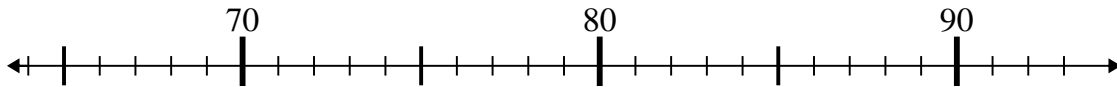
8. 48

9) $71 - 8 =$



9. 63

10) $72 + 16 =$



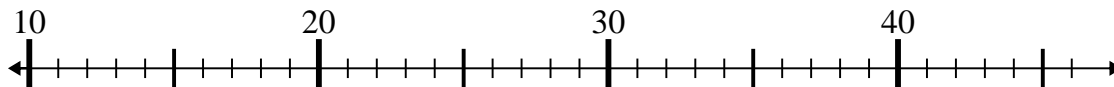
10. 88



Benutze den Zahlenstrahl um jede Aufgabe zu lösen.

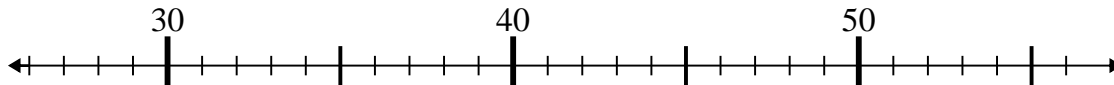
Antworten

1) $24 - 11 =$



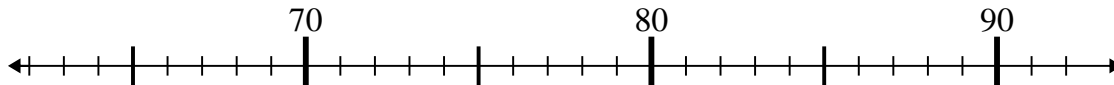
1. _____

2) $29 + 6 =$



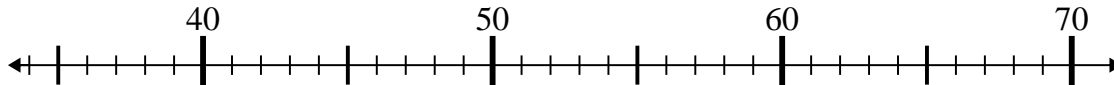
2. _____

3) $72 + 7 =$



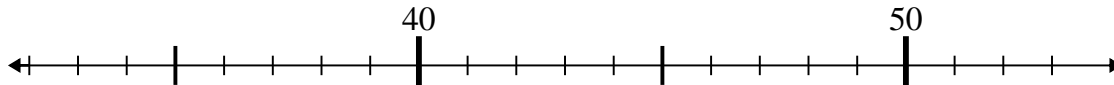
3. _____

4) $41 + 16 =$



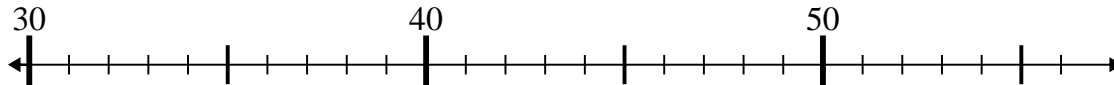
4. _____

5) $51 - 3 =$



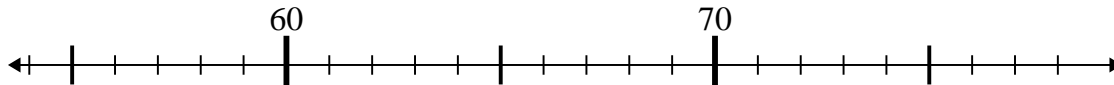
5. _____

6) $35 - 0 =$



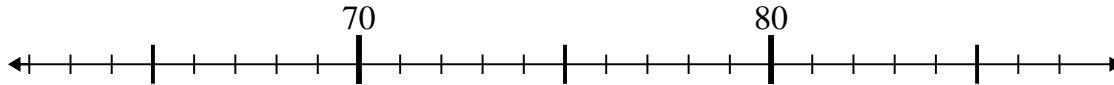
6. _____

7) $65 + 10 =$



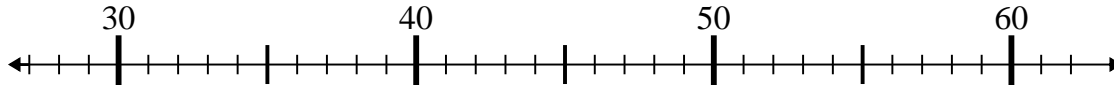
7. _____

8) $65 + 14 =$



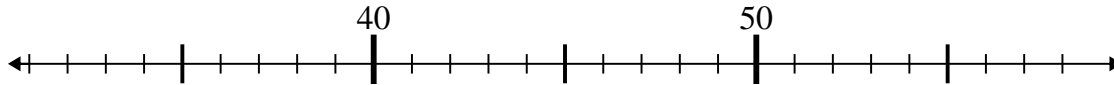
8. _____

9) $57 - 16 =$



9. _____

10) $58 - 19 =$



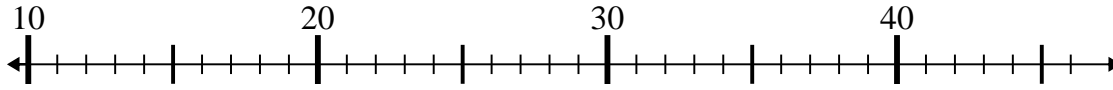
10. _____



Benutze den Zahlenstrahl um jede Aufgabe zu lösen.

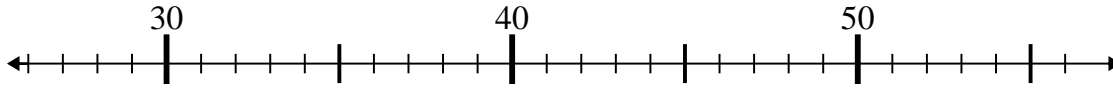
Antworten

1) $24 - 11 =$



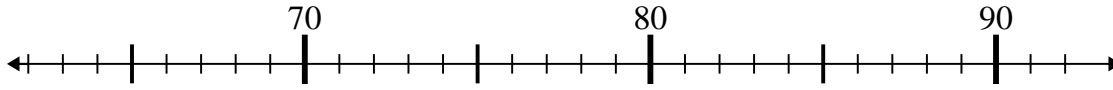
1. **13**

2) $29 + 6 =$



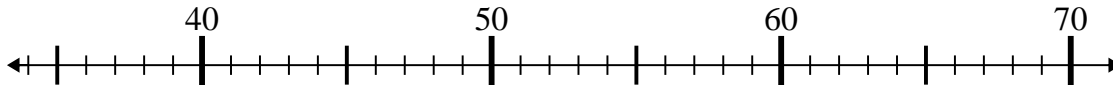
2. **35**

3) $72 + 7 =$



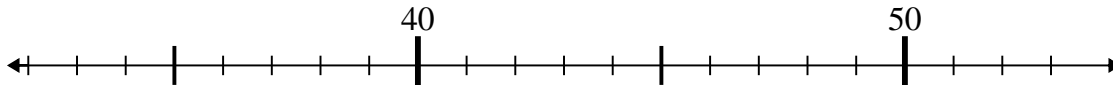
3. **79**

4) $41 + 16 =$



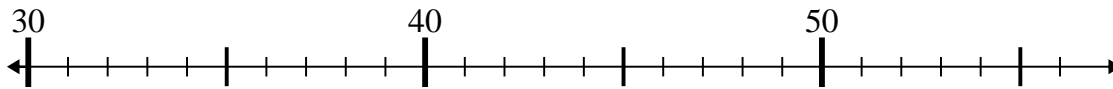
4. **57**

5) $51 - 3 =$



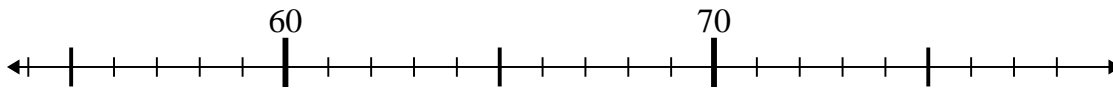
5. **48**

6) $35 - 0 =$



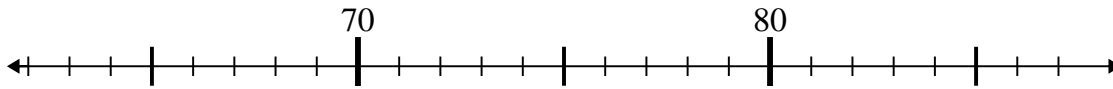
6. **35**

7) $65 + 10 =$



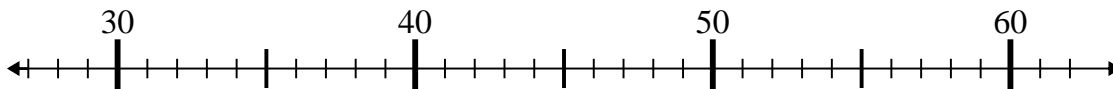
7. **75**

8) $65 + 14 =$



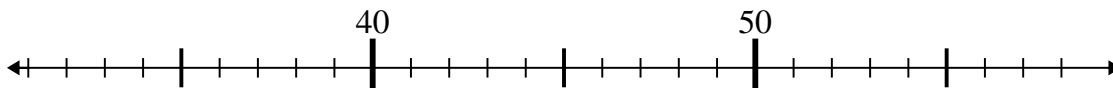
8. **79**

9) $57 - 16 =$



9. **41**

10) $58 - 19 =$



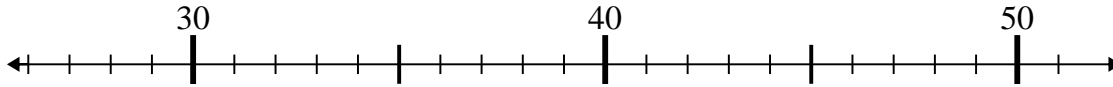
10. **39**



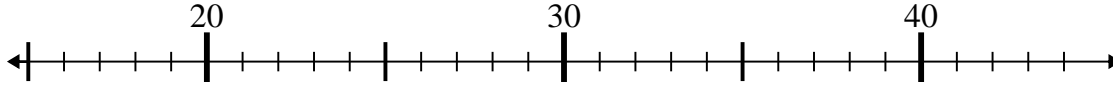
Benutze den Zahlenstrahl um jede Aufgabe zu lösen.

Antworten

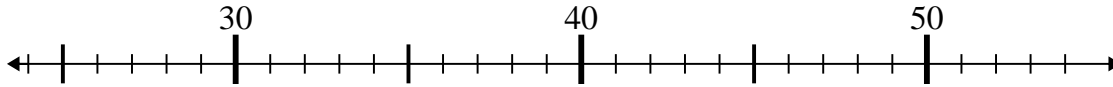
1) $32 - 5 =$



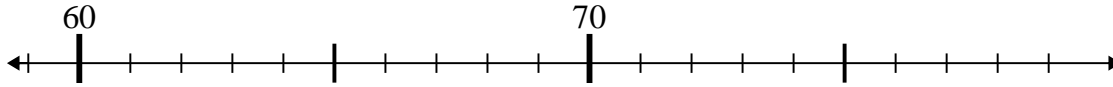
2) $16 + 7 =$



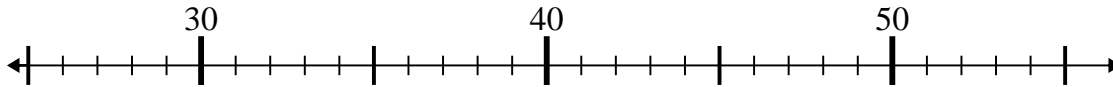
3) $25 + 12 =$



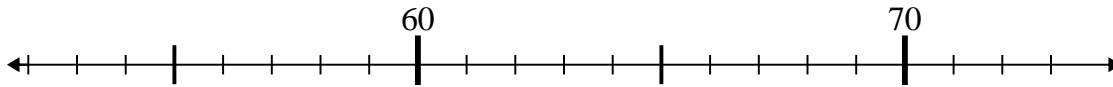
4) $75 - 14 =$



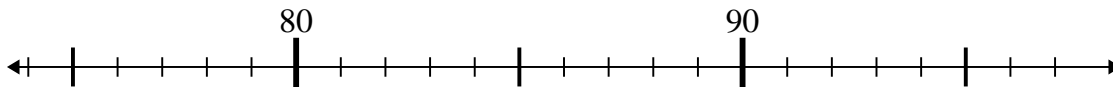
5) $28 + 26 =$



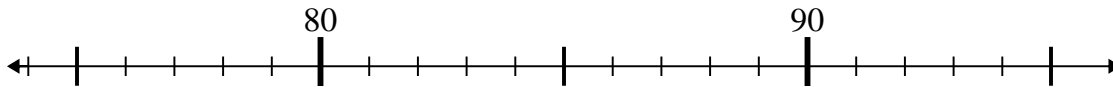
6) $65 - 10 =$



7) $81 - 2 =$



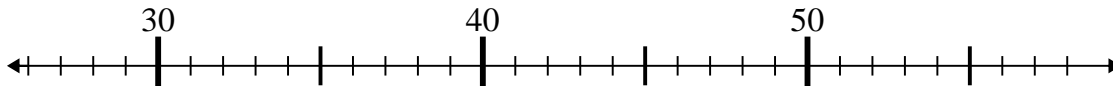
8) $95 - 8 =$



9) $48 - 11 =$



10) $32 + 18 =$



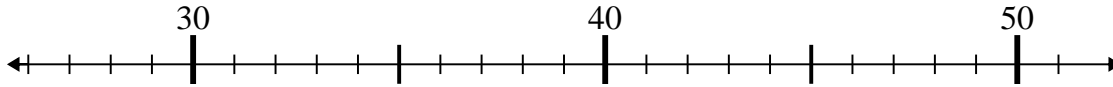
1. _____
2. _____
3. _____
4. _____
5. _____
6. _____
7. _____
8. _____
9. _____
10. _____



Benutze den Zahlenstrahl um jede Aufgabe zu lösen.

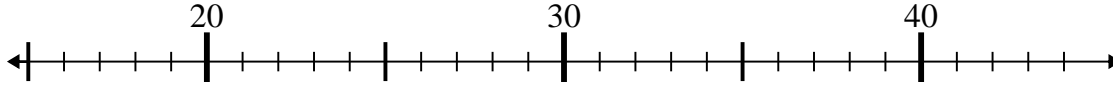
Antworten

1) $32 - 5 =$



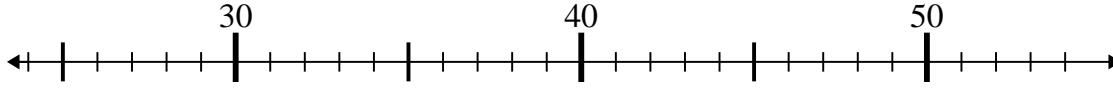
1. 27

2) $16 + 7 =$



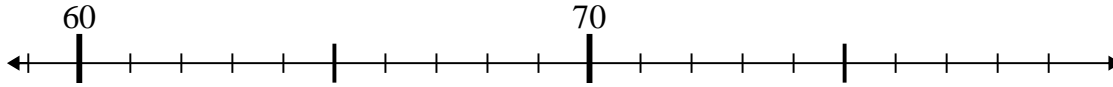
2. 23

3) $25 + 12 =$



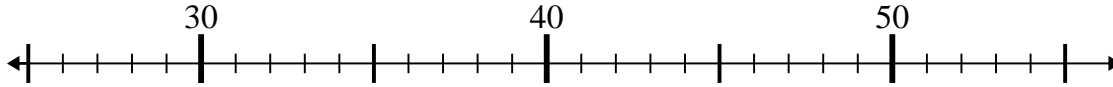
3. 37

4) $75 - 14 =$



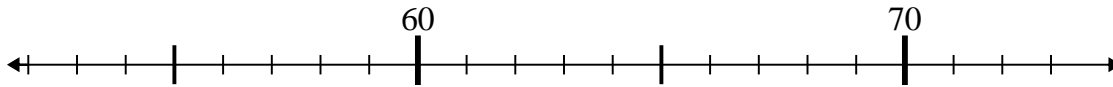
4. 61

5) $28 + 26 =$



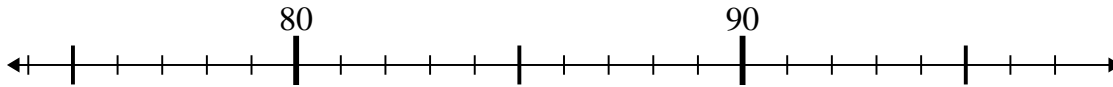
5. 54

6) $65 - 10 =$



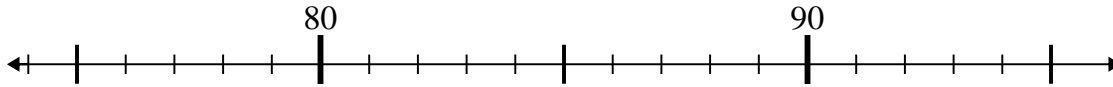
6. 55

7) $81 - 2 =$



7. 79

8) $95 - 8 =$



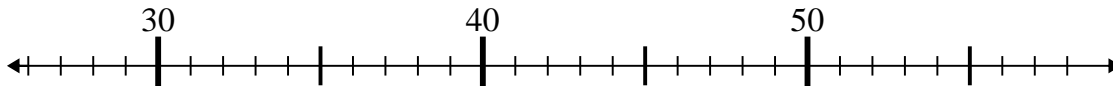
8. 87

9) $48 - 11 =$



9. 37

10) $32 + 18 =$



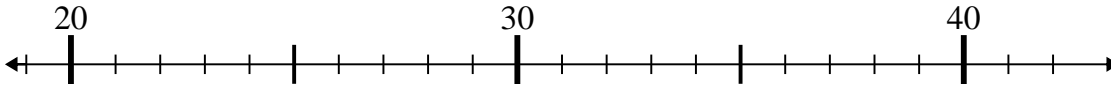
10. 50



Benutze den Zahlenstrahl um jede Aufgabe zu lösen.

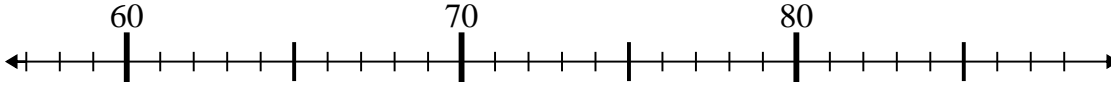
Antworten

1) $31 + 4 =$



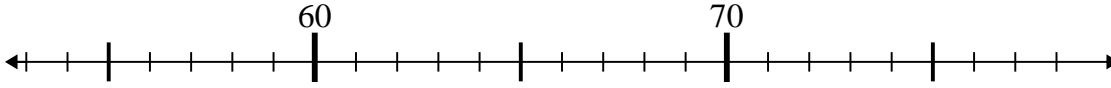
1. _____

2) $76 - 18 =$



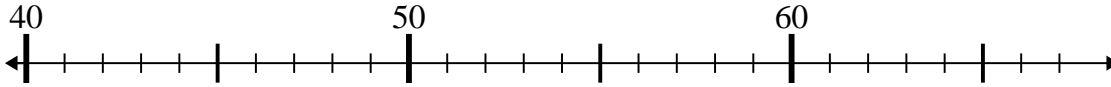
2. _____

3) $57 + 5 =$



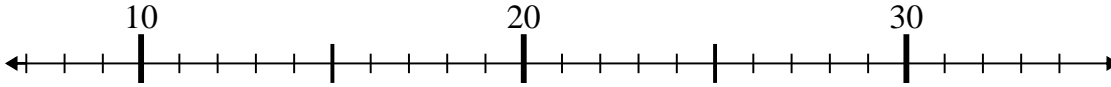
3. _____

4) $40 + 8 =$



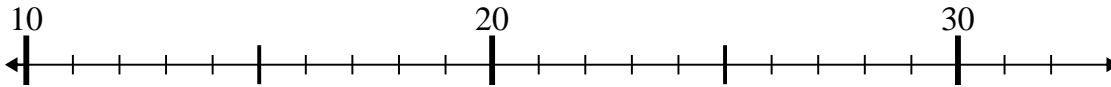
4. _____

5) $8 + 20 =$



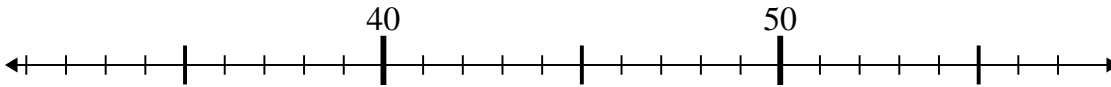
5. _____

6) $13 + 4 =$



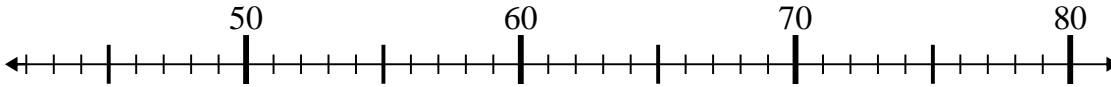
6. _____

7) $56 - 18 =$



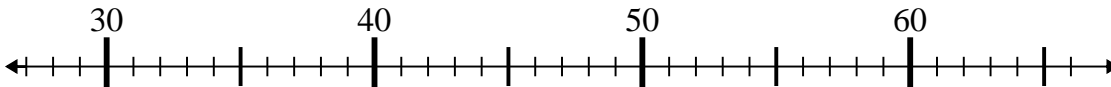
7. _____

8) $61 - 13 =$



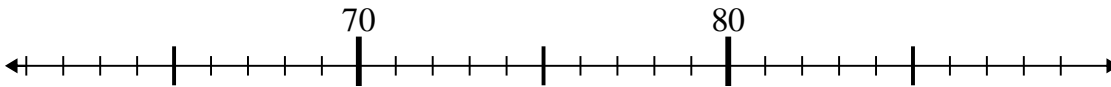
8. _____

9) $40 + 16 =$



9. _____

10) $78 + 3 =$



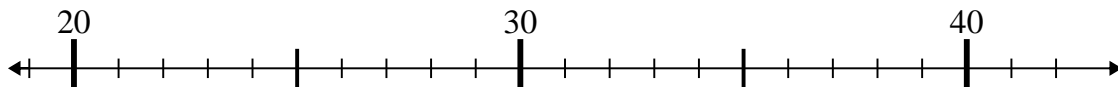
10. _____



Benutze den Zahlenstrahl um jede Aufgabe zu lösen.

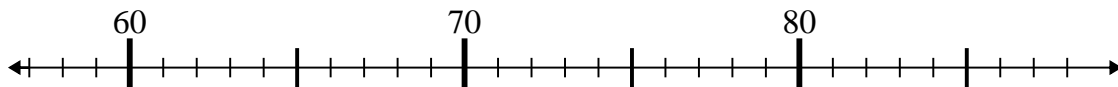
Antworten

1) $31 + 4 =$



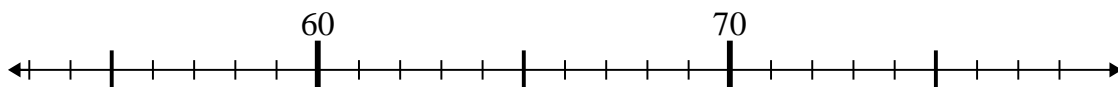
1. 35

2) $76 - 18 =$



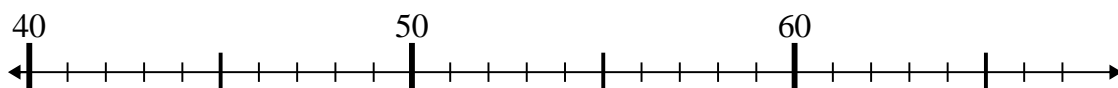
2. 58

3) $57 + 5 =$



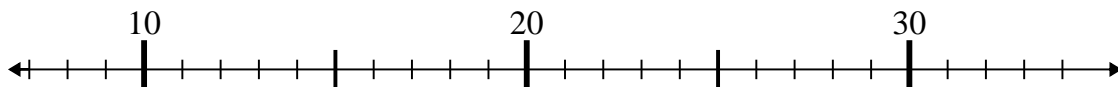
3. 62

4) $40 + 8 =$



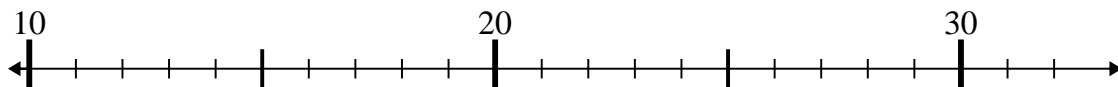
4. 48

5) $8 + 20 =$



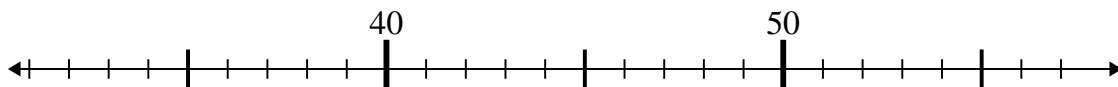
5. 28

6) $13 + 4 =$



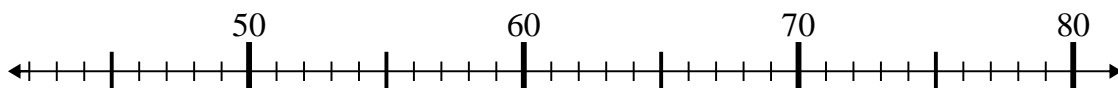
6. 17

7) $56 - 18 =$



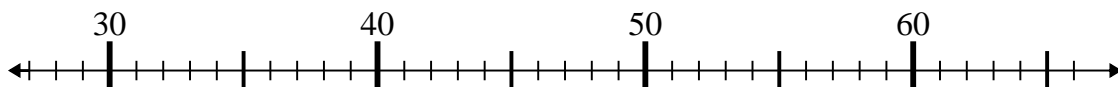
7. 38

8) $61 - 13 =$



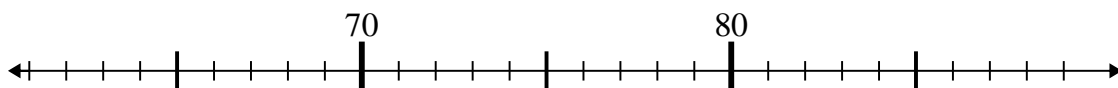
8. 48

9) $40 + 16 =$



9. 56

10) $78 + 3 =$



10. 81