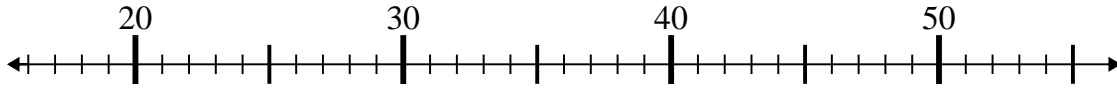




Benutze den Zahlenstrahl um jede Aufgabe zu lösen.

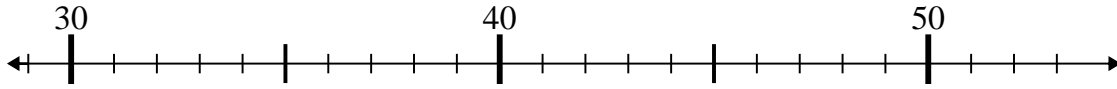
Antworten

1) $26 - 4 =$



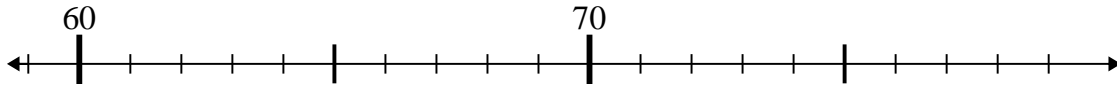
1. _____

2) $45 - 2 =$



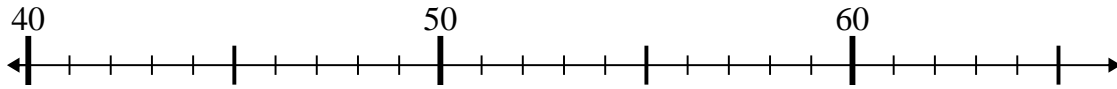
2. _____

3) $62 + 14 =$



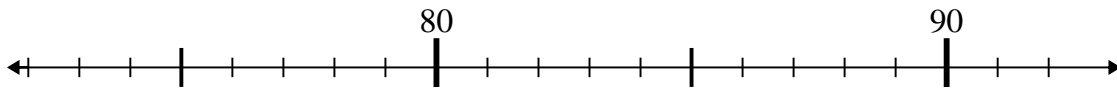
3. _____

4) $51 - 7 =$



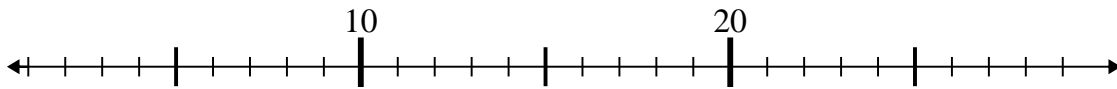
4. _____

5) $76 + 1 =$



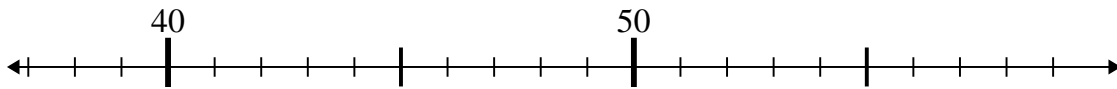
5. _____

6) $27 - 21 =$



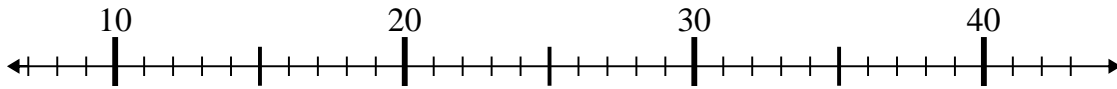
6. _____

7) $55 - 15 =$



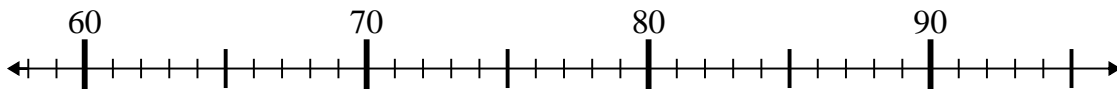
7. _____

8) $31 - 17 =$



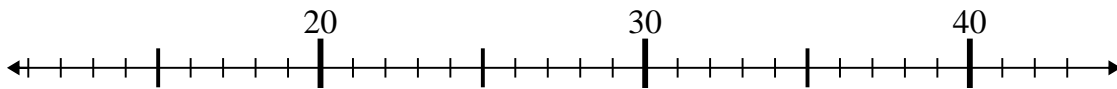
8. _____

9) $66 + 9 =$



9. _____

10) $27 + 15 =$



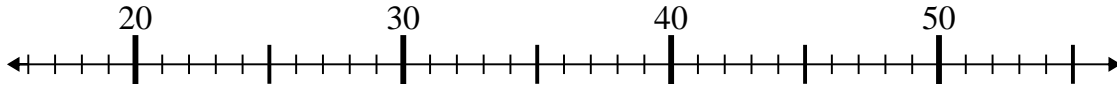
10. _____



Benutze den Zahlenstrahl um jede Aufgabe zu lösen.

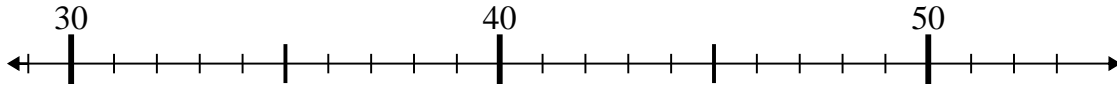
Antworten

1) $26 - 4 =$



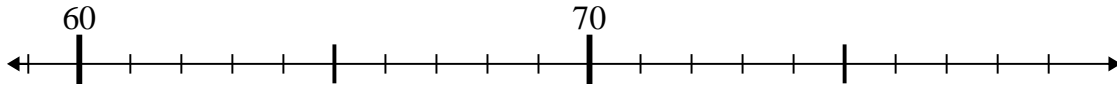
1. 22

2) $45 - 2 =$



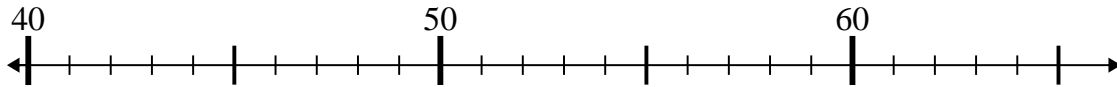
2. 43

3) $62 + 14 =$



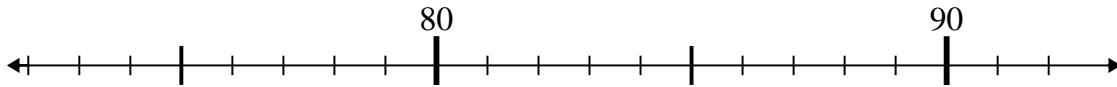
3. 76

4) $51 - 7 =$



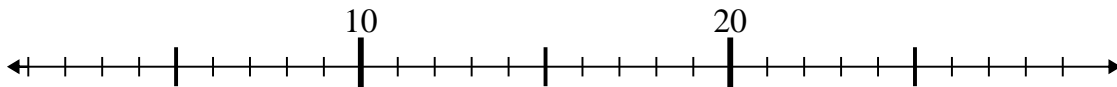
4. 44

5) $76 + 1 =$



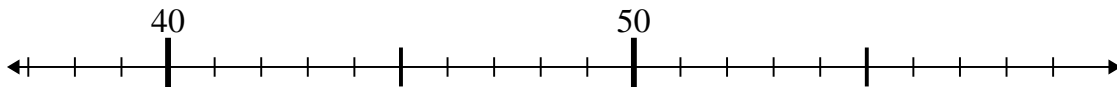
5. 77

6) $27 - 21 =$



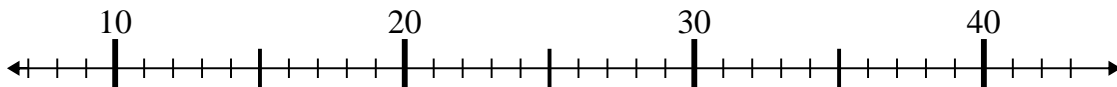
6. 6

7) $55 - 15 =$



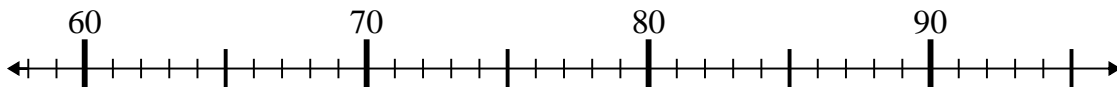
7. 40

8) $31 - 17 =$



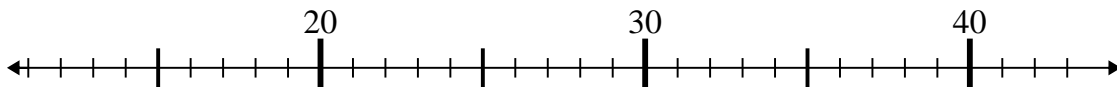
8. 14

9) $66 + 9 =$



9. 75

10) $27 + 15 =$



10. 42