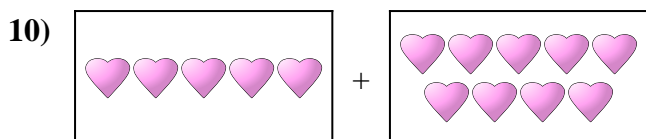
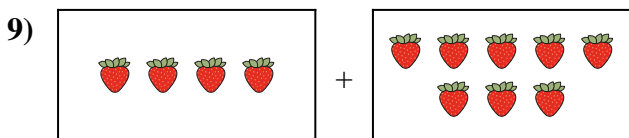
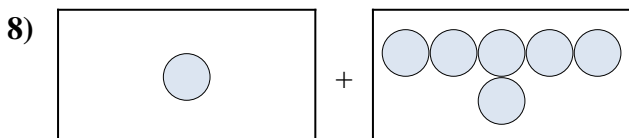
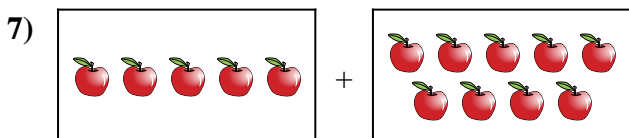

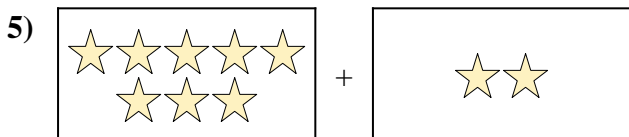
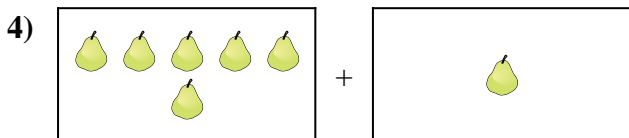
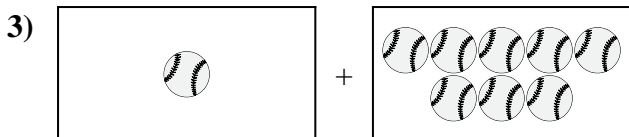
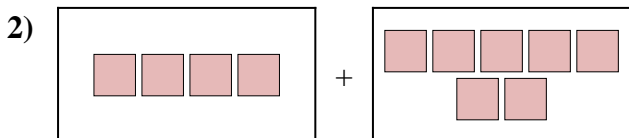
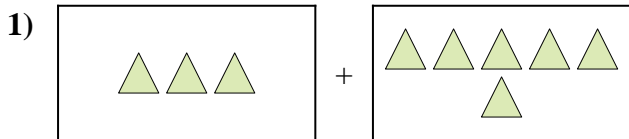




Drücken Sie das visuelle Problem als Gleichung mit Antwort aus.

Antworten



1. _____

2. _____

3. _____

4. _____

5. _____

6. _____

7. _____

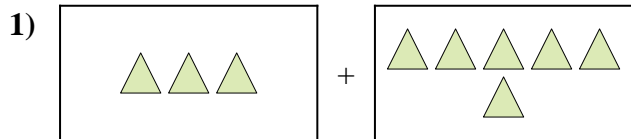
8. _____

9. _____

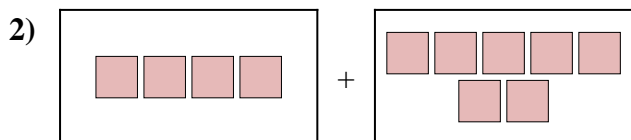
10. _____



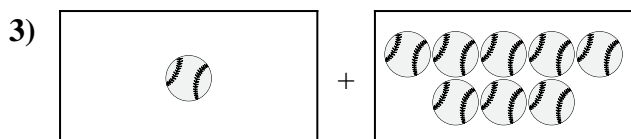
Drücken Sie das visuelle Problem als Gleichung mit Antwort aus.

Antworten

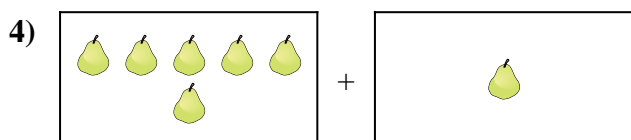
1. $3 + 6 = 9$



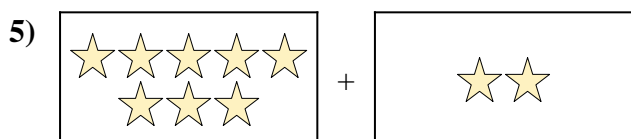
2. $4 + 7 = 11$




3. $1 + 8 = 9$



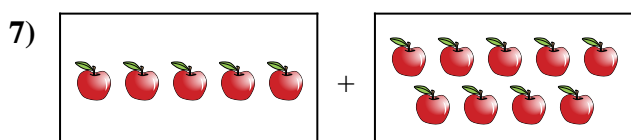
4. $6 + 1 = 7$



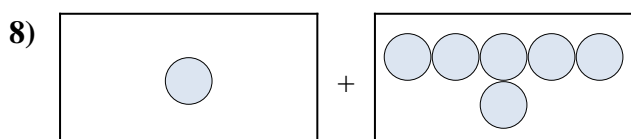
5. $8 + 2 = 10$



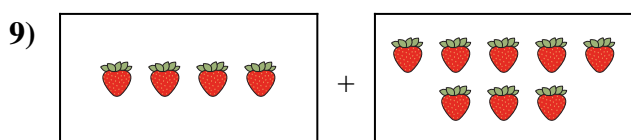
6. $10 + 9 = 19$



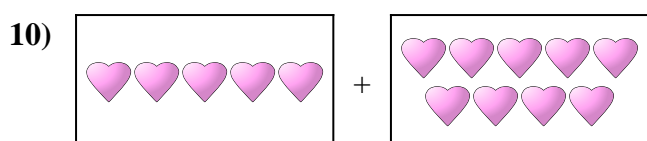
7. $5 + 9 = 14$



8. $1 + 6 = 7$



9. $4 + 8 = 12$

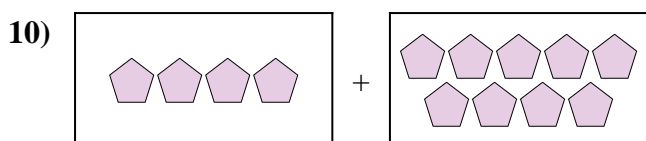
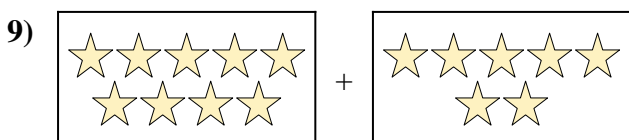
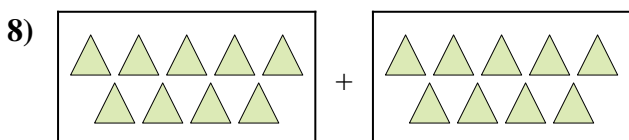

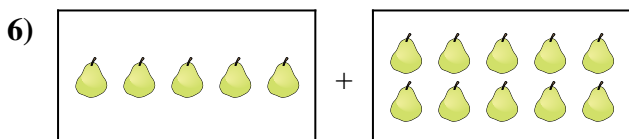
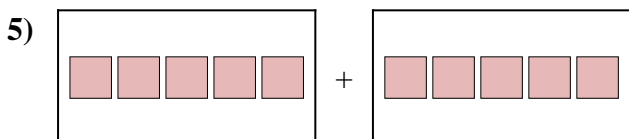
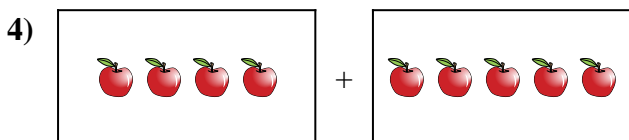

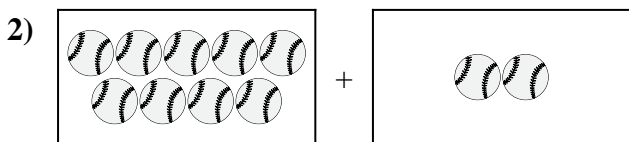
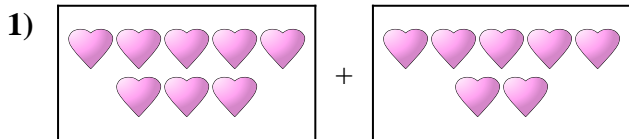


10. $5 + 9 = 14$



Drücken Sie das visuelle Problem als Gleichung mit Antwort aus.

Antworten



1. _____

2. _____

3. _____

4. _____

5. _____

6. _____

7. _____


8. _____

9. _____

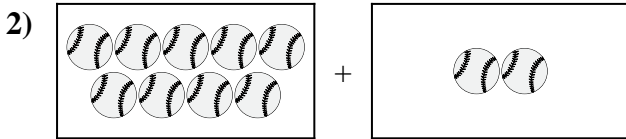
10. _____




Drücken Sie das visuelle Problem als Gleichung mit Antwort aus.

Antworten

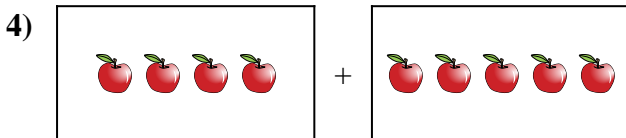
1. $8 + 7 = 15$



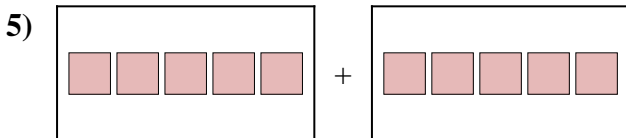
2. $9 + 2 = 11$



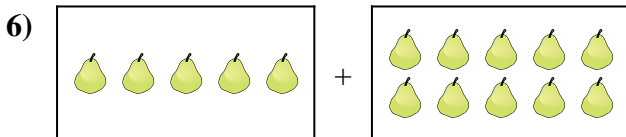
3. $8 + 7 = 15$




4. $4 + 5 = 9$



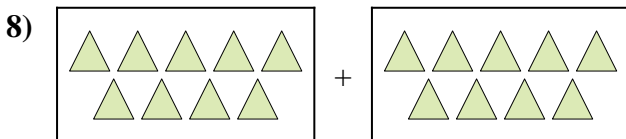
5. $5 + 5 = 10$



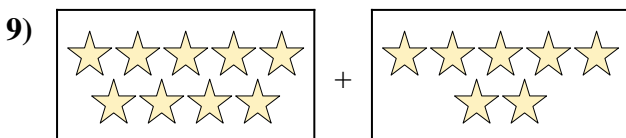
6. $5 + 10 = 15$



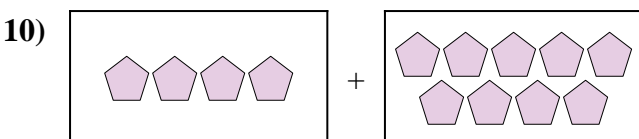
7. $5 + 7 = 12$



8. $9 + 9 = 18$



9. $9 + 7 = 16$

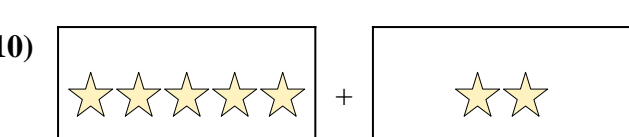
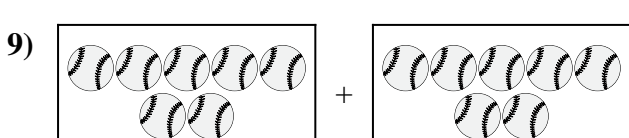
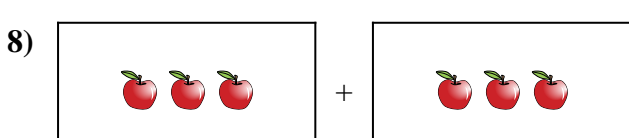
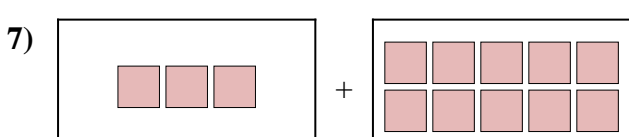
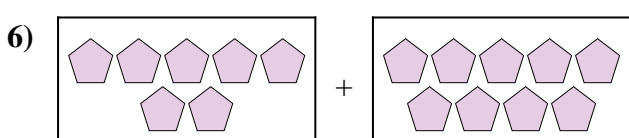
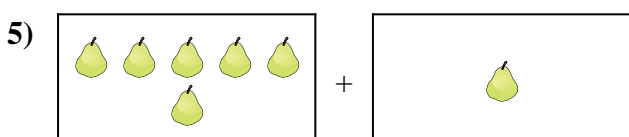
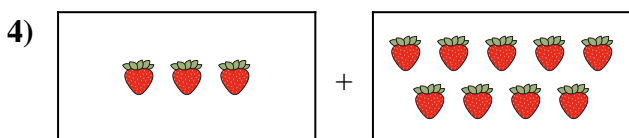
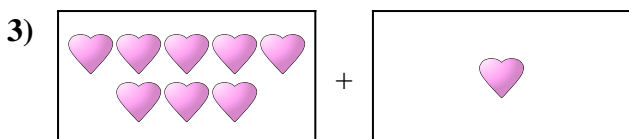
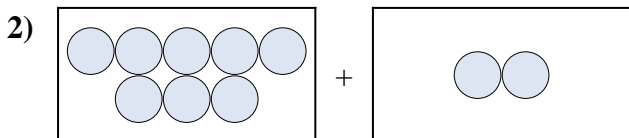



10. $4 + 9 = 13$



Drücken Sie das visuelle Problem als Gleichung mit Antwort aus.

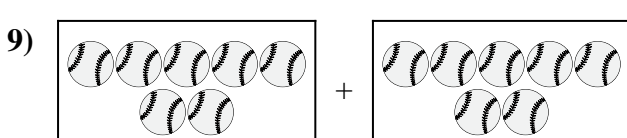
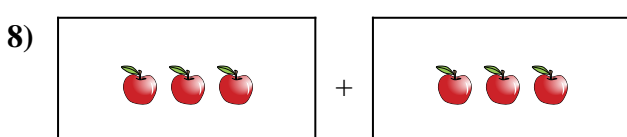
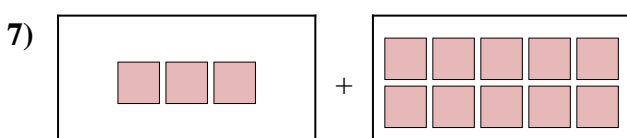
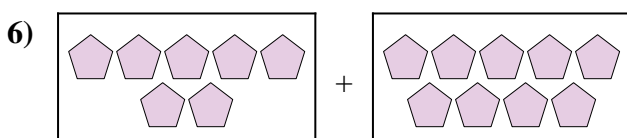
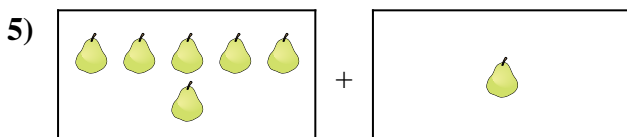
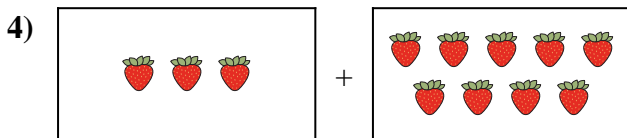
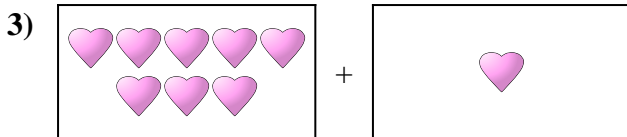
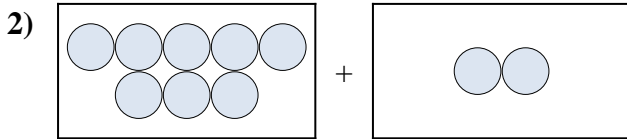

Antworten



1. _____
2. _____
3. _____
4. _____
5. _____
6. _____
7. _____
8. _____
9. _____
10. _____



Drücken Sie das visuelle Problem als Gleichung mit Antwort aus.



Antworten

1. **9 + 1 = 10**

2. **8 + 2 = 10**

3. **8 + 1 = 9**

4. **3 + 9 = 12**

5. **6 + 1 = 7**

6. **7 + 9 = 16**

7. **3 + 10 = 13**

8. **3 + 3 = 6**

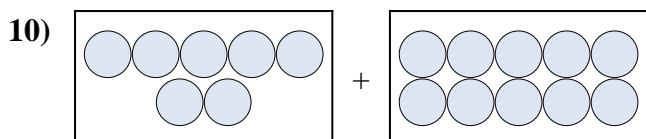

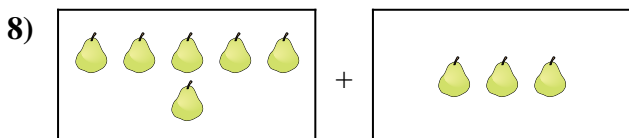

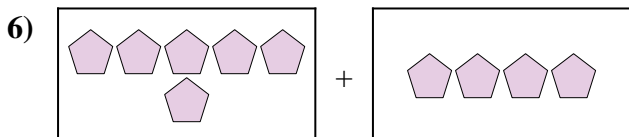
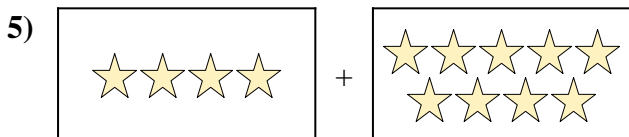
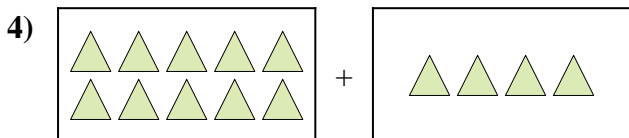
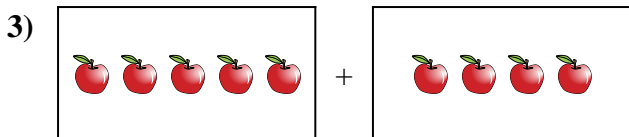
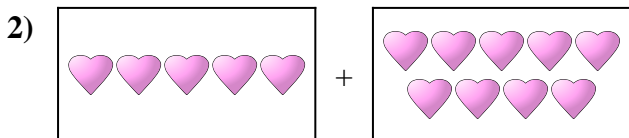
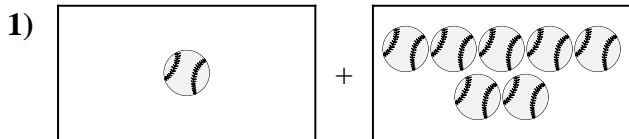
9. **7 + 7 = 14**

10. **5 + 2 = 7**



Drücken Sie das visuelle Problem als Gleichung mit Antwort aus.

Antworten



1. _____

2. _____

3. _____

4. _____

5. _____

6. _____

7. _____

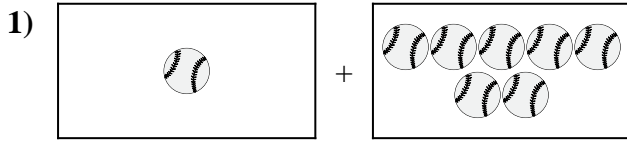
8. _____

9. _____

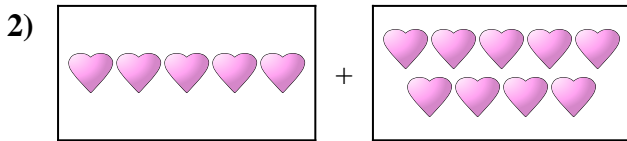
10. _____



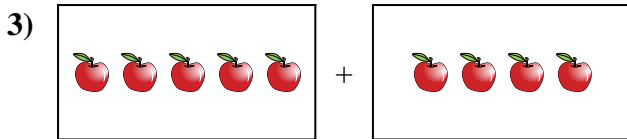
Drücken Sie das visuelle Problem als Gleichung mit Antwort aus.

Antworten

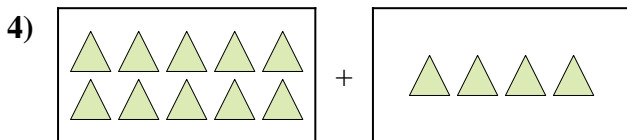
1. $1 + 7 = 8$



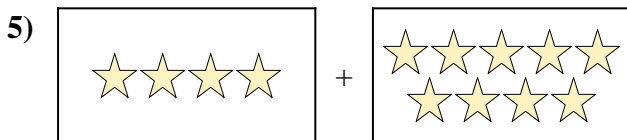
2. $5 + 9 = 14$



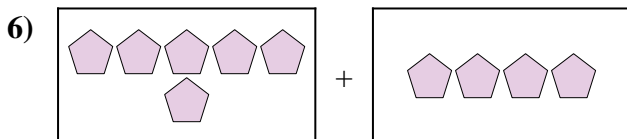
3. $5 + 4 = 9$




4. $10 + 4 = 14$



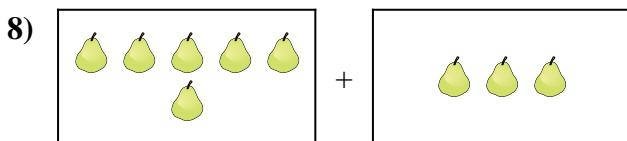
5. $4 + 9 = 13$




6. $6 + 4 = 10$



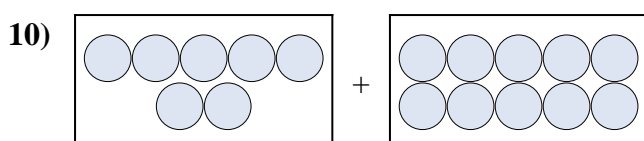
7. $6 + 10 = 16$



8. $6 + 3 = 9$



9. $7 + 4 = 11$

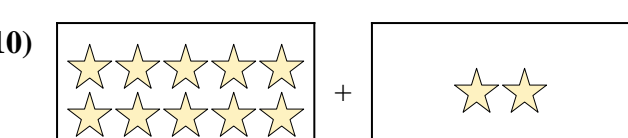
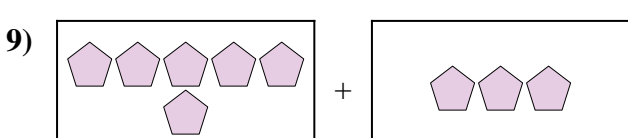
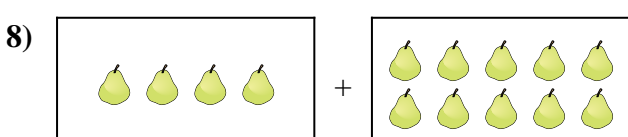
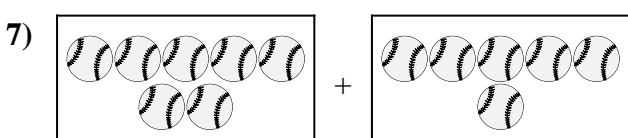

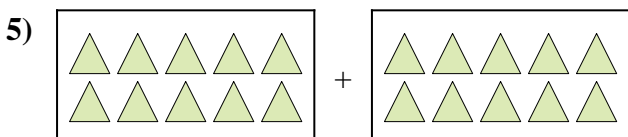
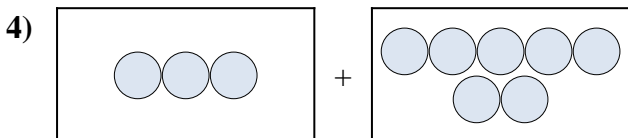
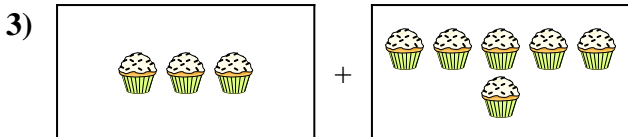
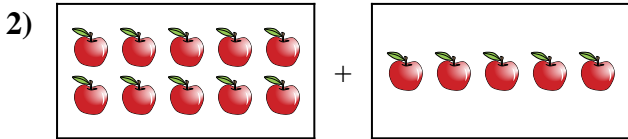
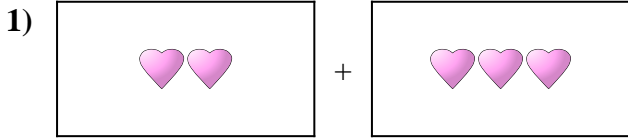


10. $7 + 10 = 17$



Drücken Sie das visuelle Problem als Gleichung mit Antwort aus.

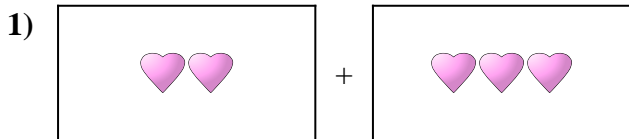
Antworten



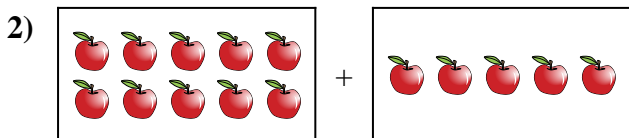
- 1. _____
- 2. _____
- 3. _____
- 4. _____
- 5. _____
- 6. _____
- 7. _____
- 8. _____
- 9. _____
- 10. _____




Drücken Sie das visuelle Problem als Gleichung mit Antwort aus.

Antworten

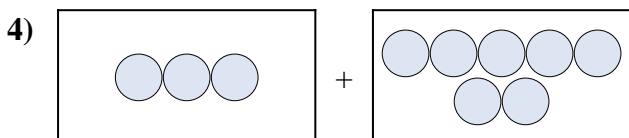
1. $2 + 3 = 5$



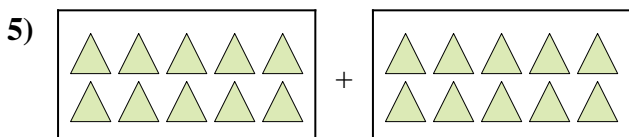
2. $10 + 5 = 15$




3. $3 + 6 = 9$



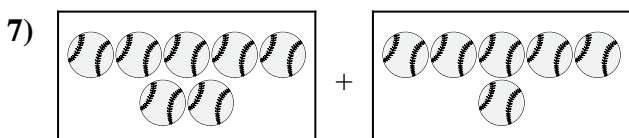
4. $3 + 7 = 10$



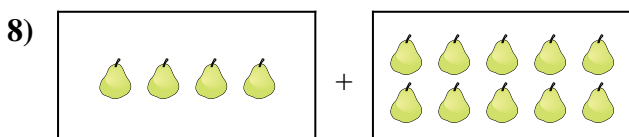
5. $10 + 10 = 20$



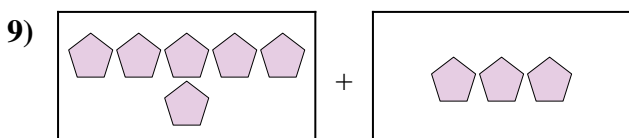
6. $10 + 3 = 13$



7. $7 + 6 = 13$



8. $4 + 10 = 14$



9. $6 + 3 = 9$

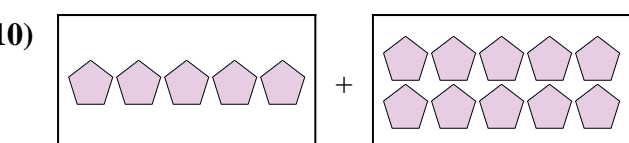
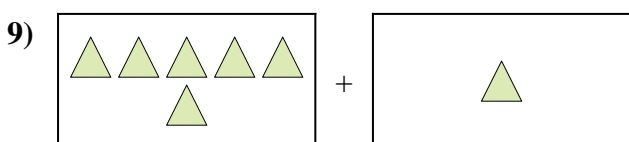
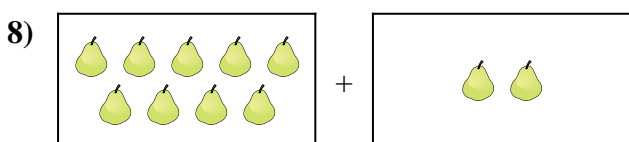
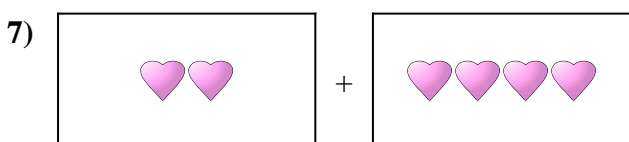
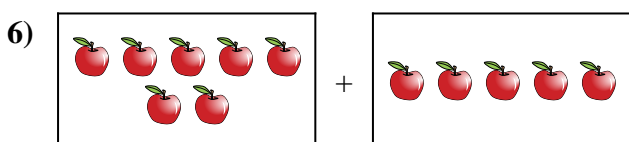
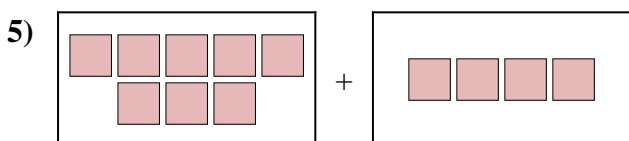
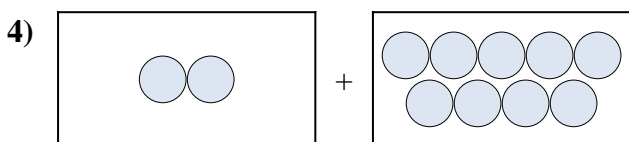
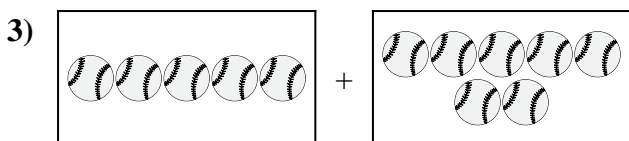

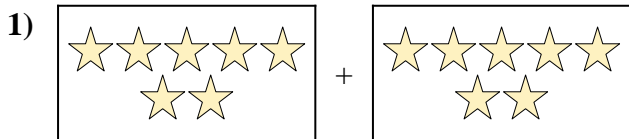


10. $10 + 2 = 12$



Drücken Sie das visuelle Problem als Gleichung mit Antwort aus.

Antworten



1. _____

2. _____

3. _____

4. _____

5. _____

6. _____

7. _____

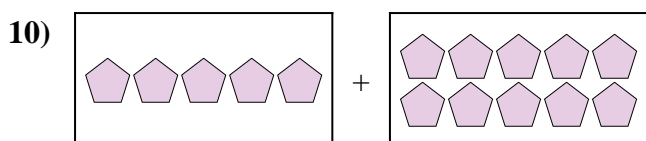
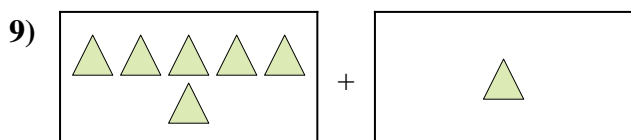
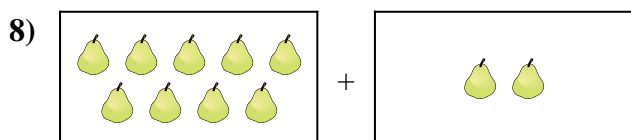
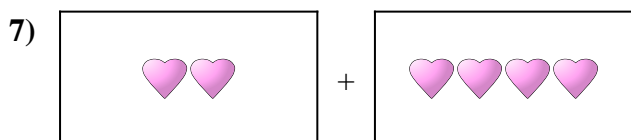
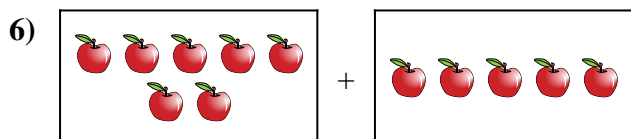
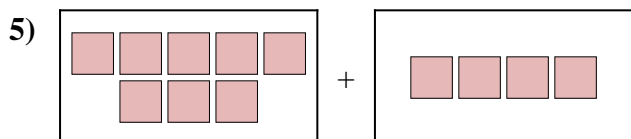
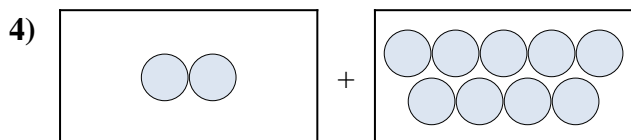
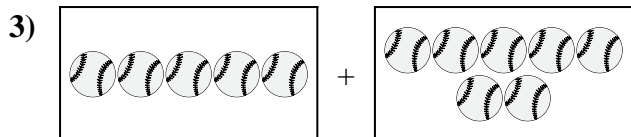

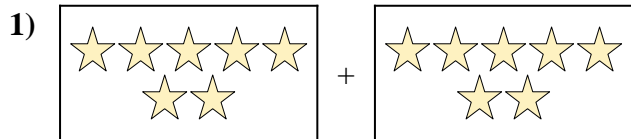
8. _____

9. _____

10. _____



Drücken Sie das visuelle Problem als Gleichung mit Antwort aus.



Antworten

1. $7 + 7 = 14$

2. $6 + 1 = 7$

3. $5 + 7 = 12$

4. $2 + 9 = 11$

5. $8 + 4 = 12$

6. $7 + 5 = 12$

7. $2 + 4 = 6$

8. $9 + 2 = 11$

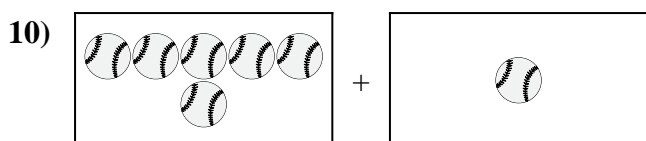
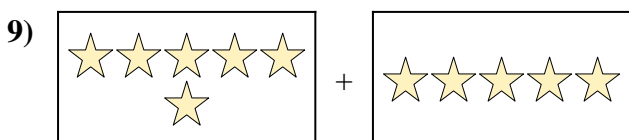
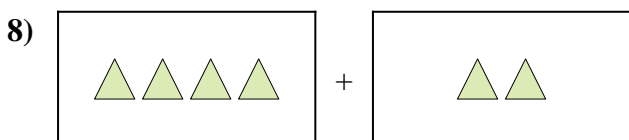
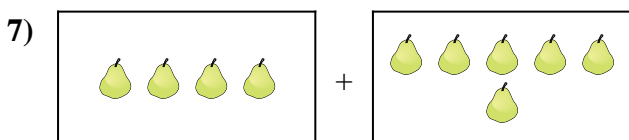
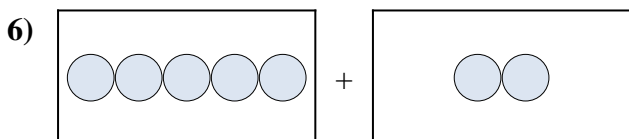
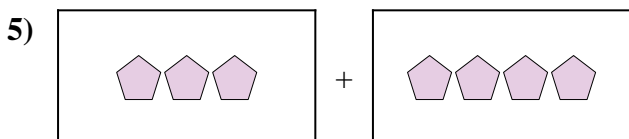
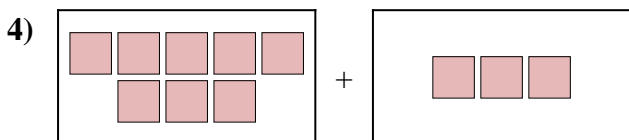

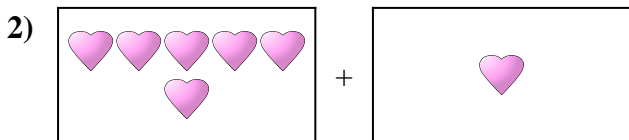
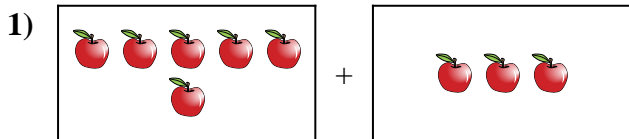
9. $6 + 1 = 7$

10. $5 + 10 = 15$



Drücken Sie das visuelle Problem als Gleichung mit Antwort aus.

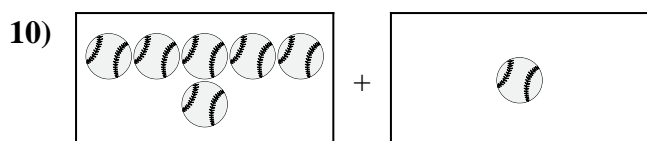
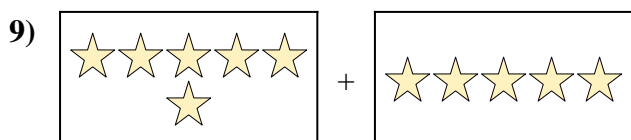
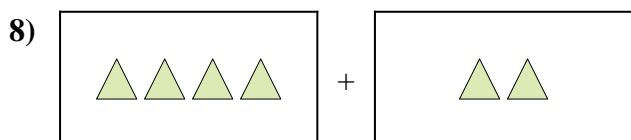
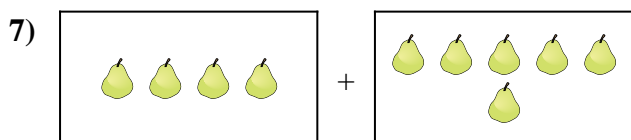
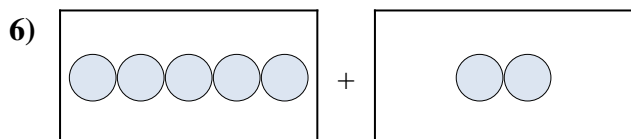
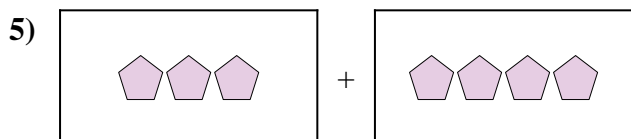
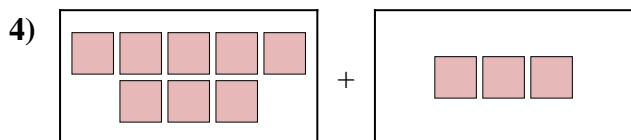

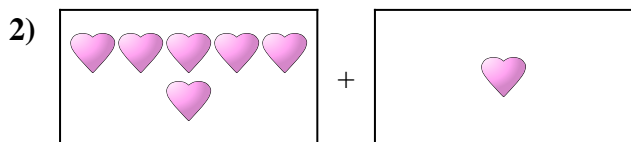
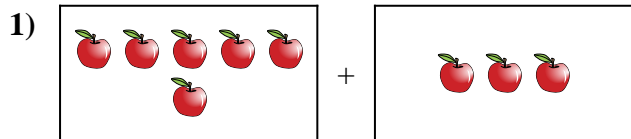
Antworten



1. _____
2. _____
3. _____
4. _____
5. _____
6. _____
7. _____
8. _____
9. _____
10. _____



Drücken Sie das visuelle Problem als Gleichung mit Antwort aus.



Antworten

1. $6 + 3 = 9$

2. $6 + 1 = 7$

3. $10 + 4 = 14$

4. $8 + 3 = 11$

5. $3 + 4 = 7$

6. $5 + 2 = 7$

7. $4 + 6 = 10$

8. $4 + 2 = 6$


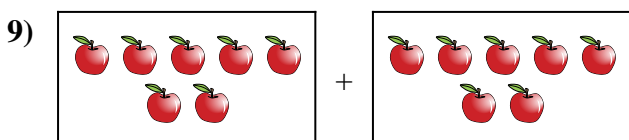
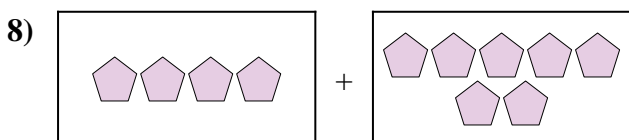
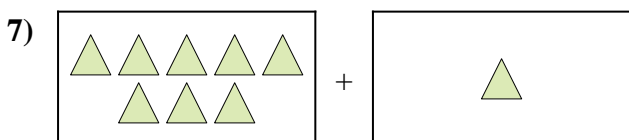
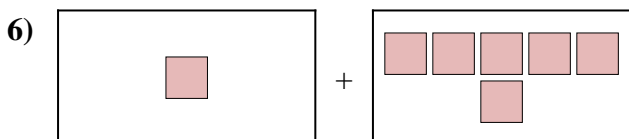
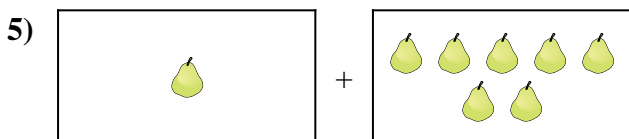
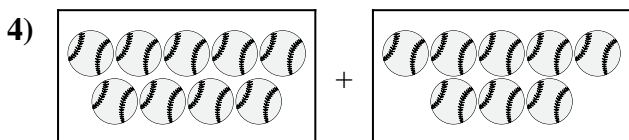
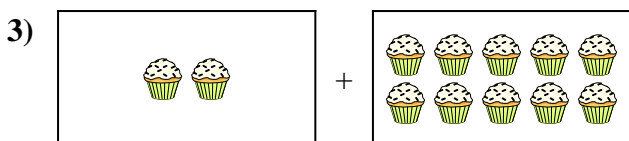
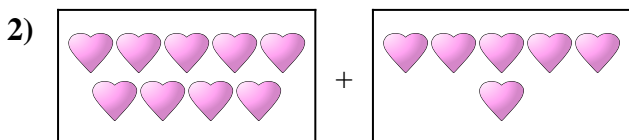
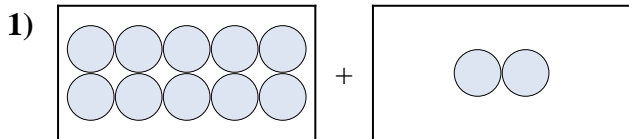
9. $6 + 5 = 11$

10. $6 + 1 = 7$



Drücken Sie das visuelle Problem als Gleichung mit Antwort aus.


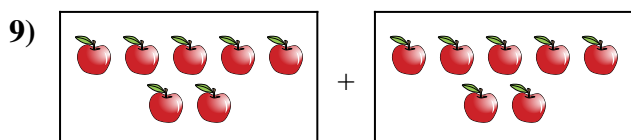
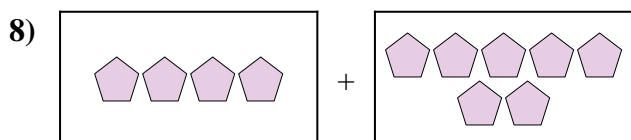
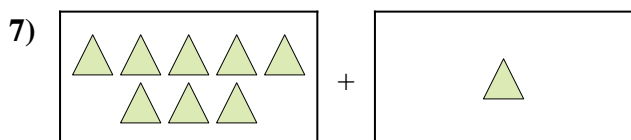
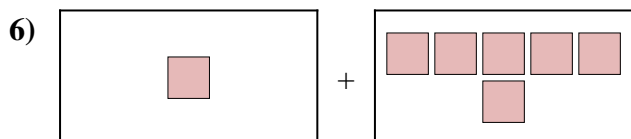
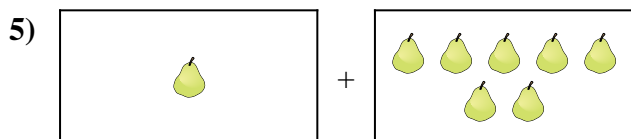
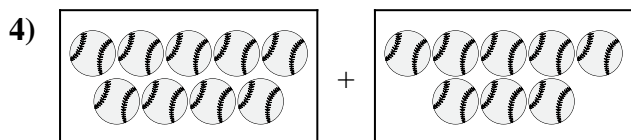
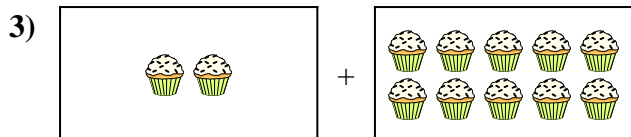
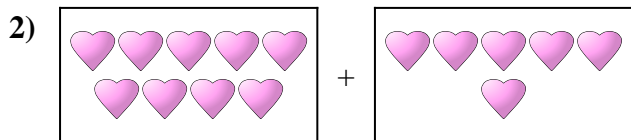
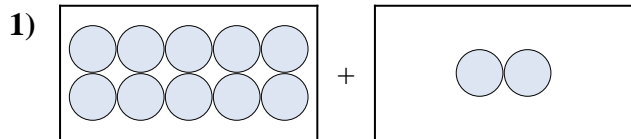
Antworten



1. _____
2. _____
3. _____
4. _____
5. _____
6. _____
7. _____
8. _____
9. _____
10. _____



Drücken Sie das visuelle Problem als Gleichung mit Antwort aus.

Antworten

1. $10 + 2 = 12$

2. $9 + 6 = 15$

3. $2 + 10 = 12$

4. $9 + 8 = 17$

5. $1 + 7 = 8$

6. $1 + 6 = 7$

7. $8 + 1 = 9$

8. $4 + 7 = 11$

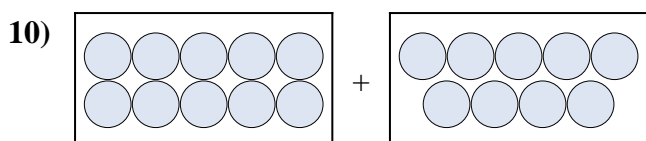
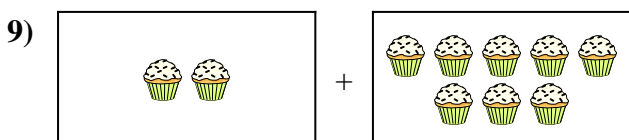
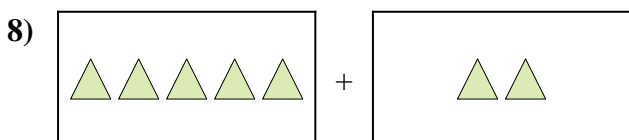
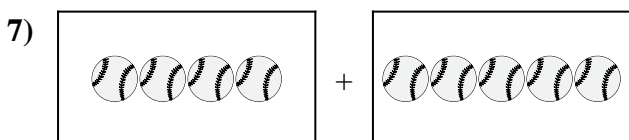
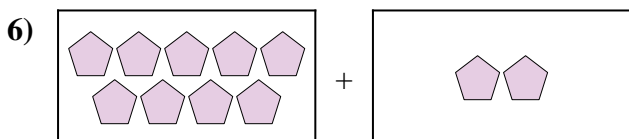
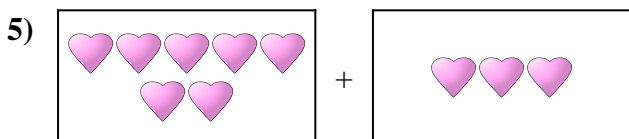
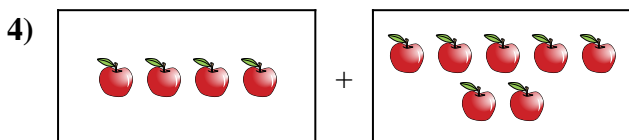
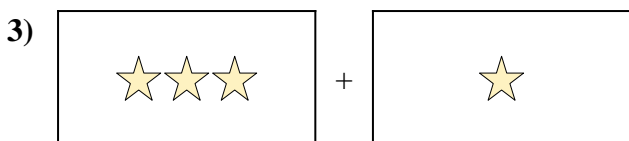
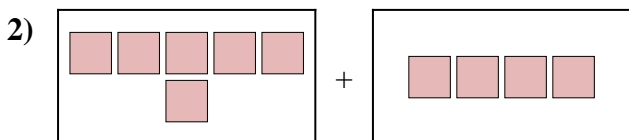
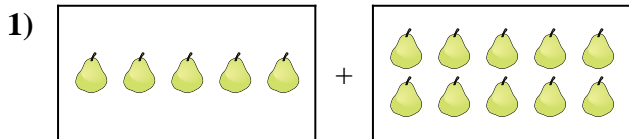
9. $7 + 7 = 14$

10. $9 + 7 = 16$



Drücken Sie das visuelle Problem als Gleichung mit Antwort aus.

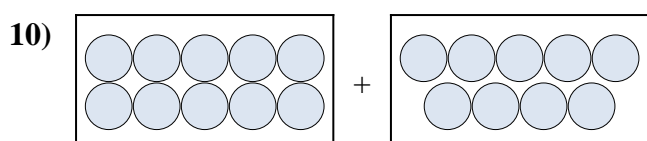
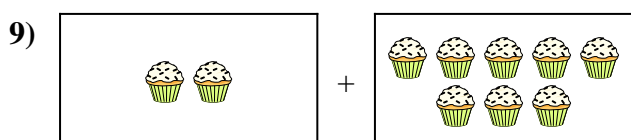
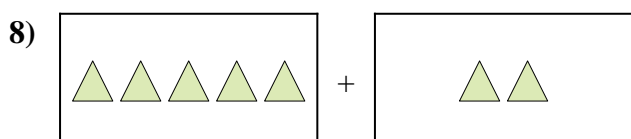
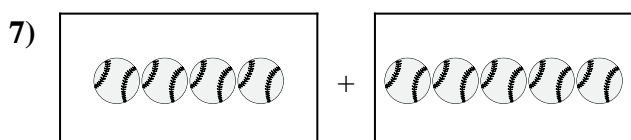
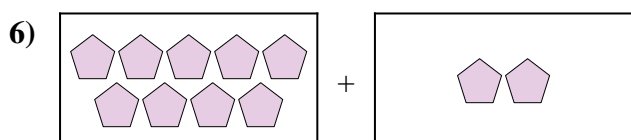
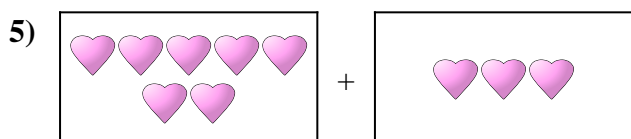
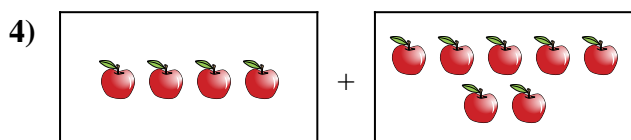
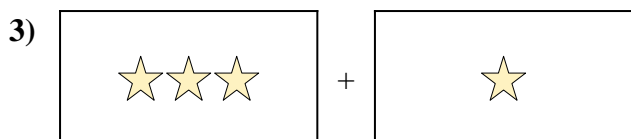
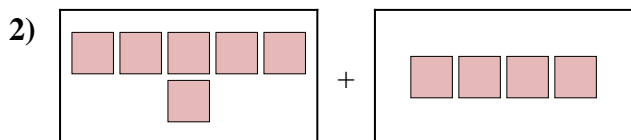
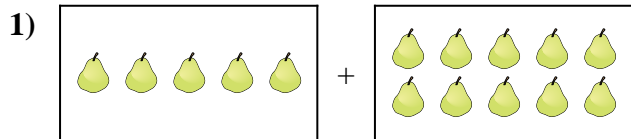
Antworten



1. _____
2. _____
3. _____
4. _____
5. _____
6. _____
7. _____
8. _____
9. _____
10. _____



Drücken Sie das visuelle Problem als Gleichung mit Antwort aus.

**Antworten**

1. $5 + 10 = 15$

2. $6 + 4 = 10$

3. $3 + 1 = 4$

4. $4 + 7 = 11$

5. $7 + 3 = 10$

6. $9 + 2 = 11$

7. $4 + 5 = 9$

8. $5 + 2 = 7$

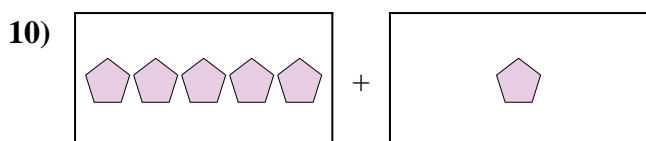
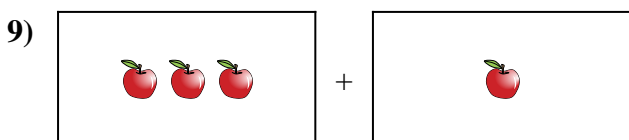
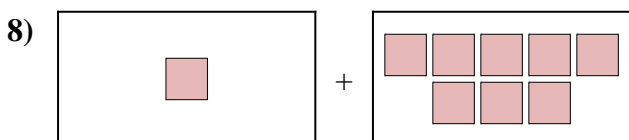
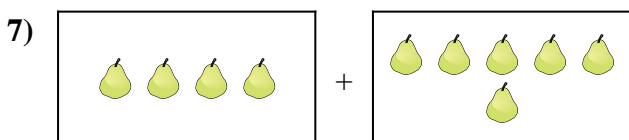

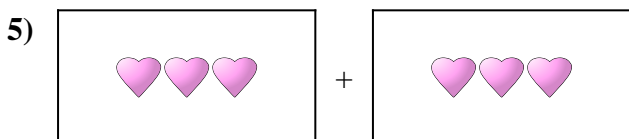
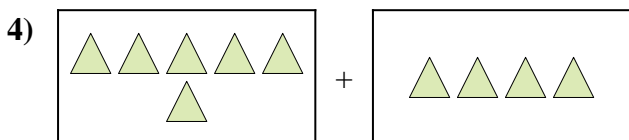
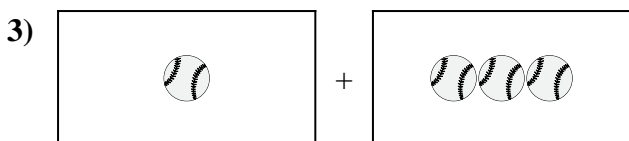

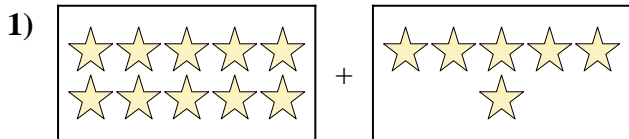
9. $2 + 8 = 10$

10. $10 + 9 = 19$



Drücken Sie das visuelle Problem als Gleichung mit Antwort aus.

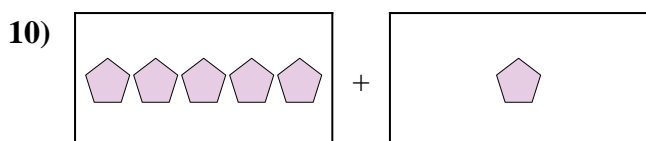
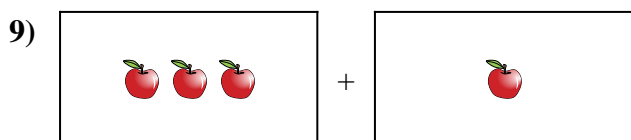
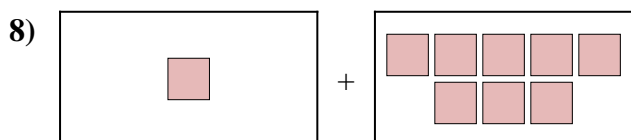
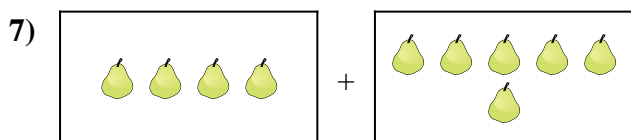

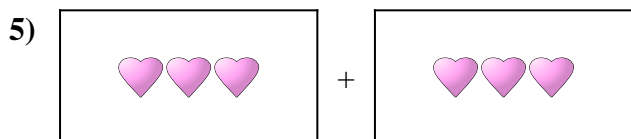
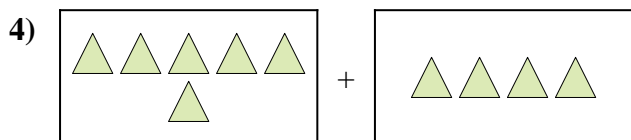
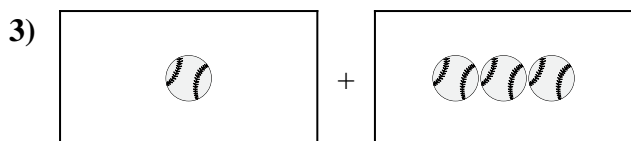

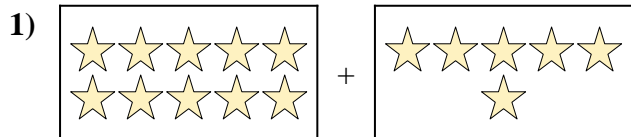
Antworten



1. _____
2. _____
3. _____
4. _____
5. _____
6. _____
7. _____
8. _____
9. _____
10. _____



Drücken Sie das visuelle Problem als Gleichung mit Antwort aus.

Antworten

1. $10 + 6 = 16$

2. $3 + 9 = 12$

3. $1 + 3 = 4$

4. $6 + 4 = 10$

5. $3 + 3 = 6$

6. $7 + 3 = 10$

7. $4 + 6 = 10$

8. $1 + 8 = 9$

9. $3 + 1 = 4$

10. $5 + 1 = 6$