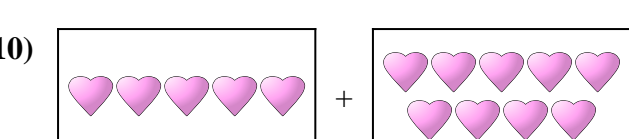
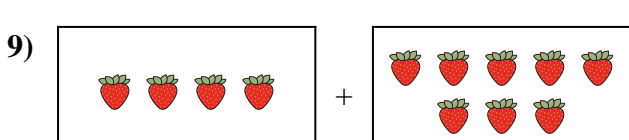
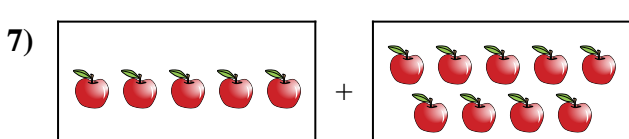

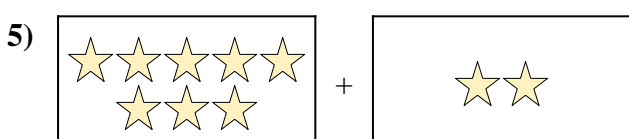
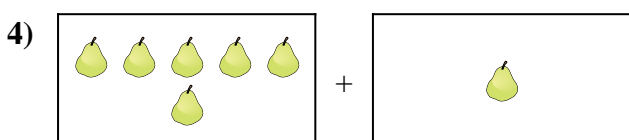
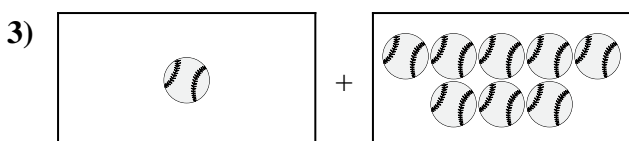
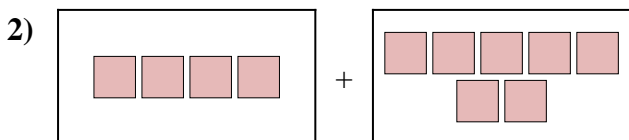
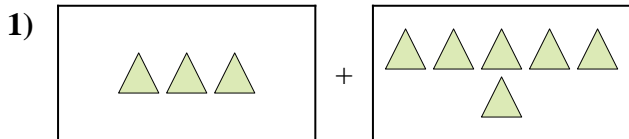




Drücken Sie das visuelle Problem als Gleichung mit Antwort aus.

**Antworten**



1. \_\_\_\_\_

2. \_\_\_\_\_

3. \_\_\_\_\_

4. \_\_\_\_\_

5. \_\_\_\_\_

6. \_\_\_\_\_

7. \_\_\_\_\_

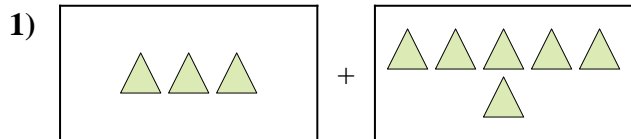
8. \_\_\_\_\_

9. \_\_\_\_\_

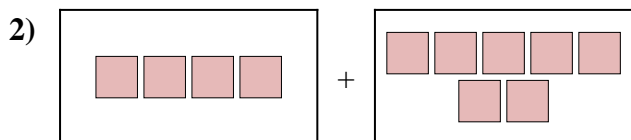
10. \_\_\_\_\_



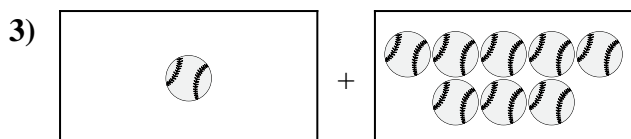
Drücken Sie das visuelle Problem als Gleichung mit Antwort aus.

Antworten

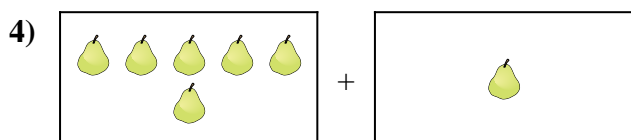
1.  $3 + 6 = 9$



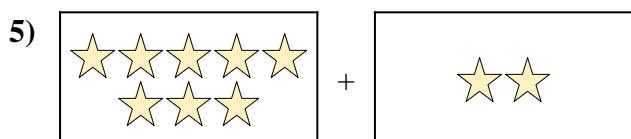
2.  $4 + 7 = 11$




3.  $1 + 8 = 9$



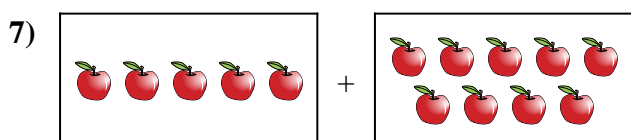
4.  $6 + 1 = 7$



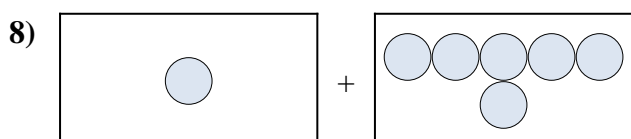
5.  $8 + 2 = 10$



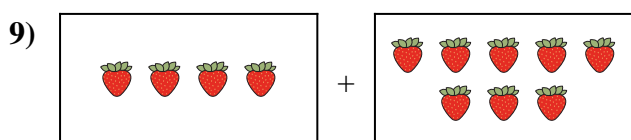
6.  $10 + 9 = 19$



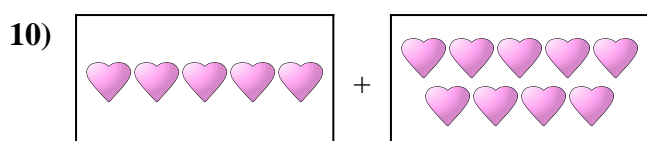
7.  $5 + 9 = 14$



8.  $1 + 6 = 7$



9.  $4 + 8 = 12$



10.  $5 + 9 = 14$