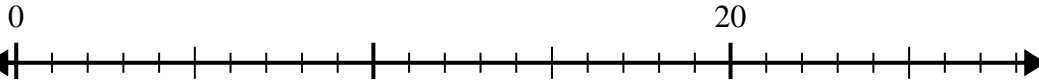




Verwenden Sie den Zahlenstrahl, um das Divisionsproblem zu lösen.

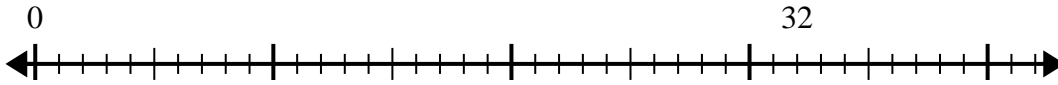
**Antworten**

1)  $20:4=$



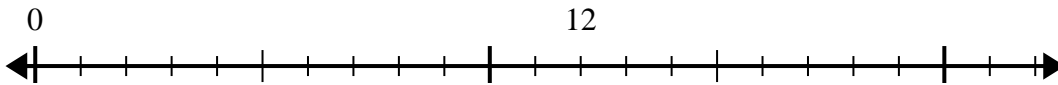
1. \_\_\_\_\_

2)  $32:8=$



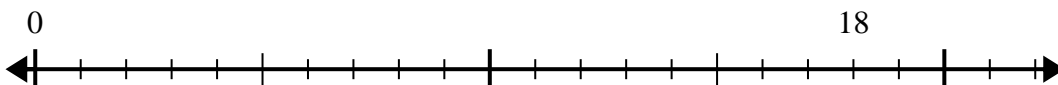
2. \_\_\_\_\_

3)  $12:4=$



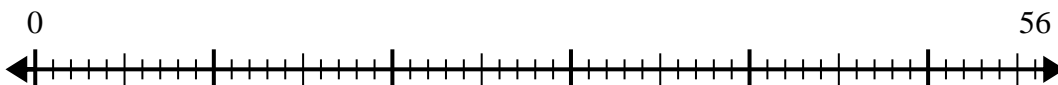
3. \_\_\_\_\_

4)  $18:6=$



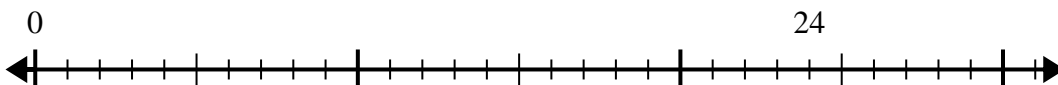
4. \_\_\_\_\_

5)  $56:8=$



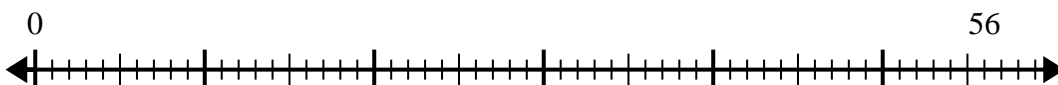
5. \_\_\_\_\_

6)  $24:8=$



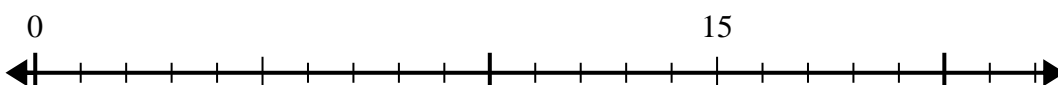
6. \_\_\_\_\_

7)  $56:7=$



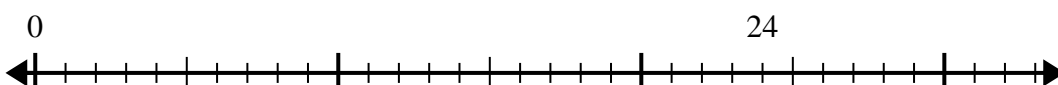
7. \_\_\_\_\_

8)  $15:5=$



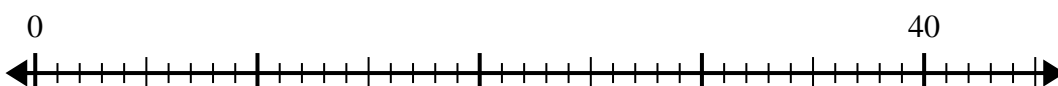
8. \_\_\_\_\_

9)  $24:4=$



9. \_\_\_\_\_

10)  $40:5=$

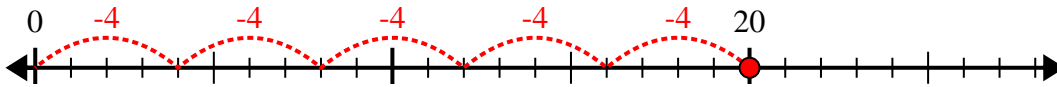


10. \_\_\_\_\_

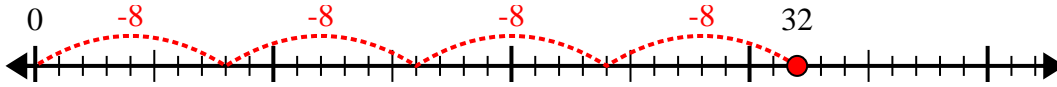


Verwenden Sie den Zahlenstrahl, um das Divisionsproblem zu lösen.

1)  $20:4=$



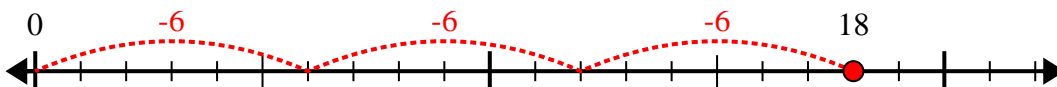
2)  $32:8=$



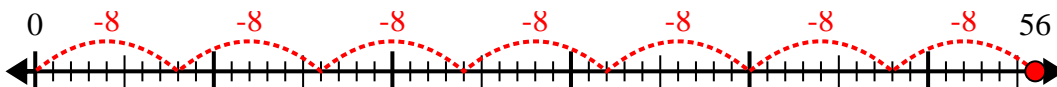
3)  $12:4=$



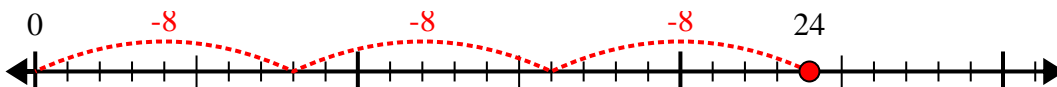
4)  $18:6=$



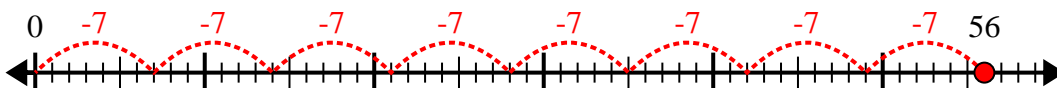
5)  $56:8=$



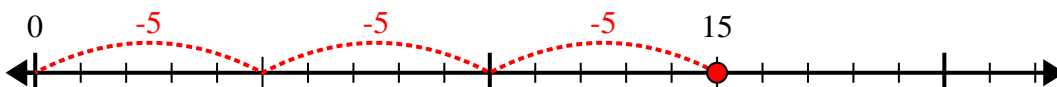
6)  $24:8=$



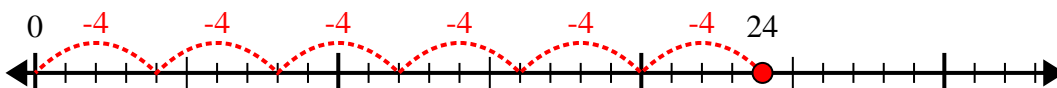
7)  $56:7=$



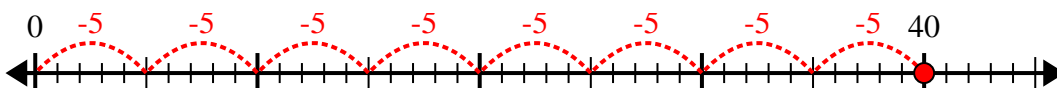
8)  $15:5=$



9)  $24:4=$



10)  $40:5=$



**Antworten**

1. 5

2. 4

3. 3

4. 3

5. 7

6. 3

7. 8

8. 3

9. 6

10. 8