



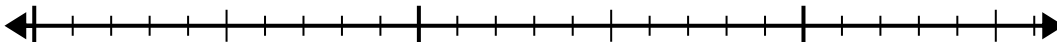
Verwenden Sie den Zahlenstrahl, um das Divisionsproblem zu lösen.

**Antworten**

1)  $20:5=$

0

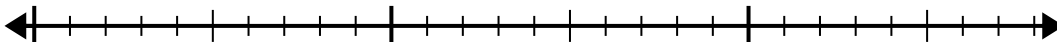
20



2)  $24:6=$

0

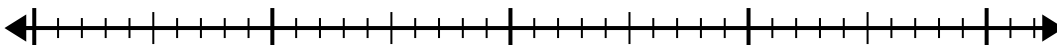
24



3)  $32:8=$

0

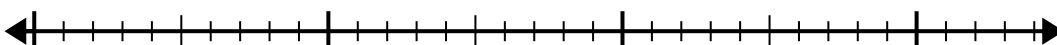
32



4)  $28:7=$

0

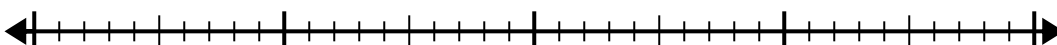
28



5)  $35:5=$

0

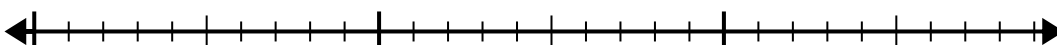
35



6)  $28:4=$

0

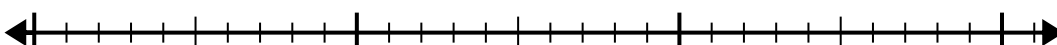
28



7)  $30:6=$

0

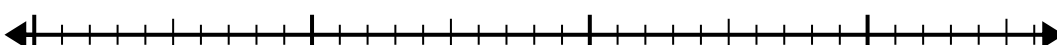
30



8)  $32:4=$

0


32



9)  $24:4=$

0

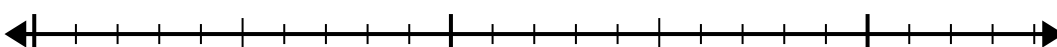
24



10)  $21:7=$

0

21

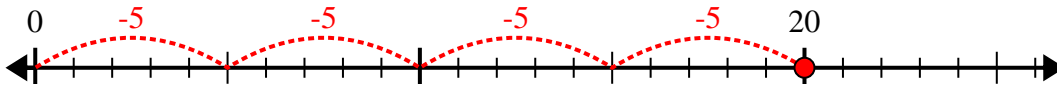


1. \_\_\_\_\_
2. \_\_\_\_\_
3. \_\_\_\_\_
4. \_\_\_\_\_
5. \_\_\_\_\_
6. \_\_\_\_\_
7. \_\_\_\_\_
8. \_\_\_\_\_
9. \_\_\_\_\_
10. \_\_\_\_\_

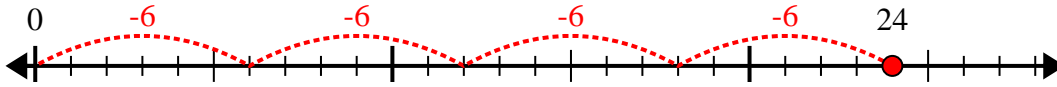


Verwenden Sie den Zahlenstrahl, um das Divisionsproblem zu lösen.

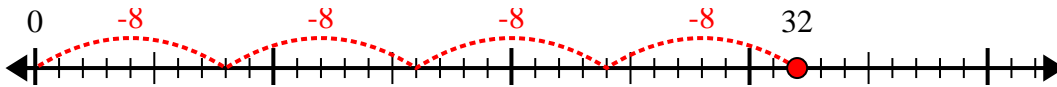
1)  $20:5=$



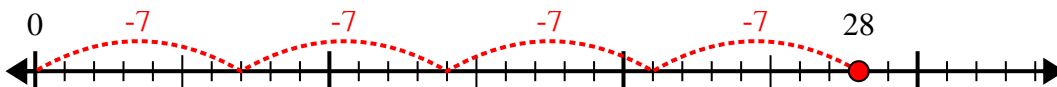
2)  $24:6=$



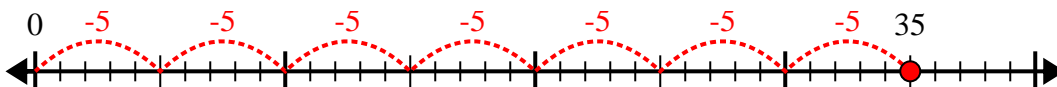
3)  $32:8=$



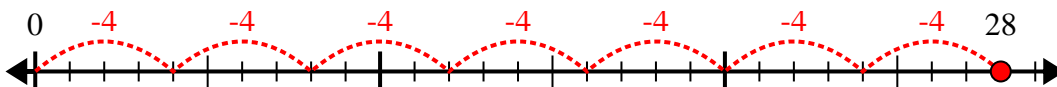
4)  $28:7=$



5)  $35:5=$



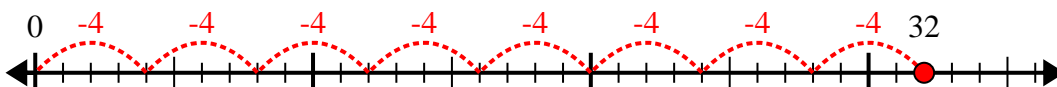
6)  $28:4=$



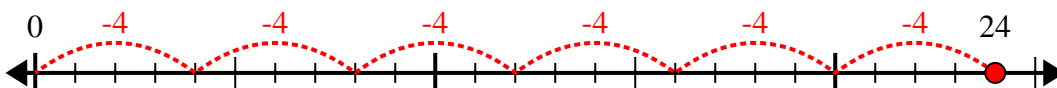
7)  $30:6=$



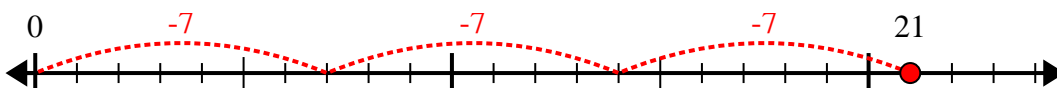
8)  $32:4=$



9)  $24:4=$



10)  $21:7=$



**Antworten**

1. 4

2. 4

3. 4

4. 4

5. 7

6. 7

7. 5

8. 8

9. 6

10. 3