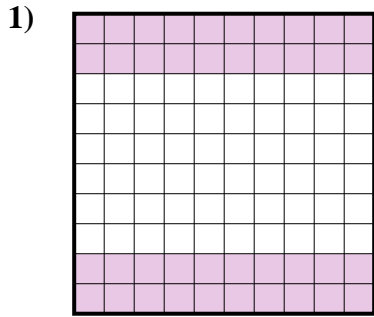
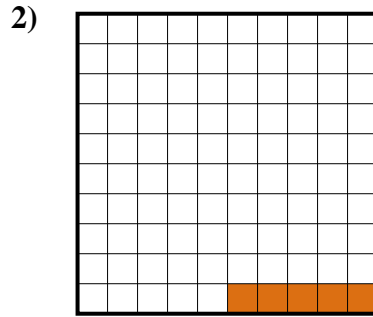




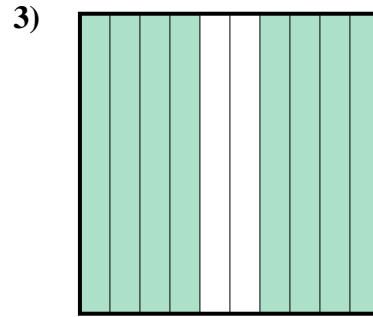
Stelle fest, welcher Buchstabe die schraffierte Fläche in Bezug auf das Ganze richtig darstellt.

Antworten

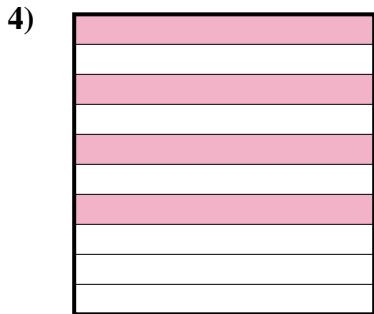
- A. 4
B. 0,04
C. 0,4
D. 400,00




- A. 0,5
B. 0,05
C. 50,00
D. 50,0



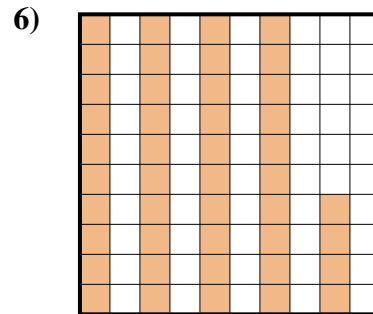
- A. 80
B. 800,0
C. 0,8
D. 800,00



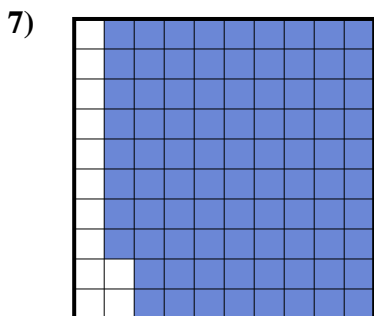
- A. 0,04
B. 400,00
C. 400,0
D. 0,4



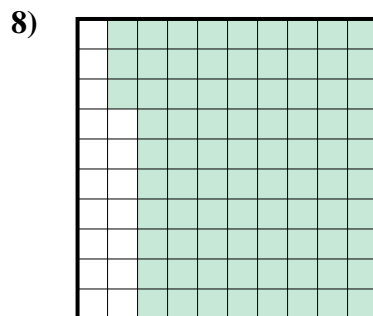
- A. 1
B. 0,1
C. 100,0
D. 10



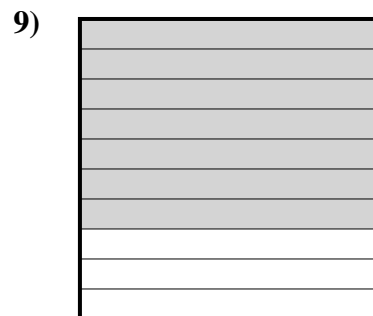
- A. 440,00
B. 44
C. 440,0
D. 0,44



- A. 0,088
B. 880,0
C. 0,88
D. 88



- A. 83
B. 8,3
C. 0,83
D. 830,0

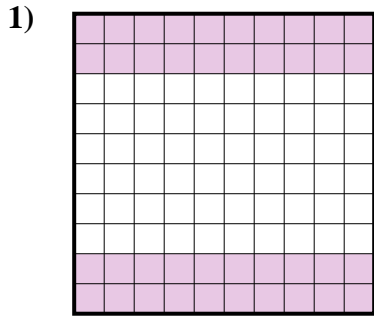


- A. 0,7
B. 700,0
C. 700,00
D. 70

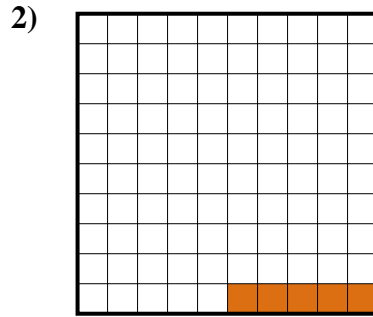
1. _____
2. _____
3. _____
4. _____
5. _____
6. _____
7. _____
8. _____
9. _____



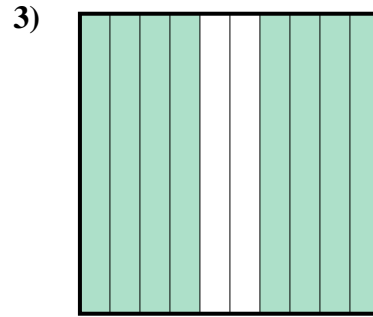
Stelle fest, welcher Buchstabe die schraffierte Fläche in Bezug auf das Ganze richtig darstellt.

Antworten

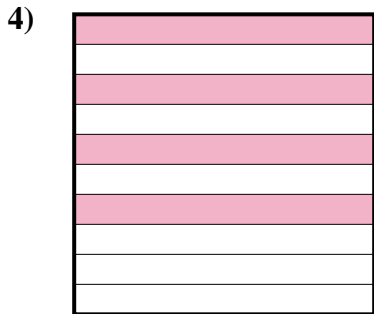
- A. 4
B. 0,04
C. 0,4
D. 400,00




- A. 0,5
B. 0,05
C. 50,00
D. 50,0



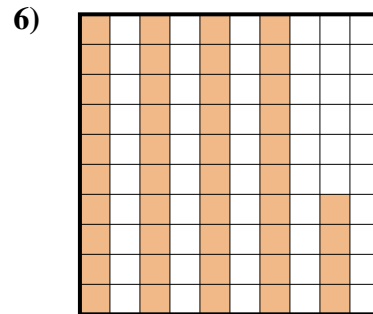
- A. 80
B. 800,0
C. 0,8
D. 800,00



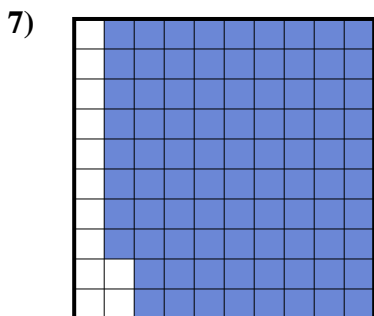
- A. 0,04
B. 400,00
C. 400,0
D. 0,4



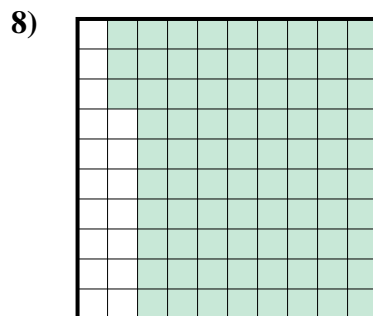
- A. 1
B. 0,1
C. 100,0
D. 10



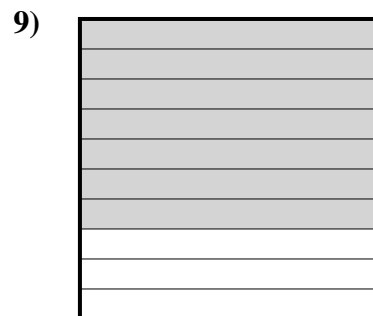
- A. 440,00
B. 44
C. 440,0
D. 0,44



- A. 0,088
B. 880,0
C. 0,88
D. 88



- A. 83
B. 8,3
C. 0,83
D. 830,0



- A. 0,7
B. 700,0
C. 700,00
D. 70

1. **C**
2. **B**
3. **C**
4. **D**
5. **B**
6. **D**
7. **C**
8. **C**
9. **A**