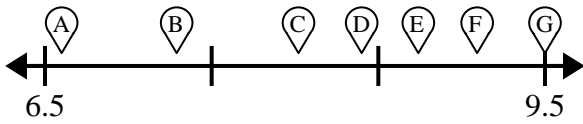




Verwenden Sie den Zahlenstrahl, um den Betrag einem Buchstaben zuzuordnen.

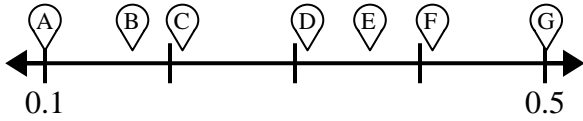
**Antworten**

1)



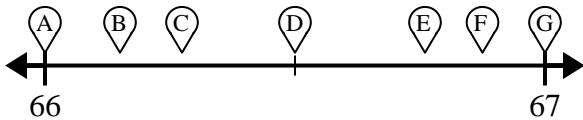
- A) 9,093 \_\_\_\_\_
- B) 8,021 \_\_\_\_\_
- C) 6,6 \_\_\_\_\_

2)



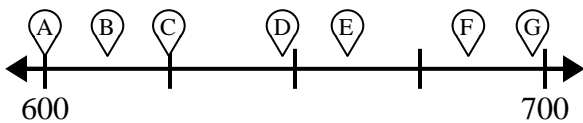
- A) 0,501 \_\_\_\_\_
- B) 0,36 \_\_\_\_\_
- C) 0,41 \_\_\_\_\_

3)



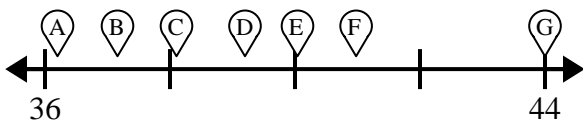
- A) 66,15 \_\_\_\_\_
- B) 66,875 \_\_\_\_\_
- C) 66,274 \_\_\_\_\_

4)



- A) 660,44 \_\_\_\_\_
- B) 684,677 \_\_\_\_\_
- C) 624,781 \_\_\_\_\_

5)



- A) 40,03 \_\_\_\_\_
- B) 43,9 \_\_\_\_\_
- C) 37,15 \_\_\_\_\_

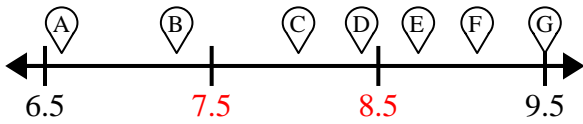
- 1. \_\_\_\_\_
- 2. \_\_\_\_\_
- 3. \_\_\_\_\_
- 4. \_\_\_\_\_
- 5. \_\_\_\_\_



Verwenden Sie den Zahlenstrahl, um den Betrag einem Buchstaben zuzuordnen.

**Antworten**

1)



- A) 9,093          F
- B) 8,021          C
- C) 6,6             A

1.     F         C         A    

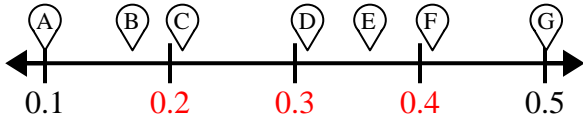
2.     G         E         F    

3.     B         F         C    

4.     E         F         C    

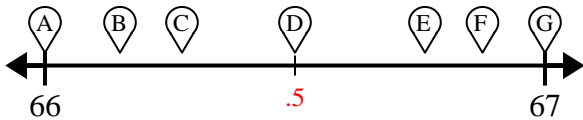
5.     E         G         B    

2)



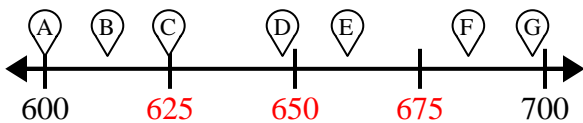
- A) 0,501          G
- B) 0,36           E
- C) 0,41           F

3)



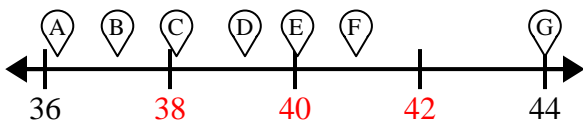
- A) 66,15          B
- B) 66,875         F
- C) 66,274         C

4)



- A) 660,44          E
- B) 684,677         F
- C) 624,781         C

5)



- A) 40,03          E
- B) 43,9           G
- C) 37,15          B



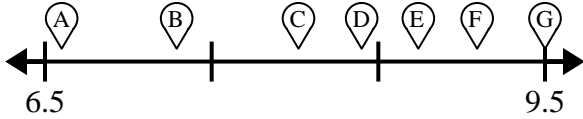
Verwenden Sie den Zahlenstrahl, um den Betrag einem Buchstaben zuzuordnen.

**Antworten**

E	B	C	A
E	C	E	G
F	B	F	F
C	G	F	

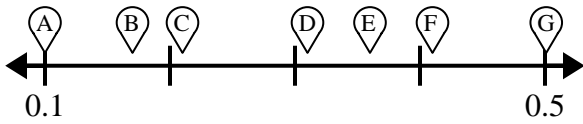
- 1. \_\_\_\_\_
- 2. \_\_\_\_\_
- 3. \_\_\_\_\_
- 4. \_\_\_\_\_
- 5. \_\_\_\_\_

1)



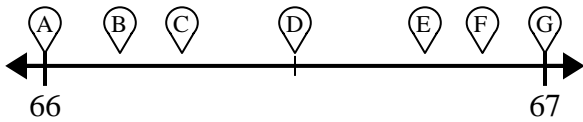
- A) 9,093 \_\_\_\_\_
- B) 8,021 \_\_\_\_\_
- C) 6,6 \_\_\_\_\_

2)



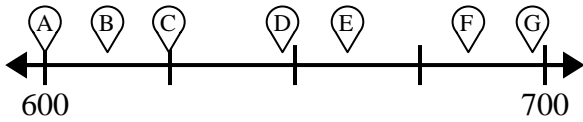
- A) 0,501 \_\_\_\_\_
- B) 0,36 \_\_\_\_\_
- C) 0,41 \_\_\_\_\_

3)



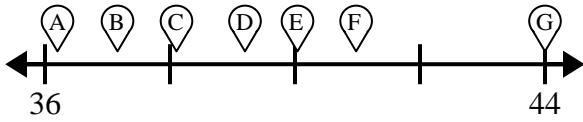
- A) 66,15 \_\_\_\_\_
- B) 66,875 \_\_\_\_\_
- C) 66,274 \_\_\_\_\_

4)



- A) 660,44 \_\_\_\_\_
- B) 684,677 \_\_\_\_\_
- C) 624,781 \_\_\_\_\_

5)



- A) 40,03 \_\_\_\_\_
- B) 43,9 \_\_\_\_\_
- C) 37,15 \_\_\_\_\_