





Wende die visuelle Methode an um jede Aufgabe zu lösen.

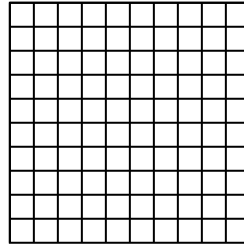
1) $0,9 \cdot 0,6 =$




2) $0,3 \cdot 0,2 =$




3) $0,6 \cdot 0,2 =$



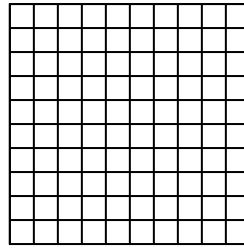
4) $0,6 \cdot 0,5 =$




5) $0,3 \cdot 0,6 =$




6) $0,8 \cdot 0,3 =$



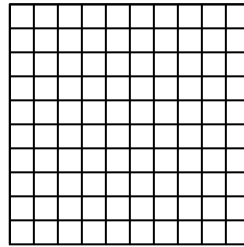
7) $0,9 \cdot 0,3 =$




8) $0,7 \cdot 0,1 =$




9) $0,8 \cdot 0,7 =$



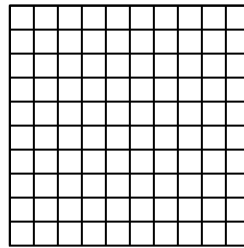
10) $0,3 \cdot 0,3 =$




11) $0,8 \cdot 0,6 =$




12) $0,1 \cdot 0,1 =$




13) $0,9 \cdot 0,2 =$



14) $0,8 \cdot 0,4 =$



15) $0,2 \cdot 0,4 =$



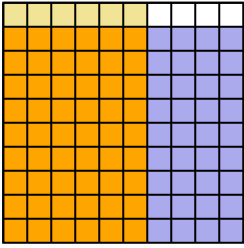
Antworten

1. _____
2. _____
3. _____
4. _____
5. _____
6. _____
7. _____
8. _____
9. _____
10. _____
11. _____
12. _____
13. _____
14. _____
15. _____

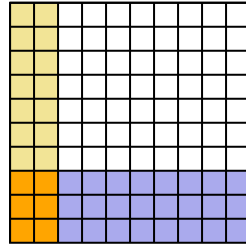


Wende die visuelle Methode an um jede Aufgabe zu lösen.

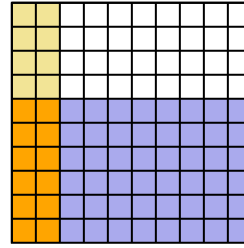
1) $0,9 \cdot 0,6 =$



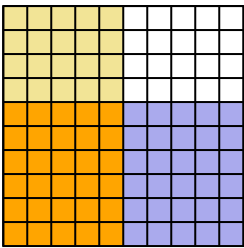
2) $0,3 \cdot 0,2 =$



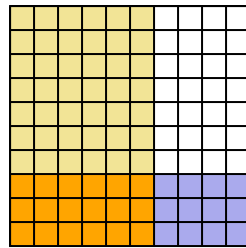
3) $0,6 \cdot 0,2 =$



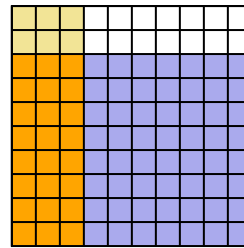
4) $0,6 \cdot 0,5 =$



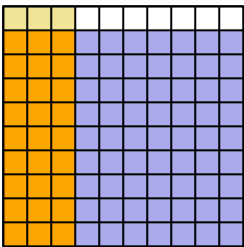
5) $0,3 \cdot 0,6 =$



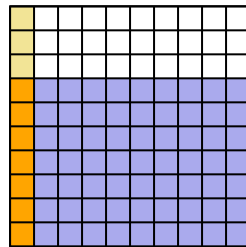
6) $0,8 \cdot 0,3 =$



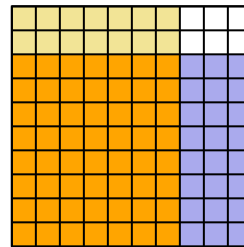
7) $0,9 \cdot 0,3 =$



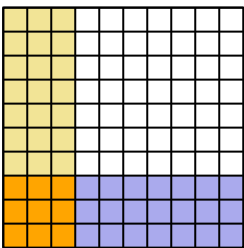
8) $0,7 \cdot 0,1 =$



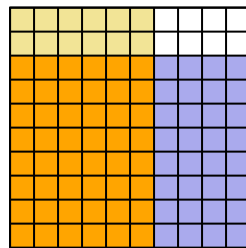
9) $0,8 \cdot 0,7 =$



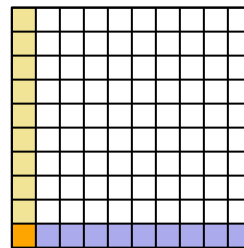
10) $0,3 \cdot 0,3 =$



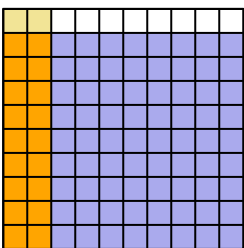
11) $0,8 \cdot 0,6 =$



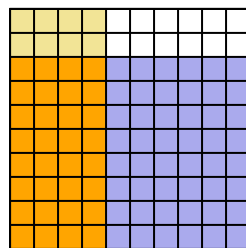
12) $0,1 \cdot 0,1 =$



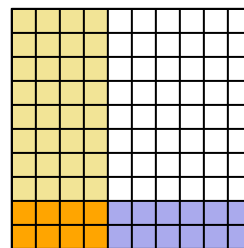
13) $0,9 \cdot 0,2 =$



14) $0,8 \cdot 0,4 =$



15) $0,2 \cdot 0,4 =$

**Antworten**

1. $\frac{54}{100} = 0,54$

2. $\frac{6}{100} = 0,06$

3. $\frac{12}{100} = 0,12$

4. $\frac{30}{100} = 0,3$

5. $\frac{18}{100} = 0,18$

6. $\frac{24}{100} = 0,24$

7. $\frac{27}{100} = 0,27$

8. $\frac{7}{100} = 0,07$

9. $\frac{56}{100} = 0,56$

10. $\frac{9}{100} = 0,09$

11. $\frac{48}{100} = 0,48$

12. $\frac{1}{100} = 0,01$

13. $\frac{18}{100} = 0,18$

14. $\frac{32}{100} = 0,32$

15. $\frac{8}{100} = 0,08$