


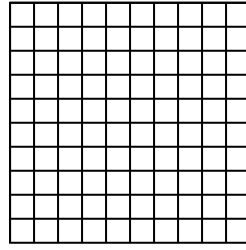


Wende die visuelle Methode an um jede Aufgabe zu lösen.

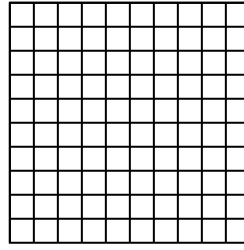
1)  $0,5 \cdot 0,7 =$




2)  $0,7 \cdot 0,5 =$



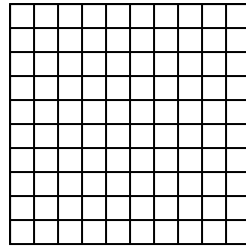
3)  $0,1 \cdot 0,4 =$



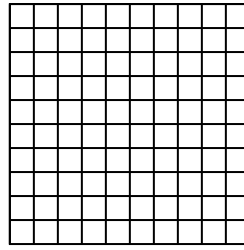
4)  $0,7 \cdot 0,9 =$



5)  $0,1 \cdot 0,7 =$



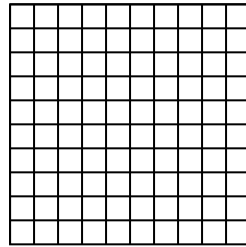
6)  $0,9 \cdot 0,8 =$



7)  $0,7 \cdot 0,2 =$




8)  $0,8 \cdot 0,7 =$



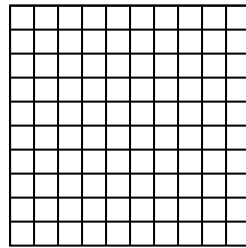
9)  $0,8 \cdot 0,2 =$



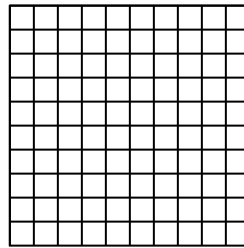
10)  $0,8 \cdot 0,8 =$




11)  $0,3 \cdot 0,5 =$




12)  $0,6 \cdot 0,6 =$




13)  $0,2 \cdot 0,2 =$



14)  $0,1 \cdot 0,6 =$



15)  $0,6 \cdot 0,8 =$



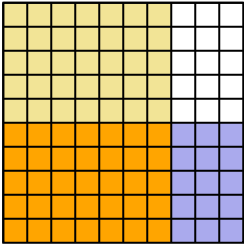
**Antworten**

1. \_\_\_\_\_
2. \_\_\_\_\_
3. \_\_\_\_\_
4. \_\_\_\_\_
5. \_\_\_\_\_
6. \_\_\_\_\_
7. \_\_\_\_\_
8. \_\_\_\_\_
9. \_\_\_\_\_
10. \_\_\_\_\_
11. \_\_\_\_\_
12. \_\_\_\_\_
13. \_\_\_\_\_
14. \_\_\_\_\_
15. \_\_\_\_\_

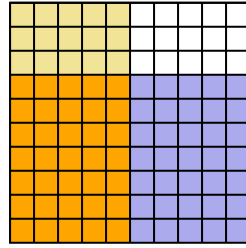


Wende die visuelle Methode an um jede Aufgabe zu lösen.

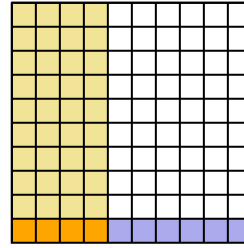
1)  $0,5 \cdot 0,7 =$



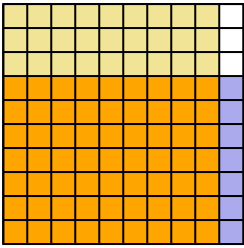
2)  $0,7 \cdot 0,5 =$



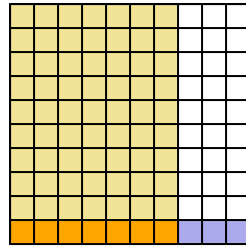
3)  $0,1 \cdot 0,4 =$



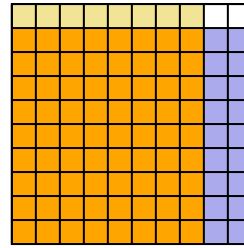
4)  $0,7 \cdot 0,9 =$



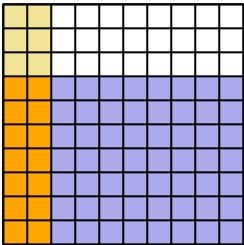
5)  $0,1 \cdot 0,7 =$



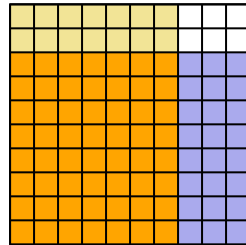
6)  $0,9 \cdot 0,8 =$



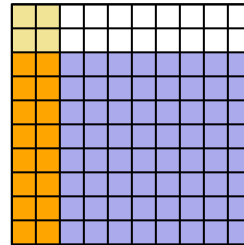
7)  $0,7 \cdot 0,2 =$



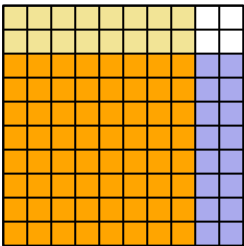
8)  $0,8 \cdot 0,7 =$



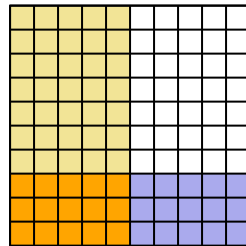
9)  $0,8 \cdot 0,2 =$



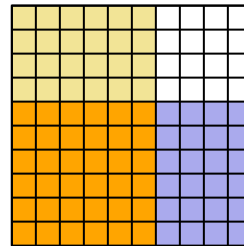
10)  $0,8 \cdot 0,8 =$



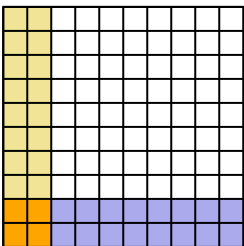
11)  $0,3 \cdot 0,5 =$



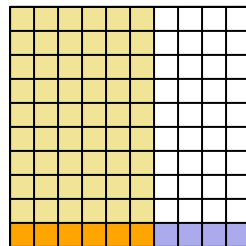
12)  $0,6 \cdot 0,6 =$



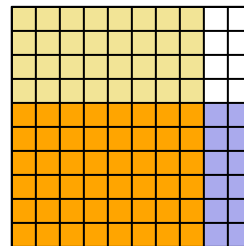
13)  $0,2 \cdot 0,2 =$



14)  $0,1 \cdot 0,6 =$



15)  $0,6 \cdot 0,8 =$

**Antworten**

1.  $\frac{35}{100} = 0,35$

2.  $\frac{35}{100} = 0,35$

3.  $\frac{4}{100} = 0,04$

4.  $\frac{63}{100} = 0,63$

5.  $\frac{7}{100} = 0,07$

6.  $\frac{72}{100} = 0,72$

7.  $\frac{14}{100} = 0,14$

8.  $\frac{56}{100} = 0,56$

9.  $\frac{16}{100} = 0,16$

10.  $\frac{64}{100} = 0,64$

11.  $\frac{15}{100} = 0,15$

12.  $\frac{36}{100} = 0,36$

13.  $\frac{4}{100} = 0,04$

14.  $\frac{6}{100} = 0,06$

15.  $\frac{48}{100} = 0,48$