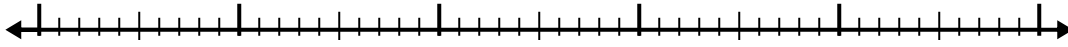




Verwenden Sie den Zahlenstrahl, um jedes Problem zu lösen.

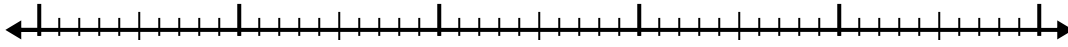
Antworten

1) $4.5 + 3.4 =$



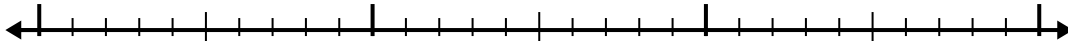
1. _____

2) $6 + 2.3 =$



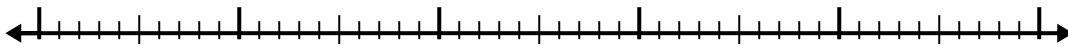
2. _____

3) $2.3 + 1.2 =$



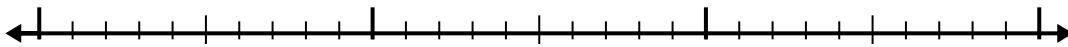
3. _____

4) $5.7 + 3.4 =$



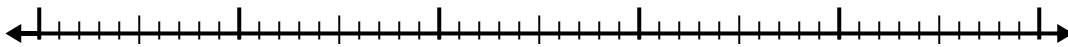
4. _____

5) $1 + 1.6 =$



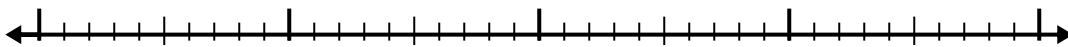
5. _____

6) $4.4 + 3.6 =$




6. _____

7) $5.9 + 2.8 =$



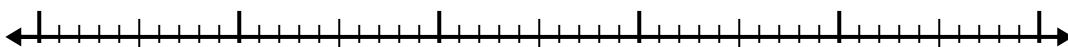
7. _____

8) $7.2 + 1.8 =$



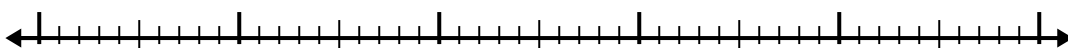
8. _____

9) $6.1 + 2.2 =$



9. _____

10) $7.3 + 3.5 =$

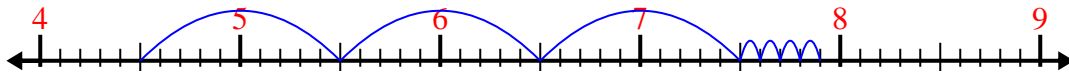


10. _____

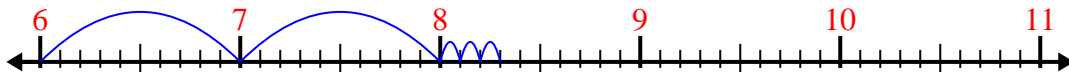


Verwenden Sie den Zahlenstrahl, um jedes Problem zu lösen.

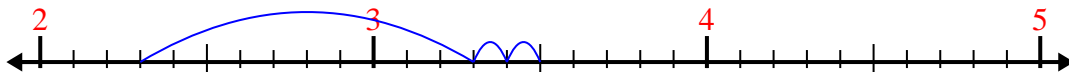
1) $4.5 + 3.4 =$



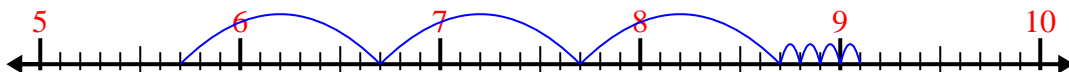
2) $6 + 2.3 =$



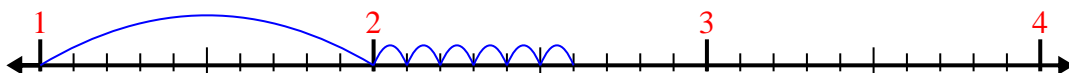
3) $2.3 + 1.2 =$



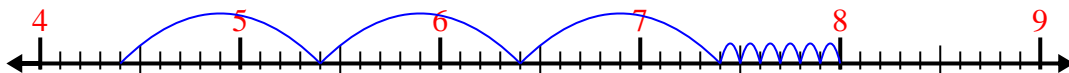
4) $5.7 + 3.4 =$



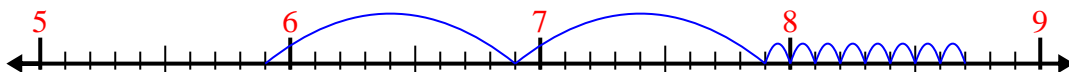
5) $1 + 1.6 =$



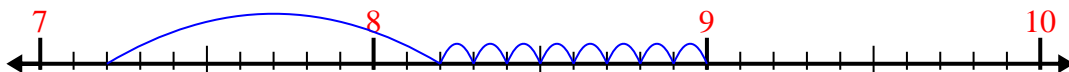
6) $4.4 + 3.6 =$



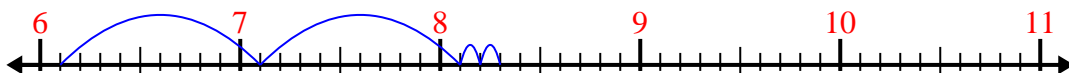
7) $5.9 + 2.8 =$



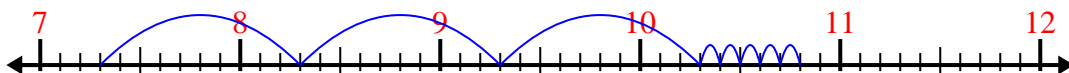
8) $7.2 + 1.8 =$



9) $6.1 + 2.2 =$



10) $7.3 + 3.5 =$



Antworten

1. 7,9

2. 8,3

3. 3,5

4. 9,1

5. 2,6

6. 8,0

7. 8,7

8. 9,0

9. 8,3

10. 10,8