




Verwenden Sie den Zahlenstrahl, um jedes Problem zu lösen.

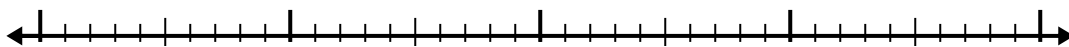
Antworten

1) $6.1 + 1.7 =$



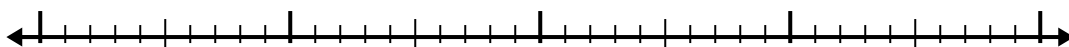
1. _____

2) $2.8 + 1.3 =$



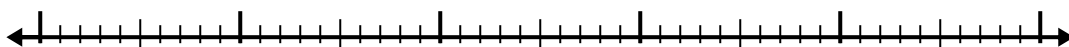
2. _____

3) $5.6 + 1.3 =$




3. _____

4) $7.5 + 3.7 =$



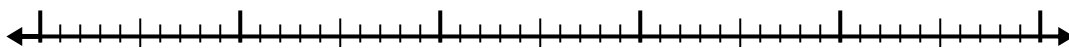
4. _____

5) $7.8 + 2.9 =$



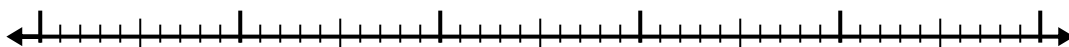
5. _____

6) $3.4 + 2.5 =$



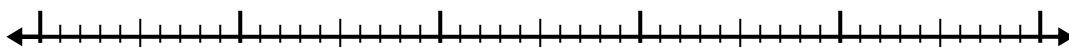
6. _____

7) $6.7 + 2.7 =$



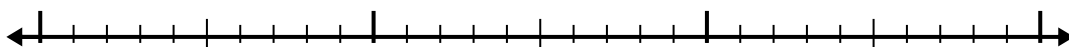
7. _____

8) $2.1 + 3.3 =$



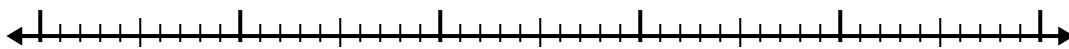
8. _____

9) $1 + 1.7 =$



9. _____

10) $3 + 3.1 =$

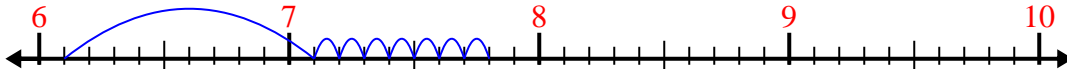


10. _____

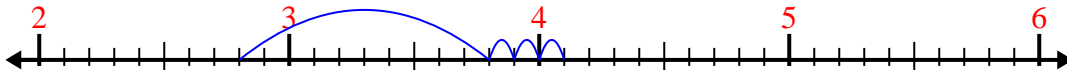


Verwenden Sie den Zahlenstrahl, um jedes Problem zu lösen.

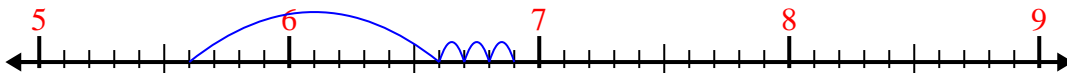
1) $6.1 + 1.7 =$



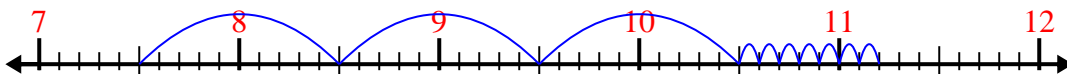
2) $2.8 + 1.3 =$



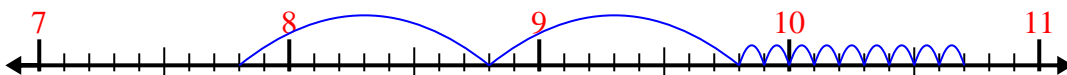
3) $5.6 + 1.3 =$



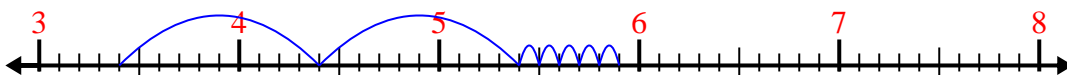
4) $7.5 + 3.7 =$



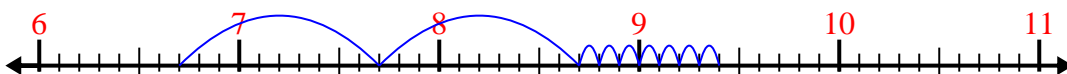
5) $7.8 + 2.9 =$




6) $3.4 + 2.5 =$



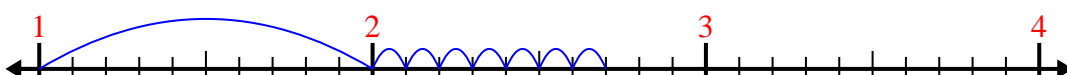
7) $6.7 + 2.7 =$



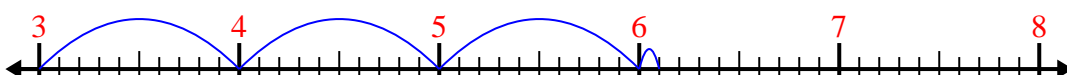
8) $2.1 + 3.3 =$



9) $1 + 1.7 =$



10) $3 + 3.1 =$



Antworten

1. 7,8

2. 4,1

3. 6,9

4. 11,2

5. 10,7

6. 5,9

7. 9,4

8. 5,4

9. 2,7

10. 6,1