


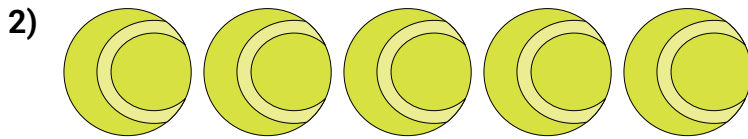


Bestimme die Anzahl der Zehnergruppe. Dann ermittle die ganze Anzahl der kleinen Blocks.

**Antworten**

1. \_\_\_\_\_

2. \_\_\_\_\_



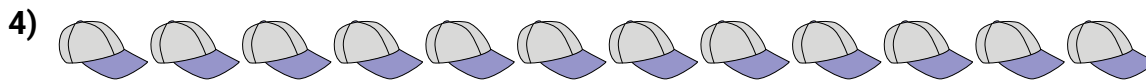
3. \_\_\_\_\_

4. \_\_\_\_\_



5. \_\_\_\_\_

6. \_\_\_\_\_

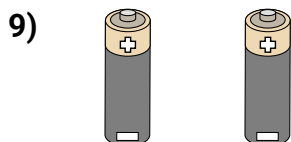


7. \_\_\_\_\_

8. \_\_\_\_\_

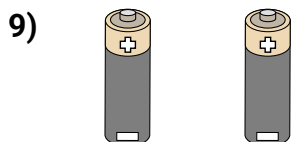
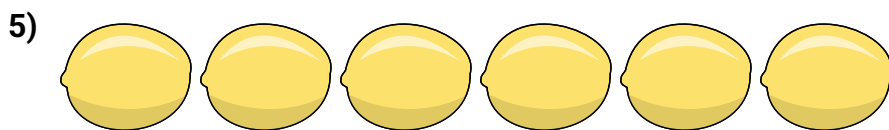
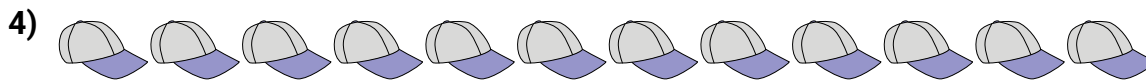
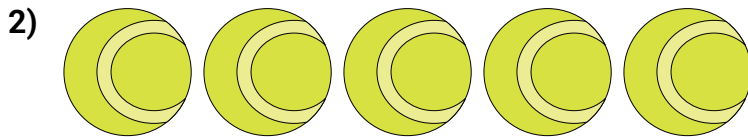



9. \_\_\_\_\_





Bestimme die Anzahl der Zehnergruppe. Dann ermittle die ganze Anzahl der kleinen Blocks.

**Antworten**

1. 11
2. 5
3. 6
4. 12
5. 6
6. 5
7. 17
8. 6
9. 2