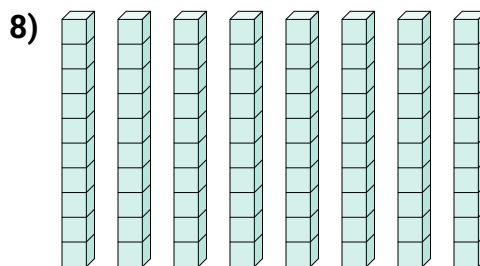
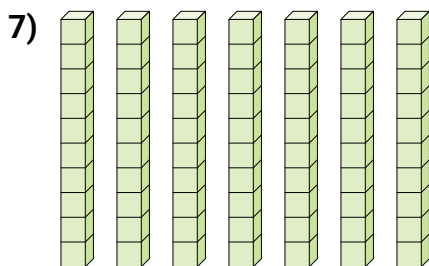
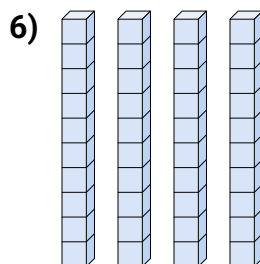
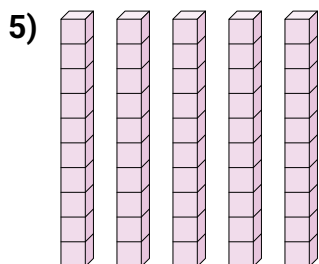
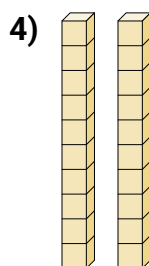
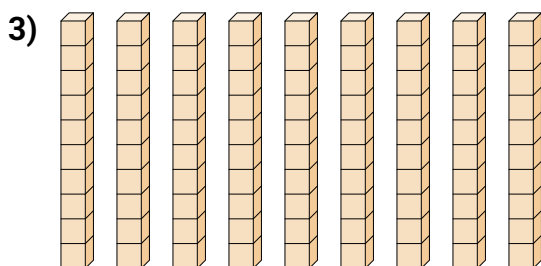
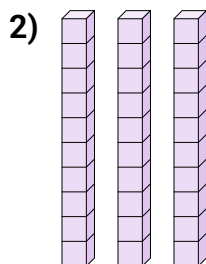
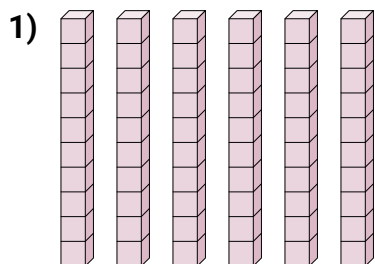




Bestimme die Anzahl der Zehnergruppe. Dann ermittle die ganze Anzahl der kleinen Blocks.

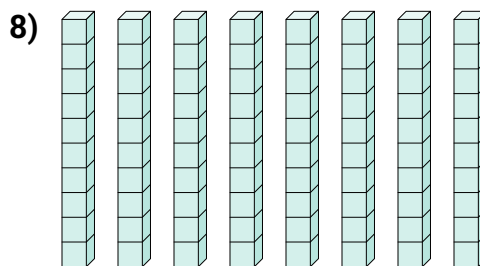
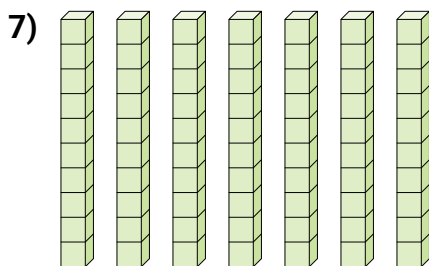
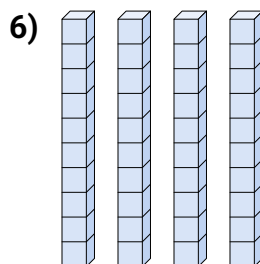
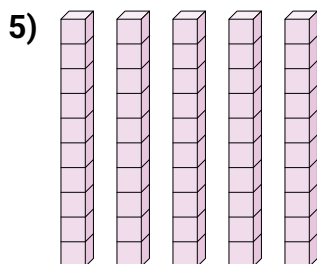
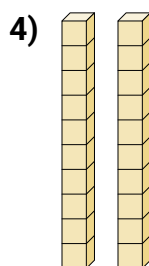
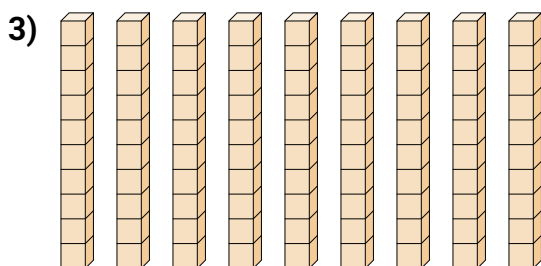
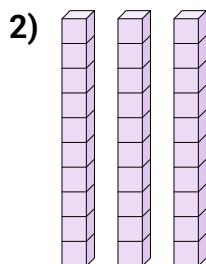
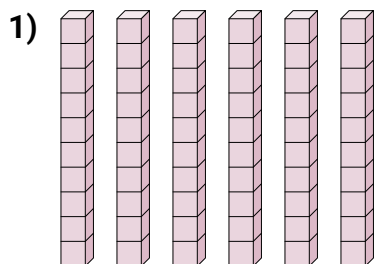
Antworten



1. _____
2. _____
3. _____
4. _____
5. _____
6. _____
7. _____
8. _____



Bestimme die Anzahl der Zehnergruppe. Dann ermittle die ganze Anzahl der kleinen Blocks.

**Antworten**

- | | | |
|----|----------|-----------|
| 1. | <u>6</u> | <u>60</u> |
| 2. | <u>3</u> | <u>30</u> |
| 3. | <u>9</u> | <u>90</u> |
| 4. | <u>2</u> | <u>20</u> |
| 5. | <u>5</u> | <u>50</u> |
| 6. | <u>4</u> | <u>40</u> |
| 7. | <u>7</u> | <u>70</u> |
| 8. | <u>8</u> | <u>80</u> |