




Stelle fest, welcher Buchstabe das Volumen am besten darstellt.

Antworten

Milliliter

Un mililitro equivale a unas 20 gotas de agua.



Liter


Muchas botellas grandes de refrescos tienen 1 o 2 litros.

1 Liter = 1,000 Milliliters



1. _____
2. _____
3. _____
4. _____
5. _____
6. _____
7. _____
8. _____
9. _____

1)



Liquid in a pitcher

- A. 5 liter
- B. 20 milliliters
- C. 1 liter
- D. 500 milliliters

2)



Flour in a pan of brownies

- A. 3 liter
- B. 0.5 liter
- C. 10 milliliters
- D. 16 liter


3)



Liquid in a tea cup

- A. 2 milliliters
- B. 2 liter
- C. 250 milliliters
- D. 5 liter


4)



Eyedropper holds

- A. 1000 milliliters
- B. 2 liter
- C. 500 milliliters
- D. 2 milliliters

5)



Sand a wheel barrow holds

- A. 50 milliliters
- B. 500 milliliters
- C. 3 liter
- D. 170 liter


6)



Measuring Cup

- A. 1 liter
- B. 237 liter
- C. 50 milliliters
- D. 237 milliliters

7)



Shampoo in a bottle

- A. 1 milliliter
- B. 20 milliliters
- C. 1.5 liter
- D. 20 liter

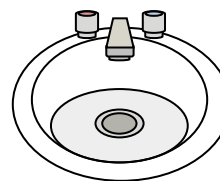
8)



Gas tank in a car

- A. 60 liter
- B. 15 milliliters
- C. 70 milliliters
- D. 3 liter

9)



Water in bathroom sink

- A. 10 milliliters
- B. 2 liter
- C. 500 milliliters
- D. 7.5 liter



Stelle fest, welcher Buchstabe das Volumen am besten darstellt.

Antworten**Milliliter**

Un mililitro equivale a unas 20 gotas de agua.

**Liter**

Muchas botellas grandes de refrescos tienen 1 o 2 litros.

1 Liter = 1,000 Milliliters



1)



Liquid in a pitcher

- A. 5 liter
- B. 20 milliliters
- C. 1 liter
- D. 500 milliliters

2)



Flour in a pan of brownies

- A. 3 liter
- B. 0.5 liter
- C. 10 milliliters
- D. 16 liter

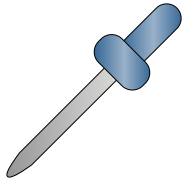
3)



Liquid in a tea cup

- A. 2 milliliters
- B. 2 liter
- C. 250 milliliters
- D. 5 liter


4)



Eyedropper holds

- A. 1000 milliliters
- B. 2 liter
- C. 500 milliliters
- D. 2 milliliters


5)



Sand a wheel barrow holds

- A. 50 milliliters
- B. 500 milliliters
- C. 3 liter
- D. 170 liter

6)



Measuring Cup

- A. 1 liter
- B. 237 liter
- C. 50 milliliters
- D. 237 milliliters


7)



Shampoo in a bottle

- A. 1 milliliter
- B. 20 milliliters
- C. 1.5 liter
- D. 20 liter

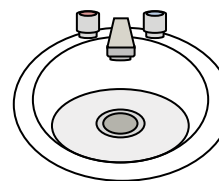
8)



Gas tank in a car

- A. 60 liter
- B. 15 milliliters
- C. 70 milliliters
- D. 3 liter

9)



Water in bathroom sink

- A. 10 milliliters
- B. 2 liter
- C. 500 milliliters
- D. 7.5 liter

1. **A**
2. **B**
3. **C**
4. **D**
5. **D**
6. **D**
7. **C**
8. **A**
9. **D**