



Stelle fest, welcher Buchstabe das Volumen am besten darstellt.

Antworten

Milliliter

Un mililitro equivale a unas 20 gotas de agua.



Liter

Muchas botellas grandes de refrescos tienen 1 o 2 litros.

1 Liter = 1,000 Milliliters



1. _____
2. _____
3. _____
4. _____
5. _____
6. _____
7. _____
8. _____
9. _____

1)



Soda in a can

- A. 350 liter
- B. 2 milliliters
- C. 350 milliliters
- D. 2 liter


2)



Flour in a pan of brownies

- A. 10 milliliters
- B. 0.5 liter
- C. 3 liter
- D. 16 liter


3)



Sand a wheel barrow holds

- A. 500 milliliters
- B. 3 liter
- C. 170 liter
- D. 50 milliliters

4)



Gas tank in a car

- A. 3 liter
- B. 70 milliliters
- C. 60 liter
- D. 15 milliliters

5)



Sand in a pail

- A. 20 liter
- B. 1 milliliter
- C. 4 liter
- D. 4 milliliters

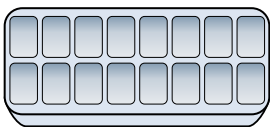
6)



Glue in a bottle

- A. 120 milliliters
- B. 3 milliliters
- C. 5 liter
- D. 2 liter

7)



Water in an ice tray

- A. 2 milliliters
- B. 0.5 liter
- C. 50 milliliters
- D. 2 liter

8)



Measuring Cup

- A. 237 milliliters
- B. 237 liter
- C. 50 milliliters
- D. 1 liter

9)



Shampoo in a bottle

- A. 1 milliliter
- B. 1.5 liter
- C. 20 liter
- D. 20 milliliters



Stelle fest, welcher Buchstabe das Volumen am besten darstellt.


Antworten

Milliliter


Un mililitro equivale a unas 20 gotas de agua.

Muchas botellas grandes de refrescos tienen 1 o 2 litros.

1 Liter = 1,000 Milliliters



1)



Soda in a can

- A. 350 liter
- B. 2 milliliters
- C. 350 milliliters
- D. 2 liter


2)



Flour in a pan of brownies

- A. 10 milliliters
- B. 0.5 liter
- C. 3 liter
- D. 16 liter


3)



Sand a wheel barrow holds

- A. 500 milliliters
- B. 3 liter
- C. 170 liter
- D. 50 milliliters

4)



Gas tank in a car

- A. 3 liter
- B. 70 milliliters
- C. 60 liter
- D. 15 milliliters

5)



Sand in a pail

- A. 20 liter
- B. 1 milliliter
- C. 4 liter
- D. 4 milliliters


6)



Glue in a bottle

- A. 120 milliliters
- B. 3 milliliters
- C. 5 liter
- D. 2 liter

7)



Water in an ice tray

- A. 2 milliliters
- B. 0.5 liter
- C. 50 milliliters
- D. 2 liter

8)



Measuring Cup

- A. 237 milliliters
- B. 237 liter
- C. 50 milliliters
- D. 1 liter

9)



Shampoo in a bottle

- A. 1 milliliter
- B. 1.5 liter
- C. 20 liter
- D. 20 milliliters

- 1. **C**
- 2. **B**
- 3. **C**
- 4. **C**
- 5. **C**
- 6. **A**
- 7. **B**
- 8. **A**
- 9. **B**