



Stelle fest, welcher Buchstabe das Volumen am besten darstellt.

Antworten

**Milliliter**

Un mililitro equivale a unas 20 gotas de agua.



**Liter**

Muchas botellas grandes de refrescos tienen 1 o 2 litros.

1 Liter = 1,000 Milliliters



- 1. \_\_\_\_\_
- 2. \_\_\_\_\_
- 3. \_\_\_\_\_
- 4. \_\_\_\_\_
- 5. \_\_\_\_\_
- 6. \_\_\_\_\_
- 7. \_\_\_\_\_
- 8. \_\_\_\_\_
- 9. \_\_\_\_\_

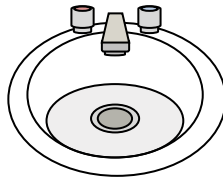
1)



Glue in a bottle

- A. 5 liter
- B. 120 milliliters
- C. 2 liter
- D. 3 milliliters

2)



Water in bathroom sink

- A. 10 milliliters
- B. 7.5 liter
- C. 500 milliliters
- D. 2 liter


3)



Shampoo in a bottle

- A. 20 liter
- B. 1 milliliter
- C. 1.5 liter
- D. 20 milliliters

4)



Ice Chest

- A. 20 milliliters
- B. 100 milliliters
- C. 200 milliliters
- D. 100 liter


5)



Liquid in a tea cup

- A. 250 milliliters
- B. 2 liter
- C. 2 milliliters
- D. 5 liter


6)



Eyedropper holds

- A. 1000 milliliters
- B. 2 milliliters
- C. 500 milliliters
- D. 2 liter

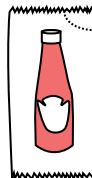
7)



Sand a wheel barrow holds

- A. 50 milliliters
- B. 3 liter
- C. 170 liter
- D. 500 milliliters


8)



Ketchup in a packet

- A. 500 milliliters
- B. 1 milliliter
- C. 1 liter
- D. 50 milliliters

9)



Gas tank in a car

- A. 60 liter
- B. 70 milliliters
- C. 15 milliliters
- D. 3 liter



Stelle fest, welcher Buchstabe das Volumen am besten darstellt.

Antworten

**Milliliter**

Un mililitro equivale a unas 20 gotas de agua.

Muchas botellas grandes de refrescos tienen 1 o 2 litros.

1 Liter = 1,000 Milliliters



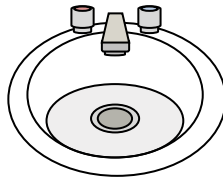
1)



Glue in a bottle

- A. 5 liter
- B. 120 milliliters
- C. 2 liter
- D. 3 milliliters

2)



Water in bathroom sink

- A. 10 milliliters
- B. 7.5 liter
- C. 500 milliliters
- D. 2 liter


3)



Shampoo in a bottle

- A. 20 liter
- B. 1 milliliter
- C. 1.5 liter
- D. 20 milliliters

4)



Ice Chest

- A. 20 milliliters
- B. 100 milliliters
- C. 200 milliliters
- D. 100 liter


5)



Liquid in a tea cup

- A. 250 milliliters
- B. 2 liter
- C. 2 milliliters
- D. 5 liter


6)



Eyedropper holds

- A. 1000 milliliters
- B. 2 milliliters
- C. 500 milliliters
- D. 2 liter

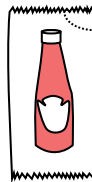
7)



Sand a wheel barrow holds

- A. 50 milliliters
- B. 3 liter
- C. 170 liter
- D. 500 milliliters


8)



Ketchup in a packet

- A. 500 milliliters
- B. 1 milliliter
- C. 1 liter
- D. 50 milliliters

9)



Gas tank in a car

- A. 60 liter
- B. 70 milliliters
- C. 15 milliliters
- D. 3 liter

- 1.   **B**
- 2.   **B**
- 3.   **C**
- 4.   **D**
- 5.   **A**
- 6.   **B**
- 7.   **C**
- 8.   **B**
- 9.   **A**