



Stelle fest, welcher Buchstabe das Volumen am besten darstellt.

Antworten

Milliliter

Un mililitro equivale a unas 20 gotas de agua.

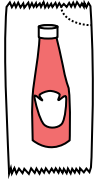
Muchas botellas grandes de refrescos tienen 1 o 2 litros.

1 Liter = 1,000 Milliliters



- 1. _____
- 2. _____
- 3. _____
- 4. _____
- 5. _____
- 6. _____
- 7. _____
- 8. _____
- 9. _____

1)



Ketchup in a packet

- A. 500 milliliters
- B. 1 liter
- C. 1 milliliter
- D. 50 milliliters


2)



Liquid a spoon holds

- A. 5 liter
- B. 500 milliliters
- C. 5 milliliters
- D. 1 liter

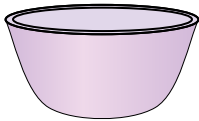
3)



Liquid in a pitcher

- A. 1 liter
- B. 5 liter
- C. 20 milliliters
- D. 500 milliliters

4)



Cereal Bowl

- A. 1 milliliter
- B. 50 milliliters
- C. 475 milliliters
- D. 2 liter

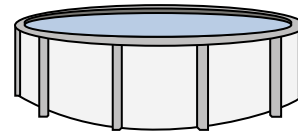
5)



Measuring Cup

- A. 237 liter
- B. 50 milliliters
- C. 237 milliliters
- D. 1 liter


6)



Water in a pool

- A. 12000 milliliters
- B. 12000 liter
- C. 800 liter
- D. 800 milliliters

7)



Paint in a can

- A. 400 milliliters
- B. 20 milliliters
- C. 3.75 liter
- D. 1 liter

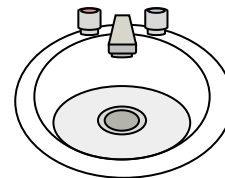
8)



Shampoo in a bottle

- A. 1 milliliter
- B. 1.5 liter
- C. 20 milliliters
- D. 20 liter

9)



Water in bathroom sink

- A. 10 milliliters
- B. 2 liter
- C. 500 milliliters
- D. 7.5 liter



Stelle fest, welcher Buchstabe das Volumen am besten darstellt.

Antworten

Milliliter

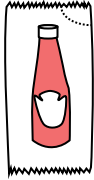
Un mililitro equivale a unas 20 gotas de agua.

Muchas botellas grandes de refrescos tienen 1 o 2 litros.

1 Liter = 1,000 Milliliters



1)



Ketchup in a packet

- A. 500 milliliters
- B. 1 liter
- C. 1 milliliter
- D. 50 milliliters


2)



Liquid a spoon holds

- A. 5 liter
- B. 500 milliliters
- C. 5 milliliters
- D. 1 liter

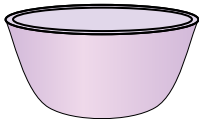
3)



Liquid in a pitcher

- A. 1 liter
- B. 5 liter
- C. 20 milliliters
- D. 500 milliliters


4)



Cereal Bowl

- A. 1 milliliter
- B. 50 milliliters
- C. 475 milliliters
- D. 2 liter

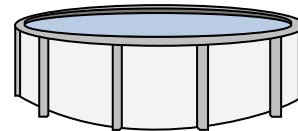
5)



Measuring Cup

- A. 237 liter
- B. 50 milliliters
- C. 237 milliliters
- D. 1 liter


6)



Water in a pool

- A. 12000 milliliters
- B. 12000 liter
- C. 800 liter
- D. 800 milliliters

7)



Paint in a can

- A. 400 milliliters
- B. 20 milliliters
- C. 3.75 liter
- D. 1 liter

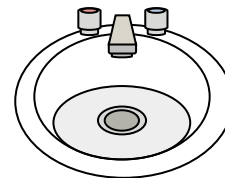
8)



Shampoo in a bottle

- A. 1 milliliter
- B. 1.5 liter
- C. 20 milliliters
- D. 20 liter

9)



Water in bathroom sink

- A. 10 milliliters
- B. 2 liter
- C. 500 milliliters
- D. 7.5 liter

- 1. **C**
- 2. **C**
- 3. **B**
- 4. **C**
- 5. **C**
- 6. **B**
- 7. **C**
- 8. **B**
- 9. **D**