



Stelle fest, welcher Buchstabe das Volumen am besten darstellt.

Antworten

Xícara

Una taza se refiere a la cantidad de leche que se obtiene de la cafetería.



Pinta

Uma pinta é aproximadamente a quantidade que você recebe em um copo grande.
1 pinta = 2 xícaras



Quarto

Um quarto é mais ou menos a quantidade que você consegue em um recipiente grande de leite.
1 cuarto = 2 pintas

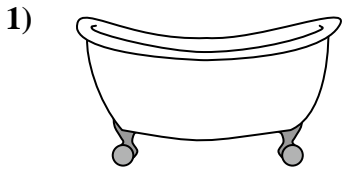


Galón

Un galón es la cantidad que viene en un recipiente de plástico grande.
1 galón = 4 cuartos




1. _____
2. _____
3. _____
4. _____
5. _____
6. _____
7. _____
8. _____
9. _____



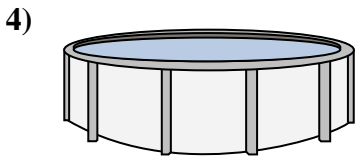
- Bathtub
A. 40 Tassen
B. 20 pints
C. 45 gallonen
D. 8 quarts



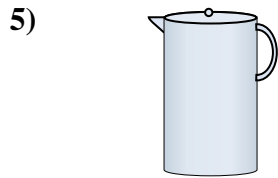
- Sand in a pail
A. 32 gallonen
B. 1 gallon
C. 1 Tasse
D. 7 fluid ounces



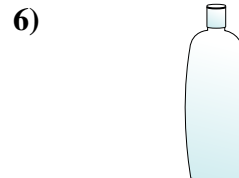
- Eyedropper holds
A. 3 gallonen
B. 1 Tasse
C. weniger als 1 Tasse
D. 1 pint



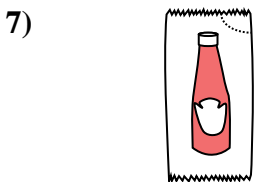
- Water in a pool
A. 5000 feet
B. 25 Tassen
C. 20 gallonen
D. 3000 gallonen



- Liquid in a pitcher
A. 1 pint
B. 8 gallonen
C. 2 Tassen
D. 2 quarts



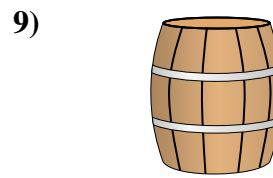
- Shampoo in a bottle
A. 0.5 gallonen
B. 100 Tassen
C. 1 Tasse
D. 2 pints



- Ketchup in a packet
A. 0.5 gallonen
B. 1.5 pints
C. weniger als 1 Tasse
D. 2 quarts



- Water for a house plant
A. 6 quarts
B. 4 amerikanische Pfund
C. 2 Tassen
D. 3 gallonen



- Water a barrel holds
A. 3 inches
B. 10 pints
C. 20 Tassen
D. 50 gallonen



Stelle fest, welcher Buchstabe das Volumen am besten darstellt.

Antworten

Xícara

Una taza se refiere a la cantidad de leche que se obtiene de la cafetería.



Pinta

Uma pinta é aproximadamente a quantidade que você recebe em um copo grande.
1 pinta = 2 xícaras



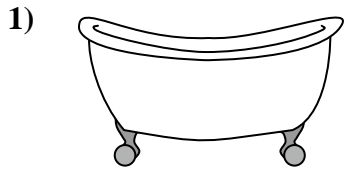
Quarto

Um quarto é mais ou menos a quantidade que você consegue em um recipiente grande de leite.
1 cuarto = 2 pintas




Galón


Un galón es la cantidad que viene en un recipiente de plástico grande.
1 galón = 4 cuartos



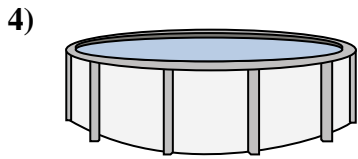
- Bathtub
A. 40 Tassen
B. 20 pints
C. 45 gallonen
D. 8 quarts



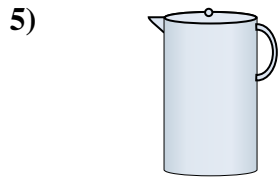
- Sand in a pail
A. 32 gallonen
B. 1 gallon
C. 1 Tasse
D. 7 fluid ounces



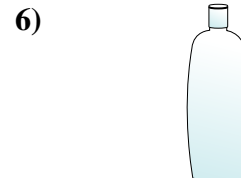
- Eyedropper holds
A. 3 gallonen
B. 1 Tasse
C. weniger als 1 Tasse
D. 1 pint




- Water in a pool
A. 5000 feet
B. 25 Tassen
C. 20 gallonen
D. 3000 gallonen



- Liquid in a pitcher
A. 1 pint
B. 8 gallonen
C. 2 Tassen
D. 2 quarts



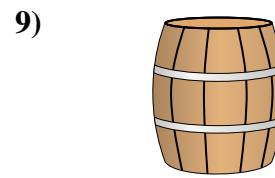
- Shampoo in a bottle
A. 0.5 gallonen
B. 100 Tassen
C. 1 Tasse
D. 2 pints



- Ketchup in a packet
A. 0.5 gallonen
B. 1.5 pints
C. weniger als 1 Tasse
D. 2 quarts



- Water for a house plant
A. 6 quarts
B. 4 amerikanische Pfund
C. 2 Tassen
D. 3 gallonen



- Water a barrel holds
A. 3 inches
B. 10 pints
C. 20 Tassen
D. 50 gallonen

1. **C**
2. **B**
3. **C**
4. **D**
5. **D**
6. **D**
7. **C**
8. **C**
9. **D**