



**Stelle fest, welcher Buchstabe das Volumen am besten darstellt.**

**Antworten**

**Xícara**

Una taza se refiere a la cantidad de leche que se obtiene de la cafetería.

**Pinta**

Uma pinta é aproximadamente a quantidade que você recebe em um copo grande.  
1 pinta = 2 xícaras

**Quarto**

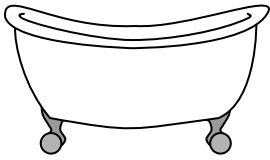
Um quarto é mais ou menos a quantidade que você consegue em um recipiente grande de leite.  
1 cuarto = 2 pintas

**Galón**

Un galón es la cantidad que viene en un recipiente de plástico grande.  
1 galón = 4 cuartos




1)



Bathtub

- A. 40 Tassen
- B. 8 quarts
- C. 20 pints
- D. 45 gallonen


2)



Eyedropper holds

- A. 1 pint
- B. 3 gallonen
- C. weniger als 1 Tasse
- D. 1 Tasse

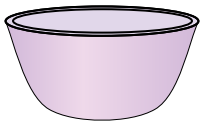
3)



Liquid in a pitcher

- A. 2 Tassen
- B. 1 pint
- C. 2 quarts
- D. 8 gallonen

4)



Cereal Bowl

- A. 0.5 gallonen
- B. 4 pints
- C. 2 gallonen
- D. 1 pint


5)



Liquid a spoon holds

- A. Less than a cup
- B. 1 Tasse
- C. 1 pint
- D. 1 quart

6)



Paint in a can

- A. 3 fluid ounces
- B. 1 gallone
- C. 1 Tasse
- D. 0.5 pints


7)



2 liter of Soda

- A. 0.5 gallonen
- B. 5 gallonen
- C. 1 pint
- D. 2 Tassen


8)



Soda in a can

- A. 4 Tassen
- B. 1.5 Tassen
- C. 4 pints
- D. 1 gallone

9)



Ice Chest

- A. 100 quarts
- B. 16 Tassen
- C. 5 gallonen
- D. 2 quarts

- 1. \_\_\_\_\_
- 2. \_\_\_\_\_
- 3. \_\_\_\_\_
- 4. \_\_\_\_\_
- 5. \_\_\_\_\_
- 6. \_\_\_\_\_
- 7. \_\_\_\_\_
- 8. \_\_\_\_\_
- 9. \_\_\_\_\_



Stelle fest, welcher Buchstabe das Volumen am besten darstellt.

Antworten

**Xícara**

Una taza se refiere a la cantidad de leche que se obtiene de la cafetería.



**Pinta**

Uma pinta é aproximadamente a quantidade que você recebe em um copo grande.  
1 pinta = 2 xícaras



**Quarto**

Um quarto é mais ou menos a quantidade que você consegue em um recipiente grande de leite.  
1 cuarto = 2 pintas




**Galón**

Un galón es la cantidad que viene en un recipiente de plástico grande.  
1 galón = 4 cuartos



1.     **D**
2.     **C**
3.     **C**
4.     **D**
5.     **A**
6.     **B**
7.     **A**
8.     **B**
9.     **A**


1)



Bathtub

- A. 40 Tassen
- B. 8 quarts
- C. 20 pints
- D. 45 gallonen


2)



Eyedropper holds

- A. 1 pint
- B. 3 gallonen
- C. weniger als 1 Tasse
- D. 1 Tasse

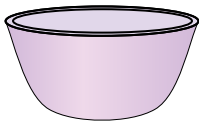
3)



Liquid in a pitcher

- A. 2 Tassen
- B. 1 pint
- C. 2 quarts
- D. 8 gallonen

4)



Cereal Bowl

- A. 0.5 gallonen
- B. 4 pints
- C. 2 gallonen
- D. 1 pint

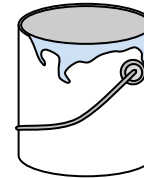
5)



Liquid a spoon holds

- A. Less than a cup
- B. 1 Tasse
- C. 1 pint
- D. 1 quart

6)



Paint in a can

- A. 3 fluid ounces
- B. 1 gallone
- C. 1 Tasse
- D. 0.5 pints

7)



2 liter of Soda

- A. 0.5 gallonen
- B. 5 gallonen
- C. 1 pint
- D. 2 Tassen


8)



Soda in a can

- A. 4 Tassen
- B. 1.5 Tassen
- C. 4 pints
- D. 1 gallone

9)



Ice Chest

- A. 100 quarts
- B. 16 Tassen
- C. 5 gallonen
- D. 2 quarts