

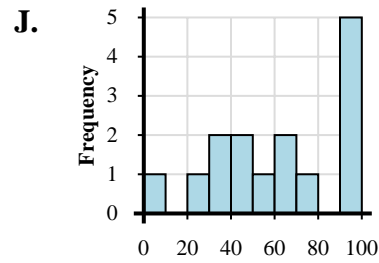
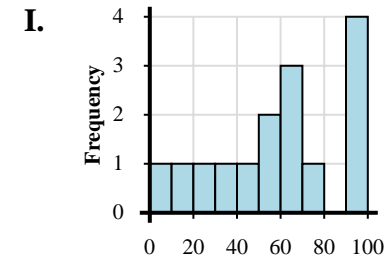
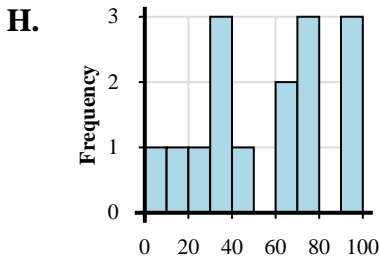
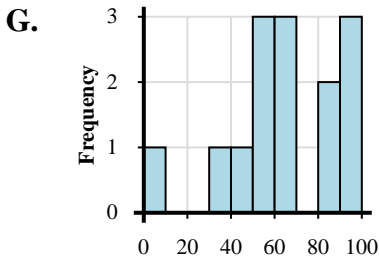
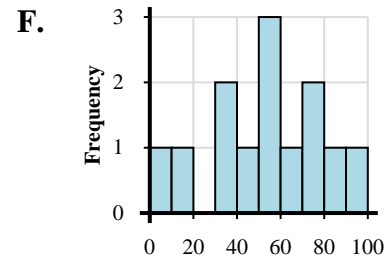
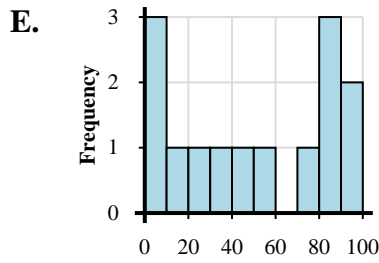
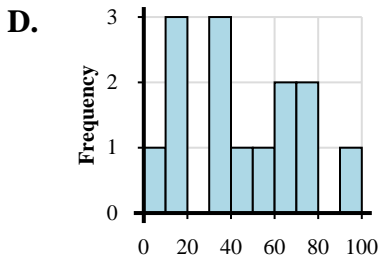
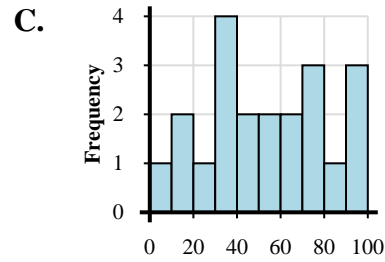
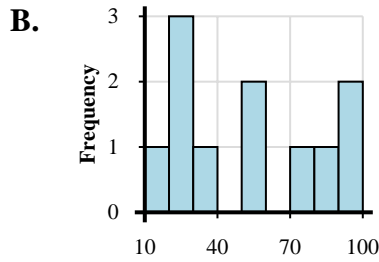
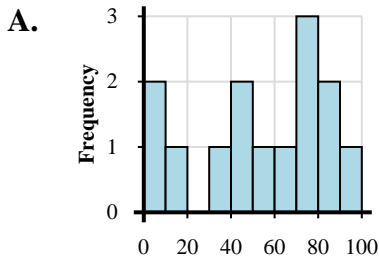


Ordnen Sie jedem Datensatz das zugehörige Histogramm zu.

Antworten

- 1) 4, 10, 17, 35, 26, 35, 38, 36, 50, 40, 45, 50, 63, 78, 73, 64, 73, 96, 96, 83, 92
- 2) 6, 10, 13, 10, 35, 33, 35, 40, 55, 64, 72, 78, 63, 91
- 3) 4, 10, 23, 33, 34, 31, 49, 61, 74, 69, 76, 77, 99, 90, 95
- 4) 19, 1, 8, 33, 41, 58, 40, 77, 70, 74, 63, 97, 82, 82
- 5) 5, 18, 5, 9, 31, 23, 59, 42, 73, 82, 99, 85, 94, 89
- 6) 7, 21, 39, 39, 47, 56, 43, 72, 60, 67, 99, 98, 98, 92, 94
- 7) 14, 20, 27, 31, 29, 58, 54, 78, 80, 95, 93
- 8) 8, 38, 53, 54, 58, 48, 66, 68, 60, 92, 97, 81, 81, 97
- 9) 15, 2, 34, 33, 59, 46, 53, 50, 77, 60, 79, 87, 91
- 10) 1, 11, 21, 37, 40, 54, 53, 73, 61, 62, 63, 91, 92, 91, 99

- 1. _____
- 2. _____
- 3. _____
- 4. _____
- 5. _____
- 6. _____
- 7. _____
- 8. _____
- 9. _____
- 10. _____



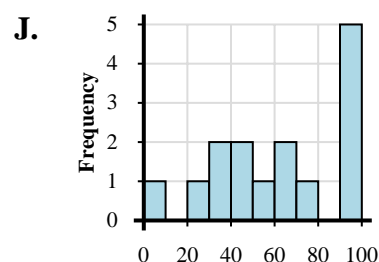
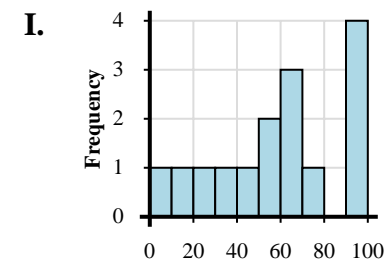
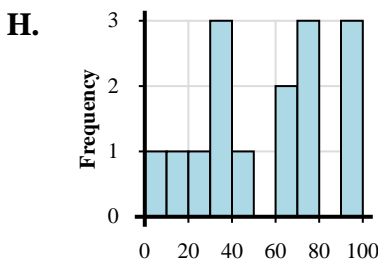
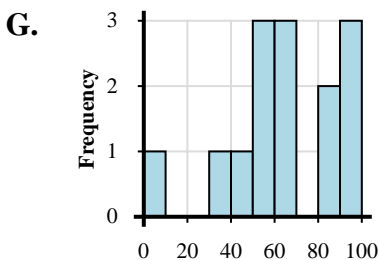
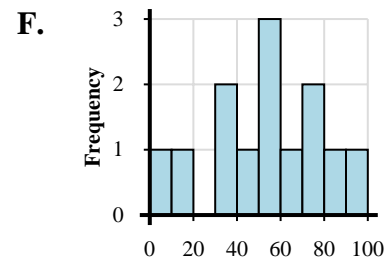
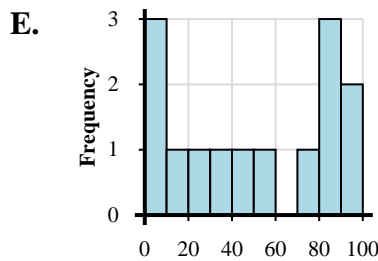
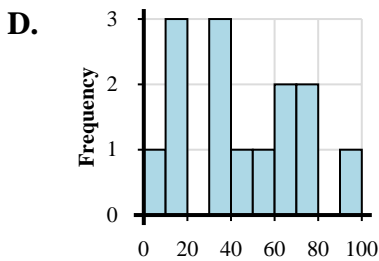
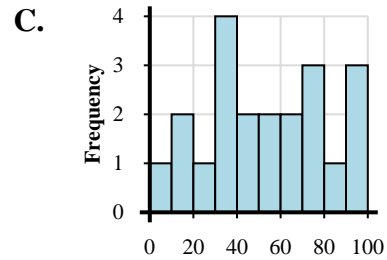
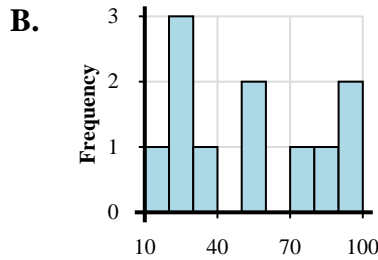
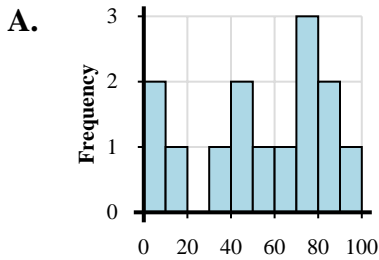


Ordnen Sie jedem Datensatz das zugehörige Histogramm zu.

Antworten

- 1) 4, 10, 17, 35, 26, 35, 38, 36, 50, 40, 45, 50, 63, 78, 73, 64, 73, 96, 96, 83, 92
- 2) 6, 10, 13, 10, 35, 33, 35, 40, 55, 64, 72, 78, 63, 91
- 3) 4, 10, 23, 33, 34, 31, 49, 61, 74, 69, 76, 77, 99, 90, 95
- 4) 19, 1, 8, 33, 41, 58, 40, 77, 70, 74, 63, 97, 82, 82
- 5) 5, 18, 5, 9, 31, 23, 59, 42, 73, 82, 99, 85, 94, 89
- 6) 7, 21, 39, 39, 47, 56, 43, 72, 60, 67, 99, 98, 98, 92, 94
- 7) 14, 20, 27, 31, 29, 58, 54, 78, 80, 95, 93
- 8) 8, 38, 53, 54, 58, 48, 66, 68, 60, 92, 97, 81, 81, 97
- 9) 15, 2, 34, 33, 59, 46, 53, 50, 77, 60, 79, 87, 91
- 10) 1, 11, 21, 37, 40, 54, 53, 73, 61, 62, 63, 91, 92, 91, 99

- 1. C
- 2. D
- 3. H
- 4. A
- 5. E
- 6. J
- 7. B
- 8. G
- 9. F
- 10. I



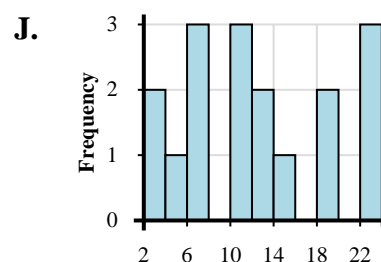
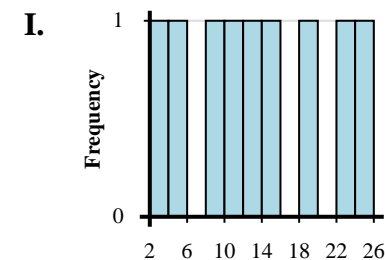
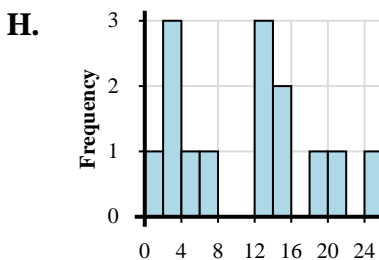
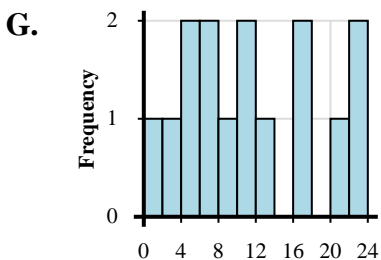
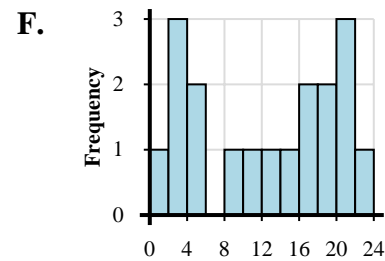
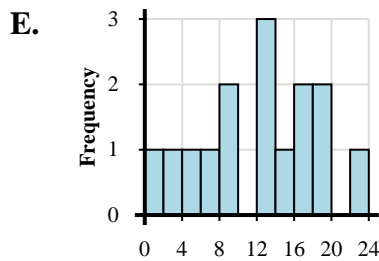
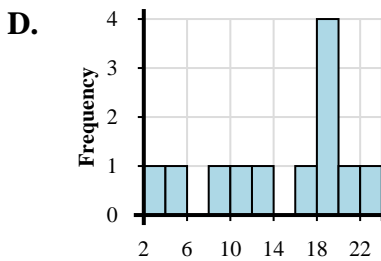
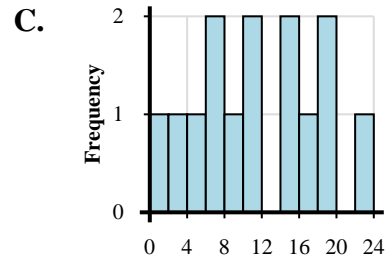
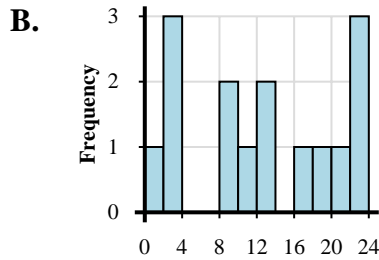
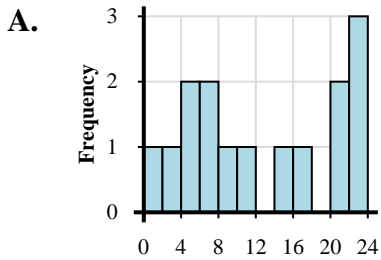


Ordnen Sie jedem Datensatz das zugehörige Histogramm zu.

Antworten

- 1) 3, 1, 6, 6, 5, 8, 5, 11, 14, 17, 23, 22, 21, 22, 21
- 2) 1, 2, 3, 4, 2, 7, 13, 13, 12, 15, 15, 19, 24, 21
- 3) 2, 3, 4, 2, 1, 5, 9, 12, 14, 11, 17, 19, 19, 17, 21, 20, 23, 21
- 4) 2, 4, 8, 10, 12, 15, 19, 24, 22
- 5) 2, 5, 9, 13, 11, 18, 18, 19, 19, 16, 20, 23
- 6) 1, 3, 7, 5, 6, 8, 11, 10, 14, 19, 17, 15, 19, 23
- 7) 3, 4, 2, 6, 7, 7, 12, 11, 12, 10, 10, 15, 19, 18, 23, 23, 23
- 8) 4, 2, 1, 5, 6, 8, 6, 11, 13, 10, 17, 16, 21, 22, 22
- 9) 1, 3, 3, 3, 9, 9, 11, 13, 13, 18, 16, 23, 23, 21, 23
- 10) 4, 2, 1, 9, 7, 9, 14, 13, 12, 12, 16, 19, 16, 19, 22

- 1. _____
- 2. _____
- 3. _____
- 4. _____
- 5. _____
- 6. _____
- 7. _____
- 8. _____
- 9. _____
- 10. _____



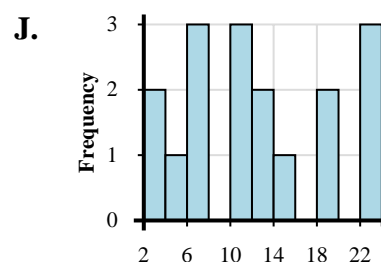
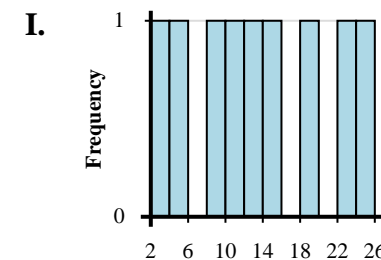
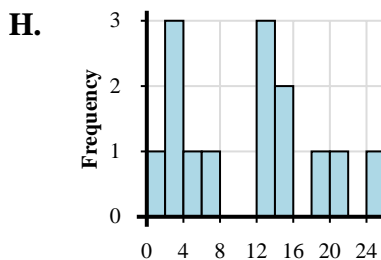
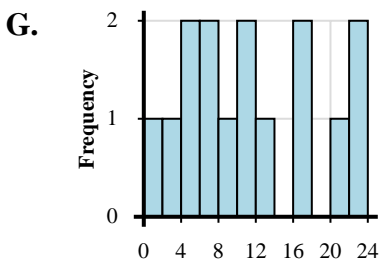
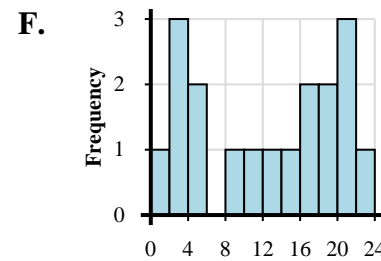
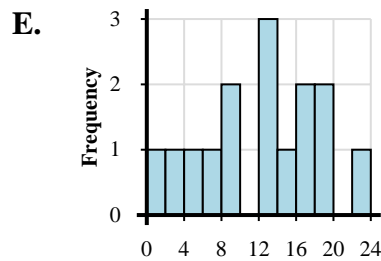
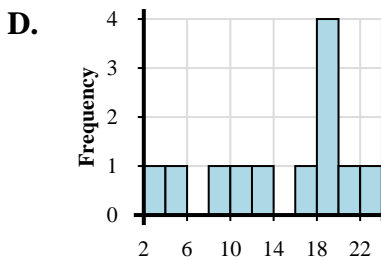
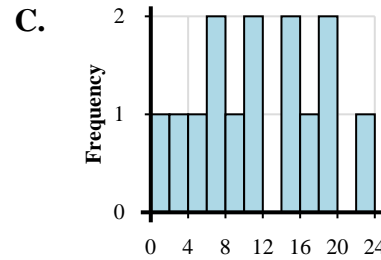
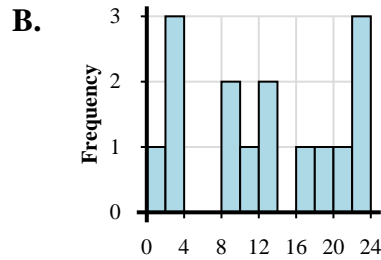
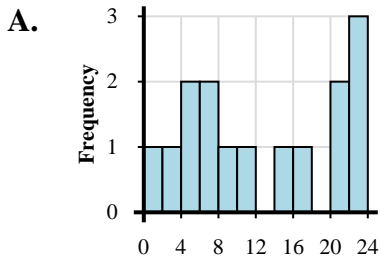


Ordnen Sie jedem Datensatz das zugehörige Histogramm zu.

Antworten

- 1) 3, 1, 6, 6, 5, 8, 5, 11, 14, 17, 23, 22, 21, 22, 21
- 2) 1, 2, 3, 4, 2, 7, 13, 13, 12, 15, 15, 19, 24, 21
- 3) 2, 3, 4, 2, 1, 5, 9, 12, 14, 11, 17, 19, 19, 17, 21, 20, 23, 21
- 4) 2, 4, 8, 10, 12, 15, 19, 24, 22
- 5) 2, 5, 9, 13, 11, 18, 18, 19, 19, 16, 20, 23
- 6) 1, 3, 7, 5, 6, 8, 11, 10, 14, 19, 17, 15, 19, 23
- 7) 3, 4, 2, 6, 7, 7, 12, 11, 12, 10, 10, 15, 19, 18, 23, 23, 23
- 8) 4, 2, 1, 5, 6, 8, 6, 11, 13, 10, 17, 16, 21, 22, 22
- 9) 1, 3, 3, 3, 9, 9, 11, 13, 13, 18, 16, 23, 23, 21, 23
- 10) 4, 2, 1, 9, 7, 9, 14, 13, 12, 12, 16, 19, 16, 19, 22

- 1. **A**
- 2. **H**
- 3. **F**
- 4. **I**
- 5. **D**
- 6. **C**
- 7. **J**
- 8. **G**
- 9. **B**
- 10. **E**



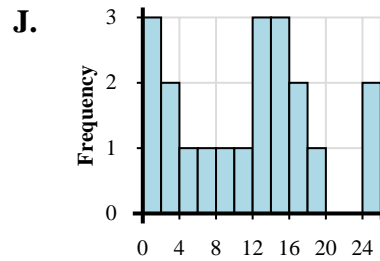
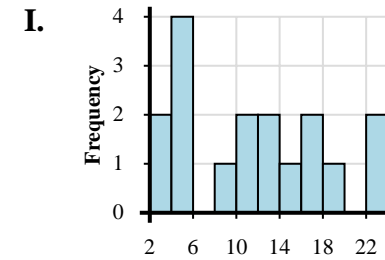
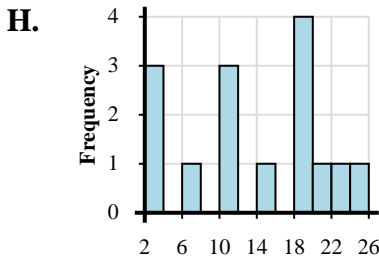
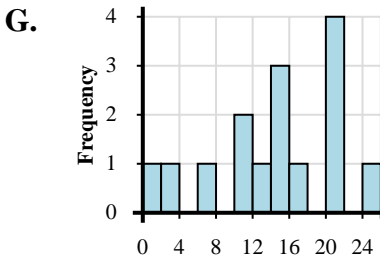
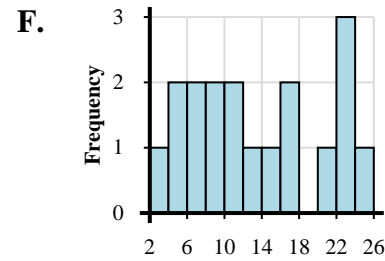
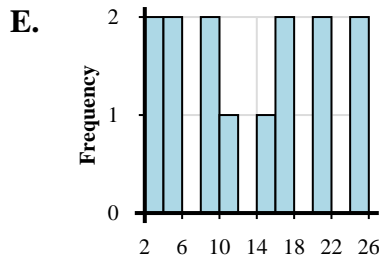
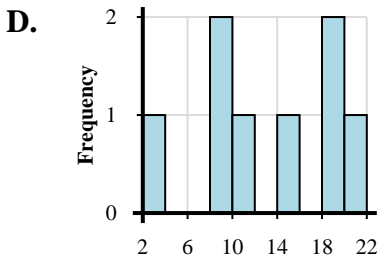
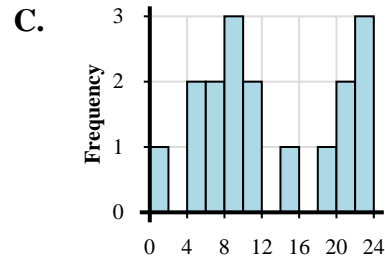
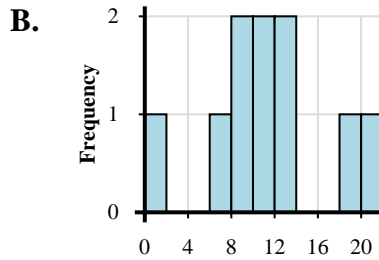
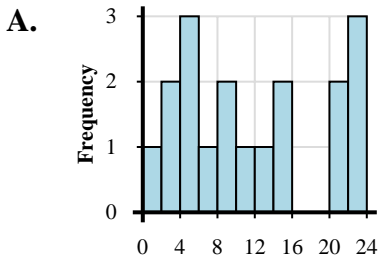


Ordnen Sie jedem Datensatz das zugehörige Histogramm zu.

Antworten

- 1) 3, 9, 8, 11, 18, 19, 15, 21
- 2) 3, 4, 4, 3, 9, 5, 5, 12, 13, 11, 10, 17, 17, 19, 15, 23, 23
- 3) 1, 8, 7, 9, 12, 12, 11, 11, 19, 21
- 4) 1, 3, 4, 4, 2, 6, 8, 5, 9, 14, 12, 10, 15, 23, 20, 22, 21, 22
- 5) 1, 3, 7, 14, 10, 13, 11, 14, 15, 16, 24, 20, 21, 21, 20
- 6) 4, 2, 9, 7, 7, 9, 5, 11, 13, 11, 15, 16, 16, 22, 24, 20, 22, 23
- 7) 3, 2, 3, 6, 10, 10, 10, 19, 18, 19, 18, 15, 23, 24, 20
- 8) 2, 3, 5, 5, 9, 9, 11, 15, 16, 17, 24, 20, 21, 24
- 9) 1, 2, 1, 3, 1, 5, 9, 7, 10, 13, 12, 14, 12, 16, 15, 15, 19, 16, 24, 24
- 10) 1, 4, 4, 7, 6, 9, 8, 9, 14, 10, 10, 18, 22, 20, 23, 20, 22

- 1. _____
- 2. _____
- 3. _____
- 4. _____
- 5. _____
- 6. _____
- 7. _____
- 8. _____
- 9. _____
- 10. _____



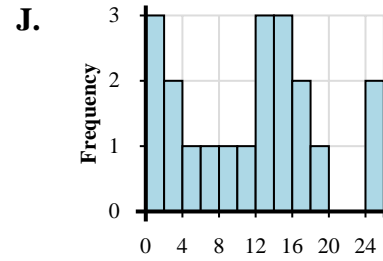
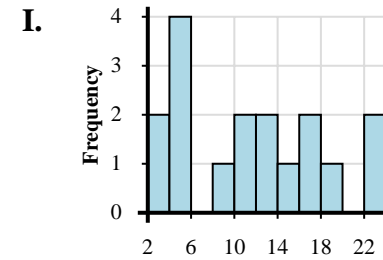
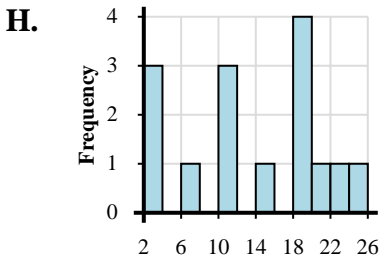
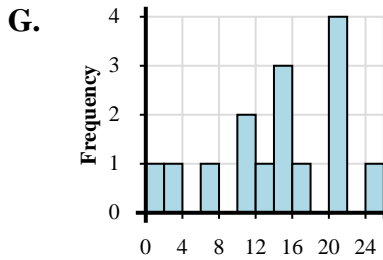
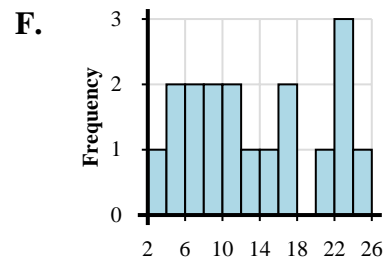
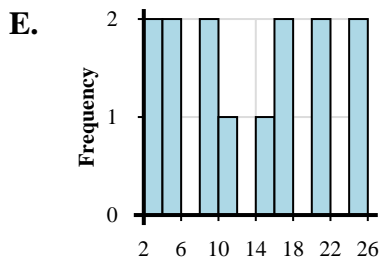
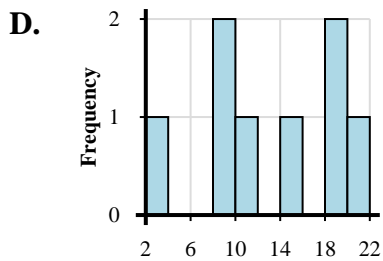
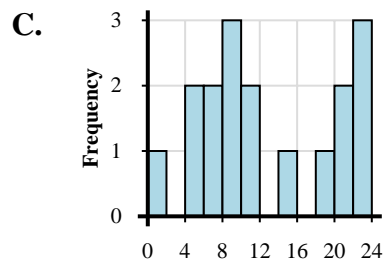
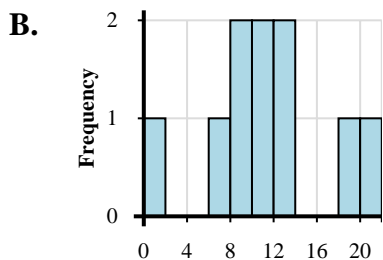
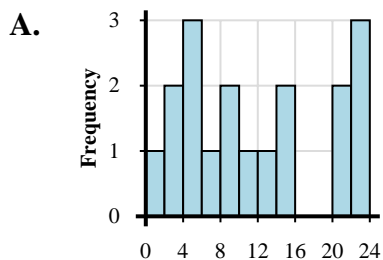


Ordnen Sie jedem Datensatz das zugehörige Histogramm zu.

Antworten

- 1) 3, 9, 8, 11, 18, 19, 15, 21
- 2) 3, 4, 4, 3, 9, 5, 5, 12, 13, 11, 10, 17, 17, 19, 15, 23, 23
- 3) 1, 8, 7, 9, 12, 12, 11, 11, 19, 21
- 4) 1, 3, 4, 4, 2, 6, 8, 5, 9, 14, 12, 10, 15, 23, 20, 22, 21, 22
- 5) 1, 3, 7, 14, 10, 13, 11, 14, 15, 16, 24, 20, 21, 21, 20
- 6) 4, 2, 9, 7, 7, 9, 5, 11, 13, 11, 15, 16, 16, 22, 24, 20, 22, 23
- 7) 3, 2, 3, 6, 10, 10, 10, 19, 18, 19, 18, 15, 23, 24, 20
- 8) 2, 3, 5, 5, 9, 9, 11, 15, 16, 17, 24, 20, 21, 24
- 9) 1, 2, 1, 3, 1, 5, 9, 7, 10, 13, 12, 14, 12, 16, 15, 15, 19, 16, 24, 24
- 10) 1, 4, 4, 7, 6, 9, 8, 9, 14, 10, 10, 18, 22, 20, 23, 20, 22

- 1. **D**
- 2. **I**
- 3. **B**
- 4. **A**
- 5. **G**
- 6. **F**
- 7. **H**
- 8. **E**
- 9. **J**
- 10. **C**



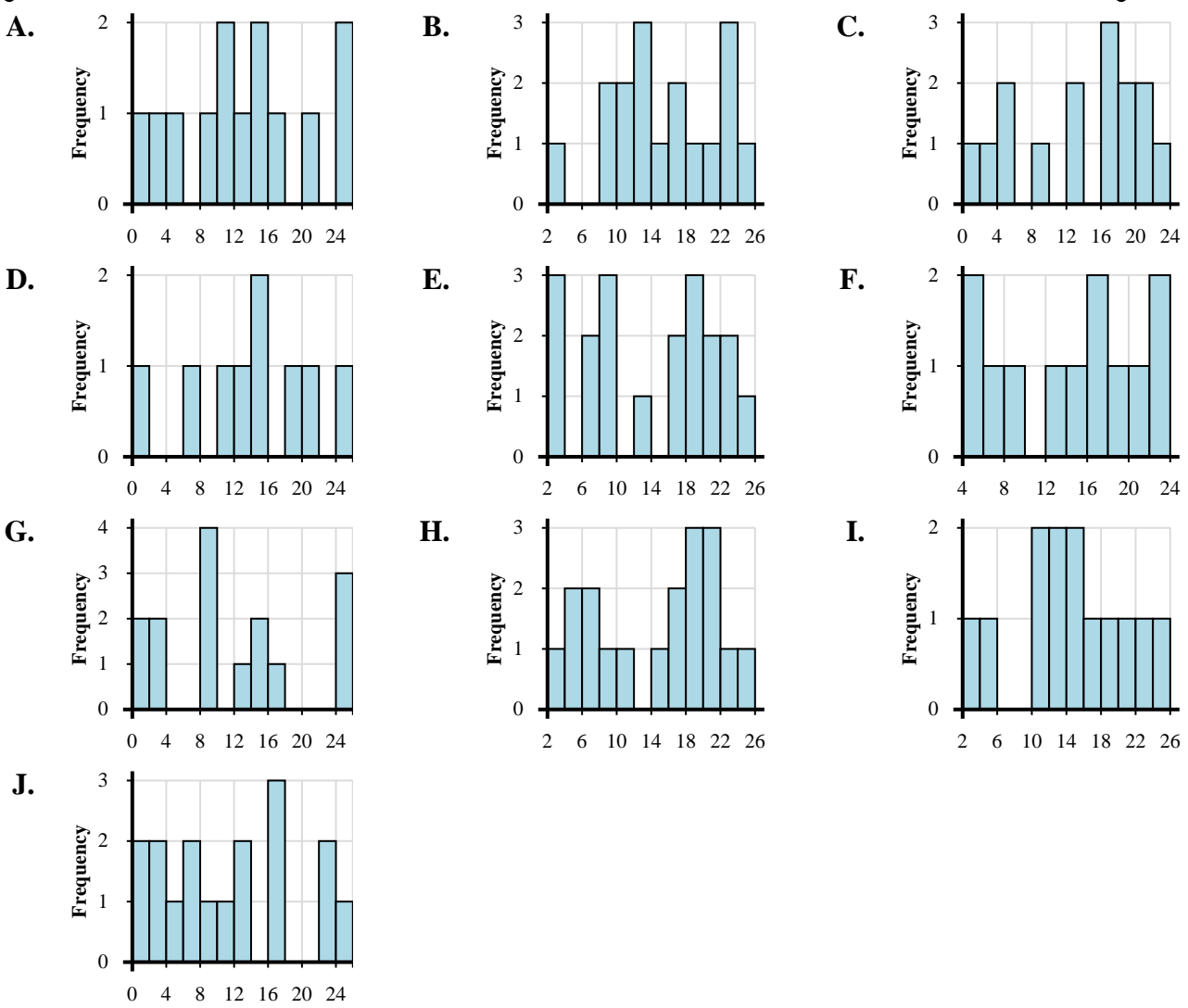


Ordnen Sie jedem Datensatz das zugehörige Histogramm zu.

Antworten

- 1) 1, 4, 3, 9, 5, 12, 13, 17, 16, 19, 17, 19, 20, 23, 21
- 2) 3, 5, 13, 13, 11, 14, 10, 17, 19, 15, 23, 24, 20
- 3) 2, 4, 6, 7, 5, 8, 10, 14, 18, 16, 18, 16, 18, 21, 22, 20, 24, 21
- 4) 4, 4, 8, 6, 13, 16, 17, 18, 15, 20, 22, 22
- 5) 4, 1, 2, 8, 14, 10, 11, 13, 14, 17, 24, 24, 21
- 6) 1, 7, 14, 14, 12, 11, 19, 24, 20
- 7) 1, 1, 3, 3, 8, 9, 8, 9, 8, 9, 13, 14, 17, 15, 24, 24, 24
- 8) 3, 3, 3, 7, 9, 6, 9, 9, 13, 19, 19, 16, 19, 17, 24, 23, 21, 23, 20
- 9) 2, 9, 8, 13, 13, 10, 13, 10, 19, 15, 17, 16, 23, 21, 24, 23, 22
- 10) 1, 2, 3, 1, 8, 7, 5, 6, 11, 12, 13, 17, 16, 17, 22, 22, 24

- 1. _____
- 2. _____
- 3. _____
- 4. _____
- 5. _____
- 6. _____
- 7. _____
- 8. _____
- 9. _____
- 10. _____



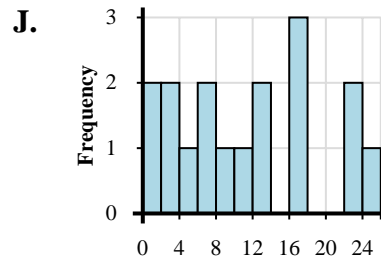
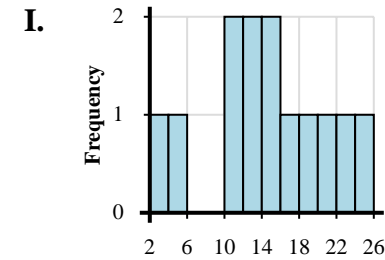
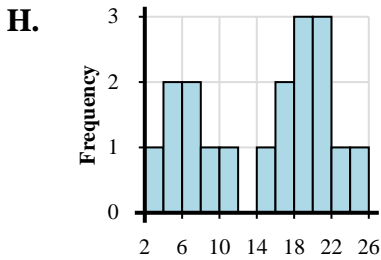
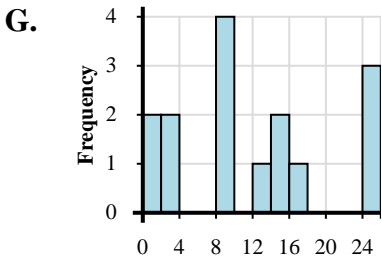
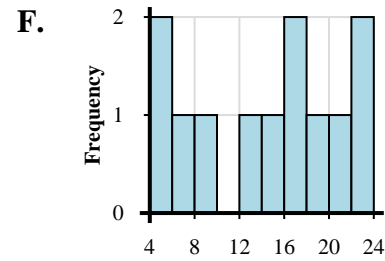
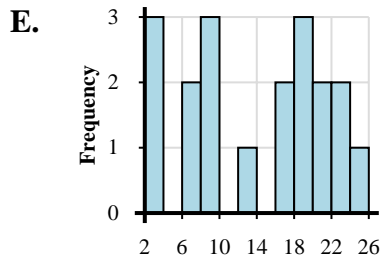
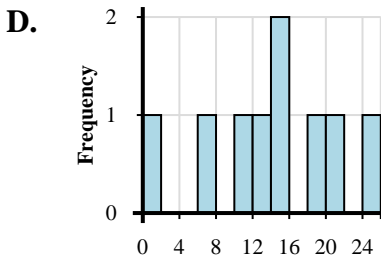
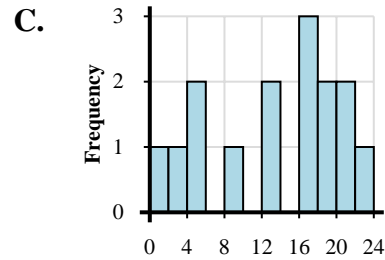
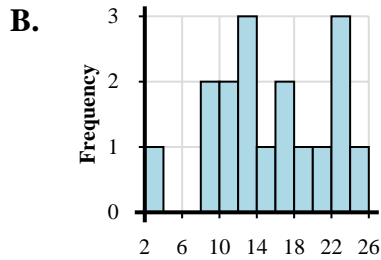
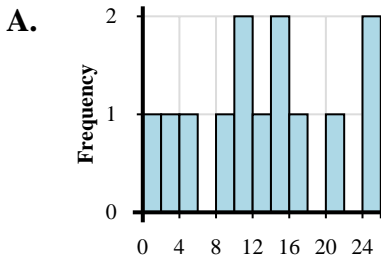


Ordnen Sie jedem Datensatz das zugehörige Histogramm zu.

Antworten

- 1) 1, 4, 3, 9, 5, 12, 13, 17, 16, 19, 17, 19, 20, 23, 21
- 2) 3, 5, 13, 13, 11, 14, 10, 17, 19, 15, 23, 24, 20
- 3) 2, 4, 6, 7, 5, 8, 10, 14, 18, 16, 18, 16, 18, 21, 22, 20, 24, 21
- 4) 4, 4, 8, 6, 13, 16, 17, 18, 15, 20, 22, 22
- 5) 4, 1, 2, 8, 14, 10, 11, 13, 14, 17, 24, 24, 21
- 6) 1, 7, 14, 14, 12, 11, 19, 24, 20
- 7) 1, 1, 3, 3, 8, 9, 8, 9, 8, 9, 13, 14, 17, 15, 24, 24, 24
- 8) 3, 3, 3, 7, 9, 6, 9, 9, 13, 19, 19, 16, 19, 17, 24, 23, 21, 23, 20
- 9) 2, 9, 8, 13, 13, 10, 13, 10, 19, 15, 17, 16, 23, 21, 24, 23, 22
- 10) 1, 2, 3, 1, 8, 7, 5, 6, 11, 12, 13, 17, 16, 17, 22, 22, 24

- 1. **C**
- 2. **I**
- 3. **H**
- 4. **F**
- 5. **A**
- 6. **D**
- 7. **G**
- 8. **E**
- 9. **B**
- 10. **J**



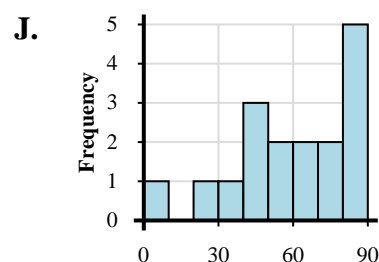
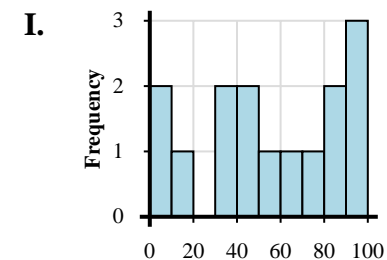
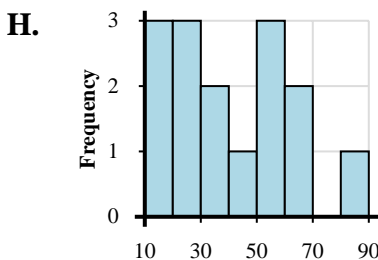
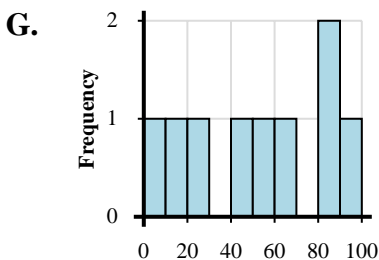
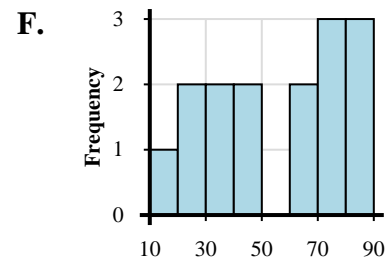
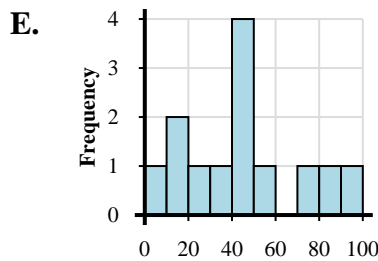
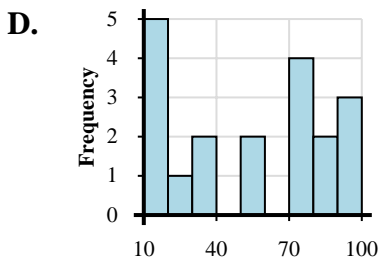
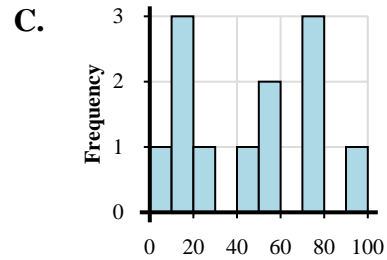
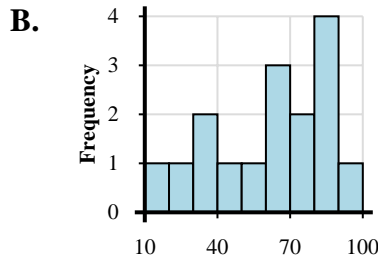
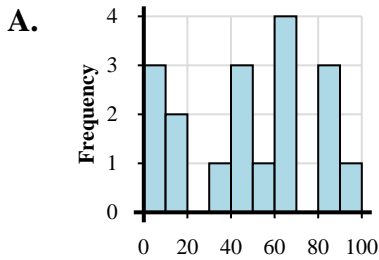


Ordnen Sie jedem Datensatz das zugehörige Histogramm zu.

Antworten

- 1) 18, 13, 2, 18, 20, 56, 41, 50, 77, 71, 74, 99
- 2) 18, 28, 34, 37, 21, 41, 41, 74, 65, 67, 70, 76, 85, 89, 82
- 3) 16, 14, 10, 34, 24, 39, 23, 22, 45, 52, 53, 59, 61, 66, 89
- 4) 11, 15, 18, 11, 17, 24, 34, 37, 51, 55, 75, 71, 77, 78, 92, 86, 91, 84, 98
- 5) 13, 11, 9, 36, 20, 49, 42, 53, 43, 41, 73, 97, 89
- 6) 8, 21, 37, 52, 48, 47, 47, 57, 64, 75, 66, 75, 84, 89, 84, 89, 81
- 7) 1, 17, 24, 56, 44, 64, 93, 82, 84
- 8) 19, 22, 36, 35, 53, 49, 75, 72, 69, 61, 62, 86, 89, 88, 81, 99
- 9) 9, 10, 1, 30, 33, 47, 44, 57, 66, 71, 98, 92, 89, 82, 99
- 10) 17, 9, 14, 2, 3, 38, 53, 49, 43, 46, 65, 69, 62, 61, 82, 99, 84, 82

- 1. _____
- 2. _____
- 3. _____
- 4. _____
- 5. _____
- 6. _____
- 7. _____
- 8. _____
- 9. _____
- 10. _____



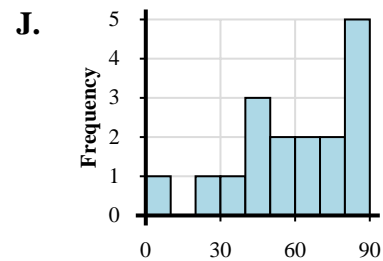
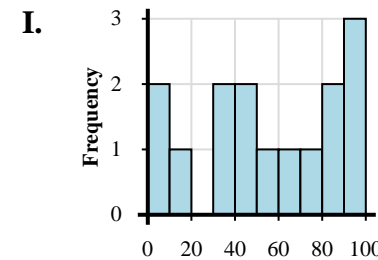
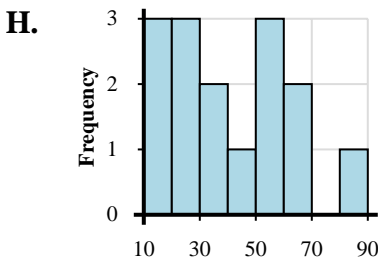
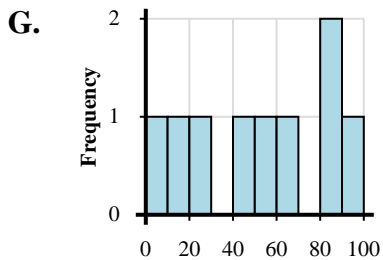
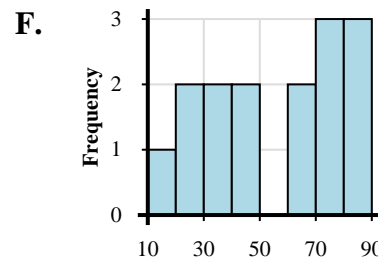
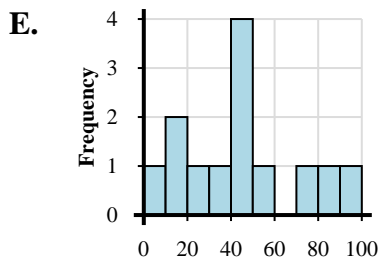
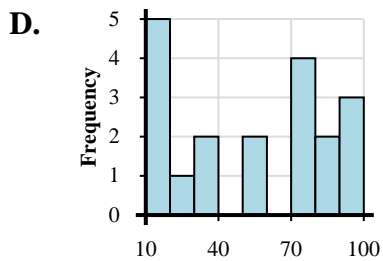
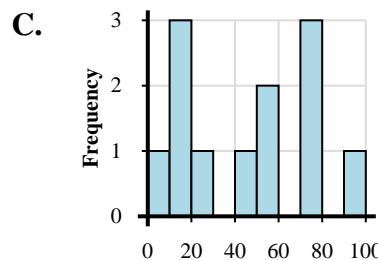
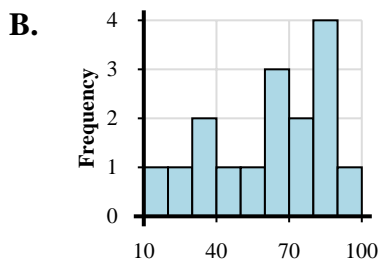
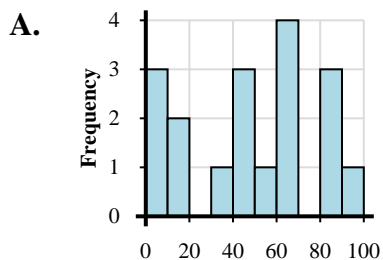


Ordnen Sie jedem Datensatz das zugehörige Histogramm zu.

Antworten

- 1) 18, 13, 2, 18, 20, 56, 41, 50, 77, 71, 74, 99
- 2) 18, 28, 34, 37, 21, 41, 41, 74, 65, 67, 70, 76, 85, 89, 82
- 3) 16, 14, 10, 34, 24, 39, 23, 22, 45, 52, 53, 59, 61, 66, 89
- 4) 11, 15, 18, 11, 17, 24, 34, 37, 51, 55, 75, 71, 77, 78, 92, 86, 91, 84, 98
- 5) 13, 11, 9, 36, 20, 49, 42, 53, 43, 41, 73, 97, 89
- 6) 8, 21, 37, 52, 48, 47, 47, 57, 64, 75, 66, 75, 84, 89, 84, 89, 81
- 7) 1, 17, 24, 56, 44, 64, 93, 82, 84
- 8) 19, 22, 36, 35, 53, 49, 75, 72, 69, 61, 62, 86, 89, 88, 81, 99
- 9) 9, 10, 1, 30, 33, 47, 44, 57, 66, 71, 98, 92, 89, 82, 99
- 10) 17, 9, 14, 2, 3, 38, 53, 49, 43, 46, 65, 69, 62, 61, 82, 99, 84, 82

- 1. **C**
- 2. **F**
- 3. **H**
- 4. **D**
- 5. **E**
- 6. **J**
- 7. **G**
- 8. **B**
- 9. **I**
- 10. **A**



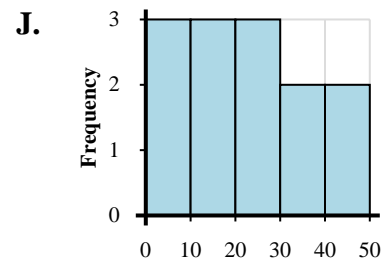
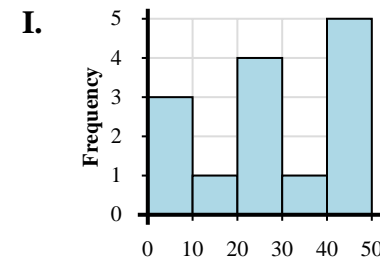
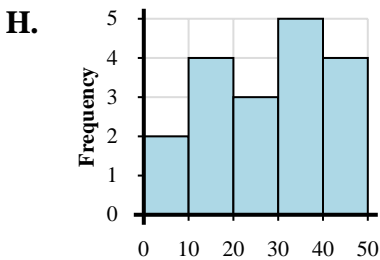
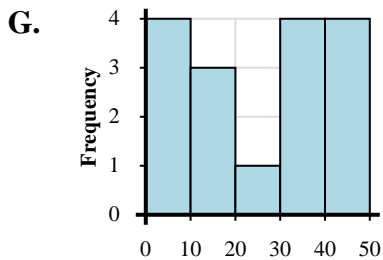
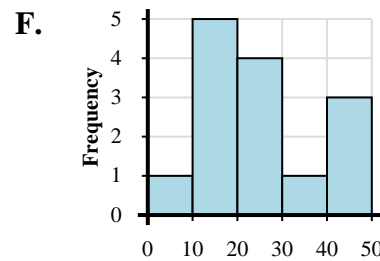
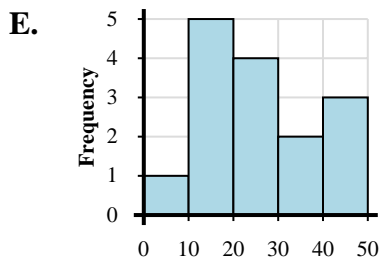
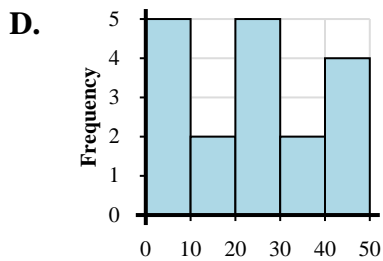
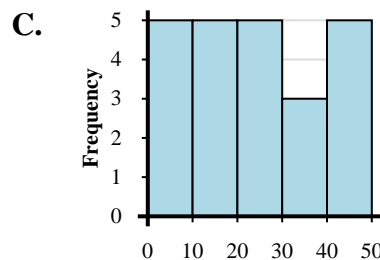
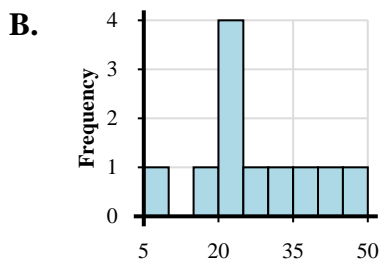
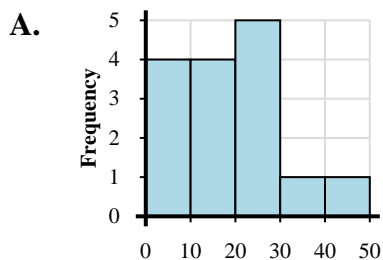


Ordnen Sie jedem Datensatz das zugehörige Histogramm zu.

Antworten

- 1) 2, 10, 18, 19, 11, 13, 22, 25, 28, 23, 38, 43, 49, 43
- 2) 1, 6, 7, 12, 28, 28, 22, 26, 31, 49, 45, 48, 45, 41
- 3) 3, 4, 8, 9, 1, 19, 18, 27, 29, 25, 28, 28, 39, 30, 42, 43, 40, 49
- 4) 3, 2, 3, 8, 18, 11, 13, 17, 26, 26, 23, 29, 22, 36, 46
- 5) 5, 10, 14, 13, 12, 14, 25, 20, 25, 21, 33, 35, 49, 49, 44
- 6) 9, 17, 23, 26, 24, 21, 23, 38, 31, 45, 40
- 7) 4, 9, 4, 9, 5, 13, 19, 16, 11, 15, 23, 26, 29, 28, 24, 36, 39, 37, 44, 41, 43, 48, 48
- 8) 3, 2, 6, 1, 10, 15, 13, 24, 30, 31, 37, 32, 43, 42, 47, 40
- 9) 9, 7, 10, 10, 14, 15, 26, 29, 21, 36, 39, 33, 33, 35, 45, 45, 41, 48
- 10) 6, 6, 5, 14, 12, 14, 20, 27, 27, 32, 30, 46, 42

- 1. _____
- 2. _____
- 3. _____
- 4. _____
- 5. _____
- 6. _____
- 7. _____
- 8. _____
- 9. _____
- 10. _____



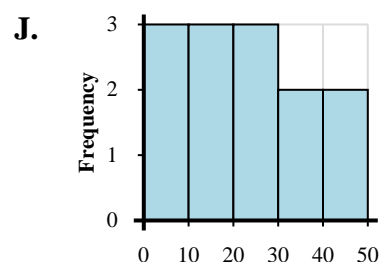
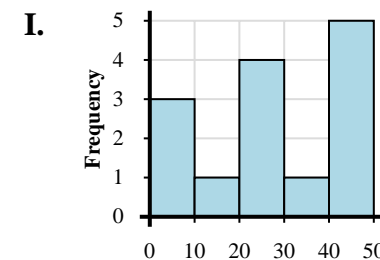
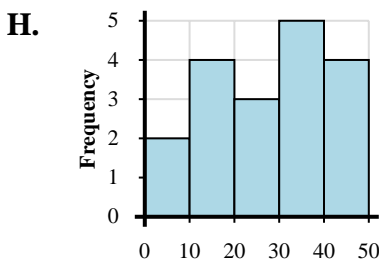
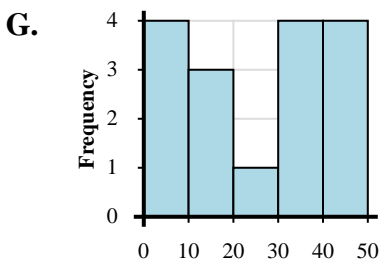
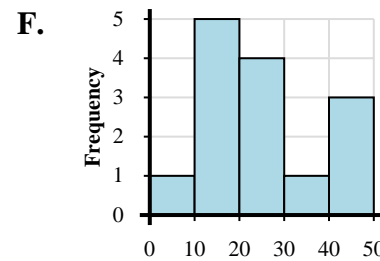
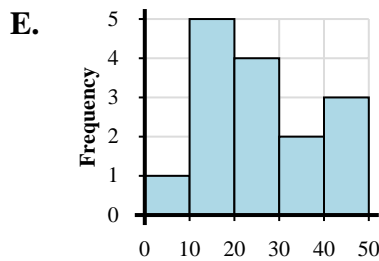
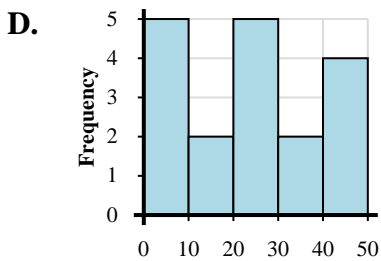
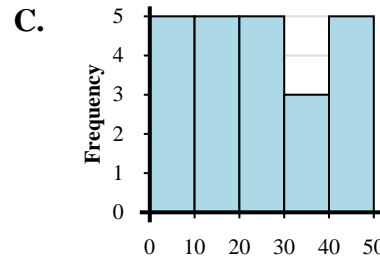
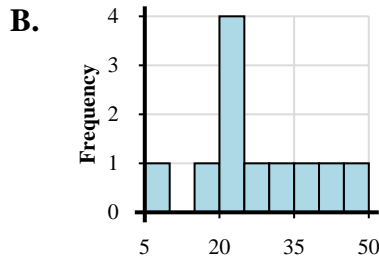
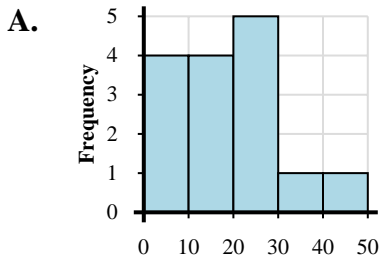


Ordnen Sie jedem Datensatz das zugehörige Histogramm zu.

Antworten

- 1) 2, 10, 18, 19, 11, 13, 22, 25, 28, 23, 38, 43, 49, 43
- 2) 1, 6, 7, 12, 28, 28, 22, 26, 31, 49, 45, 48, 45, 41
- 3) 3, 4, 8, 9, 1, 19, 18, 27, 29, 25, 28, 28, 39, 30, 42, 43, 40, 49
- 4) 3, 2, 3, 8, 18, 11, 13, 17, 26, 26, 23, 29, 22, 36, 46
- 5) 5, 10, 14, 13, 12, 14, 25, 20, 25, 21, 33, 35, 49, 49, 44
- 6) 9, 17, 23, 26, 24, 21, 23, 38, 31, 45, 40
- 7) 4, 9, 4, 9, 5, 13, 19, 16, 11, 15, 23, 26, 29, 28, 24, 36, 39, 37, 44, 41, 43, 48, 48
- 8) 3, 2, 6, 1, 10, 15, 13, 24, 30, 31, 37, 32, 43, 42, 47, 40
- 9) 9, 7, 10, 10, 14, 15, 26, 29, 21, 36, 39, 33, 33, 35, 45, 45, 41, 48
- 10) 6, 6, 5, 14, 12, 14, 20, 27, 27, 32, 30, 46, 42

- 1. **F**
- 2. **I**
- 3. **D**
- 4. **A**
- 5. **E**
- 6. **B**
- 7. **C**
- 8. **G**
- 9. **H**
- 10. **J**



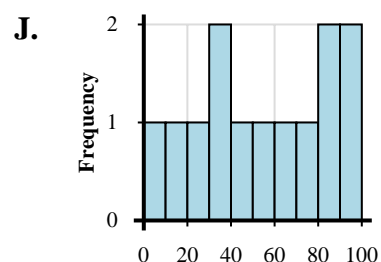
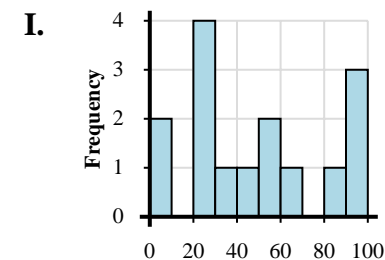
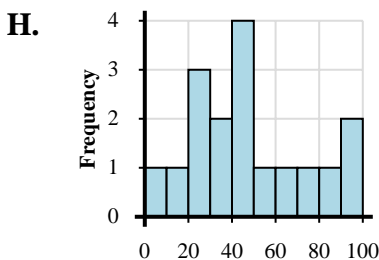
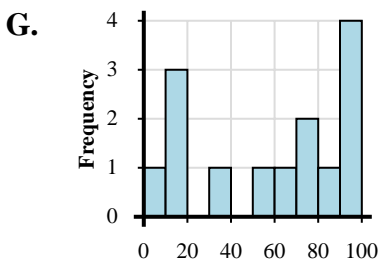
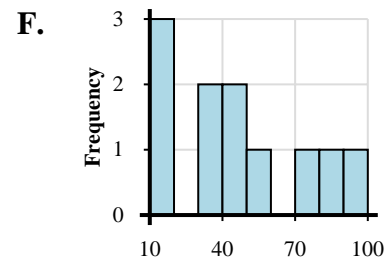
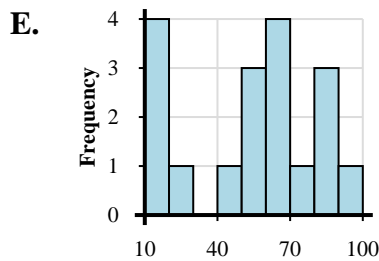
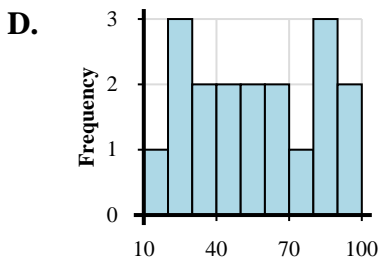
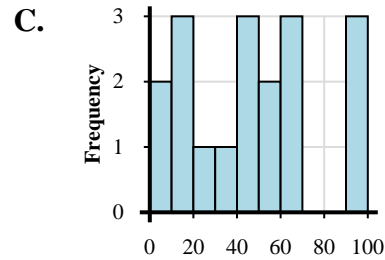
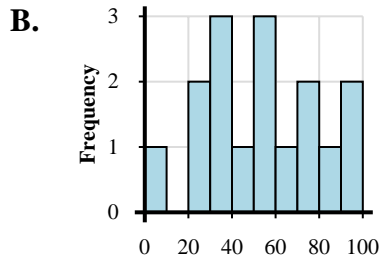
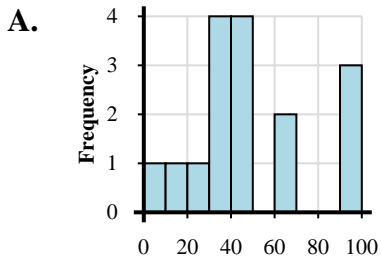


Ordnen Sie jedem Datensatz das zugehörige Histogramm zu.

Antworten

- 1) 17, 1, 16, 13, 36, 56, 71, 60, 74, 97, 99, 91, 81, 96
- 2) 15, 30, 28, 29, 28, 33, 44, 52, 44, 55, 69, 63, 74, 83, 98, 89, 90, 81
- 3) 2, 16, 18, 17, 6, 30, 23, 45, 56, 40, 56, 45, 60, 63, 62, 98, 97, 92
- 4) 2, 18, 33, 34, 23, 48, 53, 66, 71, 93, 94, 83, 87
- 5) 3, 11, 21, 32, 31, 39, 39, 45, 48, 40, 45, 68, 60, 95, 92, 95
- 6) 8, 23, 34, 21, 33, 35, 43, 51, 55, 54, 65, 70, 78, 82, 97, 90
- 7) 14, 17, 18, 18, 21, 52, 54, 40, 52, 66, 63, 67, 77, 60, 87, 88, 93, 82
- 8) 18, 16, 13, 33, 35, 56, 41, 48, 76, 82, 91
- 9) 3, 13, 23, 35, 20, 24, 30, 45, 43, 40, 51, 43, 78, 60, 81, 93, 94
- 10) 1, 3, 26, 30, 24, 22, 26, 50, 45, 55, 62, 85, 96, 94, 97

- 1. _____
- 2. _____
- 3. _____
- 4. _____
- 5. _____
- 6. _____
- 7. _____
- 8. _____
- 9. _____
- 10. _____



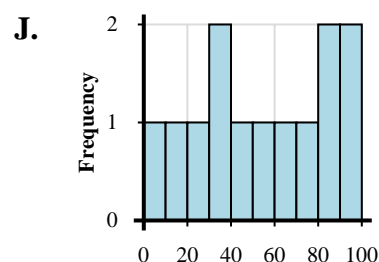
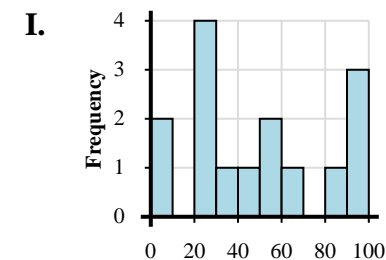
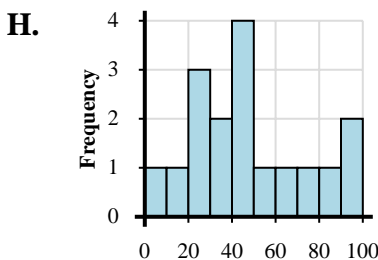
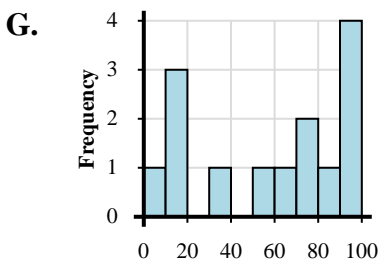
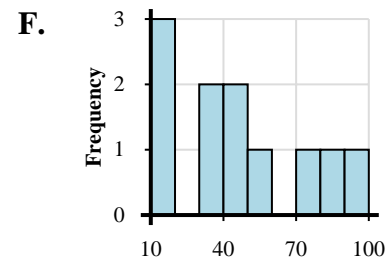
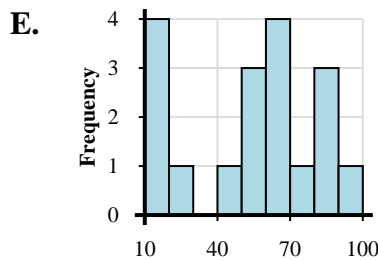
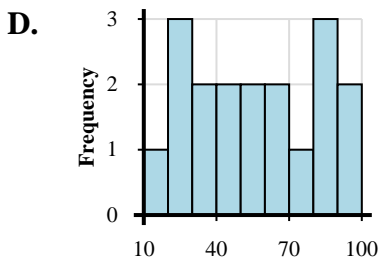
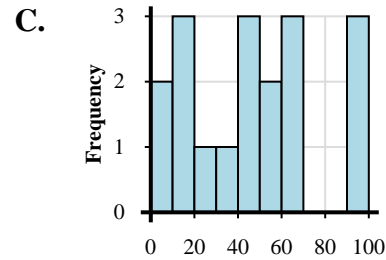
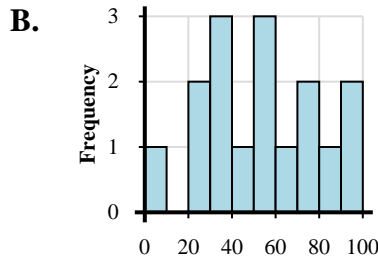
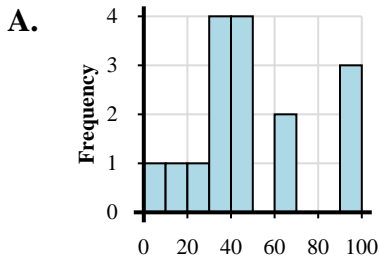


Ordnen Sie jedem Datensatz das zugehörige Histogramm zu.

Antworten

- 1) 17, 1, 16, 13, 36, 56, 71, 60, 74, 97, 99, 91, 81, 96
- 2) 15, 30, 28, 29, 28, 33, 44, 52, 44, 55, 69, 63, 74, 83, 98, 89, 90, 81
- 3) 2, 16, 18, 17, 6, 30, 23, 45, 56, 40, 56, 45, 60, 63, 62, 98, 97, 92
- 4) 2, 18, 33, 34, 23, 48, 53, 66, 71, 93, 94, 83, 87
- 5) 3, 11, 21, 32, 31, 39, 39, 45, 48, 40, 45, 68, 60, 95, 92, 95
- 6) 8, 23, 34, 21, 33, 35, 43, 51, 55, 54, 65, 70, 78, 82, 97, 90
- 7) 14, 17, 18, 18, 21, 52, 54, 40, 52, 66, 63, 67, 77, 60, 87, 88, 93, 82
- 8) 18, 16, 13, 33, 35, 56, 41, 48, 76, 82, 91
- 9) 3, 13, 23, 35, 20, 24, 30, 45, 43, 40, 51, 43, 78, 60, 81, 93, 94
- 10) 1, 3, 26, 30, 24, 22, 26, 50, 45, 55, 62, 85, 96, 94, 97

- 1. **G**
- 2. **D**
- 3. **C**
- 4. **J**
- 5. **A**
- 6. **B**
- 7. **E**
- 8. **F**
- 9. **H**
- 10. **I**



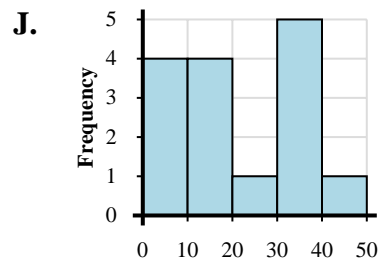
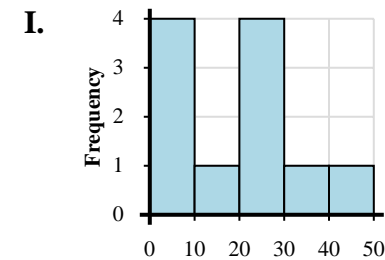
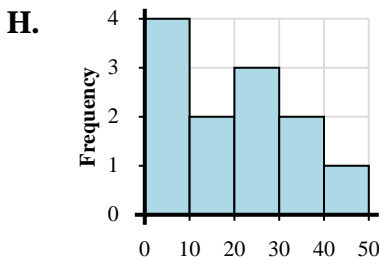
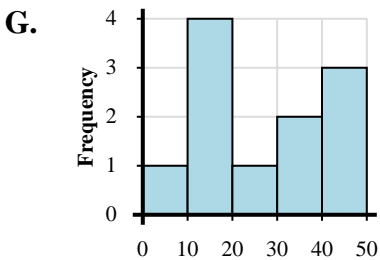
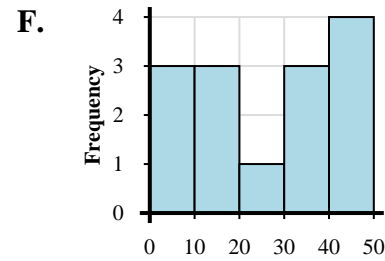
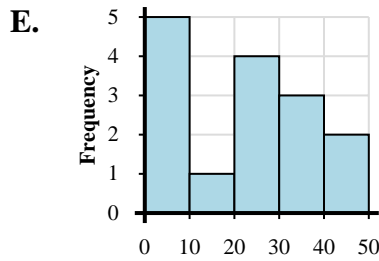
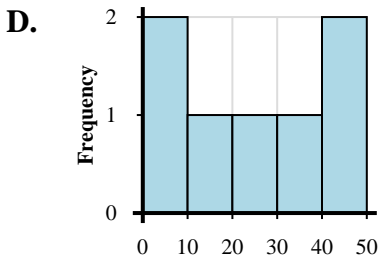
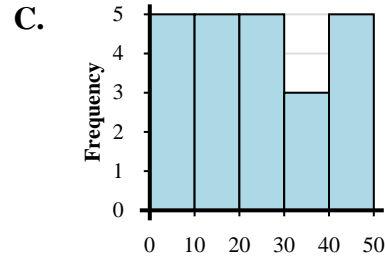
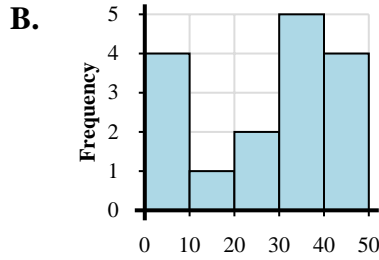
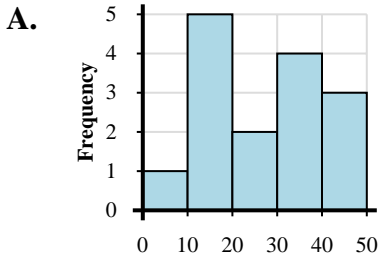


Ordnen Sie jedem Datensatz das zugehörige Histogramm zu.

Antworten

- 1) 8, 18, 19, 17, 13, 10, 28, 28, 39, 30, 32, 37, 47, 49, 41
- 2) 3, 9, 9, 9, 6, 12, 20, 23, 29, 21, 35, 39, 39, 49, 41
- 3) 3, 9, 9, 3, 15, 27, 20, 33, 36, 36, 36, 38, 46, 44, 43, 46
- 4) 8, 7, 7, 9, 15, 15, 25, 25, 22, 39, 36, 48
- 5) 6, 5, 3, 8, 5, 16, 14, 11, 10, 10, 23, 27, 27, 24, 23, 33, 34, 32, 48, 42, 40, 46, 48
- 6) 4, 13, 15, 16, 19, 20, 30, 37, 45, 44, 44
- 7) 1, 3, 7, 17, 19, 10, 25, 33, 32, 38, 43, 48, 42, 44
- 8) 9, 8, 7, 6, 18, 27, 26, 24, 21, 33, 47
- 9) 1, 6, 7, 5, 12, 16, 15, 17, 28, 31, 31, 31, 33, 32, 45
- 10) 9, 3, 17, 28, 31, 45, 43

- 1. _____
- 2. _____
- 3. _____
- 4. _____
- 5. _____
- 6. _____
- 7. _____
- 8. _____
- 9. _____
- 10. _____



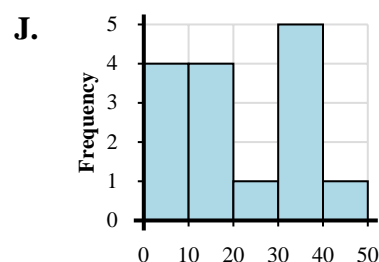
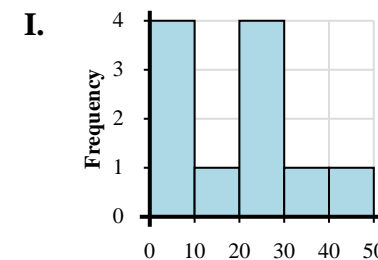
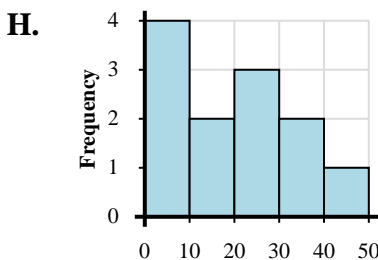
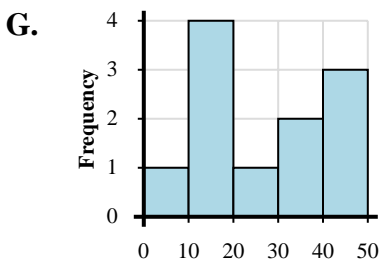
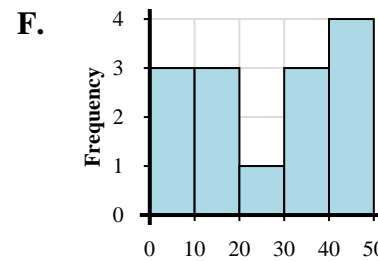
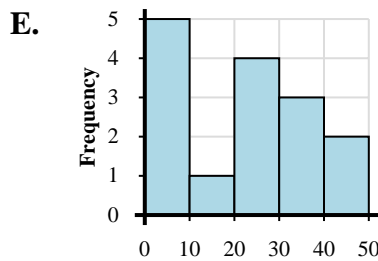
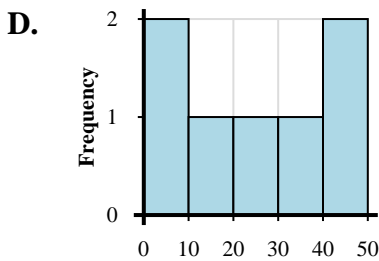
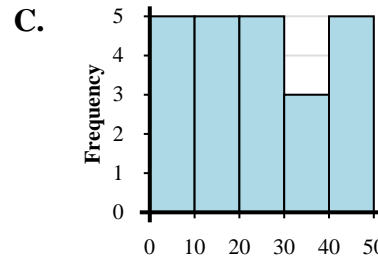
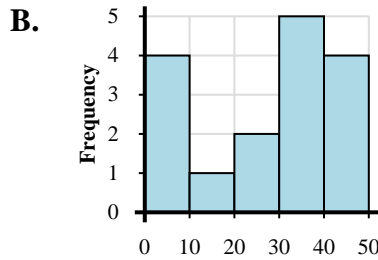
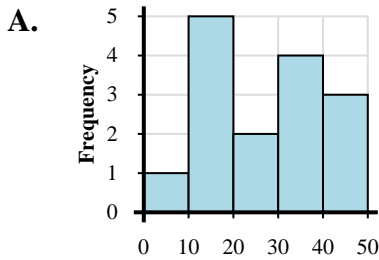


Ordnen Sie jedem Datensatz das zugehörige Histogramm zu.

Antworten

- 1) 8, 18, 19, 17, 13, 10, 28, 28, 39, 30, 32, 37, 47, 49, 41
- 2) 3, 9, 9, 9, 6, 12, 20, 23, 29, 21, 35, 39, 39, 49, 41
- 3) 3, 9, 9, 3, 15, 27, 20, 33, 36, 36, 36, 38, 46, 44, 43, 46
- 4) 8, 7, 7, 9, 15, 15, 25, 25, 22, 39, 36, 48
- 5) 6, 5, 3, 8, 5, 16, 14, 11, 10, 10, 23, 27, 27, 24, 23, 33, 34, 32, 48, 42, 40, 46, 48
- 6) 4, 13, 15, 16, 19, 20, 30, 37, 45, 44, 44
- 7) 1, 3, 7, 17, 19, 10, 25, 33, 32, 38, 43, 48, 42, 44
- 8) 9, 8, 7, 6, 18, 27, 26, 24, 21, 33, 47
- 9) 1, 6, 7, 5, 12, 16, 15, 17, 28, 31, 31, 31, 33, 32, 45
- 10) 9, 3, 17, 28, 31, 45, 43

- 1. **A**
- 2. **E**
- 3. **B**
- 4. **H**
- 5. **C**
- 6. **G**
- 7. **F**
- 8. **I**
- 9. **J**
- 10. **D**



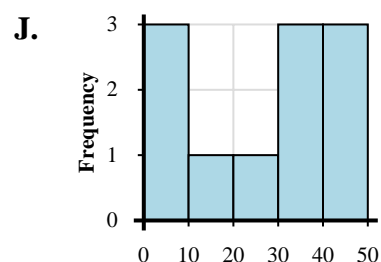
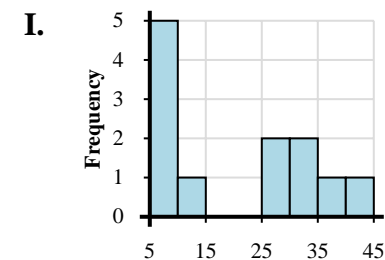
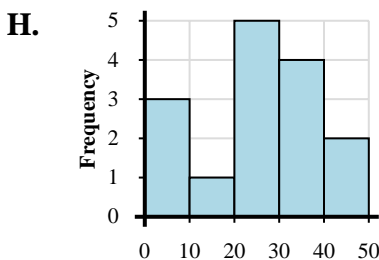
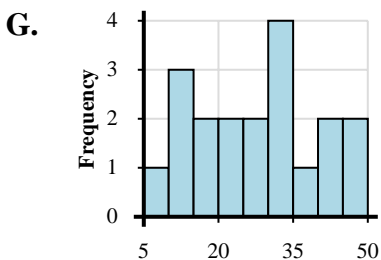
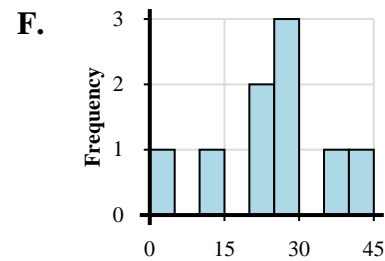
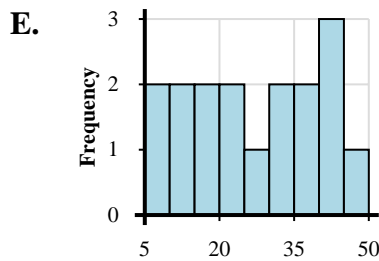
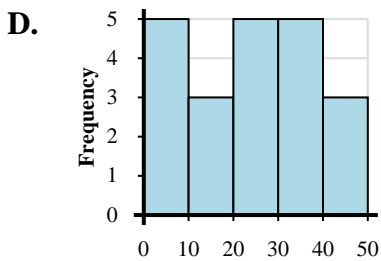
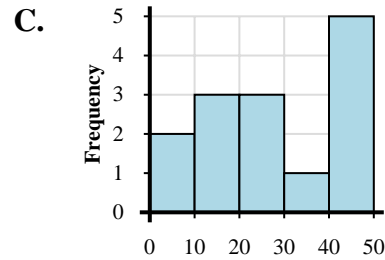
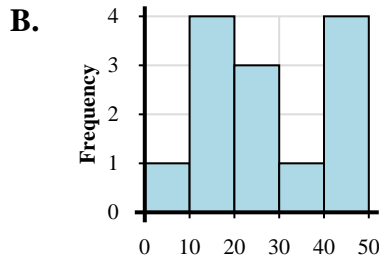
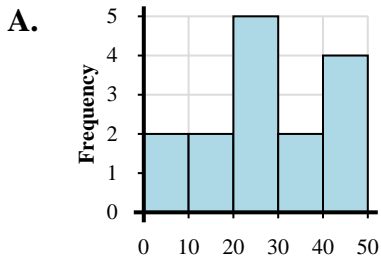


Ordnen Sie jedem Datensatz das zugehörige Histogramm zu.

Antworten

- 1) 2, 3, 9, 16, 28, 32, 36, 30, 40, 47, 45
- 2) 6, 1, 17, 10, 12, 23, 26, 23, 36, 40, 45, 46, 43, 40
- 3) 4, 16, 12, 18, 11, 23, 24, 24, 31, 41, 47, 49, 48
- 4) 5, 6, 6, 7, 7, 11, 27, 27, 30, 34, 37, 43
- 5) 9, 15, 12, 15, 13, 11, 26, 26, 20, 24, 38, 30, 33, 34, 30, 46, 44, 44, 48
- 6) 3, 3, 5, 1, 4, 15, 15, 17, 29, 28, 29, 22, 26, 39, 37, 30, 36, 32, 44, 43, 47
- 7) 6, 3, 7, 10, 29, 27, 24, 25, 24, 31, 38, 38, 31, 44, 40
- 8) 5, 9, 17, 14, 28, 25, 27, 26, 26, 30, 31, 40, 42, 44, 49
- 9) 8, 6, 19, 15, 14, 10, 28, 22, 21, 30, 38, 31, 37, 45, 44, 42, 44
- 10) 3, 12, 29, 24, 24, 29, 27, 35, 42

- 1. _____
- 2. _____
- 3. _____
- 4. _____
- 5. _____
- 6. _____
- 7. _____
- 8. _____
- 9. _____
- 10. _____



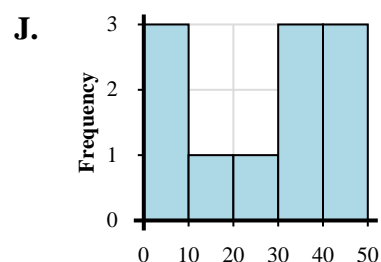
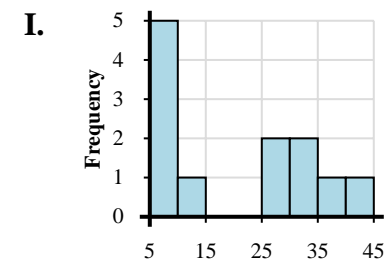
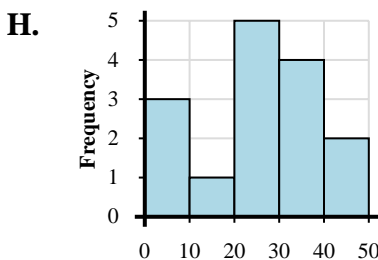
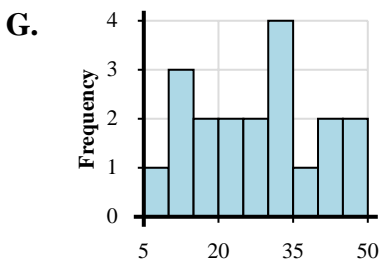
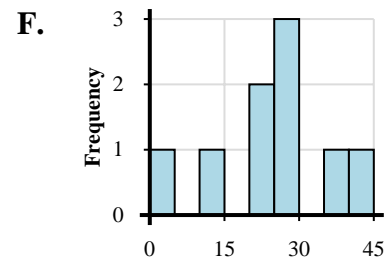
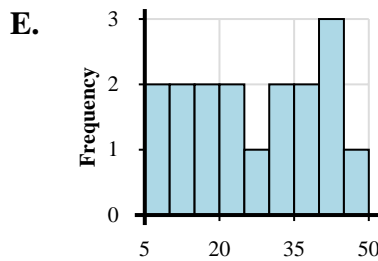
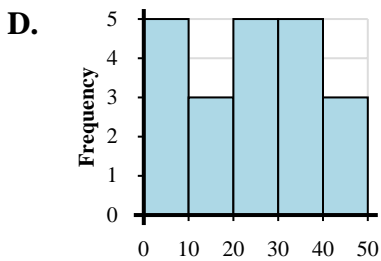
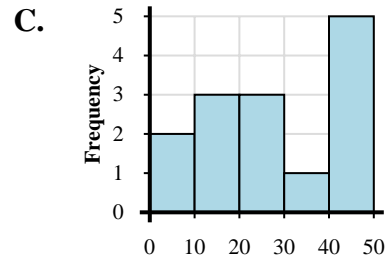
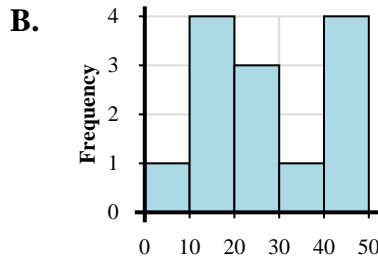
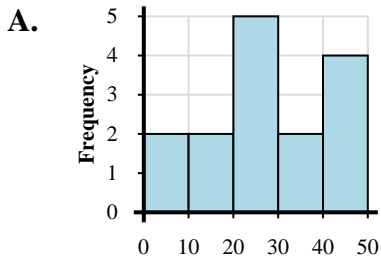


Ordnen Sie jedem Datensatz das zugehörige Histogramm zu.

Antworten

- 1) 2, 3, 9, 16, 28, 32, 36, 30, 40, 47, 45
- 2) 6, 1, 17, 10, 12, 23, 26, 23, 36, 40, 45, 46, 43, 40
- 3) 4, 16, 12, 18, 11, 23, 24, 24, 31, 41, 47, 49, 48
- 4) 5, 6, 6, 7, 7, 11, 27, 27, 30, 34, 37, 43
- 5) 9, 15, 12, 15, 13, 11, 26, 26, 20, 24, 38, 30, 33, 34, 30, 46, 44, 44, 48
- 6) 3, 3, 5, 1, 4, 15, 15, 17, 29, 28, 29, 22, 26, 39, 37, 30, 36, 32, 44, 43, 47
- 7) 6, 3, 7, 10, 29, 27, 24, 25, 24, 31, 38, 38, 31, 44, 40
- 8) 5, 9, 17, 14, 28, 25, 27, 26, 26, 30, 31, 40, 42, 44, 49
- 9) 8, 6, 19, 15, 14, 10, 28, 22, 21, 30, 38, 31, 37, 45, 44, 42, 44
- 10) 3, 12, 29, 24, 24, 29, 27, 35, 42

- 1. **J**
- 2. **C**
- 3. **B**
- 4. **I**
- 5. **G**
- 6. **D**
- 7. **H**
- 8. **A**
- 9. **E**
- 10. **F**



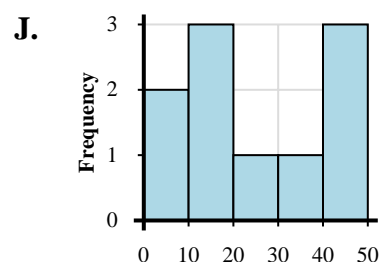
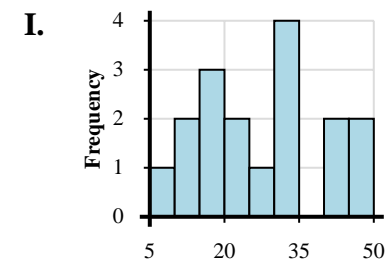
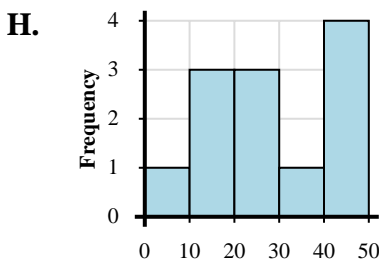
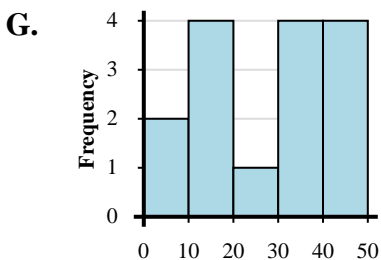
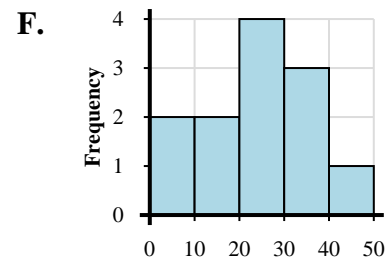
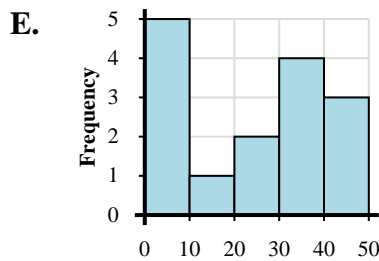
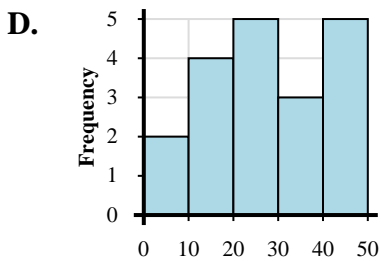
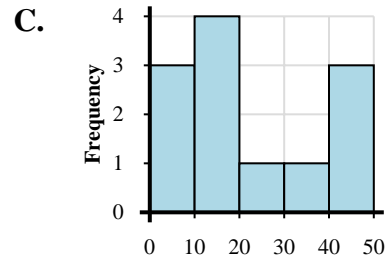
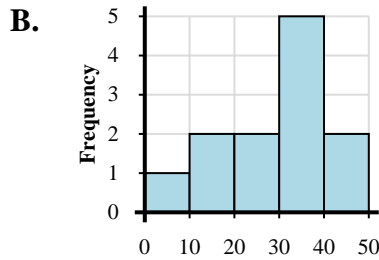
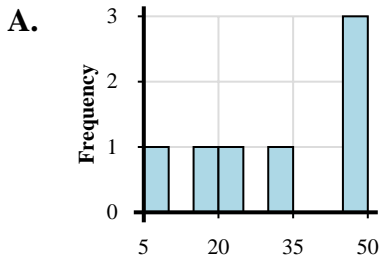


Ordnen Sie jedem Datensatz das zugehörige Histogramm zu.

Antworten

- 1) 8, 9, 10, 11, 24, 21, 23, 23, 38, 33, 32, 48
- 2) 4, 3, 12, 16, 16, 20, 30, 46, 49, 42
- 3) 2, 3, 6, 10, 16, 17, 16, 27, 37, 40, 42, 43
- 4) 3, 19, 15, 22, 28, 30, 32, 35, 33, 32, 42, 46
- 5) 3, 7, 14, 12, 16, 11, 20, 25, 27, 20, 29, 36, 39, 39, 40, 44, 48, 45, 46
- 6) 5, 5, 6, 3, 1, 13, 26, 23, 37, 35, 35, 33, 45, 46, 42
- 7) 1, 11, 10, 14, 29, 29, 26, 34, 45, 47, 42, 44
- 8) 1, 2, 18, 14, 11, 15, 29, 37, 36, 37, 33, 43, 48, 41, 49
- 9) 9, 18, 21, 34, 48, 48, 46
- 10) 8, 18, 10, 17, 11, 19, 23, 23, 28, 32, 34, 32, 33, 47, 42, 40, 45

1. _____
2. _____
3. _____
4. _____
5. _____
6. _____
7. _____
8. _____
9. _____
10. _____





Ordnen Sie jedem Datensatz das zugehörige Histogramm zu.

Antworten

- 1) 8, 9, 10, 11, 24, 21, 23, 23, 38, 33, 32, 48
- 2) 4, 3, 12, 16, 16, 20, 30, 46, 49, 42
- 3) 2, 3, 6, 10, 16, 17, 16, 27, 37, 40, 42, 43
- 4) 3, 19, 15, 22, 28, 30, 32, 35, 33, 32, 42, 46
- 5) 3, 7, 14, 12, 16, 11, 20, 25, 27, 20, 29, 36, 39, 39, 40, 44, 48, 45, 46
- 6) 5, 5, 6, 3, 1, 13, 26, 23, 37, 35, 35, 33, 45, 46, 42
- 7) 1, 11, 10, 14, 29, 29, 26, 34, 45, 47, 42, 44
- 8) 1, 2, 18, 14, 11, 15, 29, 37, 36, 37, 33, 43, 48, 41, 49
- 9) 9, 18, 21, 34, 48, 48, 46
- 10) 8, 18, 10, 17, 11, 19, 23, 23, 28, 32, 34, 32, 33, 47, 42, 40, 45

- 1. **F**
- 2. **J**
- 3. **C**
- 4. **B**
- 5. **D**
- 6. **E**
- 7. **H**
- 8. **G**
- 9. **A**
- 10. **I**

