



Entscheide, welches Diagramm zu welcher Tabelle gehört.

Antworten

1)

| Personen |  |
|----------|--|
| 5.000    |  |
| 3.000    |  |
| 10.000   |  |
| 1.000    |  |
| 4.000    |  |

2)

| Personen |  |
|----------|--|
| 5.000    |  |
| 3.000    |  |
| 1.000    |  |
| 10.000   |  |
| 4.000    |  |

3)

| Personen |  |
|----------|--|
| 3.000    |  |
| 10.000   |  |
| 5.000    |  |
| 1.000    |  |
| 4.000    |  |

4)

| Personen |  |
|----------|--|
| 1.000    |  |
| 3.000    |  |
| 10.000   |  |
| 5.000    |  |
| 4.000    |  |

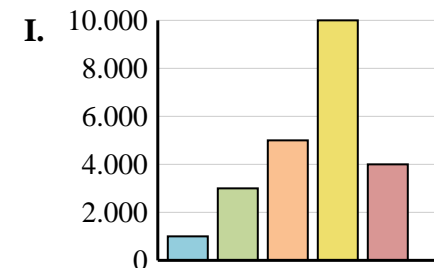
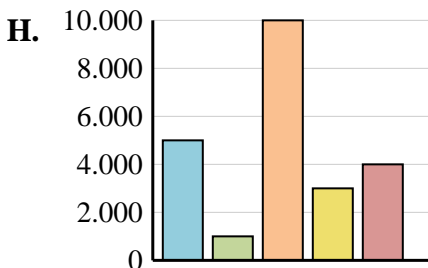
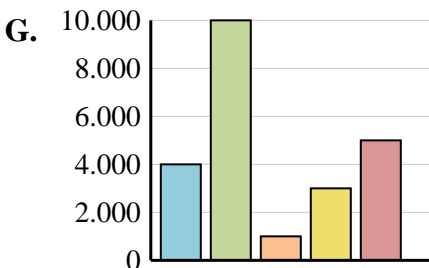
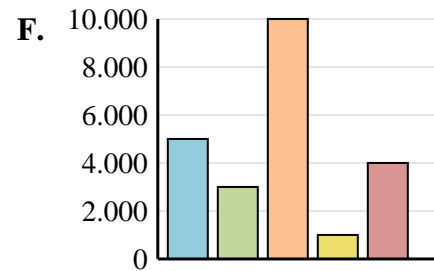
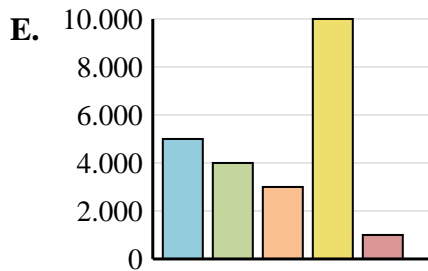
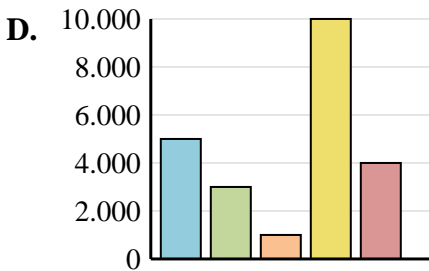
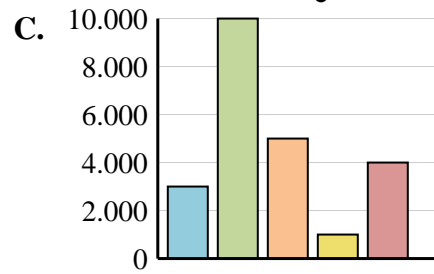
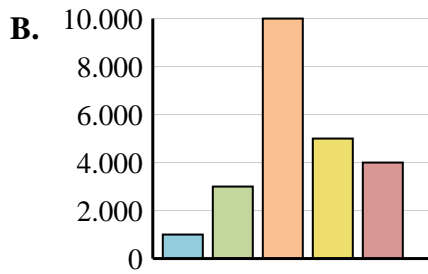
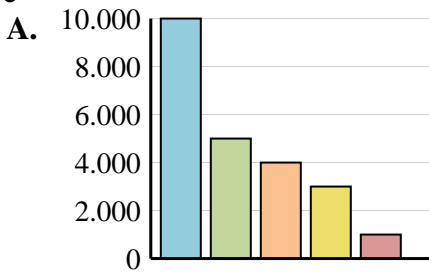
5)

| Personen |  |
|----------|--|
| 5.000    |  |
| 1.000    |  |
| 10.000   |  |
| 3.000    |  |
| 4.000    |  |

6)

| Personen |  |
|----------|--|
| 5.000    |  |
| 4.000    |  |
| 3.000    |  |
| 10.000   |  |
| 1.000    |  |

- 1. \_\_\_\_\_
- 2. \_\_\_\_\_
- 3. \_\_\_\_\_
- 4. \_\_\_\_\_
- 5. \_\_\_\_\_
- 6. \_\_\_\_\_





Entscheide, welches Diagramm zu welcher Tabelle gehört.

Antworten

1)

| Personen |  |
|----------|--|
| 5.000    |  |
| 3.000    |  |
| 10.000   |  |
| 1.000    |  |
| 4.000    |  |

2)

| Personen |  |
|----------|--|
| 5.000    |  |
| 3.000    |  |
| 1.000    |  |
| 10.000   |  |
| 4.000    |  |

3)

| Personen |  |
|----------|--|
| 3.000    |  |
| 10.000   |  |
| 5.000    |  |
| 1.000    |  |
| 4.000    |  |

4)

| Personen |  |
|----------|--|
| 1.000    |  |
| 3.000    |  |
| 10.000   |  |
| 5.000    |  |
| 4.000    |  |

5)

| Personen |  |
|----------|--|
| 5.000    |  |
| 1.000    |  |
| 10.000   |  |
| 3.000    |  |
| 4.000    |  |

6)

| Personen |  |
|----------|--|
| 5.000    |  |
| 4.000    |  |
| 3.000    |  |
| 10.000   |  |
| 1.000    |  |

- 1. **F**
- 2. **D**
- 3. **C**
- 4. **B**
- 5. **H**
- 6. **E**

