



Entscheide, welches Diagramm zu welcher Tabelle gehört.

Antworten

1)

Personen	
	7.000
	10.000
	9.000
	5.000
	1.000

2)

Personen	
	10.000
	7.000
	5.000
	9.000
	1.000

3)

Personen	
	9.000
	10.000
	5.000
	1.000
	7.000

4)

Personen	
	10.000
	9.000
	5.000
	1.000
	7.000

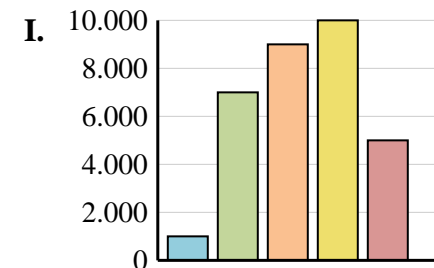
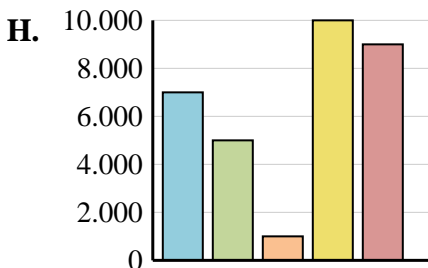
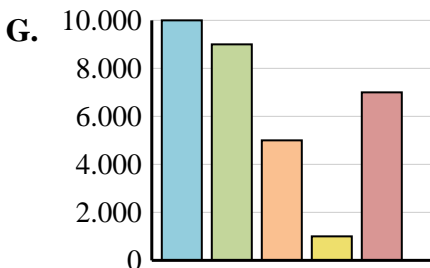
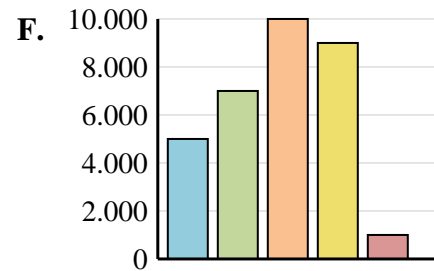
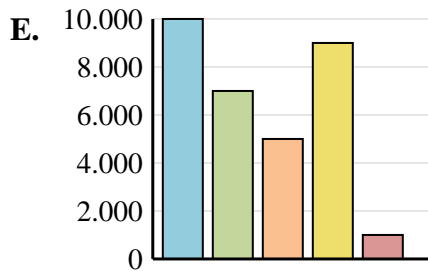
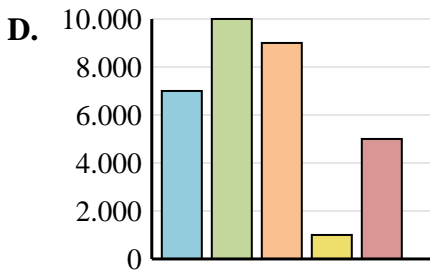
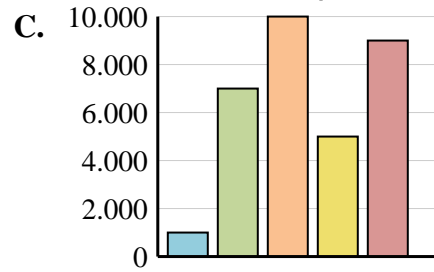
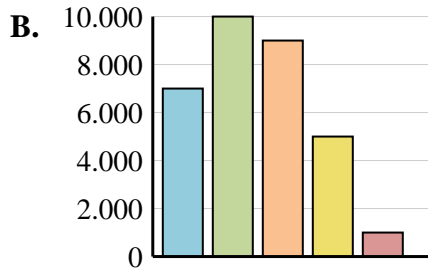
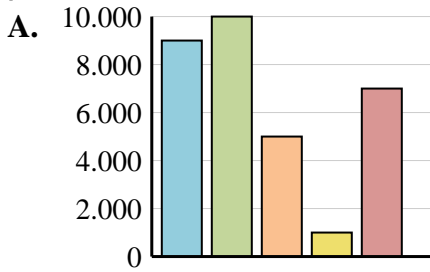
5)

Personen	
	7.000
	10.000
	9.000
	1.000
	5.000

6)

Personen	
	7.000
	5.000
	1.000
	10.000
	9.000

- 1. _____
- 2. _____
- 3. _____
- 4. _____
- 5. _____
- 6. _____





Entscheide, welches Diagramm zu welcher Tabelle gehört.

Antworten

1)

Personen	
	7.000
	10.000
	9.000
	5.000
	1.000

2)

Personen	
	10.000
	7.000
	5.000
	9.000
	1.000

3)

Personen	
	9.000
	10.000
	5.000
	1.000
	7.000

4)

Personen	
	10.000
	9.000
	5.000
	1.000
	7.000

5)

Personen	
	7.000
	10.000
	9.000
	1.000
	5.000

6)

Personen	
	7.000
	5.000
	1.000
	10.000
	9.000

- 1. **B**
- 2. **E**
- 3. **A**
- 4. **G**
- 5. **D**
- 6. **H**

