

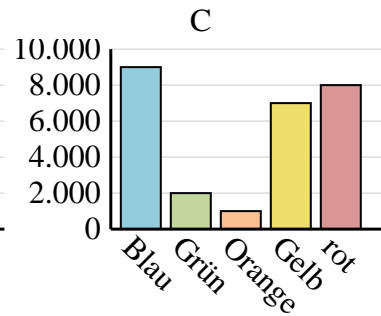
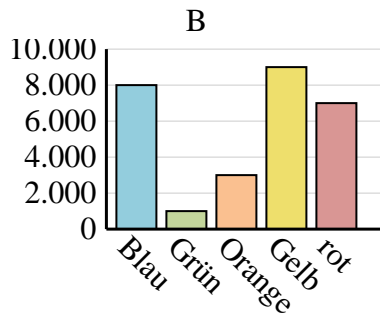
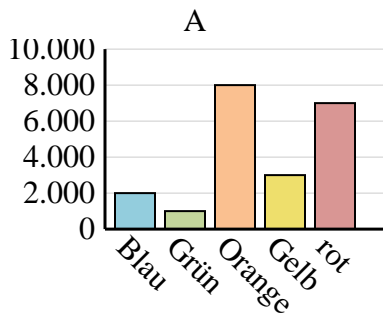


Entscheide, welches Diagramm (A, B oder C) am besten die Information in der Tabelle repräsentiert.

Antworten

1)

Lieblingsfarbe	Blau	Grün	Orange	Gelb	rot
Personen	2.000	1.000	8.000	3.000	7.000



1. _____

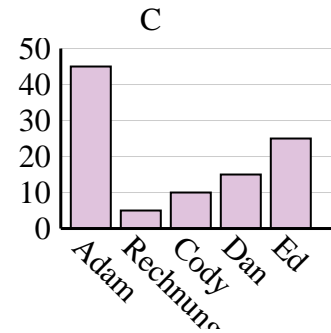
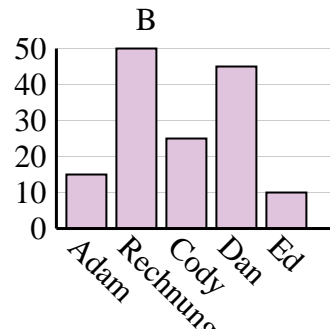
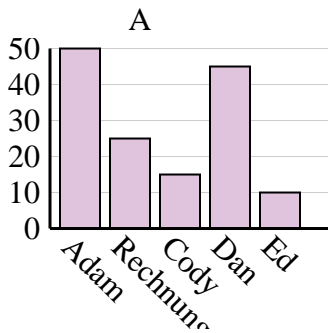
2. _____

3. _____

4. _____

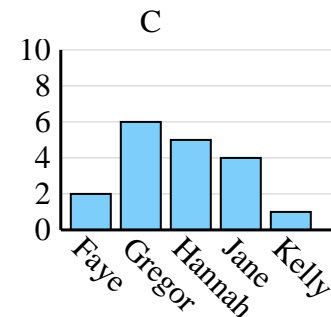
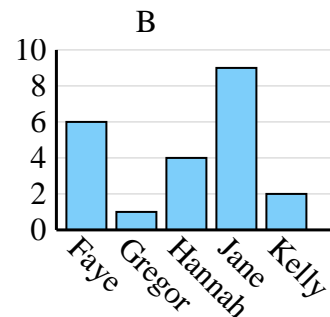
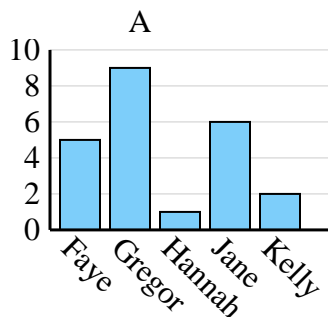
2)

Name	Adam	Rechnung	Cody	Dan	Ed
Punkte	50	25	15	45	10



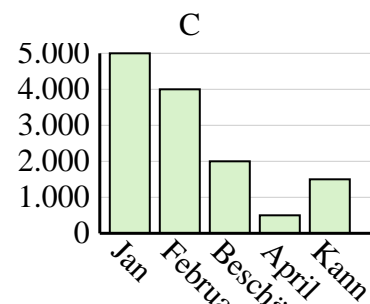
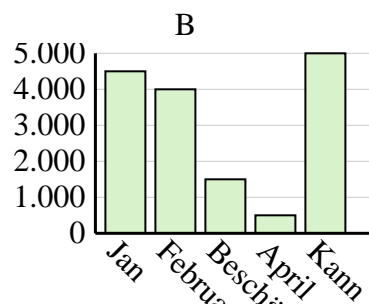
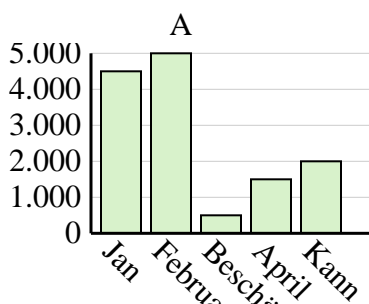
3)

Name	Faye	Gregor	Hannah	Jane	Kelly
Staaten, in denen gelebt wurde	5	9	1	6	2



4)

Der Umsatz	Jan	Februar	Beschädigen	April	Kann
Monat	5.000	4.000	2.000	500	1.500



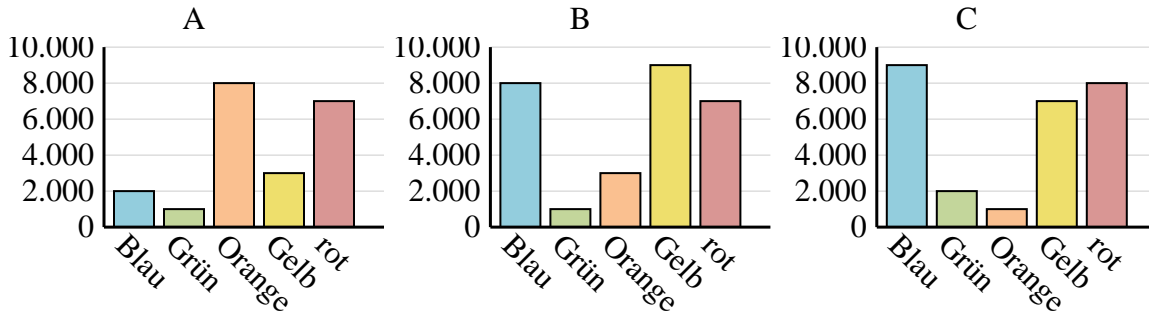


Entscheide, welches Diagramm (A, B oder C) am besten die Information in der Tabelle repräsentiert.

Antworten

1)

Lieblingsfarbe	Blau	Grün	Orange	Gelb	rot
Personen	2.000	1.000	8.000	3.000	7.000



1. **A**

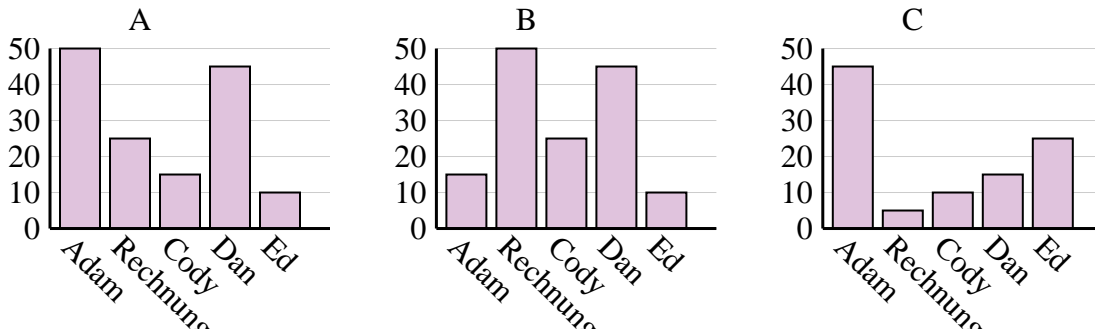
2. **A**

3. **A**

4. **C**

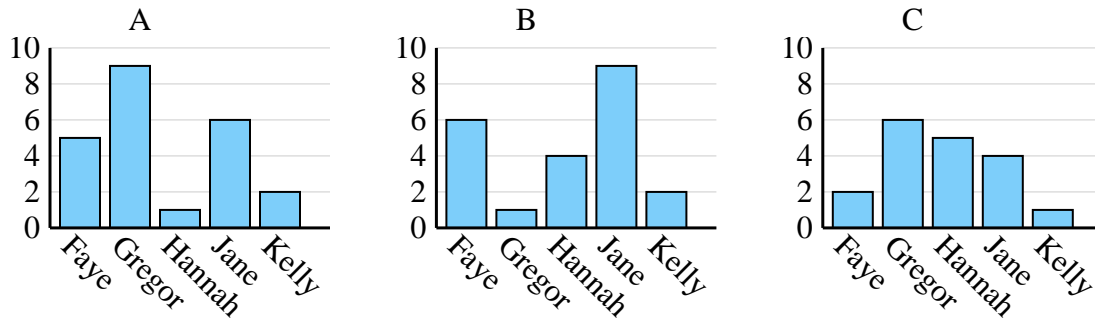
2)

Name	Adam	Rechnung	Cody	Dan	Ed
Punkte	50	25	15	45	10



3)

Name	Faye	Gregor	Hannah	Jane	Kelly
Staaten, in denen gelebt wurde	5	9	1	6	2



4)

Der Umsatz	Jan	Februar	Beschädigen	April	Kann
Monat	5.000	4.000	2.000	500	1.500

