

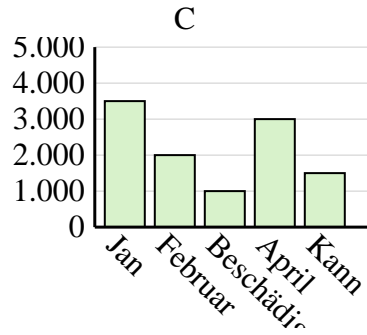
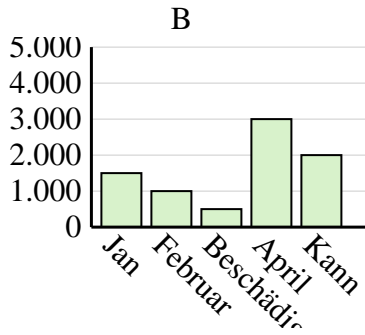
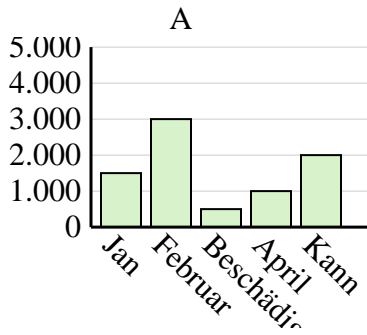


Entscheide, welches Diagramm (A, B oder C) am besten die Information in der Tabelle repräsentiert.

Antworten

1)

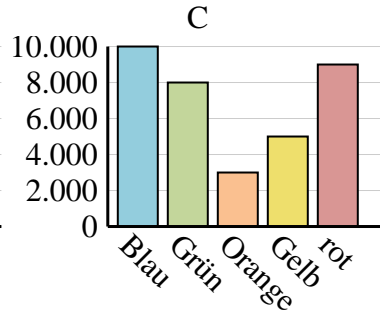
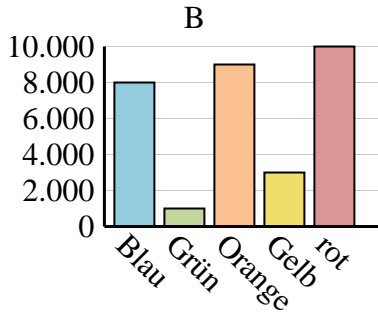
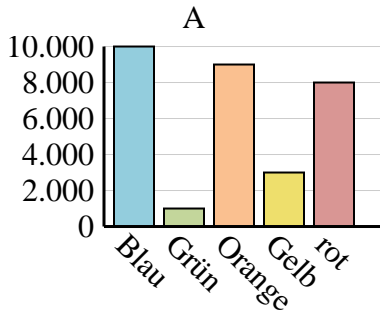
Der Umsatz	Jan	Februar	Beschädigen	April	Kann
Monat	3.500	2.000	1.000	3.000	1.500



- 1. _____
- 2. _____
- 3. _____
- 4. _____

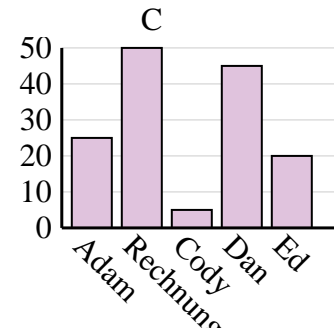
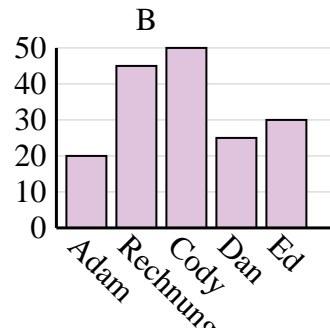
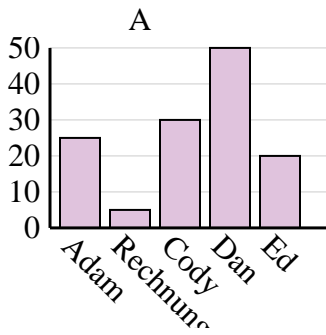
2)

Lieblingsfarbe	Blau	Grün	Orange	Gelb	rot
Personen	10.000	1.000	9.000	3.000	8.000



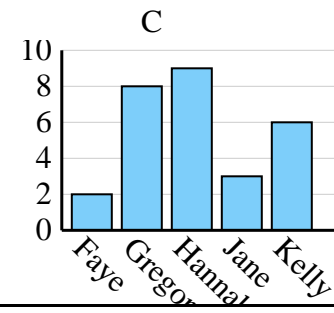
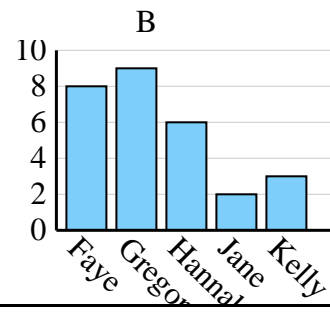
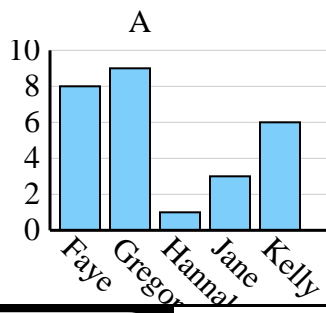
3)

Name	Adam	Rechnung	Cody	Dan	Ed
Punkte	25	5	30	50	20



4)

Name	Faye	Gregor	Hannah	Jane	Kelly
Staaten, in denen gelebt wurde	8	9	1	3	6



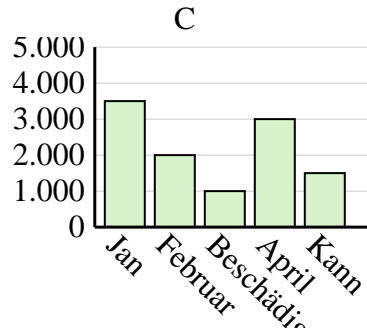
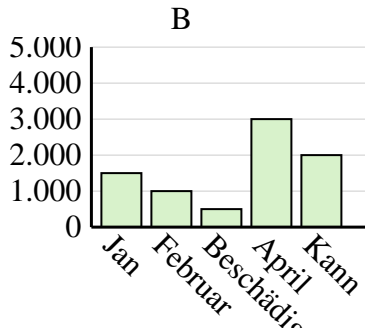
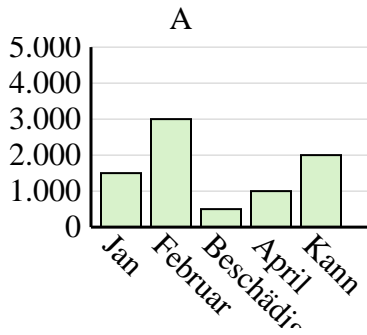


Entscheide, welches Diagramm (A, B oder C) am besten die Information in der Tabelle repräsentiert.

Antworten

1)

Der Umsatz	Jan	Februar	Beschädigen	April	Kann
Monat	3.500	2.000	1.000	3.000	1.500



1. C

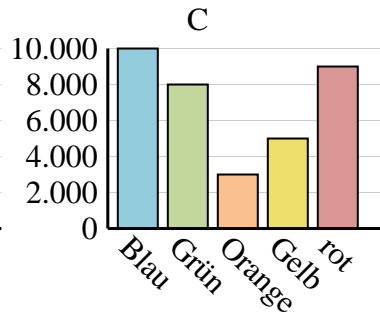
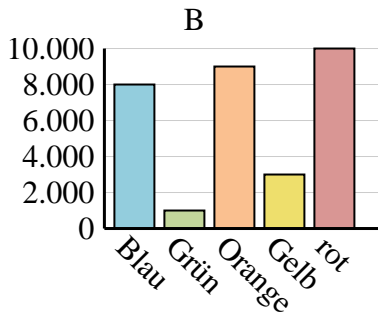
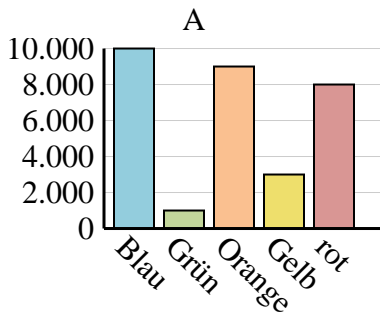
2. A

3. A

4. A

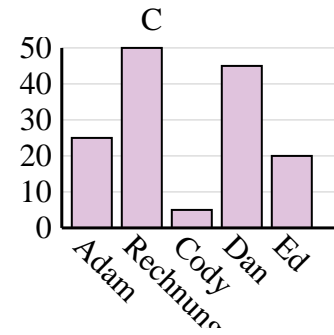
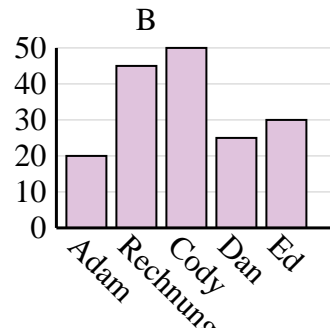
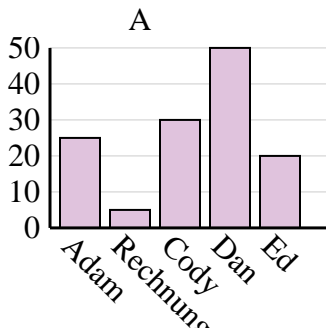
2)

Lieblingsfarbe	Blau	Grün	Orange	Gelb	rot
Personen	10.000	1.000	9.000	3.000	8.000



3)

Name	Adam	Rechnung	Cody	Dan	Ed
Punkte	25	5	30	50	20



4)

Name	Faye	Gregor	Hannah	Jane	Kelly
Staaten, in denen gelebt wurde	8	9	1	3	6

