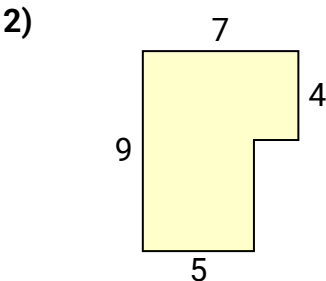
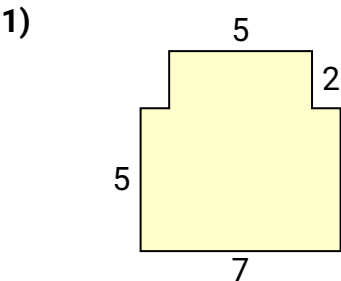




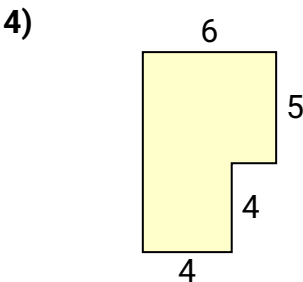
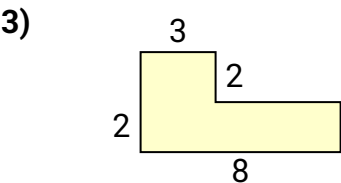
Bestimme die Gesamtfläche von jeder Form. Maßeinheit ist in mm. Abbildung ist nicht maßstäblich.

**Antworten**



1. \_\_\_\_\_

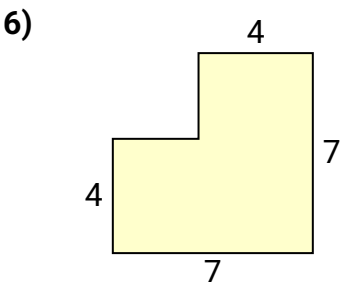
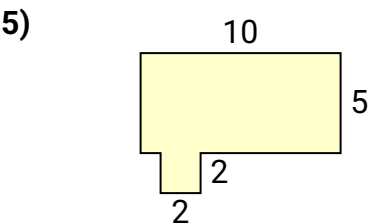
2. \_\_\_\_\_



3. \_\_\_\_\_

4. \_\_\_\_\_

5. \_\_\_\_\_



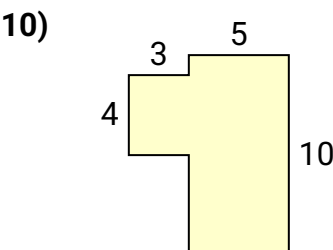
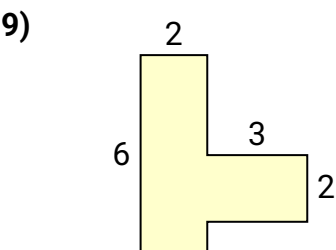
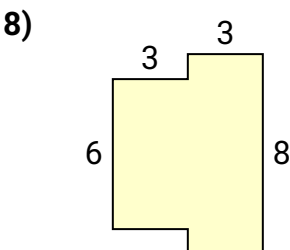
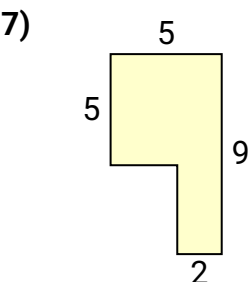
6. \_\_\_\_\_

7. \_\_\_\_\_

8. \_\_\_\_\_

9. \_\_\_\_\_

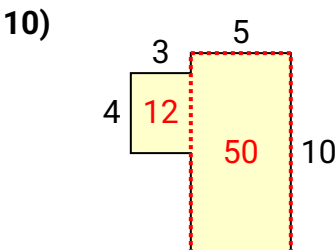
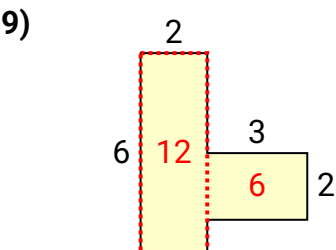
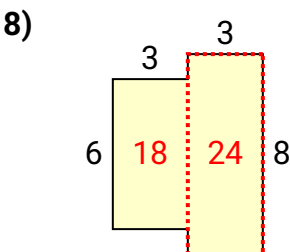
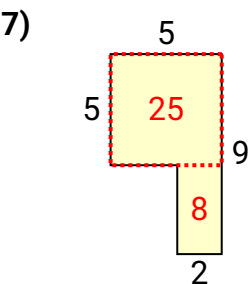
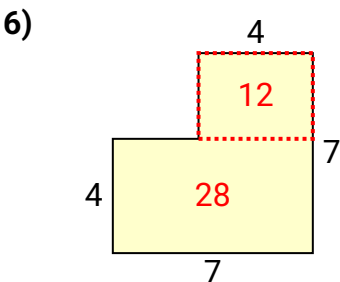
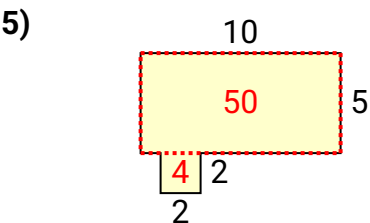
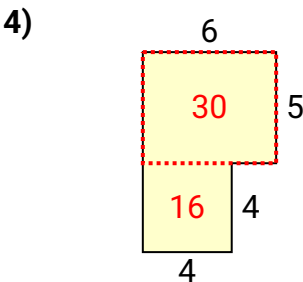
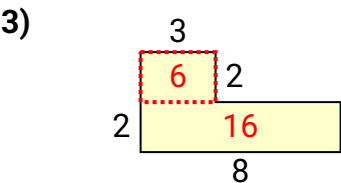
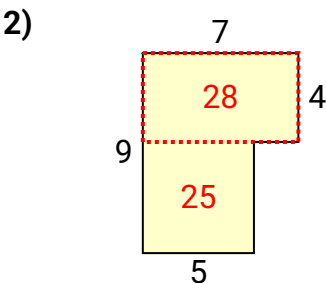
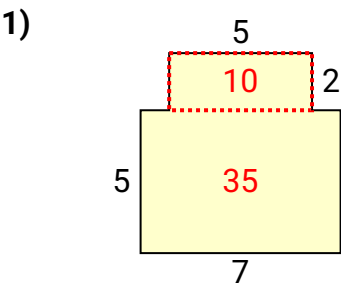
10. \_\_\_\_\_





Bestimme die Gesamtfläche von jeder Form. Maßeinheit ist in mm. Abbildung ist nicht maßstäblich.

**Antworten**



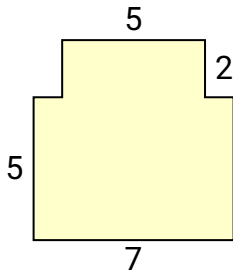
1. **45 mm<sup>2</sup>**
2. **53 mm<sup>2</sup>**
3. **22 mm<sup>2</sup>**
4. **46 mm<sup>2</sup>**
5. **54 mm<sup>2</sup>**
6. **40 mm<sup>2</sup>**
7. **33 mm<sup>2</sup>**
8. **42 mm<sup>2</sup>**
9. **18 mm<sup>2</sup>**
10. **62 mm<sup>2</sup>**



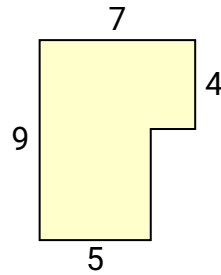
Bestimme die Gesamtfläche von jeder Form. Maßeinheit ist in mm. Abbildung ist nicht maßstäblich.

**Antworten**

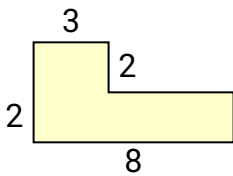
1)



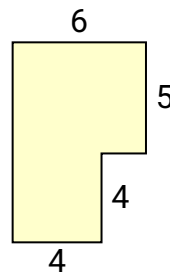
2)



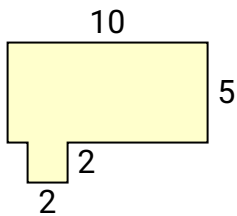
3)



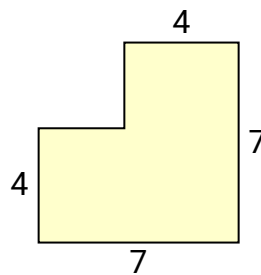
4)



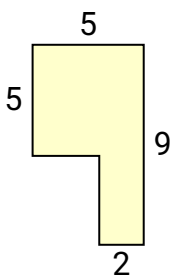
5)



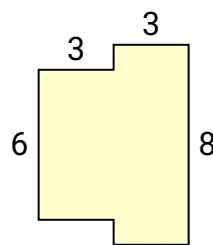
6)



7)



8)



1. \_\_\_\_\_
2. \_\_\_\_\_
3. \_\_\_\_\_
4. \_\_\_\_\_
5. \_\_\_\_\_
6. \_\_\_\_\_
7. \_\_\_\_\_
8. \_\_\_\_\_
9. \_\_\_\_\_
10. \_\_\_\_\_