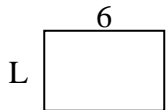




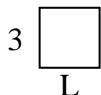
Berechne den Wert von 'L'.

Antworten

1) Umfang = 20



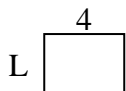
2) Umfang = 12




3) Umfang = 8



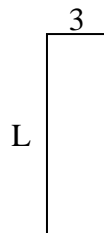
4) Umfang = 14



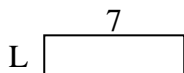
5) Umfang = 20



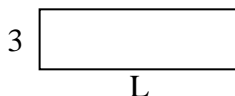
6) Umfang = 26



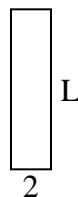
7) Umfang = 18



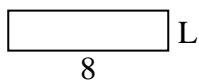
8) Umfang = 26



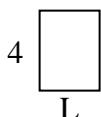
9) Umfang = 20



10) Umfang = 20



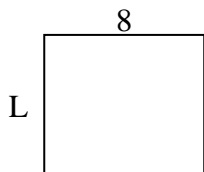
11) Umfang = 14



12) Umfang = 10



13) Umfang = 30



14) Umfang = 18



15) Umfang = 30



1. _____

2. _____

3. _____

4. _____

5. _____

6. _____

7. _____

8. _____

9. _____

10. _____

11. _____

12. _____

13. _____

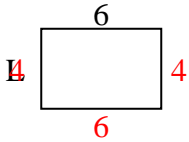
14. _____

15. _____

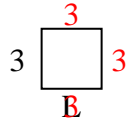


Berechne den Wert von 'L'.

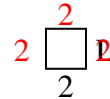
1) Umfang = 20



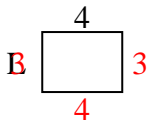
2) Umfang = 12



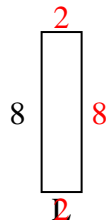
3) Umfang = 8



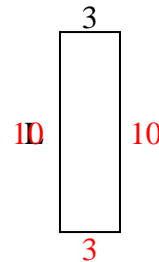
4) Umfang = 14



5) Umfang = 20



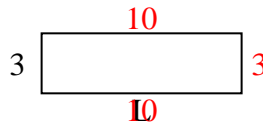
6) Umfang = 26



7) Umfang = 18



8) Umfang = 26



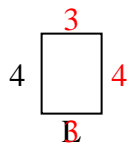
9) Umfang = 20



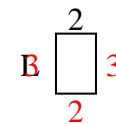
10) Umfang = 20



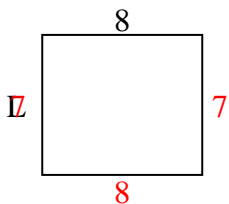
11) Umfang = 14



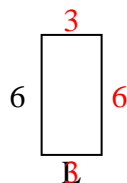
12) Umfang = 10



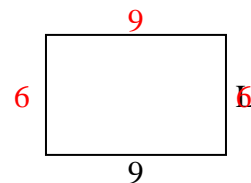
13) Umfang = 30



14) Umfang = 18



15) Umfang = 30

**Antworten**1. **4 cm**2. **3 cm**3. **2 cm**4. **3 cm**5. **2 cm**6. **10 cm**7. **2 cm**8. **10 cm**9. **8 cm**10. **2 cm**11. **3 cm**12. **3 cm**13. **7 cm**14. **3 cm**15. **6 cm**