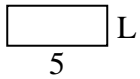


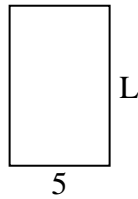


Berechne den Wert von 'L'.

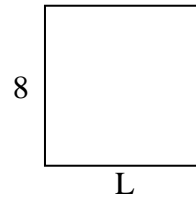
1) Fläche = $10u^2$



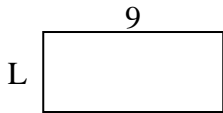
2) Fläche = $40u^2$



3) Fläche = $64u^2$



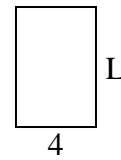
4) Fläche = $36u^2$



5) Fläche = $12u^2$




6) Fläche = $24u^2$



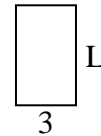
7) Fläche = $12u^2$



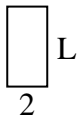
8) Fläche = $20u^2$



9) Fläche = $15u^2$



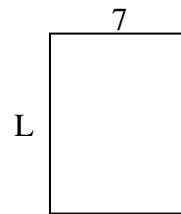
10) Fläche = $8u^2$



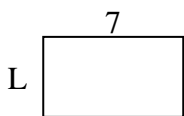
11) Fläche = $10u^2$



12) Fläche = $63u^2$



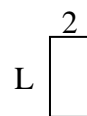
13) Fläche = $28u^2$



14) Fläche = $12u^2$



15) Fläche = $8u^2$



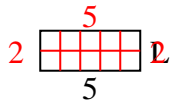
Antworten

1. _____
2. _____
3. _____
4. _____
5. _____
6. _____
7. _____
8. _____
9. _____
10. _____
11. _____
12. _____
13. _____
14. _____
15. _____

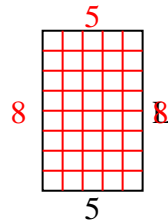


Berechne den Wert von 'L'.

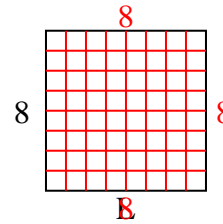
1) Fläche = $10u^2$



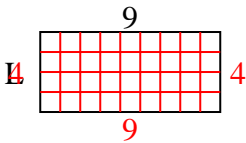
2) Fläche = $40u^2$



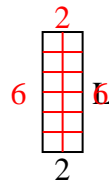
3) Fläche = $64u^2$



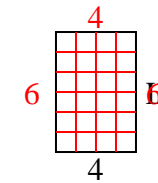
4) Fläche = $36u^2$



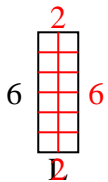
5) Fläche = $12u^2$



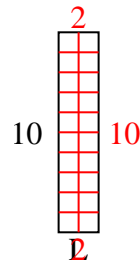
6) Fläche = $24u^2$



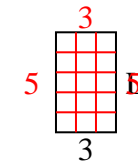
7) Fläche = $12u^2$



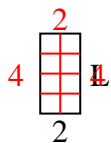
8) Fläche = $20u^2$



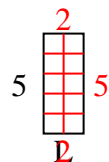
9) Fläche = $15u^2$



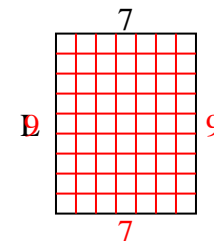
10) Fläche = $8u^2$



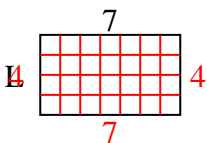
11) Fläche = $10u^2$



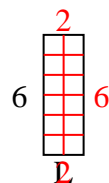
12) Fläche = $63u^2$



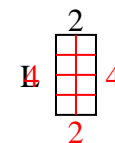
13) Fläche = $28u^2$



14) Fläche = $12u^2$



15) Fläche = $8u^2$

**Antworten**1. **2**2. **8**3. **8**4. **4**5. **6**6. **6**7. **2**8. **2**9. **5**10. **4**11. **2**12. **9**13. **4**14. **2**15. **4**